





Usar la matriz proporcionada para resolver cada problema.


1)  $43 \times 30 =$




2)  $32 \times 30 =$




3)  $20 \times 23 =$




4)  $25 \times 20 =$



5)  $20 \times 24 =$



6)  $22 \times 20 =$



**Respuestas**

1. \_\_\_\_\_

2. \_\_\_\_\_

3. \_\_\_\_\_

4. \_\_\_\_\_

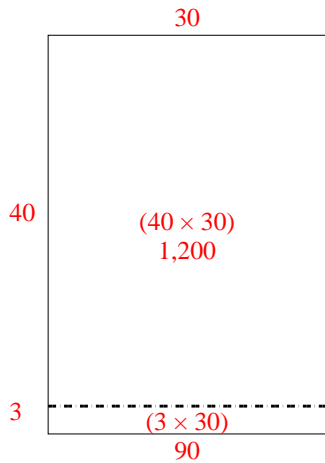
5. \_\_\_\_\_

6. \_\_\_\_\_

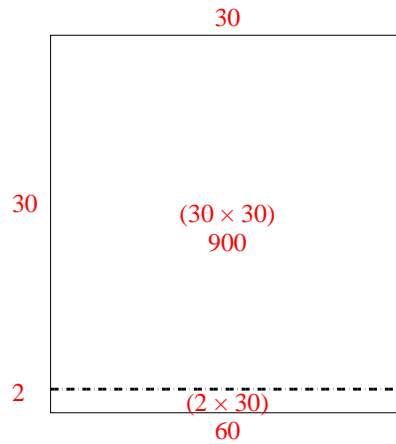


Usar la matriz proporcionada para resolver cada problema.

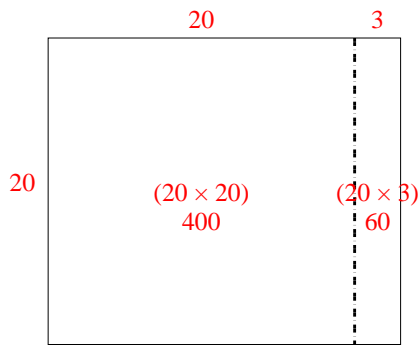
1)  $43 \times 30 =$



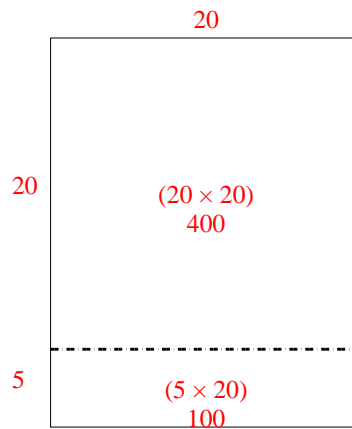
2)  $32 \times 30 =$



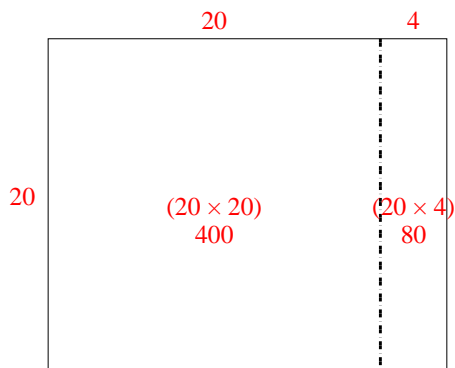
3)  $20 \times 23 =$



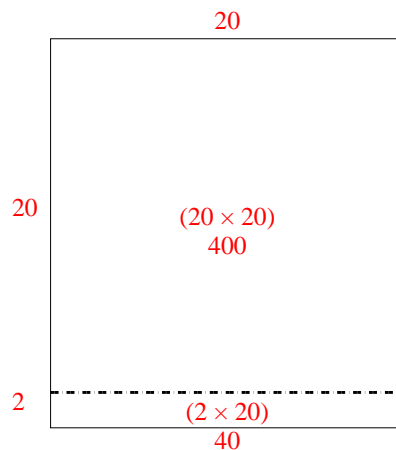
4)  $25 \times 20 =$



5)  $20 \times 24 =$



6)  $22 \times 20 =$



**Respuestas**

1. 1,290
2. 960
3. 460
4. 500
5. 480
6. 440