





Usar la matriz proporcionada para resolver cada problema.


1)  $20 \times 23 =$




2)  $28 \times 20 =$




3)  $24 \times 20 =$




4)  $26 \times 20 =$



5)  $20 \times 25 =$



6)  $20 \times 24 =$



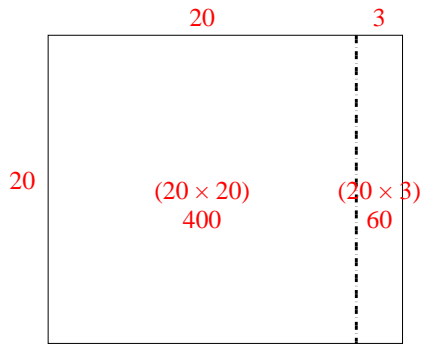
**Respuestas**

- 1. \_\_\_\_\_
- 2. \_\_\_\_\_
- 3. \_\_\_\_\_
- 4. \_\_\_\_\_
- 5. \_\_\_\_\_
- 6. \_\_\_\_\_

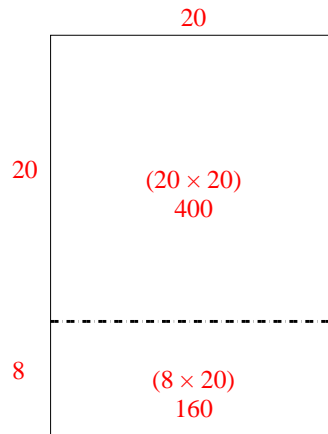


Usar la matriz proporcionada para resolver cada problema.

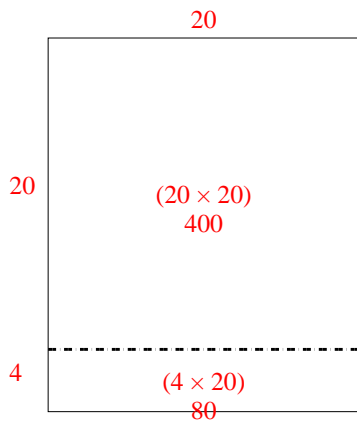
1)  $20 \times 23 =$



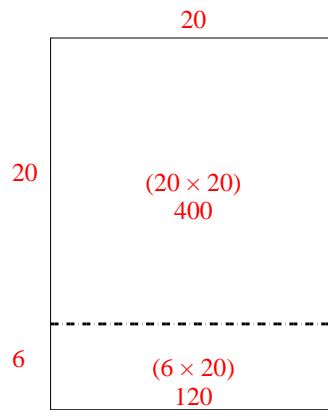
2)  $28 \times 20 =$



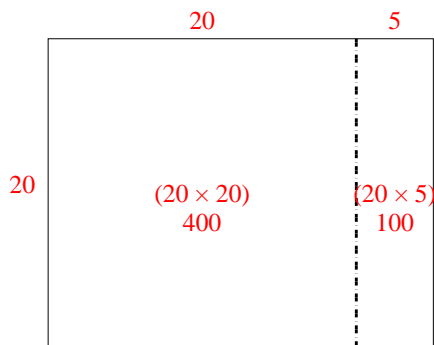
3)  $24 \times 20 =$



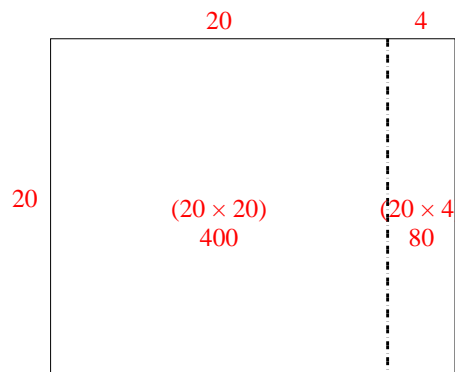
4)  $26 \times 20 =$



5)  $20 \times 25 =$



6)  $20 \times 24 =$



**Respuestas**

1. **460**

2. **560**

3. **480**

4. **520**

5. **500**

6. **480**