





Usar la matriz proporcionada para resolver cada problema.


1)  $32 \times 20 =$




2)  $30 \times 37 =$




3)  $20 \times 22 =$




4)  $20 \times 29 =$



5)  $23 \times 20 =$



6)  $28 \times 20 =$



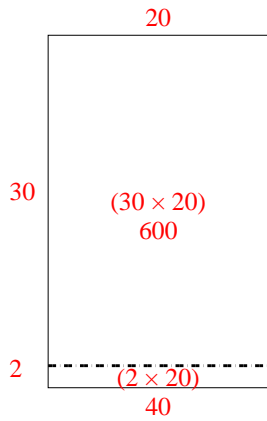
**Respuestas**

- 1. \_\_\_\_\_
- 2. \_\_\_\_\_
- 3. \_\_\_\_\_
- 4. \_\_\_\_\_
- 5. \_\_\_\_\_
- 6. \_\_\_\_\_

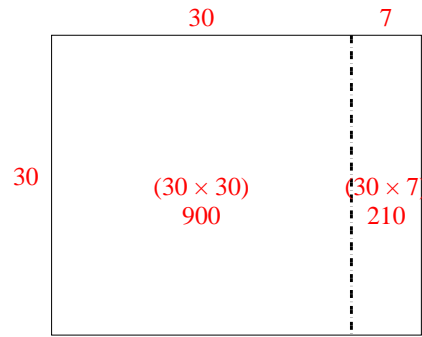


Usar la matriz proporcionada para resolver cada problema.

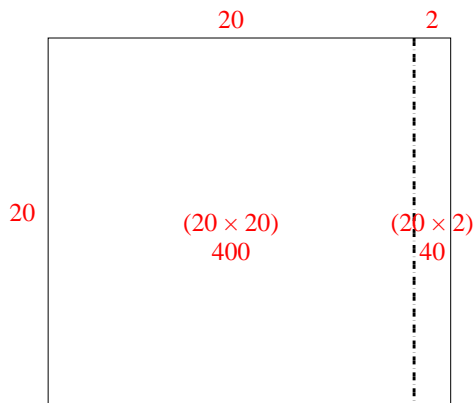
1)  $32 \times 20 =$



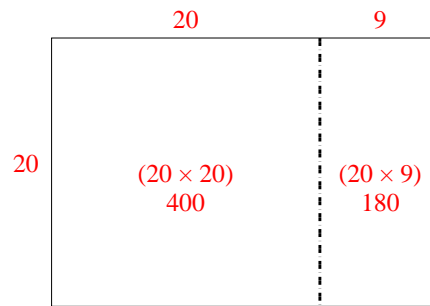
2)  $30 \times 37 =$



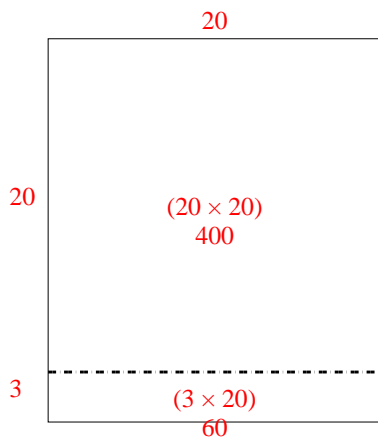
3)  $20 \times 22 =$



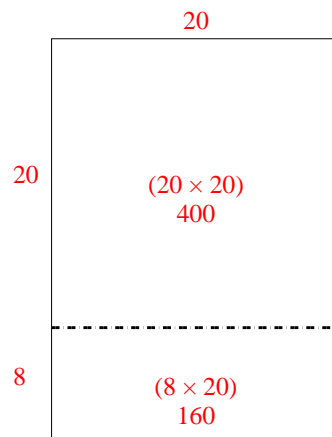
4)  $20 \times 29 =$



5)  $23 \times 20 =$



6)  $28 \times 20 =$



**Respuestas**

1. **640**

2. **1,110**

3. **440**

4. **580**

5. **460**

6. **560**