




Usar la matriz proporcionada para resolver cada problema.


1)  $20 \times 28 =$



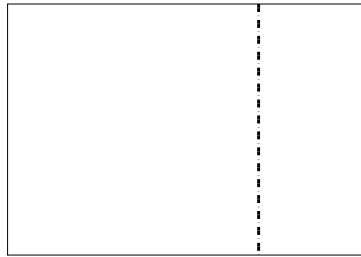
2)  $21 \times 20 =$




3)  $20 \times 22 =$




4)  $20 \times 29 =$



5)  $20 \times 27 =$



6)  $20 \times 23 =$



**Respuestas**

1. \_\_\_\_\_

2. \_\_\_\_\_

3. \_\_\_\_\_

4. \_\_\_\_\_

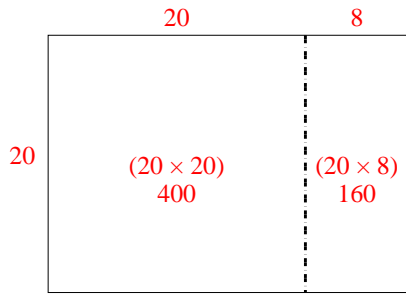
5. \_\_\_\_\_

6. \_\_\_\_\_

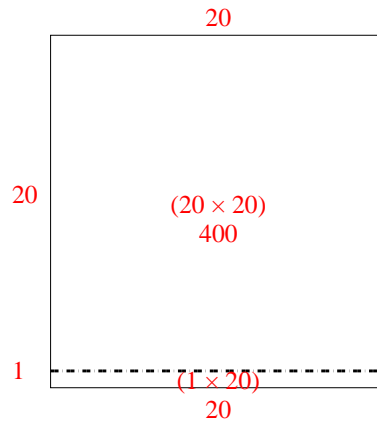


Usar la matriz proporcionada para resolver cada problema.

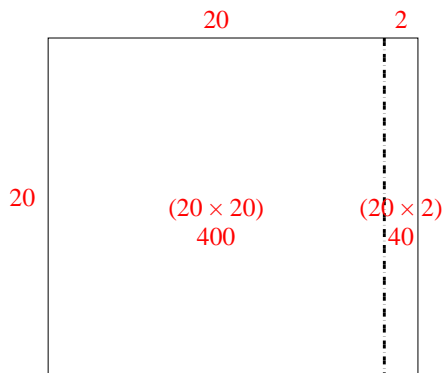
1)  $20 \times 28 =$



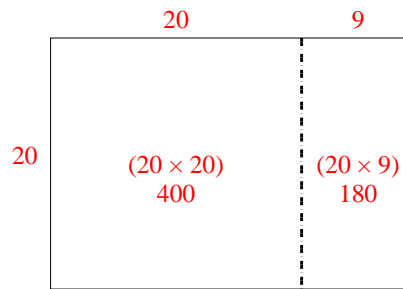
2)  $21 \times 20 =$



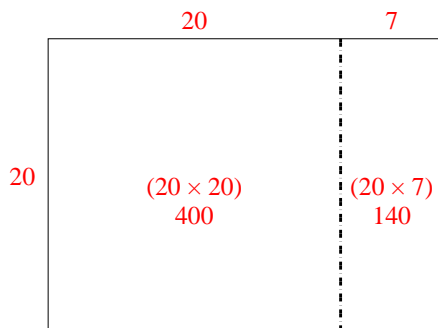
3)  $20 \times 22 =$



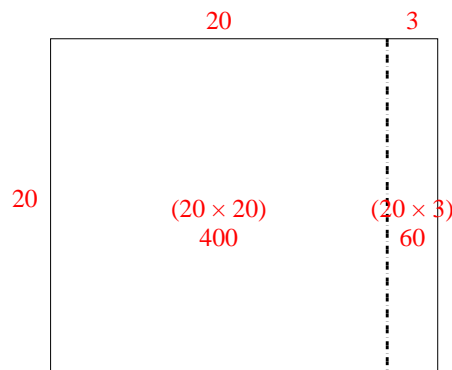
4)  $20 \times 29 =$



5)  $20 \times 27 =$



6)  $20 \times 23 =$



**Respuestas**

1. **560**

2. **420**

3. **440**

4. **580**

5. **540**

6. **460**