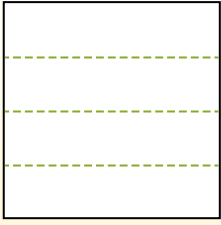


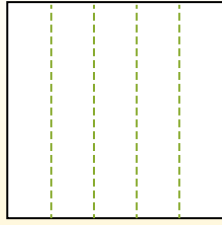


Dividir la forma que se muestra y después cuenta para encontrar el número de cajas.

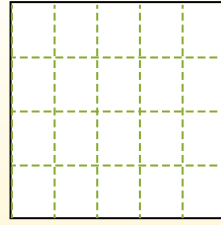
Las filas van de izquierda a derecha.




Las columnas van de arriba a abajo.




Aqui tem 4 linhas e 5 colunas .
Existem 20 caixas no total.




1) 3 filas
5 columnas




2) 3 filas
3 columnas




3) 2 filas
5 columnas




4) 3 filas
2 columnas




5) 4 filas
3 columnas




6) 4 filas
4 columnas




7) 4 filas
2 columnas



8) 3 filas
4 columnas



9) 5 filas
5 columnas



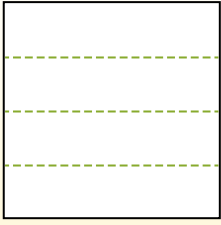
Respuestas

- 1. _____
- 2. _____
- 3. _____
- 4. _____
- 5. _____
- 6. _____
- 7. _____
- 8. _____
- 9. _____

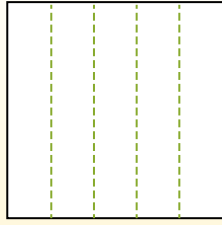


Dividir la forma que se muestra y después cuenta para encontrar el número de cajas.

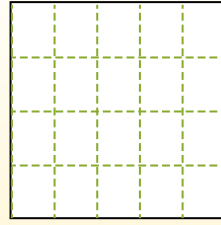
Las filas van de izquierda a derecha.



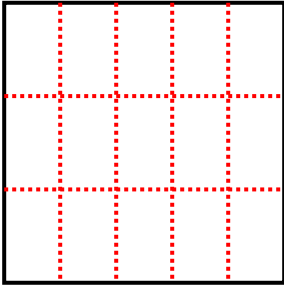
Las columnas van de arriba a abajo.



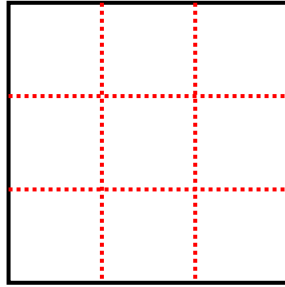
Aqui tem 4 linhas e 5 colunas .
Existem 20 caixas no total.



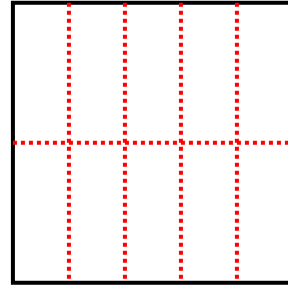
1) 3 filas
5 columnas



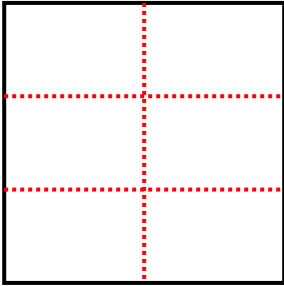
2) 3 filas
3 columnas



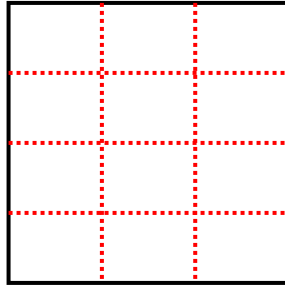
3) 2 filas
5 columnas



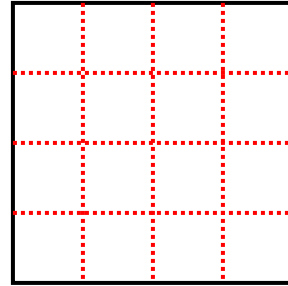
4) 3 filas
2 columnas



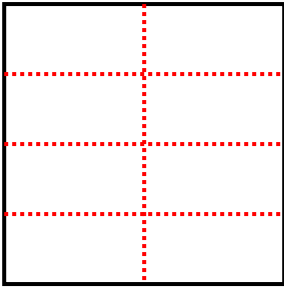
5) 4 filas
3 columnas



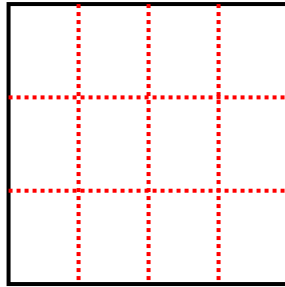
6) 4 filas
4 columnas



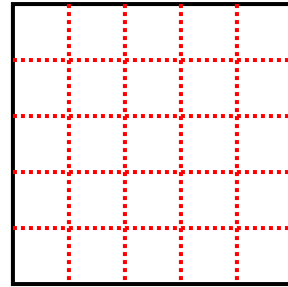
7) 4 filas
2 columnas



8) 3 filas
4 columnas



9) 5 filas
5 columnas



Respuestas

1. **15**

2. **9**

3. **10**

4. **6**

5. **12**

6. **16**

7. **8**

8. **12**

9. **25**