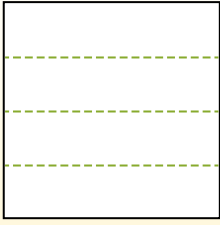


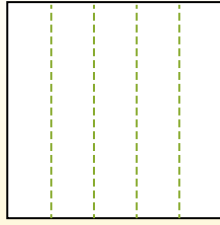


Dividir la forma que se muestra y después cuenta para encontrar el número de cajas.

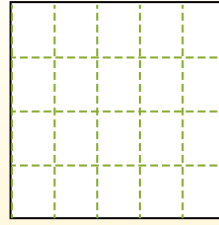
Las filas van de izquierda a derecha.




Las columnas van de arriba a abajo.




Aqui tem 4 linhas e 5 colunas .
Existem 20 caixas no total.




1) 4 filas
2 columnas




2) 2 filas
2 columnas




3) 5 filas
3 columnas




4) 5 filas
4 columnas




5) 3 filas
2 columnas




6) 4 filas
3 columnas




7) 5 filas
2 columnas



8) 4 filas
4 columnas



9) 3 filas
3 columnas



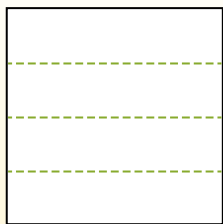
Respuestas

1. _____
2. _____
3. _____
4. _____
5. _____
6. _____
7. _____
8. _____
9. _____

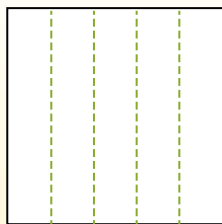


Dividir la forma que se muestra y después cuenta para encontrar el número de cajas.

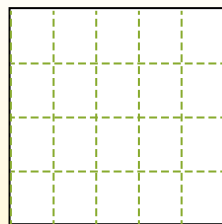
Las filas van de izquierda a derecha.



Las columnas van de arriba a abajo.

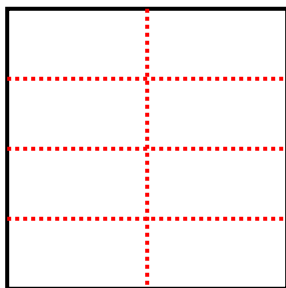


Aqui tem 4 linhas e 5 colunas .
Existem 20 caixas no total.



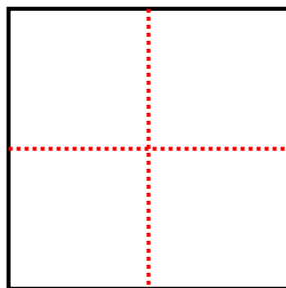
1) 4 filas

2 columnas



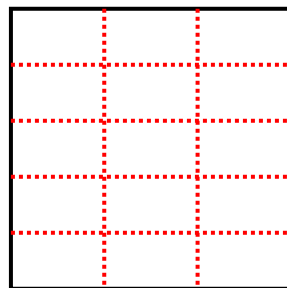
2) 2 filas

2 columnas




3) 5 filas

3 columnas



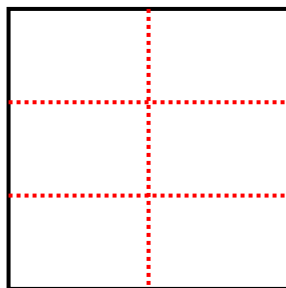
4) 5 filas

4 columnas



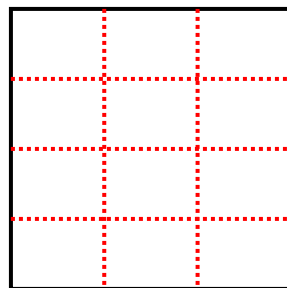
5) 3 filas

2 columnas



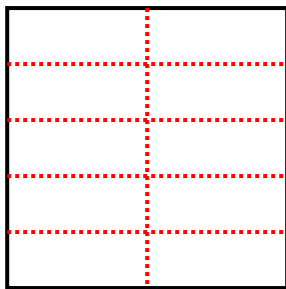
6) 4 filas

3 columnas



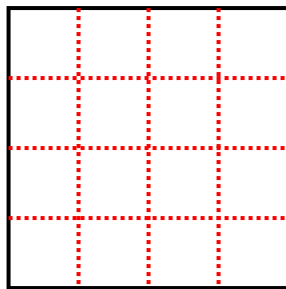
7) 5 filas

2 columnas



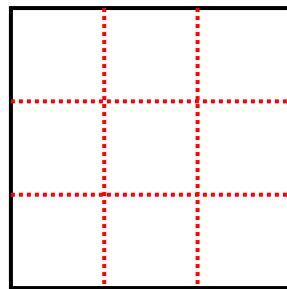
8) 4 filas

4 columnas



9) 3 filas

3 columnas



Respuestas

1. 8

2. 4

3. 15

4. 20

5. 6

6. 12

7. 10

8. 16

9. 9