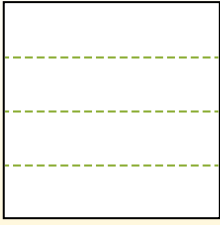


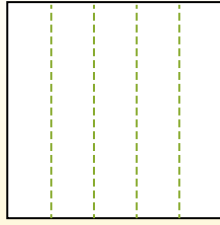


Dividir la forma que se muestra y después cuenta para encontrar el número de cajas.

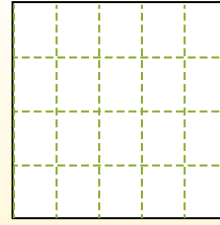
Las filas van de izquierda a derecha.




Las columnas van de arriba a abajo.




Aqui tem 4 linhas e 5 colunas .  
Existem 20 caixas no total.




1) 2 filas  
3 columnas




2) 5 filas  
4 columnas




3) 5 filas  
2 columnas




4) 4 filas  
2 columnas




5) 2 filas  
2 columnas




6) 4 filas  
3 columnas




7) 5 filas  
3 columnas



8) 3 filas  
2 columnas



9) 2 filas  
4 columnas



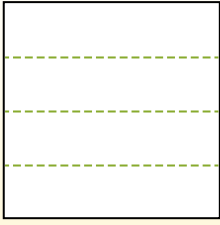
**Respuestas**

- 1. \_\_\_\_\_
- 2. \_\_\_\_\_
- 3. \_\_\_\_\_
- 4. \_\_\_\_\_
- 5. \_\_\_\_\_
- 6. \_\_\_\_\_
- 7. \_\_\_\_\_
- 8. \_\_\_\_\_
- 9. \_\_\_\_\_

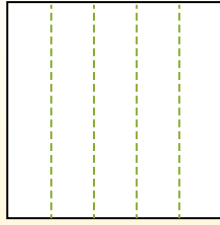


Dividir la forma que se muestra y después cuenta para encontrar el número de cajas.

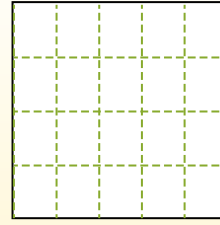
Las filas van de izquierda a derecha.



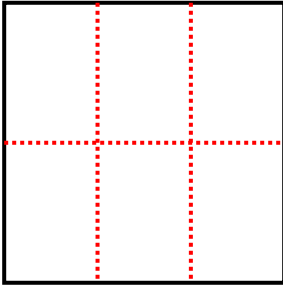
Las columnas van de arriba a abajo.



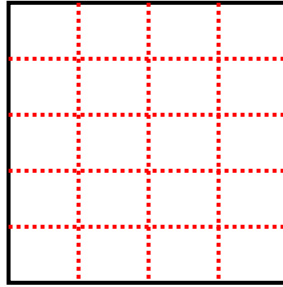
Aqui tem 4 linhas e 5 colunas. Existem 20 caixas no total.



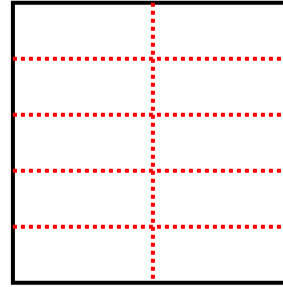
1) 2 filas  
3 columnas



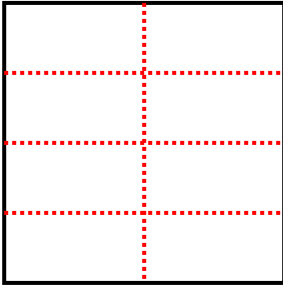
2) 5 filas  
4 columnas



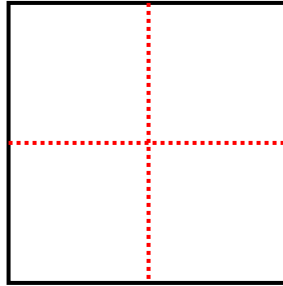
3) 5 filas  
2 columnas



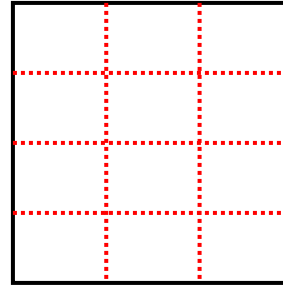
4) 4 filas  
2 columnas



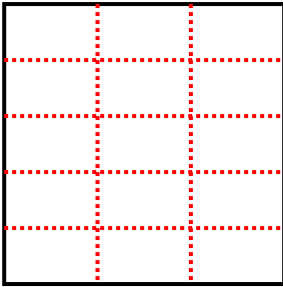
5) 2 filas  
2 columnas



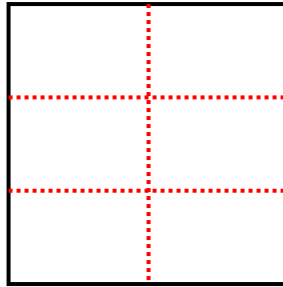
6) 4 filas  
3 columnas



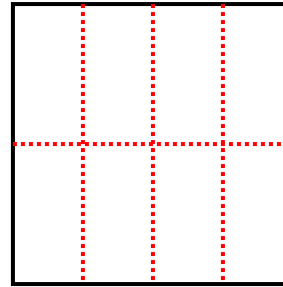
7) 5 filas  
3 columnas



8) 3 filas  
2 columnas



9) 2 filas  
4 columnas



**Respuestas**

1. 6

2. 20

3. 10

4. 8

5. 4

6. 12

7. 15

8. 6

9. 8