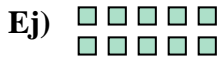




Escribir cada matriz como un problema de multiplicación y resolver.



Respuestas



Ej. 2 × 5 = 10

1. 6 × 10 = 60

2. 3 × 7 = 21

3. 10 × 3 = 30


4. 3 × 8 = 24



5. 7 × 3 = 21

6. 9 × 5 = 45

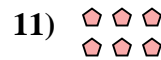

7. 9 × 6 = 54



8. 4 × 10 = 40

9. 6 × 9 = 54

10. 6 × 5 = 30



11. 2 × 3 = 6