
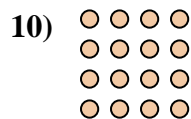



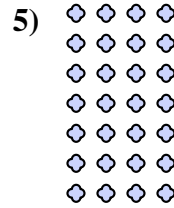







Escribir cada matriz como un problema de multiplicación y resolver.



Respuestas

Ej. $6 \times 7 = 42$

1. $7 \times 10 = 70$

2. $3 \times 4 = 12$

3. $3 \times 8 = 24$

4. $5 \times 4 = 20$

5. $7 \times 4 = 28$

6. $4 \times 9 = 36$

7. $4 \times 10 = 40$

8. $2 \times 8 = 16$

9. $8 \times 9 = 72$

10. $4 \times 4 = 16$

11. $7 \times 9 = 63$

