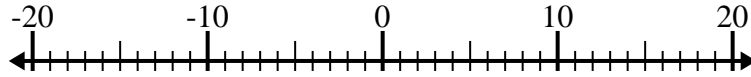


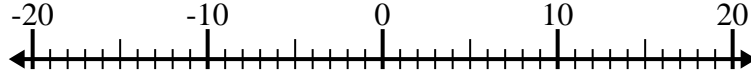


Resolver cada problema. Usar la recta numérica si lo necesitas.

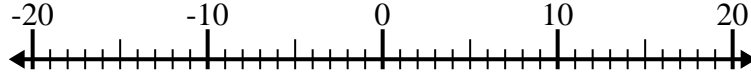
1) $(-11) - 2 =$ _____



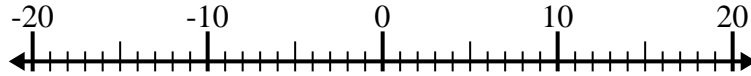
2) $(-2) - (-1) =$ _____



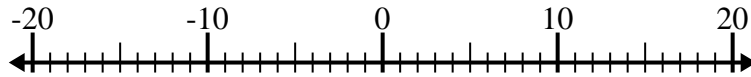
3) $4 - (-14) =$ _____



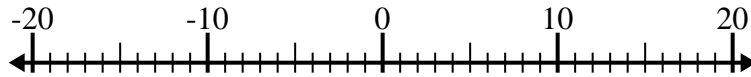
4) $8 - (-4) =$ _____



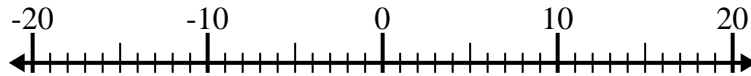
5) $(-8) + (-12) =$ _____



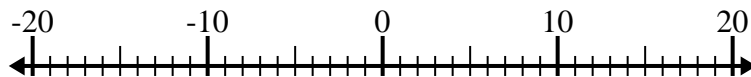
6) $(-14) + 9 =$ _____



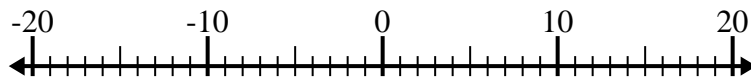
7) $(-6) + (-8) =$ _____



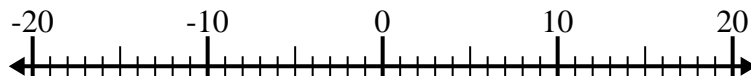
8) $15 + (-6) =$ _____



9) $7 + (-11) =$ _____



10) $(-5) - 4 =$ _____



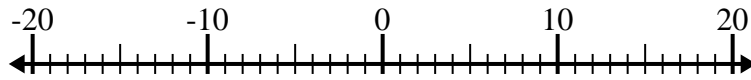
Respuestas

1. _____
2. _____
3. _____
4. _____
5. _____
6. _____
7. _____
8. _____
9. _____
10. _____

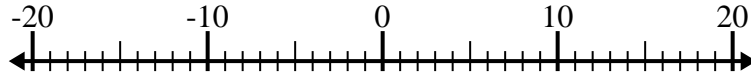


Resolver cada problema. Usar la recta numérica si lo necesitas.

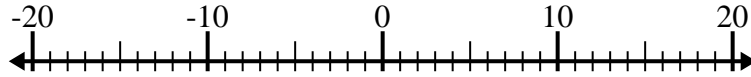
1) $(-11) - 2 = \underline{-13}$



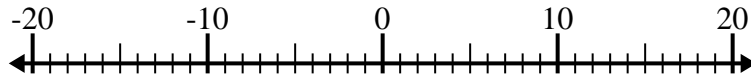
2) $(-2) - (-1) = \underline{-1}$



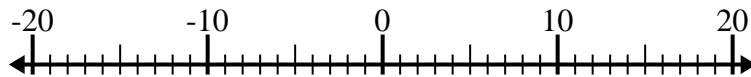
3) $4 - (-14) = \underline{18}$



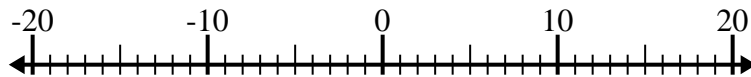
4) $8 - (-4) = \underline{12}$



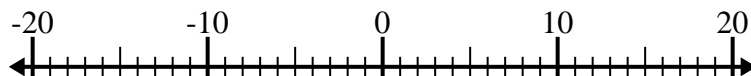
5) $(-8) + (-12) = \underline{-20}$



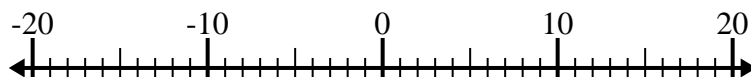
6) $(-14) + 9 = \underline{-5}$



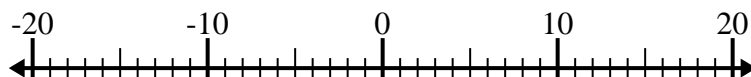
7) $(-6) + (-8) = \underline{-14}$



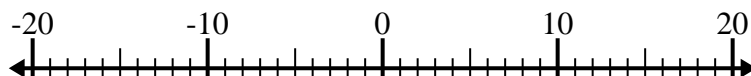
8) $15 + (-6) = \underline{9}$



9) $7 + (-11) = \underline{-4}$



10) $(-5) - 4 = \underline{-9}$

**Respuestas**1. **-13**2. **-1**3. **18**4. **12**5. **-20**6. **-5**7. **-14**8. **9**9. **-4**10. **-9**