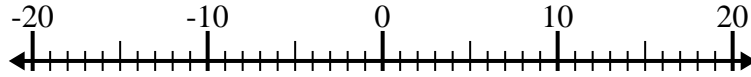


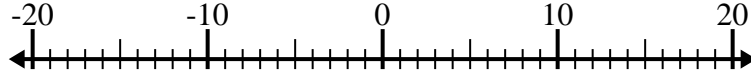


Resolver cada problema. Usar la recta numérica si lo necesitas.

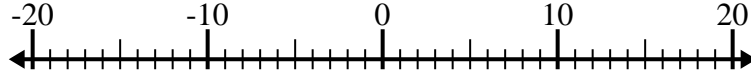
1) $(-9) - 11 =$ _____



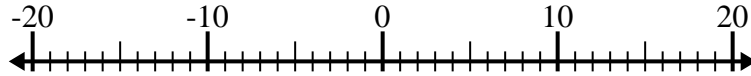
2) $(-14) - (-1) =$ _____



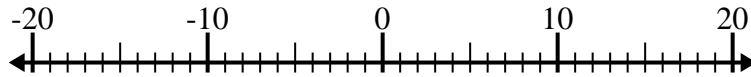
3) $7 + (-1) =$ _____



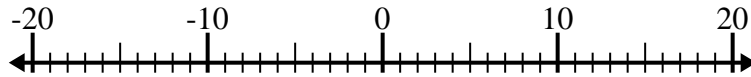
4) $(-13) + (-3) =$ _____



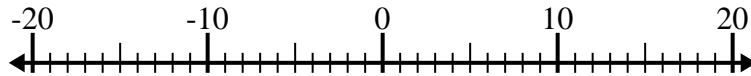
5) $11 + (-15) =$ _____



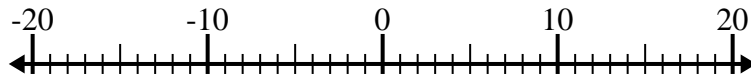
6) $10 - (-4) =$ _____



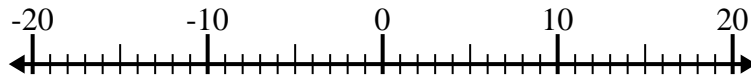
7) $(-4) - 9 =$ _____



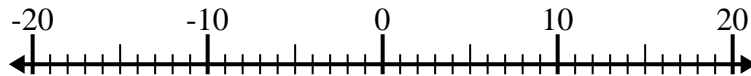
8) $3 - (-14) =$ _____



9) $(-3) + 6 =$ _____



10) $(-10) - (-7) =$ _____



Respuestas

1. _____
2. _____
3. _____
4. _____
5. _____
6. _____
7. _____
8. _____
9. _____
10. _____



Resolver cada problema. Usar la recta numérica si lo necesitas.

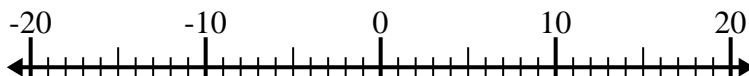
1) $(-9) - 11 = \underline{-20}$



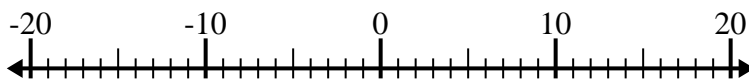
2) $(-14) - (-1) = \underline{-13}$



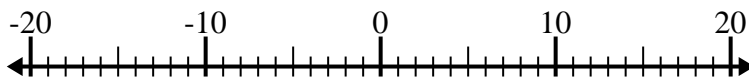
3) $7 + (-1) = \underline{6}$



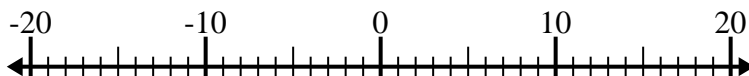
4) $(-13) + (-3) = \underline{-16}$



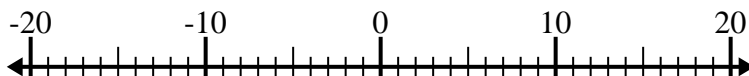
5) $11 + (-15) = \underline{-4}$



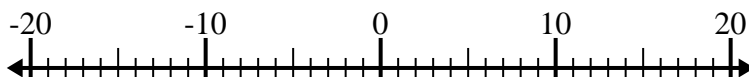
6) $10 - (-4) = \underline{14}$



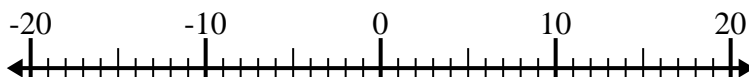
7) $(-4) - 9 = \underline{-13}$



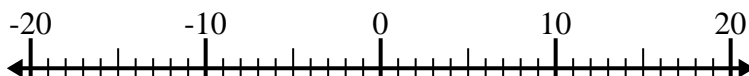
8) $3 - (-14) = \underline{17}$



9) $(-3) + 6 = \underline{3}$



10) $(-10) - (-7) = \underline{-3}$

**Respuestas**1. **-20**2. **-13**3. **6**4. **-16**5. **-4**6. **14**7. **-13**8. **17**9. **3**10. **-3**