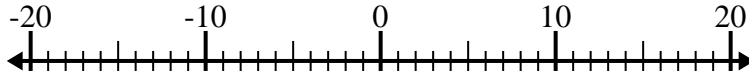


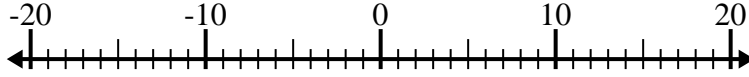


Resolver cada problema. Usar la recta numérica si lo necesitas.

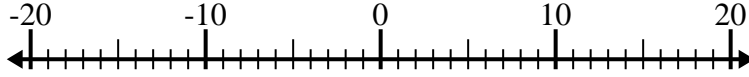
1) $(-3) - 9 =$ _____



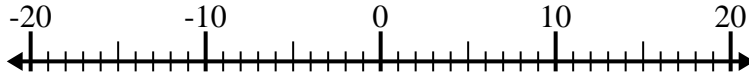
2) $(-11) + (-7) =$ _____



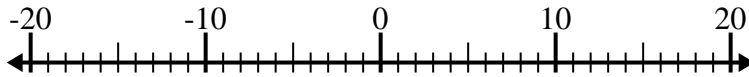
3) $(-15) + 11 =$ _____



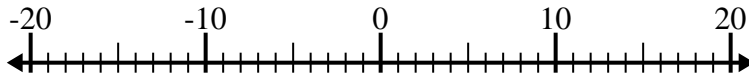
4) $10 - (-4) =$ _____



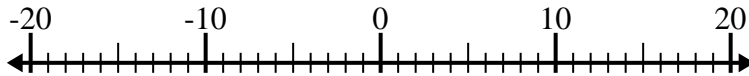
5) $(-2) + (-5) =$ _____



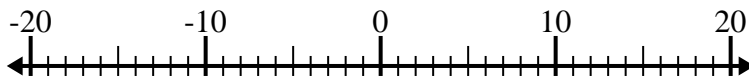
6) $(-14) - (-7) =$ _____



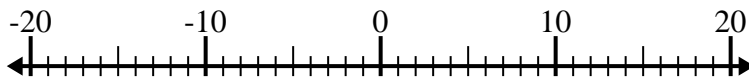
7) $(-10) - 1 =$ _____



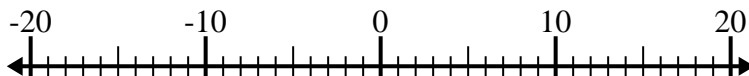
8) $10 - (-6) =$ _____



9) $13 + (-1) =$ _____



10) $(-8) + 4 =$ _____



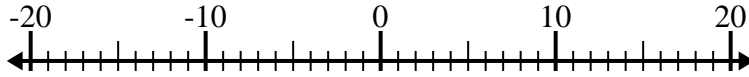
Respuestas

1. _____
2. _____
3. _____
4. _____
5. _____
6. _____
7. _____
8. _____
9. _____
10. _____

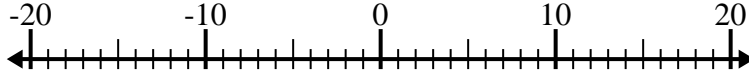


Resolver cada problema. Usar la recta numérica si lo necesitas.

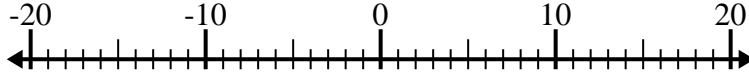
1) $(-3) - 9 = \underline{-12}$



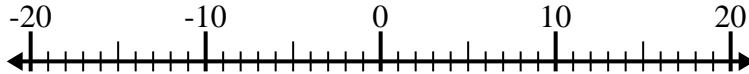
2) $(-11) + (-7) = \underline{-18}$



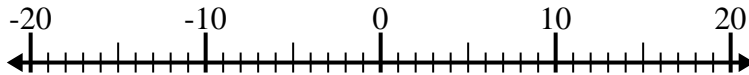
3) $(-15) + 11 = \underline{-4}$



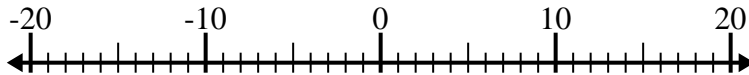
4) $10 - (-4) = \underline{14}$



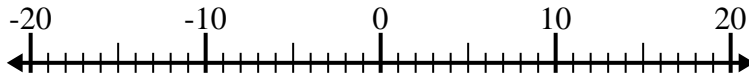
5) $(-2) + (-5) = \underline{-7}$



6) $(-14) - (-7) = \underline{-7}$



7) $(-10) - 1 = \underline{-11}$



8) $10 - (-6) = \underline{16}$



9) $13 + (-1) = \underline{12}$



10) $(-8) + 4 = \underline{-4}$

**Respuestas**1. **-12**2. **-18**3. **-4**4. **14**5. **-7**6. **-7**7. **-11**8. **16**9. **12**10. **-4**