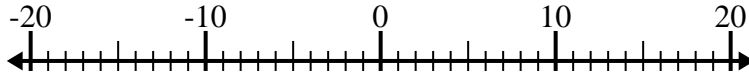




Resolver cada problema. Usar la recta numérica si lo necesitas.

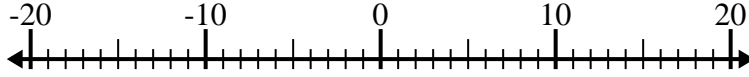
**Respuestas**

1)  $(-11) - 2 =$  \_\_\_\_\_



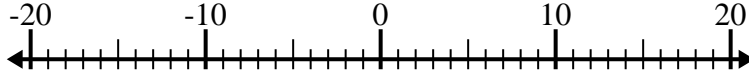
1. \_\_\_\_\_

2)  $(-2) - (-1) =$  \_\_\_\_\_



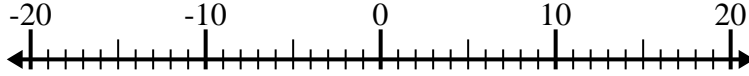
2. \_\_\_\_\_

3)  $4 - (-14) =$  \_\_\_\_\_



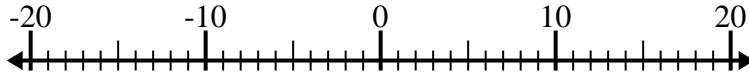
3. \_\_\_\_\_

4)  $8 - (-4) =$  \_\_\_\_\_



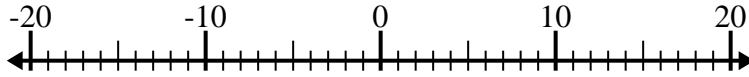
4. \_\_\_\_\_

5)  $(-8) + (-12) =$  \_\_\_\_\_



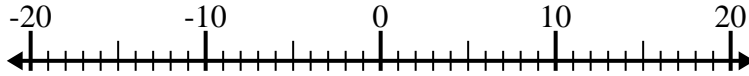
5. \_\_\_\_\_

6)  $(-14) + 9 =$  \_\_\_\_\_



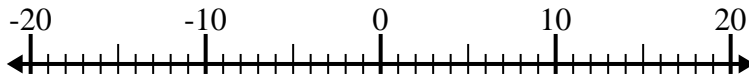
6. \_\_\_\_\_

7)  $(-6) + (-8) =$  \_\_\_\_\_



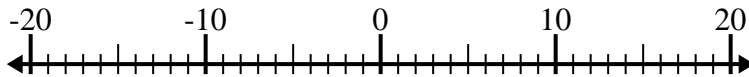
7. \_\_\_\_\_

8)  $15 + (-6) =$  \_\_\_\_\_



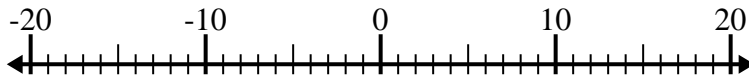
8. \_\_\_\_\_

9)  $7 + (-11) =$  \_\_\_\_\_



9. \_\_\_\_\_

10)  $(-5) - 4 =$  \_\_\_\_\_

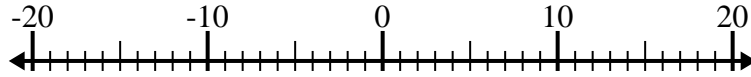


10. \_\_\_\_\_

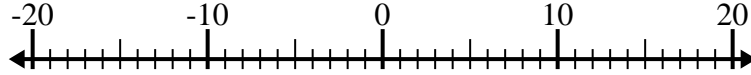


Resolver cada problema. Usar la recta numérica si lo necesitas.

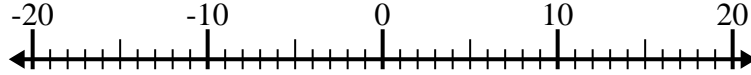
1)  $(-11) - 2 = \underline{-13}$



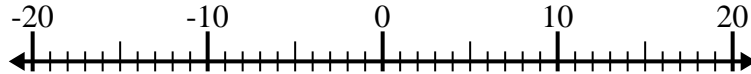
2)  $(-2) - (-1) = \underline{-1}$



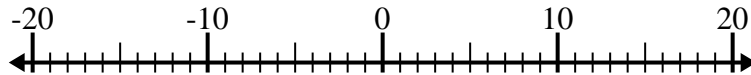
3)  $4 - (-14) = \underline{18}$



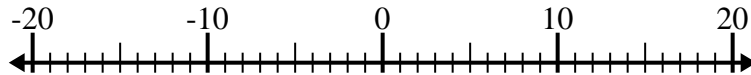
4)  $8 - (-4) = \underline{12}$



5)  $(-8) + (-12) = \underline{-20}$



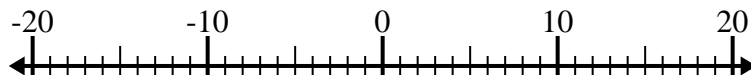
6)  $(-14) + 9 = \underline{-5}$



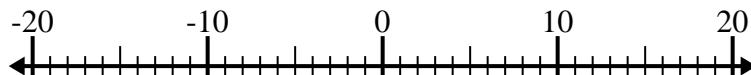
7)  $(-6) + (-8) = \underline{-14}$



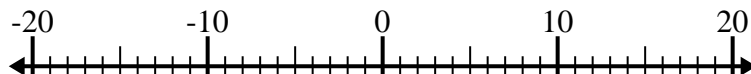
8)  $15 + (-6) = \underline{9}$



9)  $7 + (-11) = \underline{-4}$



10)  $(-5) - 4 = \underline{-9}$



**Respuestas**

1. **-13**

2. **-1**

3. **18**

4. **12**

5. **-20**

6. **-5**

7. **-14**

8. **9**

9. **-4**

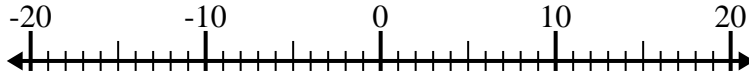
10. **-9**



Resolver cada problema. Usar la recta numérica si lo necesitas.

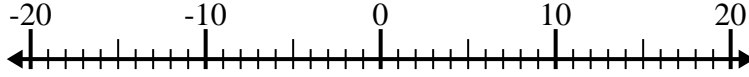
**Respuestas**

1)  $(-15) - (-7) =$  \_\_\_\_\_



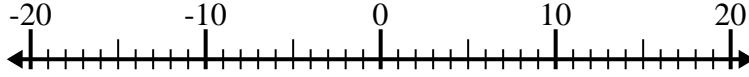
1. \_\_\_\_\_

2)  $(-9) - 4 =$  \_\_\_\_\_



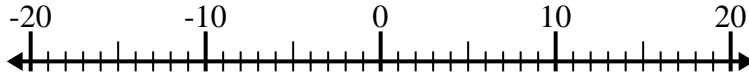
2. \_\_\_\_\_

3)  $7 - (-13) =$  \_\_\_\_\_



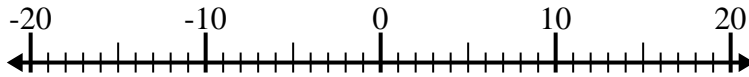
3. \_\_\_\_\_

4)  $(-5) + (-11) =$  \_\_\_\_\_



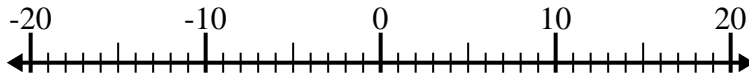
4. \_\_\_\_\_

5)  $(-12) + 4 =$  \_\_\_\_\_



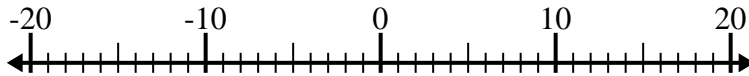
5. \_\_\_\_\_

6)  $14 - (-2) =$  \_\_\_\_\_



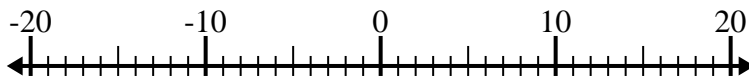
6. \_\_\_\_\_

7)  $1 + (-13) =$  \_\_\_\_\_



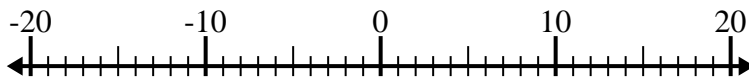
7. \_\_\_\_\_

8)  $(-4) - (-7) =$  \_\_\_\_\_



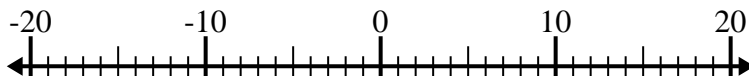
8. \_\_\_\_\_

9)  $(-9) - 11 =$  \_\_\_\_\_



9. \_\_\_\_\_

10)  $(-15) + (-1) =$  \_\_\_\_\_

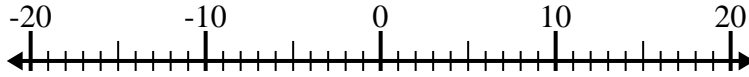


10. \_\_\_\_\_

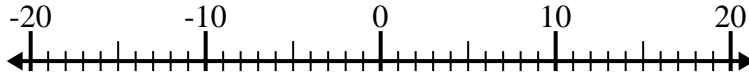


Resolver cada problema. Usar la recta numérica si lo necesitas.

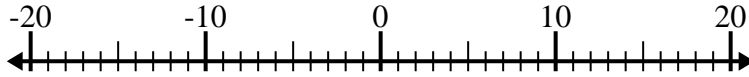
1)  $(-15) - (-7) = \underline{-8}$



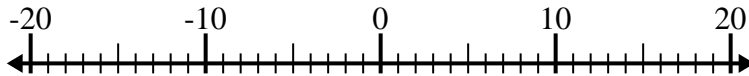
2)  $(-9) - 4 = \underline{-13}$



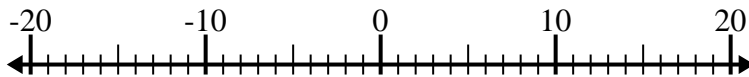
3)  $7 - (-13) = \underline{20}$



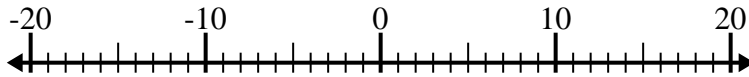
4)  $(-5) + (-11) = \underline{-16}$



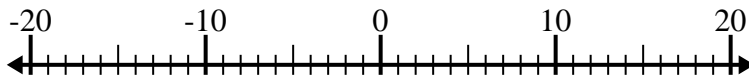
5)  $(-12) + 4 = \underline{-8}$



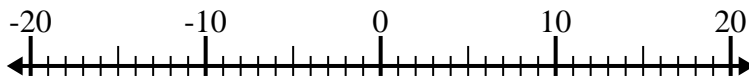
6)  $14 - (-2) = \underline{16}$



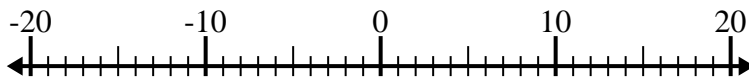
7)  $1 + (-13) = \underline{-12}$



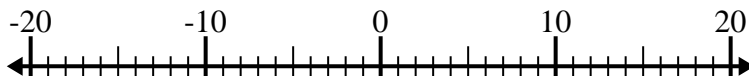
8)  $(-4) - (-7) = \underline{3}$



9)  $(-9) - 11 = \underline{-20}$



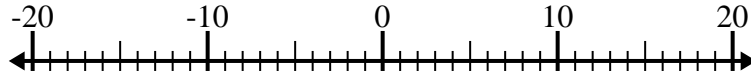
10)  $(-15) + (-1) = \underline{-16}$

**Respuestas**1. **-8**2. **-13**3. **20**4. **-16**5. **-8**6. **16**7. **-12**8. **3**9. **-20**10. **-16**

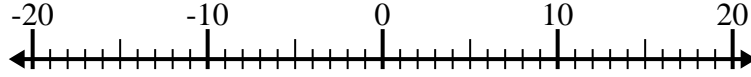


Resolver cada problema. Usar la recta numérica si lo necesitas.

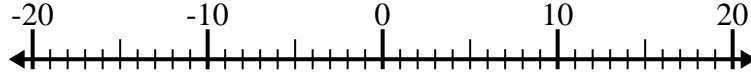
1)  $8 - (-12) =$  \_\_\_\_\_



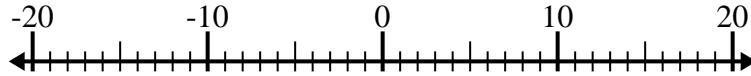
2)  $(-8) + (-6) =$  \_\_\_\_\_



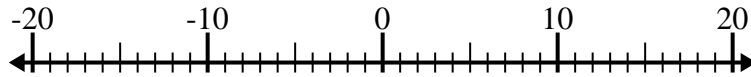
3)  $12 + (-2) =$  \_\_\_\_\_



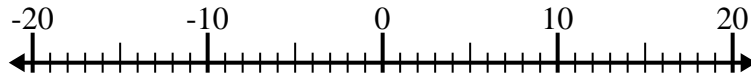
4)  $(-2) + (-13) =$  \_\_\_\_\_



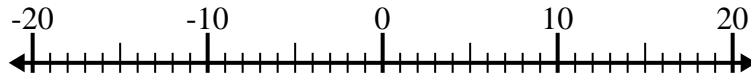
5)  $(-6) + 8 =$  \_\_\_\_\_



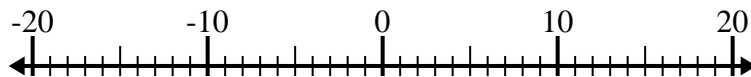
6)  $(-5) - 10 =$  \_\_\_\_\_



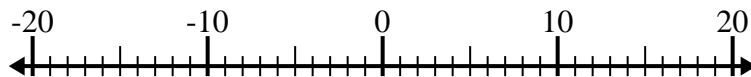
7)  $(-14) - (-8) =$  \_\_\_\_\_



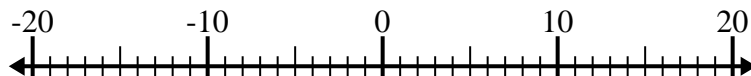
8)  $5 - (-2) =$  \_\_\_\_\_



9)  $(-11) - (-14) =$  \_\_\_\_\_



10)  $14 + (-10) =$  \_\_\_\_\_



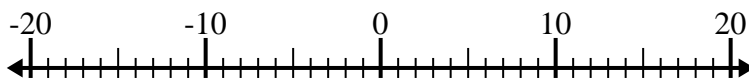
**Respuestas**

1. \_\_\_\_\_
2. \_\_\_\_\_
3. \_\_\_\_\_
4. \_\_\_\_\_
5. \_\_\_\_\_
6. \_\_\_\_\_
7. \_\_\_\_\_
8. \_\_\_\_\_
9. \_\_\_\_\_
10. \_\_\_\_\_

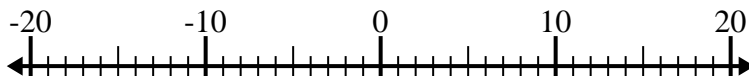


Resolver cada problema. Usar la recta numérica si lo necesitas.

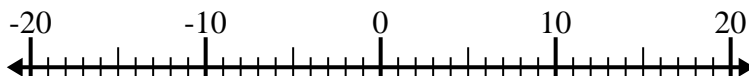
1)  $8 - (-12) = \underline{20}$



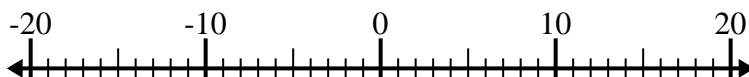
2)  $(-8) + (-6) = \underline{-14}$



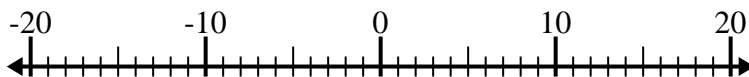
3)  $12 + (-2) = \underline{10}$



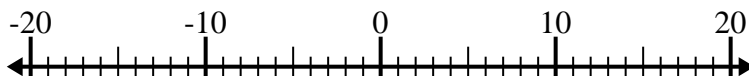
4)  $(-2) + (-13) = \underline{-15}$



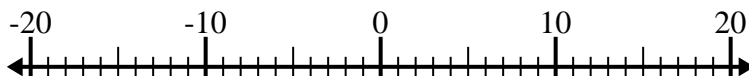
5)  $(-6) + 8 = \underline{2}$



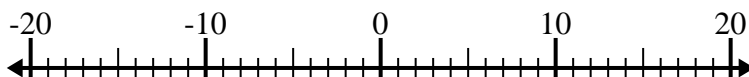
6)  $(-5) - 10 = \underline{-15}$



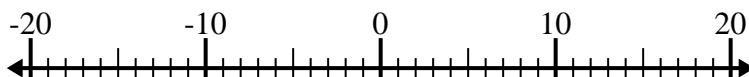
7)  $(-14) - (-8) = \underline{-6}$



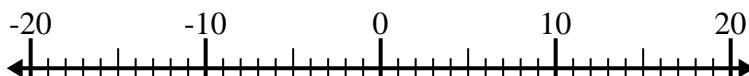
8)  $5 - (-2) = \underline{7}$



9)  $(-11) - (-14) = \underline{3}$



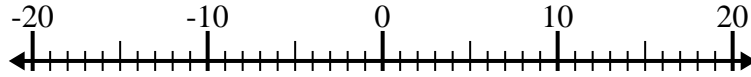
10)  $14 + (-10) = \underline{4}$

**Respuestas**1. **20**2. **-14**3. **10**4. **-15**5. **2**6. **-15**7. **-6**8. **7**9. **3**10. **4**

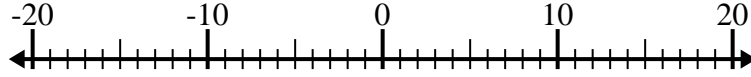


Resolver cada problema. Usar la recta numérica si lo necesitas.

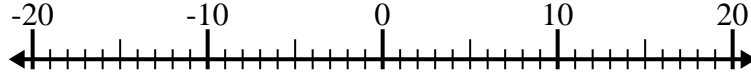
1)  $(-2) + (-8) =$  \_\_\_\_\_



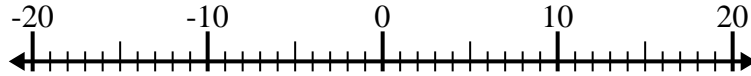
2)  $9 - (-7) =$  \_\_\_\_\_



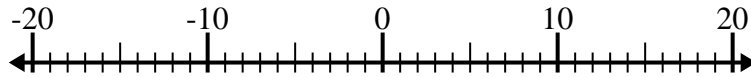
3)  $(-7) + 13 =$  \_\_\_\_\_



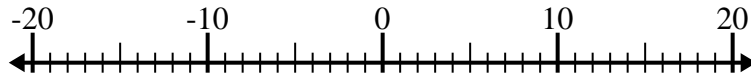
4)  $(-11) - 3 =$  \_\_\_\_\_



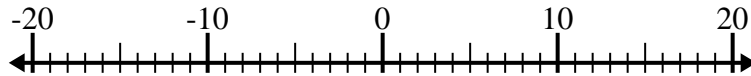
5)  $1 + (-2) =$  \_\_\_\_\_



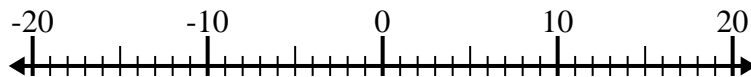
6)  $(-8) - (-4) =$  \_\_\_\_\_



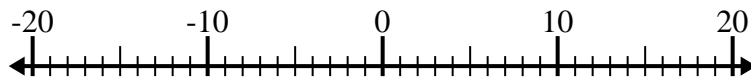
7)  $(-4) - (-13) =$  \_\_\_\_\_



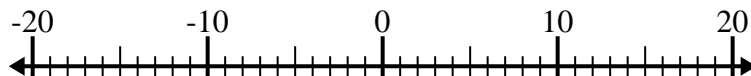
8)  $1 - (-14) =$  \_\_\_\_\_



9)  $(-7) + 15 =$  \_\_\_\_\_



10)  $(-5) + (-4) =$  \_\_\_\_\_



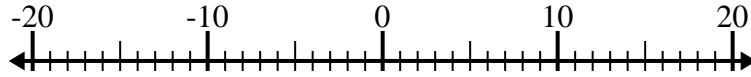
**Respuestas**

1. \_\_\_\_\_
2. \_\_\_\_\_
3. \_\_\_\_\_
4. \_\_\_\_\_
5. \_\_\_\_\_
6. \_\_\_\_\_
7. \_\_\_\_\_
8. \_\_\_\_\_
9. \_\_\_\_\_
10. \_\_\_\_\_

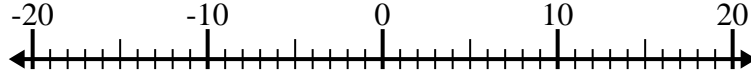


Resolver cada problema. Usar la recta numérica si lo necesitas.

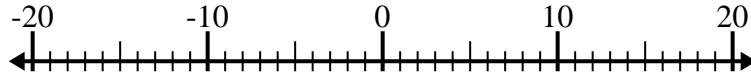
1)  $(-2) + (-8) = \underline{-10}$



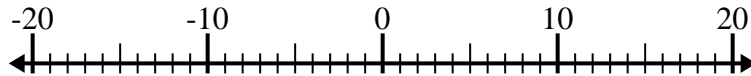
2)  $9 - (-7) = \underline{16}$



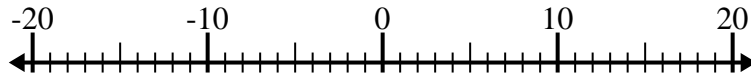
3)  $(-7) + 13 = \underline{6}$



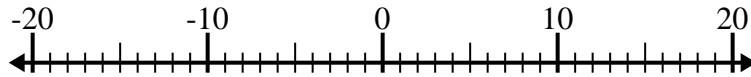
4)  $(-11) - 3 = \underline{-14}$



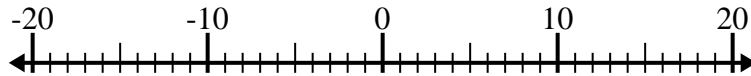
5)  $1 + (-2) = \underline{-1}$



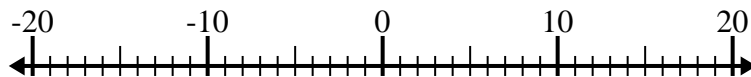
6)  $(-8) - (-4) = \underline{-4}$



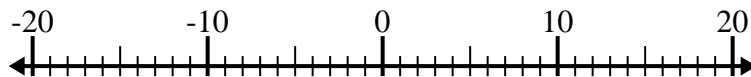
7)  $(-4) - (-13) = \underline{9}$



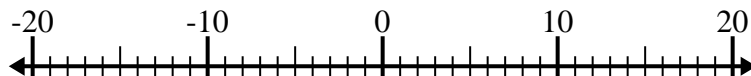
8)  $1 - (-14) = \underline{15}$



9)  $(-7) + 15 = \underline{8}$



10)  $(-5) + (-4) = \underline{-9}$

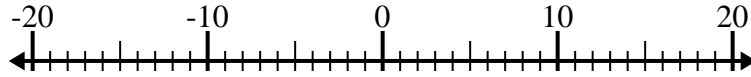
**Respuestas**1. **-10**2. **16**3. **6**4. **-14**5. **-1**6. **-4**7. **9**8. **15**9. **8**10. **-9**



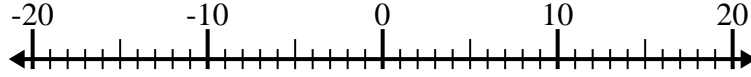


Resolver cada problema. Usar la recta numérica si lo necesitas.

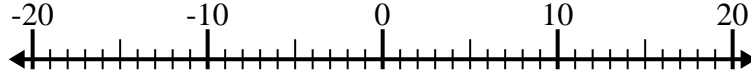
1)  $(-3) - 9 =$  \_\_\_\_\_



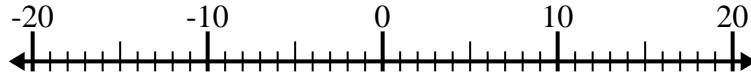
2)  $(-11) + (-7) =$  \_\_\_\_\_



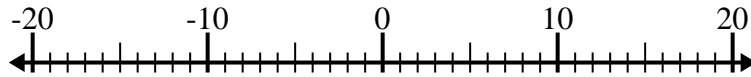
3)  $(-15) + 11 =$  \_\_\_\_\_



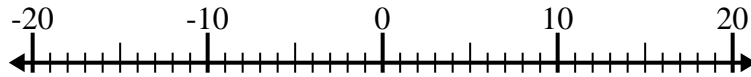
4)  $10 - (-4) =$  \_\_\_\_\_



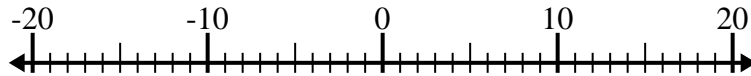
5)  $(-2) + (-5) =$  \_\_\_\_\_



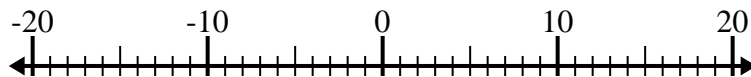
6)  $(-14) - (-7) =$  \_\_\_\_\_



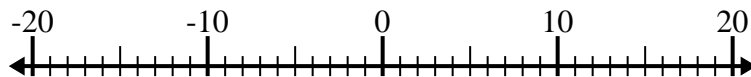
7)  $(-10) - 1 =$  \_\_\_\_\_



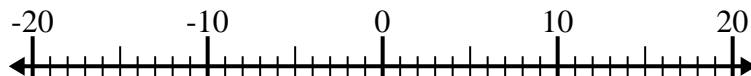
8)  $10 - (-6) =$  \_\_\_\_\_



9)  $13 + (-1) =$  \_\_\_\_\_



10)  $(-8) + 4 =$  \_\_\_\_\_



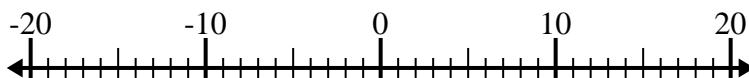
**Respuestas**

1. \_\_\_\_\_
2. \_\_\_\_\_
3. \_\_\_\_\_
4. \_\_\_\_\_
5. \_\_\_\_\_
6. \_\_\_\_\_
7. \_\_\_\_\_
8. \_\_\_\_\_
9. \_\_\_\_\_
10. \_\_\_\_\_

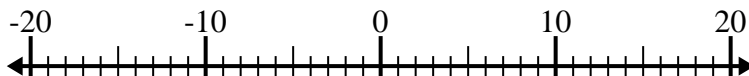


Resolver cada problema. Usar la recta numérica si lo necesitas.

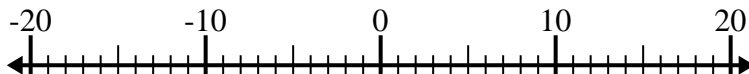
1)  $(-3) - 9 = \underline{-12}$



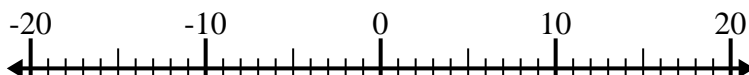
2)  $(-11) + (-7) = \underline{-18}$



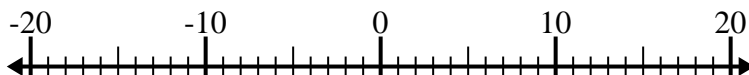
3)  $(-15) + 11 = \underline{-4}$



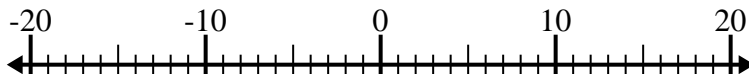
4)  $10 - (-4) = \underline{14}$



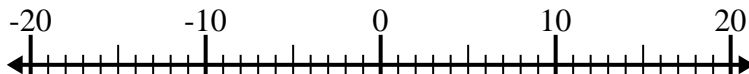
5)  $(-2) + (-5) = \underline{-7}$



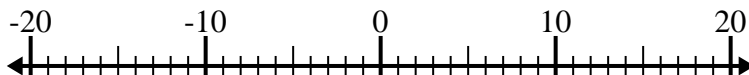
6)  $(-14) - (-7) = \underline{-7}$



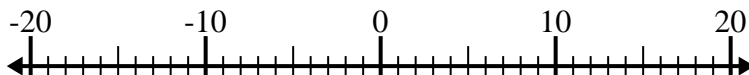
7)  $(-10) - 1 = \underline{-11}$



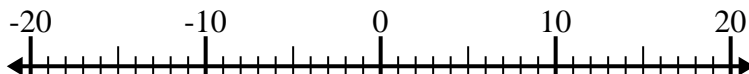
8)  $10 - (-6) = \underline{16}$



9)  $13 + (-1) = \underline{12}$



10)  $(-8) + 4 = \underline{-4}$

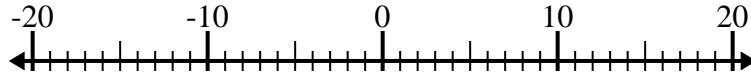
**Respuestas**1. **-12**2. **-18**3. **-4**4. **14**5. **-7**6. **-7**7. **-11**8. **16**9. **12**10. **-4**



Resolver cada problema. Usar la recta numérica si lo necesitas.

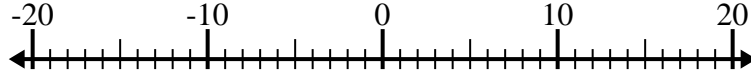
**Respuestas**

1)  $(-12) - (-8) =$  \_\_\_\_\_



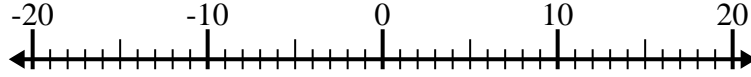
1. \_\_\_\_\_

2)  $(-7) + (-5) =$  \_\_\_\_\_



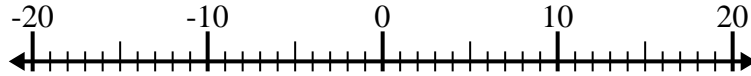
2. \_\_\_\_\_

3)  $13 + (-4) =$  \_\_\_\_\_



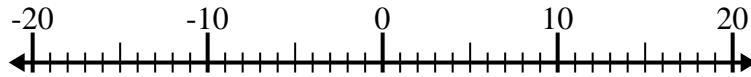
3. \_\_\_\_\_

4)  $(-6) + 7 =$  \_\_\_\_\_



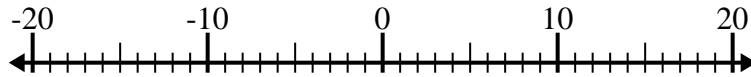
4. \_\_\_\_\_

5)  $9 + (-10) =$  \_\_\_\_\_



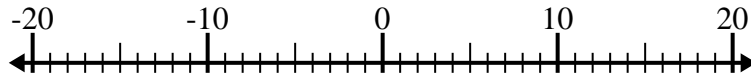
5. \_\_\_\_\_

6)  $(-2) + 4 =$  \_\_\_\_\_



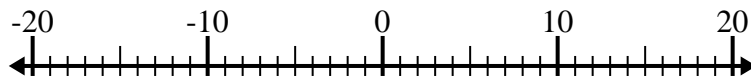
6. \_\_\_\_\_

7)  $(-6) - (-15) =$  \_\_\_\_\_



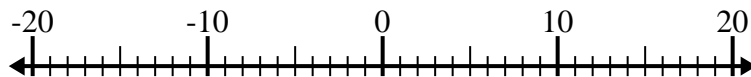
7. \_\_\_\_\_

8)  $(-11) - 3 =$  \_\_\_\_\_



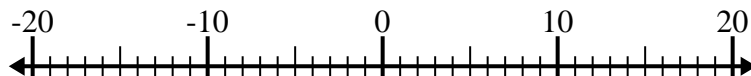
8. \_\_\_\_\_

9)  $(-5) - 2 =$  \_\_\_\_\_



9. \_\_\_\_\_

10)  $11 - (-4) =$  \_\_\_\_\_

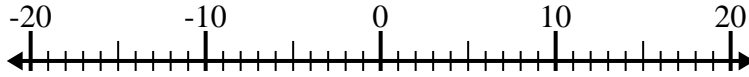


10. \_\_\_\_\_

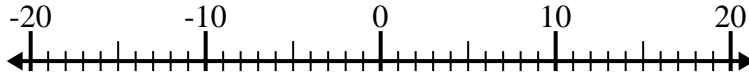


Resolver cada problema. Usar la recta numérica si lo necesitas.

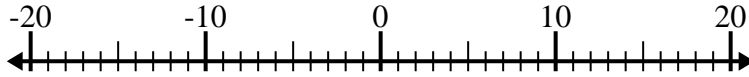
1)  $(-12) - (-8) = \underline{-4}$



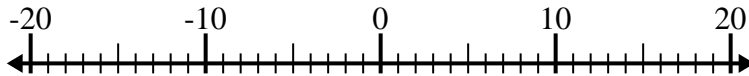
2)  $(-7) + (-5) = \underline{-12}$



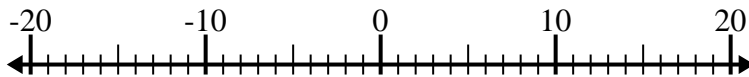
3)  $13 + (-4) = \underline{9}$



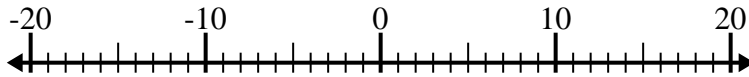
4)  $(-6) + 7 = \underline{1}$



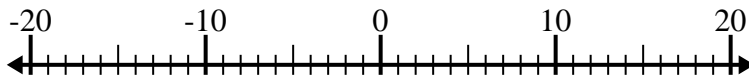
5)  $9 + (-10) = \underline{-1}$



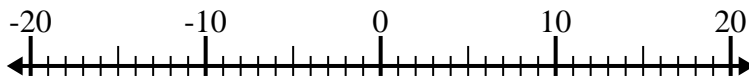
6)  $(-2) + 4 = \underline{2}$



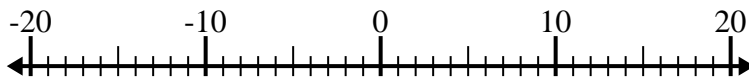
7)  $(-6) - (-15) = \underline{9}$



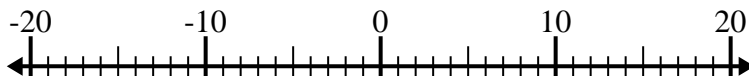
8)  $(-11) - 3 = \underline{-14}$



9)  $(-5) - 2 = \underline{-7}$



10)  $11 - (-4) = \underline{15}$

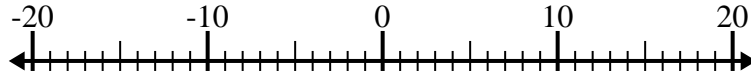
**Respuestas**1. **-4**2. **-12**3. **9**4. **1**5. **-1**6. **2**7. **9**8. **-14**9. **-7**10. **15**



Resolver cada problema. Usar la recta numérica si lo necesitas.

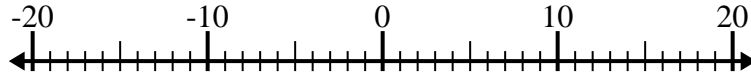
**Respuestas**

1)  $(-4) - (-5) =$  \_\_\_\_\_



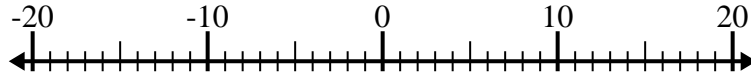
1. \_\_\_\_\_

2)  $5 - (-12) =$  \_\_\_\_\_



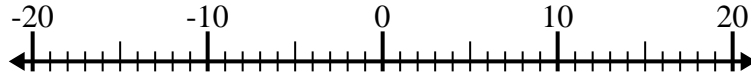
2. \_\_\_\_\_

3)  $(-4) - (-13) =$  \_\_\_\_\_



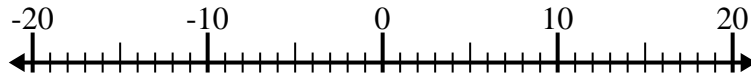
3. \_\_\_\_\_

4)  $12 + (-10) =$  \_\_\_\_\_



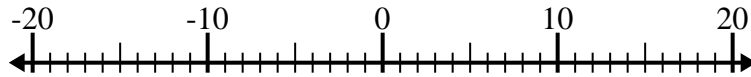
4. \_\_\_\_\_

5)  $(-1) - 13 =$  \_\_\_\_\_



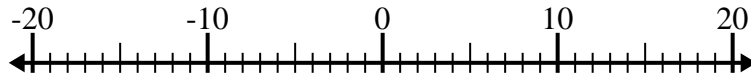
5. \_\_\_\_\_

6)  $(-5) + 15 =$  \_\_\_\_\_



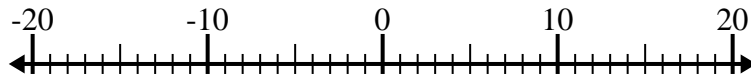
6. \_\_\_\_\_

7)  $(-11) + 1 =$  \_\_\_\_\_



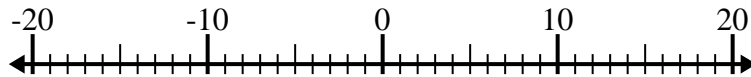
7. \_\_\_\_\_

8)  $14 - (-4) =$  \_\_\_\_\_



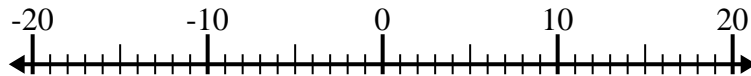
8. \_\_\_\_\_

9)  $(-2) - 14 =$  \_\_\_\_\_



9. \_\_\_\_\_

10)  $(-4) + (-1) =$  \_\_\_\_\_

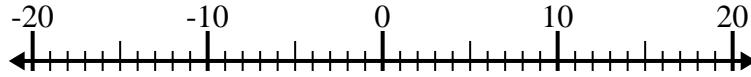


10. \_\_\_\_\_

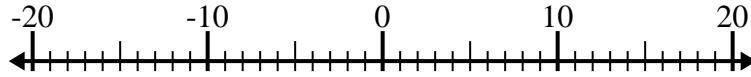


Resolver cada problema. Usar la recta numérica si lo necesitas.

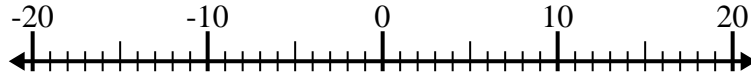
1)  $(-4) - (-5) = \underline{1}$



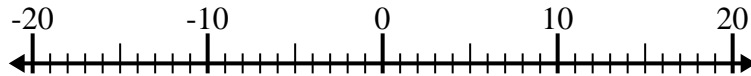
2)  $5 - (-12) = \underline{17}$



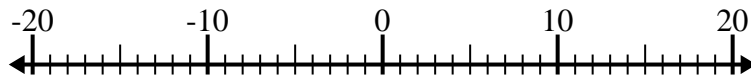
3)  $(-4) - (-13) = \underline{9}$



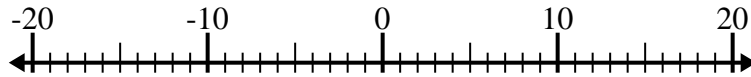
4)  $12 + (-10) = \underline{2}$



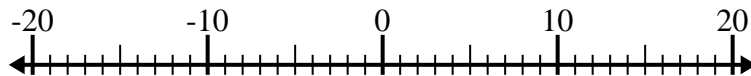
5)  $(-1) - 13 = \underline{-14}$



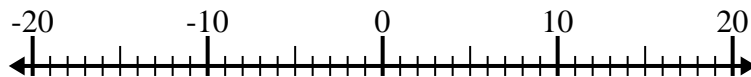
6)  $(-5) + 15 = \underline{10}$



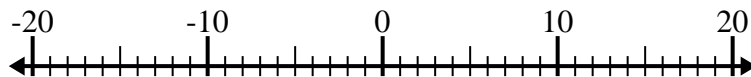
7)  $(-11) + 1 = \underline{-10}$



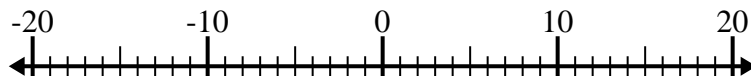
8)  $14 - (-4) = \underline{18}$



9)  $(-2) - 14 = \underline{-16}$



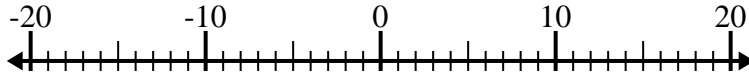
10)  $(-4) + (-1) = \underline{-5}$

**Respuestas**1. **1**2. **17**3. **9**4. **2**5. **-14**6. **10**7. **-10**8. **18**9. **-16**10. **-5**

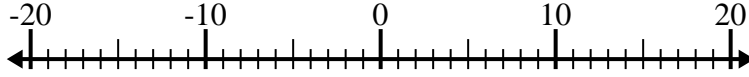


Resolver cada problema. Usar la recta numérica si lo necesitas.

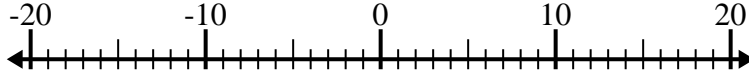
1)  $12 + (-15) =$  \_\_\_\_\_



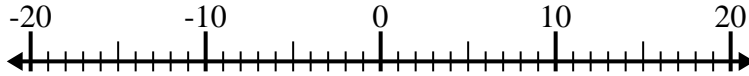
2)  $(-8) - (-6) =$  \_\_\_\_\_



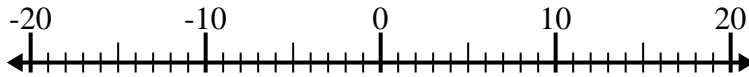
3)  $5 - (-9) =$  \_\_\_\_\_



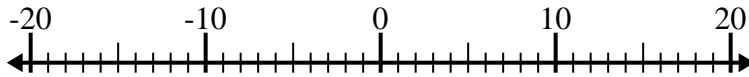
4)  $(-10) + (-6) =$  \_\_\_\_\_



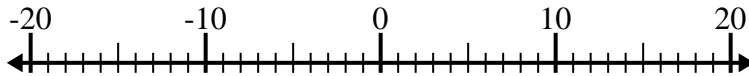
5)  $3 + (-15) =$  \_\_\_\_\_



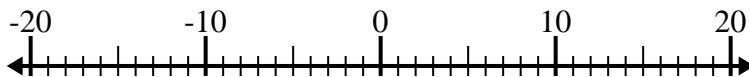
6)  $(-12) - (-14) =$  \_\_\_\_\_



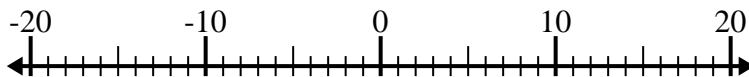
7)  $(-11) - 7 =$  \_\_\_\_\_



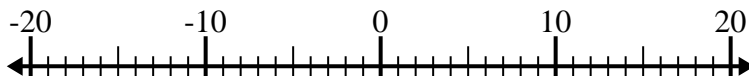
8)  $(-4) + 10 =$  \_\_\_\_\_



9)  $(-13) - 2 =$  \_\_\_\_\_



10)  $(-13) + (-7) =$  \_\_\_\_\_



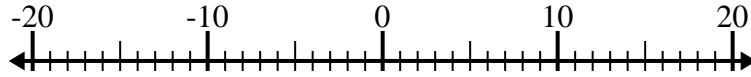
**Respuestas**

1. \_\_\_\_\_
2. \_\_\_\_\_
3. \_\_\_\_\_
4. \_\_\_\_\_
5. \_\_\_\_\_
6. \_\_\_\_\_
7. \_\_\_\_\_
8. \_\_\_\_\_
9. \_\_\_\_\_
10. \_\_\_\_\_

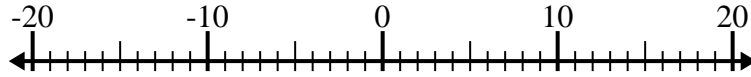


Resolver cada problema. Usar la recta numérica si lo necesitas.

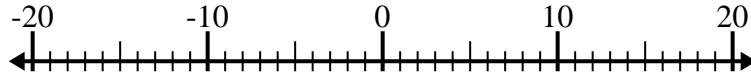
1)  $12 + (-15) = \underline{-3}$



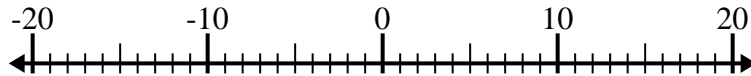
2)  $(-8) - (-6) = \underline{-2}$



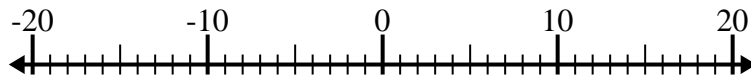
3)  $5 - (-9) = \underline{14}$



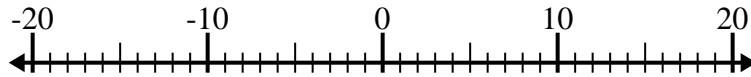
4)  $(-10) + (-6) = \underline{-16}$



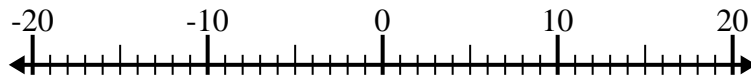
5)  $3 + (-15) = \underline{-12}$



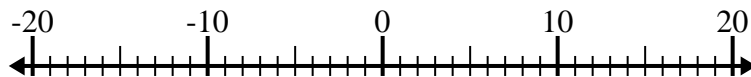
6)  $(-12) - (-14) = \underline{2}$



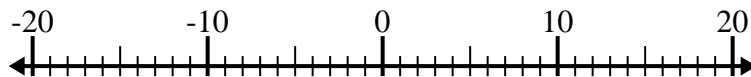
7)  $(-11) - 7 = \underline{-18}$



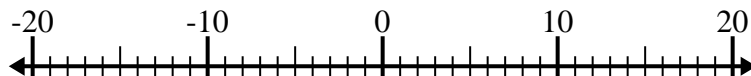
8)  $(-4) + 10 = \underline{6}$



9)  $(-13) - 2 = \underline{-15}$



10)  $(-13) + (-7) = \underline{-20}$

**Respuestas**1. **-3**2. **-2**3. **14**4. **-16**5. **-12**6. **2**7. **-18**8. **6**9. **-15**10. **-20**

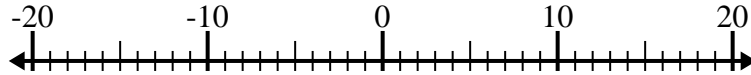




Resolver cada problema. Usar la recta numérica si lo necesitas.

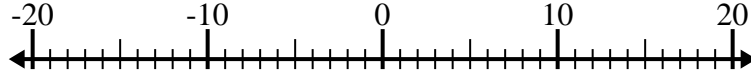
**Respuestas**

1)  $(-4) - (-1) =$  \_\_\_\_\_



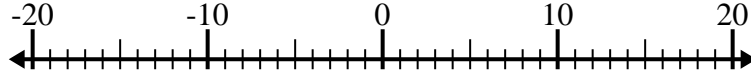
1. \_\_\_\_\_

2)  $(-11) + 14 =$  \_\_\_\_\_



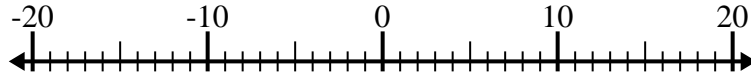
2. \_\_\_\_\_

3)  $(-8) - 12 =$  \_\_\_\_\_



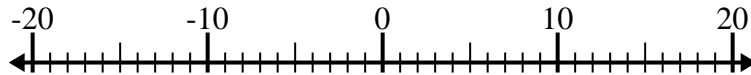
3. \_\_\_\_\_

4)  $4 + (-5) =$  \_\_\_\_\_



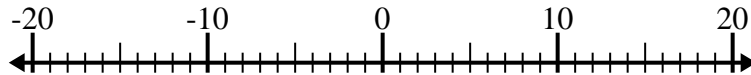
4. \_\_\_\_\_

5)  $11 - (-3) =$  \_\_\_\_\_



5. \_\_\_\_\_

6)  $(-13) - 6 =$  \_\_\_\_\_



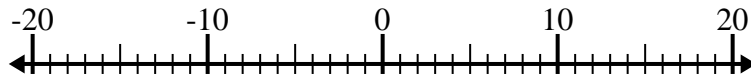
6. \_\_\_\_\_

7)  $12 + (-8) =$  \_\_\_\_\_



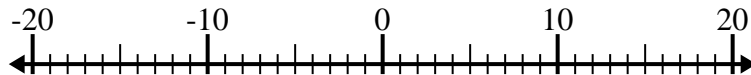
7. \_\_\_\_\_

8)  $(-7) - (-12) =$  \_\_\_\_\_



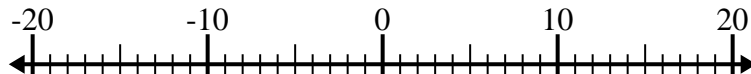
8. \_\_\_\_\_

9)  $(-3) + (-1) =$  \_\_\_\_\_



9. \_\_\_\_\_

10)  $(-5) + 2 =$  \_\_\_\_\_

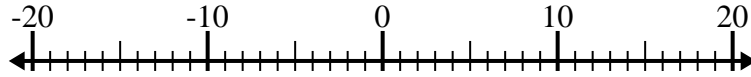


10. \_\_\_\_\_

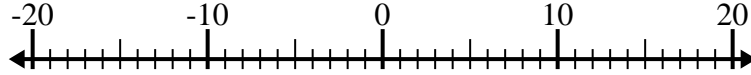


Resolver cada problema. Usar la recta numérica si lo necesitas.

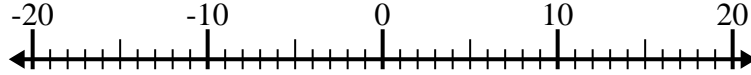
1)  $(-4) - (-1) = \underline{-3}$



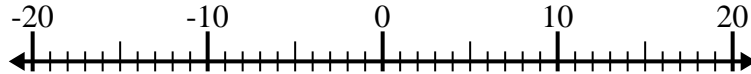
2)  $(-11) + 14 = \underline{3}$



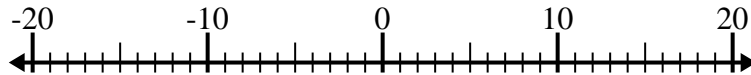
3)  $(-8) - 12 = \underline{-20}$



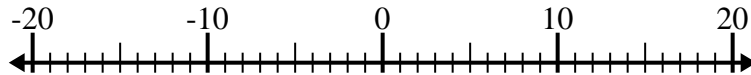
4)  $4 + (-5) = \underline{-1}$



5)  $11 - (-3) = \underline{14}$



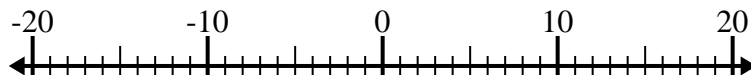
6)  $(-13) - 6 = \underline{-19}$



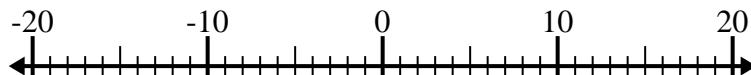
7)  $12 + (-8) = \underline{4}$



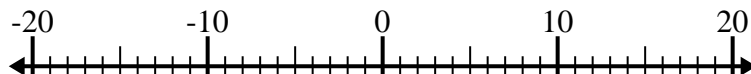
8)  $(-7) - (-12) = \underline{5}$



9)  $(-3) + (-1) = \underline{-4}$



10)  $(-5) + 2 = \underline{-3}$

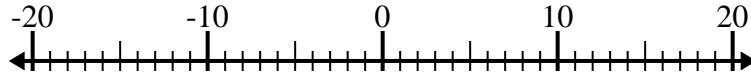
**Respuestas**1. **-3**2. **3**3. **-20**4. **-1**5. **14**6. **-19**7. **4**8. **5**9. **-4**10. **-3**



Resolver cada problema. Usar la recta numérica si lo necesitas.

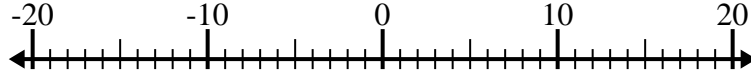
**Respuestas**

1)  $(-9) - 11 =$  \_\_\_\_\_



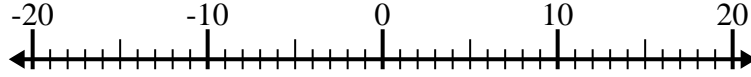
1. \_\_\_\_\_

2)  $(-14) - (-1) =$  \_\_\_\_\_



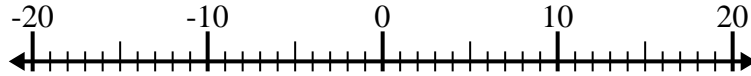
2. \_\_\_\_\_

3)  $7 + (-1) =$  \_\_\_\_\_



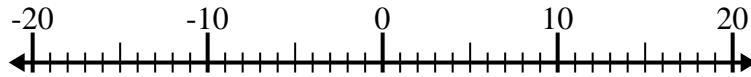
3. \_\_\_\_\_

4)  $(-13) + (-3) =$  \_\_\_\_\_



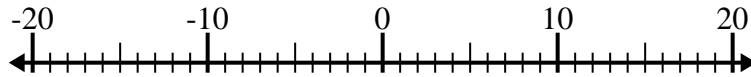
4. \_\_\_\_\_

5)  $11 + (-15) =$  \_\_\_\_\_



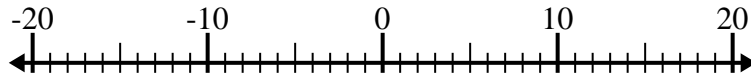
5. \_\_\_\_\_

6)  $10 - (-4) =$  \_\_\_\_\_



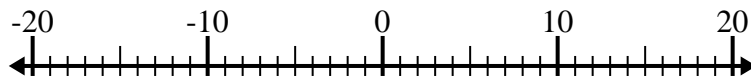
6. \_\_\_\_\_

7)  $(-4) - 9 =$  \_\_\_\_\_



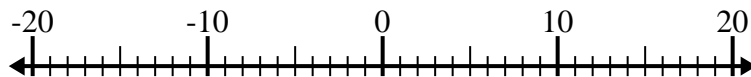
7. \_\_\_\_\_

8)  $3 - (-14) =$  \_\_\_\_\_



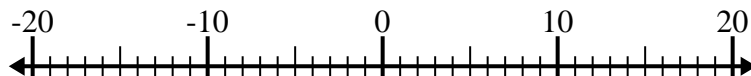
8. \_\_\_\_\_

9)  $(-3) + 6 =$  \_\_\_\_\_



9. \_\_\_\_\_

10)  $(-10) - (-7) =$  \_\_\_\_\_

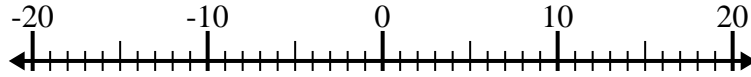


10. \_\_\_\_\_

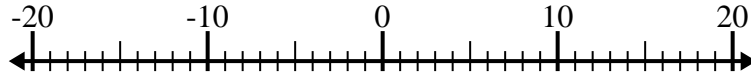


Resolver cada problema. Usar la recta numérica si lo necesitas.

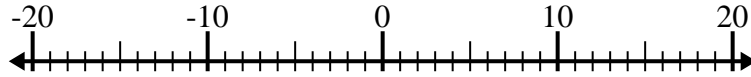
1)  $(-9) - 11 = \underline{-20}$



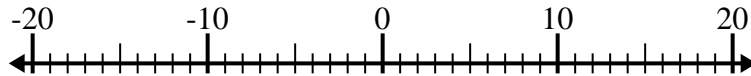
2)  $(-14) - (-1) = \underline{-13}$



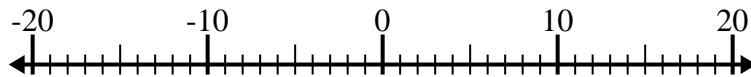
3)  $7 + (-1) = \underline{6}$



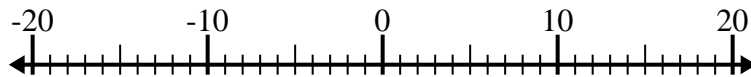
4)  $(-13) + (-3) = \underline{-16}$



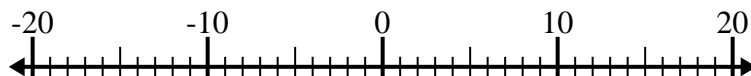
5)  $11 + (-15) = \underline{-4}$



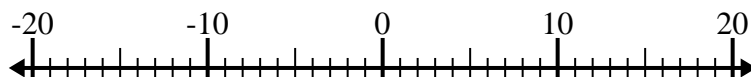
6)  $10 - (-4) = \underline{14}$



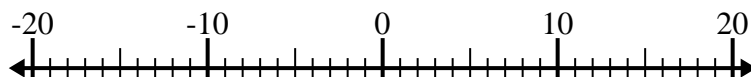
7)  $(-4) - 9 = \underline{-13}$



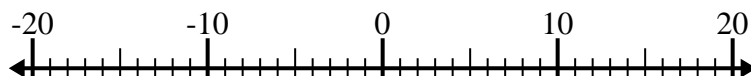
8)  $3 - (-14) = \underline{17}$



9)  $(-3) + 6 = \underline{3}$



10)  $(-10) - (-7) = \underline{-3}$

**Respuestas**1. **-20**2. **-13**3. **6**4. **-16**5. **-4**6. **14**7. **-13**8. **17**9. **3**10. **-3**