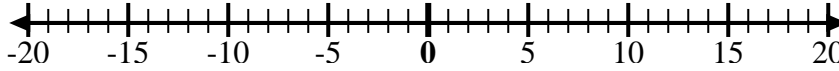




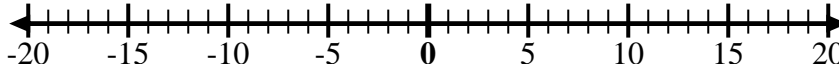
Utilice las rectas numéricas para mostrar cada expresión y resolver.

Ej) Empiece en -8 y agregue 18



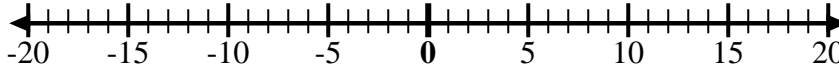
Ej. $-8 + 18 = 10$

1) Empiece en -6 y agregue 3



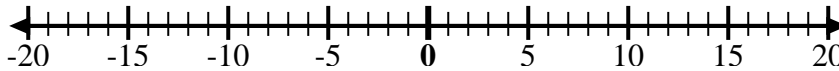
1. _____

2) Empiece en -4 y agregue -6



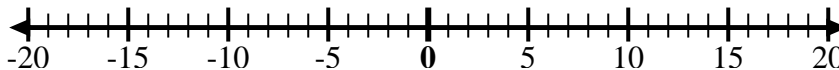
2. _____

3) Empiece en -1 y agregue -8



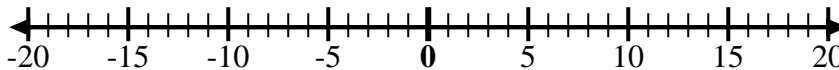
3. _____

4) Empiece en -4 y agregue -3



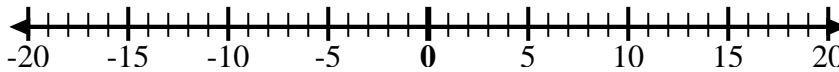
4. _____

5) Empiece en 0 y agregue -10



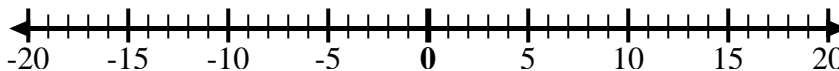
5. _____

6) Empiece en -7 y agregue 12



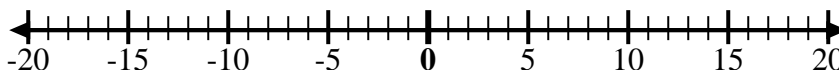
6. _____

7) Empiece en 2 y agregue -10



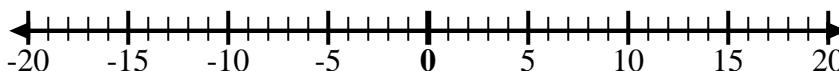
7. _____

8) Empiece en -6 y agregue -2



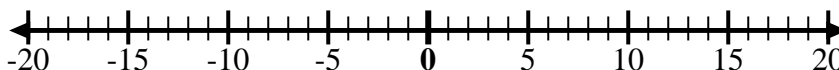
8. _____

9) Empiece en 1 y agregue -10



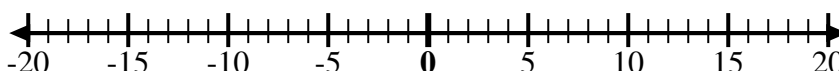
9. _____

10) Empiece en 3 y agregue -10



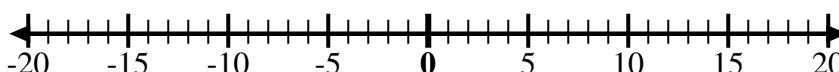
10. _____

11) Empiece en -4 y agregue -2



11. _____

12) Empiece en -10 y agregue 6



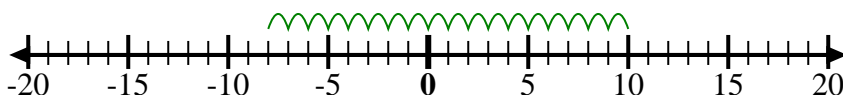
12. _____

Respuestas

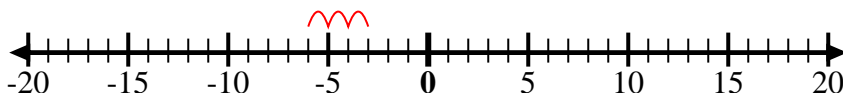


Utilice las rectas numéricas para mostrar cada expresión y resolver.

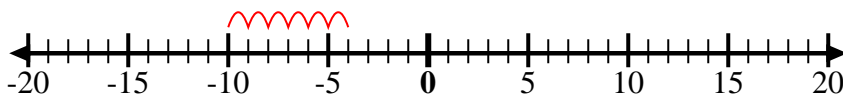
Ej) Empiece en -8
y agregue 18



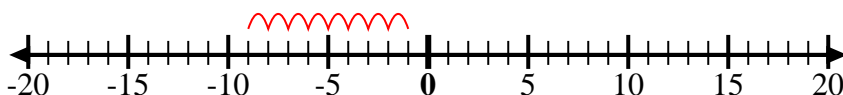
1) Empiece en -6
y agregue 3



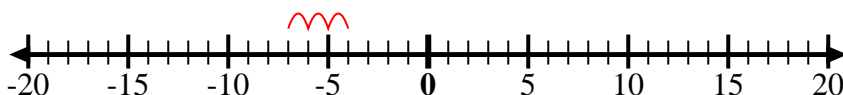
2) Empiece en -4
y agregue -6



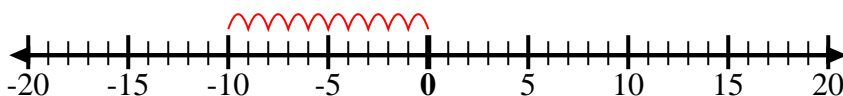
3) Empiece en -1
y agregue -8



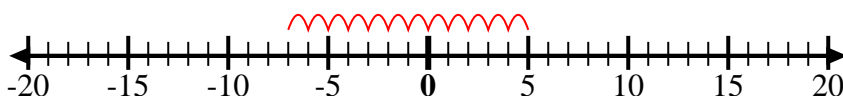
4) Empiece en -4
y agregue -3



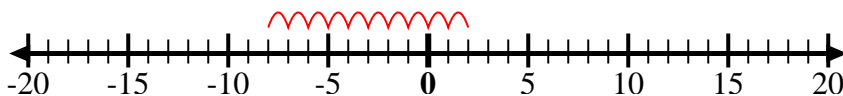
5) Empiece en 0
y agregue -10



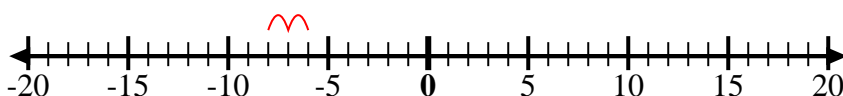
6) Empiece en -7
y agregue 12



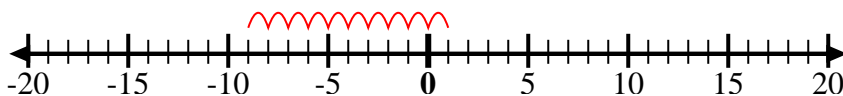
7) Empiece en 2
y agregue -10



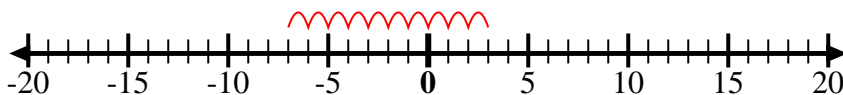
8) Empiece en -6
y agregue -2



9) Empiece en 1
y agregue -10



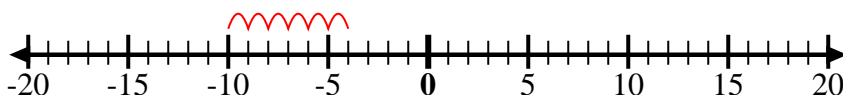
10) Empiece en 3
y agregue -10



11) Empiece en -4
y agregue -2



12) Empiece en
-10 y agregue
6



Respuestas

Ej. $-8 + 18 = 10$

1. $-6 + 3 = -3$

2. $-4 + -6 = -10$

3. $-1 + -8 = -9$

4. $-4 + -3 = -7$

5. $0 + -10 = -10$

6. $-7 + 12 = 5$

7. $2 + -10 = -8$

8. $-6 + -2 = -8$

9. $1 + -10 = -9$

10. $3 + -10 = -7$

11. $-4 + -2 = -6$

12. $-10 + 6 = -4$