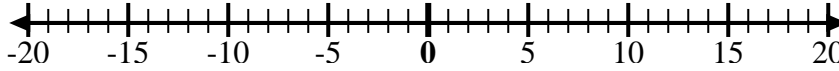


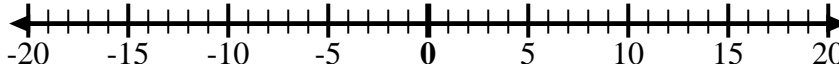


Utilice las rectas numéricas para mostrar cada expresión y resolver.

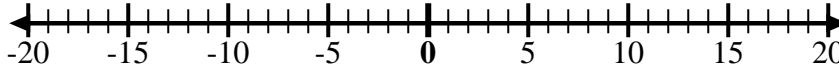
Ej) Empiece en -4  
y agregue -6



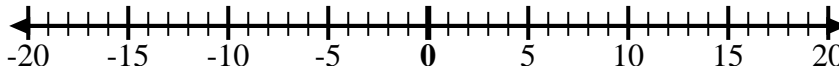
1) Empiece en 7  
y agregue -7



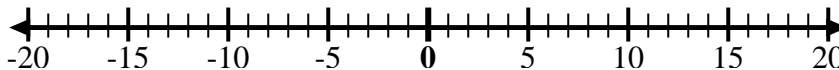
2) Empiece en -4  
y agregue 9



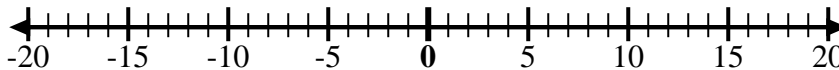
3) Empiece en 4  
y agregue -14



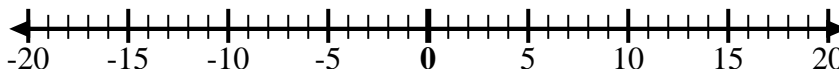
4) Empiece en -2  
y agregue -7



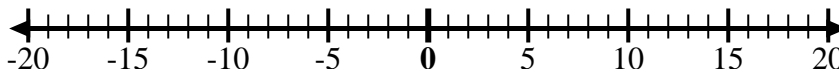
5) Empiece en -3  
y agregue 7



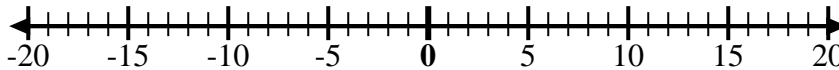
6) Empiece en 1  
y agregue -11



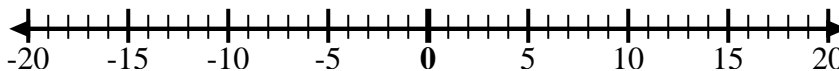
7) Empiece en -6  
y agregue -3



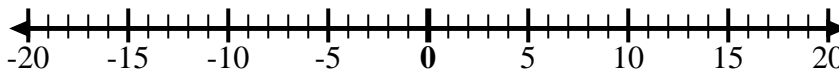
8) Empiece en 10  
y agregue -1



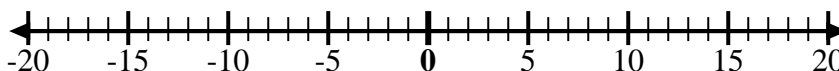
9) Empiece en 0  
y agregue -5



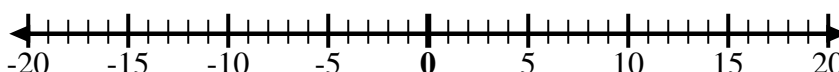
10) Empiece en 0  
y agregue -10



11) Empiece en 6  
y agregue -11



12) Empiece en -5  
y agregue 10



## Respuestas

Ej.  $-4 + -6 = -10$

1. \_\_\_\_\_

2. \_\_\_\_\_

3. \_\_\_\_\_

4. \_\_\_\_\_

5. \_\_\_\_\_

6. \_\_\_\_\_

7. \_\_\_\_\_

8. \_\_\_\_\_

9. \_\_\_\_\_

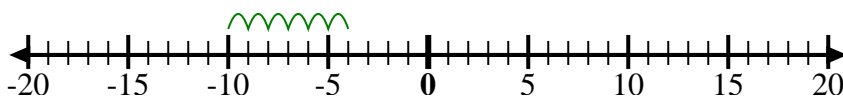
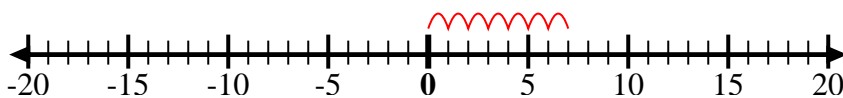
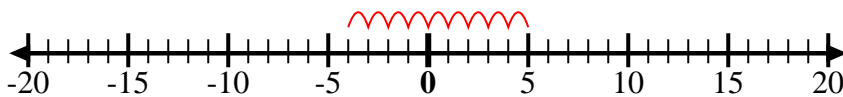
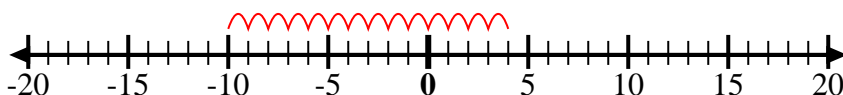
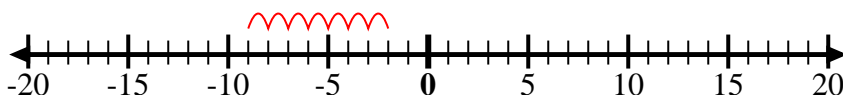
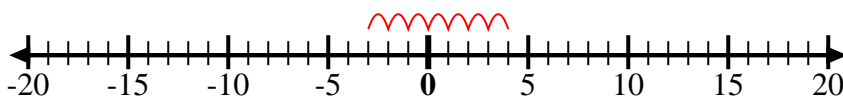
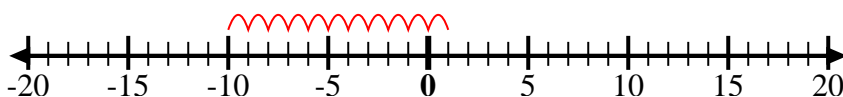
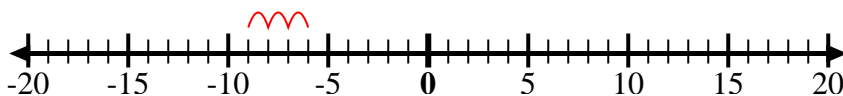
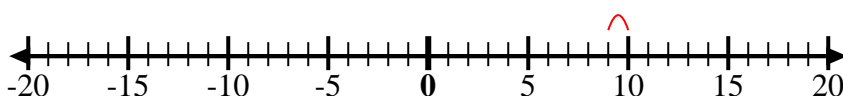
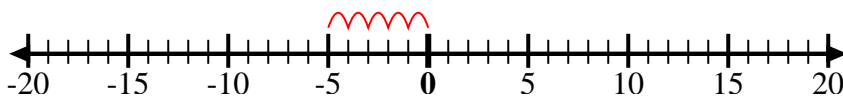
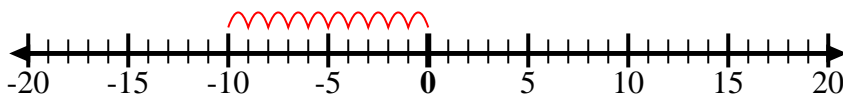
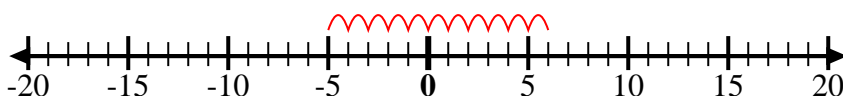
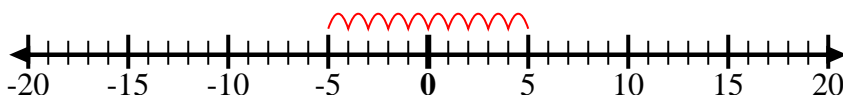
10. \_\_\_\_\_

11. \_\_\_\_\_

12. \_\_\_\_\_



Utilice las rectas numéricas para mostrar cada expresión y resolver.

Ej) Empiece en -4  
y agregue -61) Empiece en 7  
y agregue -72) Empiece en -4  
y agregue 93) Empiece en 4  
y agregue -144) Empiece en -2  
y agregue -75) Empiece en -3  
y agregue 76) Empiece en 1  
y agregue -117) Empiece en -6  
y agregue -38) Empiece en 10  
y agregue -19) Empiece en 0  
y agregue -510) Empiece en 0  
y agregue -1011) Empiece en 6  
y agregue -1112) Empiece en -5  
y agregue 10**Respuestas**

Ej.  $-4 + -6 = -10$

1.  $7 + -7 = 0$

2.  $-4 + 9 = 5$

3.  $4 + -14 = -10$

4.  $-2 + -7 = -9$

5.  $-3 + 7 = 4$

6.  $1 + -11 = -10$

7.  $-6 + -3 = -9$

8.  $10 + -1 = 9$

9.  $0 + -5 = -5$

10.  $0 + -10 = -10$

11.  $6 + -11 = -5$

12.  $-5 + 10 = 5$