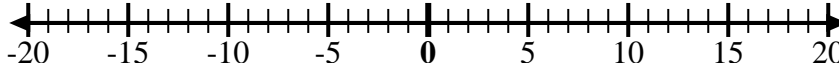


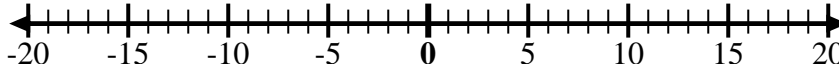


Utilice las rectas numéricas para mostrar cada expresión y resolver.

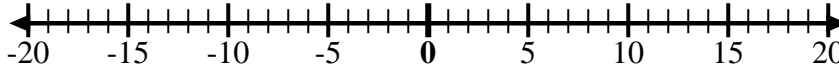
Ej) Empiece en 4
y agregue -8



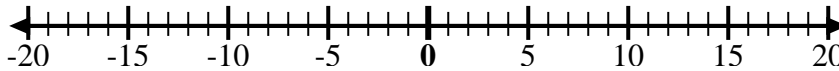
1) Empiece en -9
y agregue 5



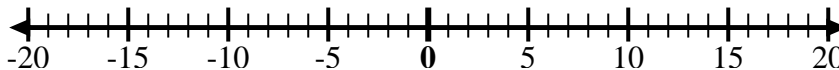
2) Empiece en -6
y agregue -4



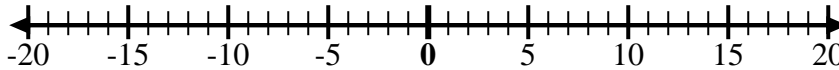
3) Empiece en -5
y agregue 4



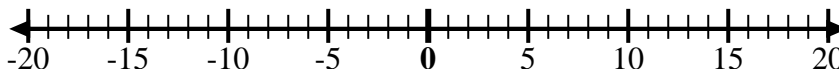
4) Empiece en -7
y agregue -2



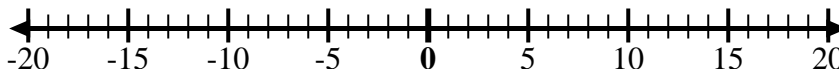
5) Empiece en 9
y agregue -12



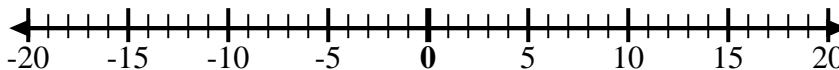
6) Empiece en 7
y agregue -3



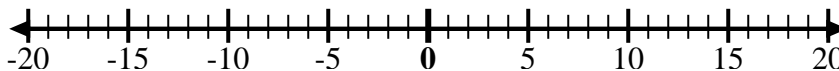
7) Empiece en 1
y agregue -11



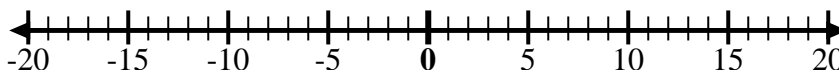
8) Empiece en -2
y agregue -3



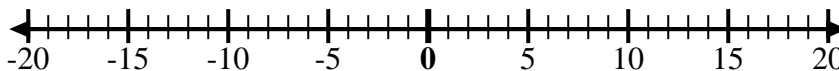
9) Empiece en -3
y agregue -3



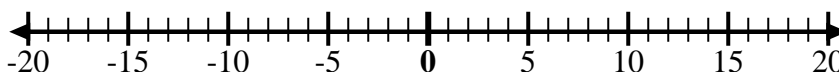
10) Empiece en -5
y agregue 2



11) Empiece en
-10 y agregue
6



12) Empiece en -4
y agregue 8



Respuestas

Ej. $4 + -8 = -4$

1. _____

2. _____

3. _____

4. _____

5. _____

6. _____

7. _____

8. _____

9. _____

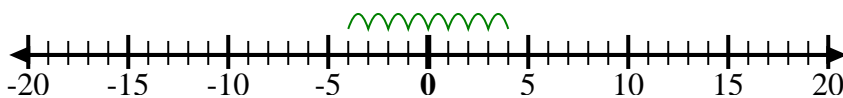
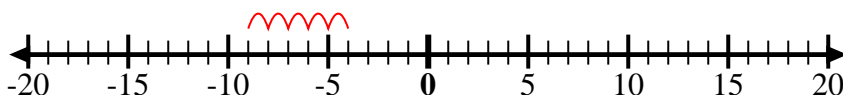
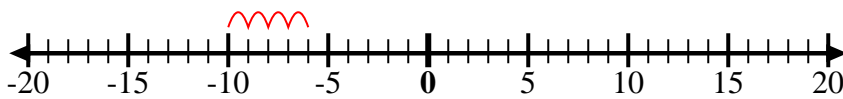
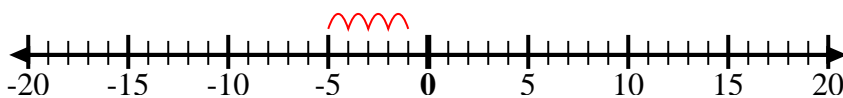
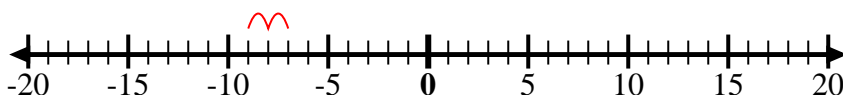
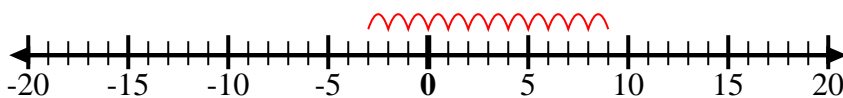
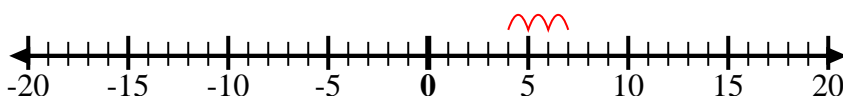
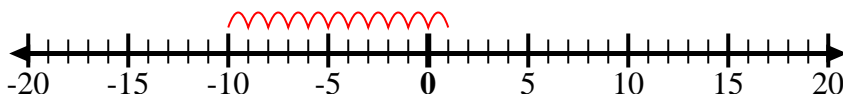
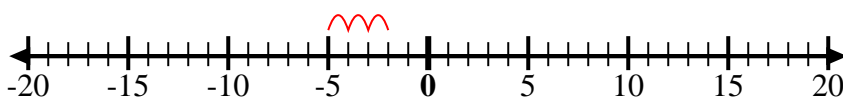
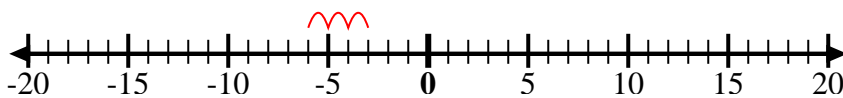
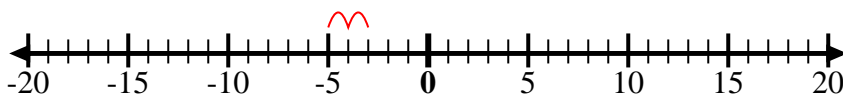
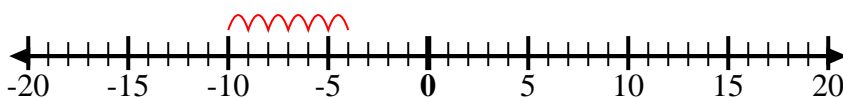
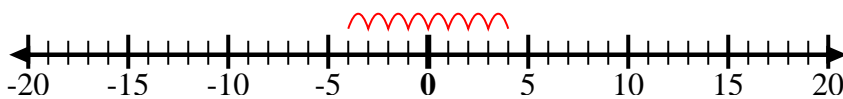
10. _____

11. _____

12. _____



Utilice las rectas numéricas para mostrar cada expresión y resolver.

Ej) Empiece en 4
y agregue -81) Empiece en -9
y agregue 52) Empiece en -6
y agregue -43) Empiece en -5
y agregue 44) Empiece en -7
y agregue -25) Empiece en 9
y agregue -126) Empiece en 7
y agregue -37) Empiece en 1
y agregue -118) Empiece en -2
y agregue -39) Empiece en -3
y agregue -310) Empiece en -5
y agregue 211) Empiece en
-10 y agregue
612) Empiece en -4
y agregue 8**Respuestas**

Ej. $4 + -8 = -4$

1. $-9 + 5 = -4$

2. $-6 + -4 = -10$

3. $-5 + 4 = -1$

4. $-7 + -2 = -9$

5. $9 + -12 = -3$

6. $7 + -3 = 4$

7. $1 + -11 = -10$

8. $-2 + -3 = -5$

9. $-3 + -3 = -6$

10. $-5 + 2 = -3$

11. $-10 + 6 = -4$

12. $-4 + 8 = 4$