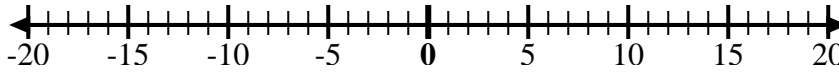


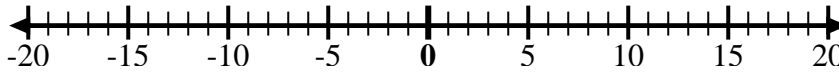


Utilice las rectas numéricas para mostrar cada expresión y resolver.

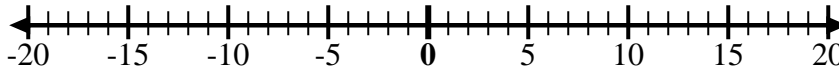
Ej) Empiece en -4 y agregue 8



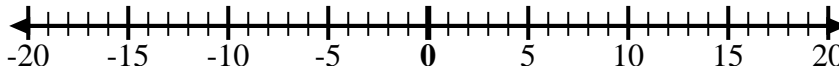
1) Empiece en -3 y agregue 10



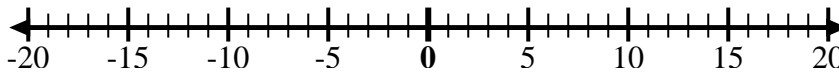
2) Empiece en 2 y agregue -12



3) Empiece en -5 y agregue 3



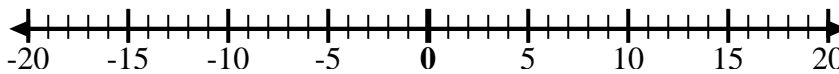
4) Empiece en -7 y agregue 5



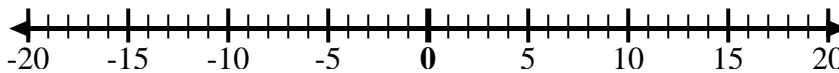
5) Empiece en -3 y agregue -3



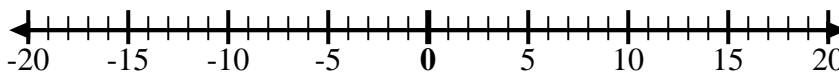
6) Empiece en -1 y agregue -9



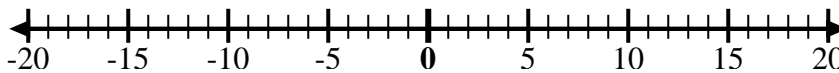
7) Empiece en 1 y agregue -10



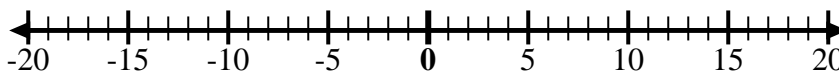
8) Empiece en -6 y agregue -2



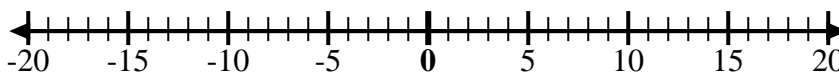
9) Empiece en -8 y agregue 10



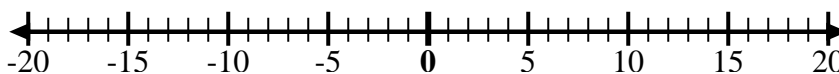
10) Empiece en 0 y agregue -10



11) Empiece en -8 y agregue -2



12) Empiece en 5 y agregue -13



**Respuestas**

Ej.  $-4 + 8 = 4$

1. \_\_\_\_\_

2. \_\_\_\_\_

3. \_\_\_\_\_

4. \_\_\_\_\_

5. \_\_\_\_\_

6. \_\_\_\_\_

7. \_\_\_\_\_

8. \_\_\_\_\_

9. \_\_\_\_\_

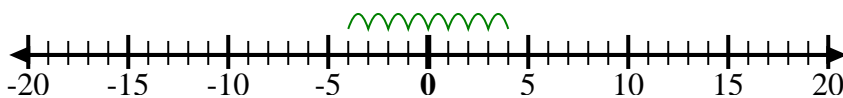
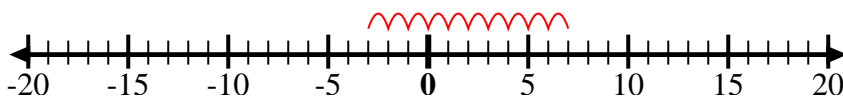
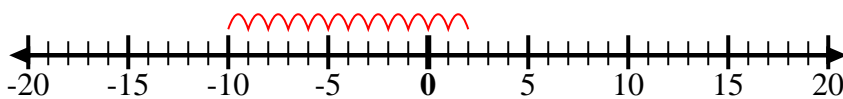
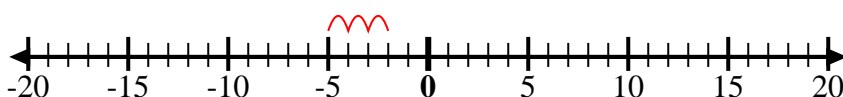
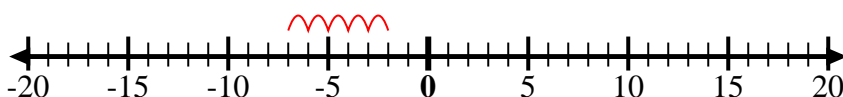
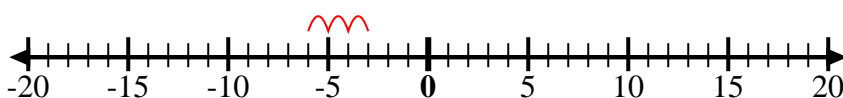
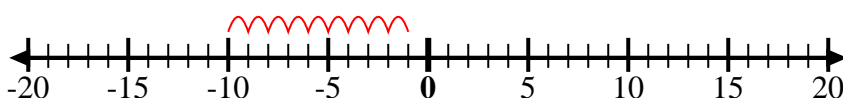
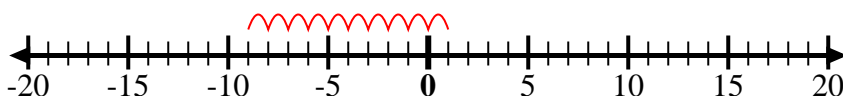
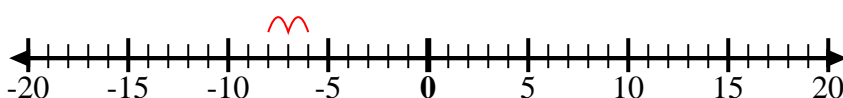
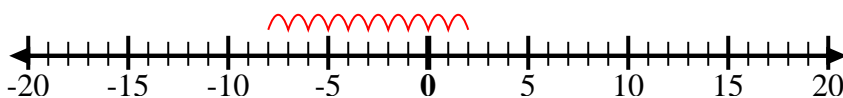
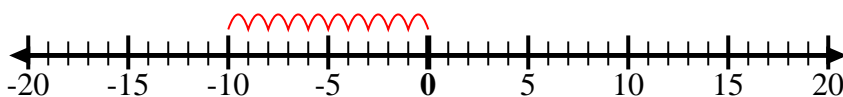
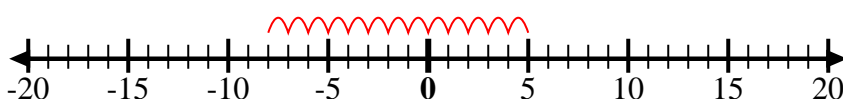
10. \_\_\_\_\_

11. \_\_\_\_\_

12. \_\_\_\_\_



Utilice las rectas numéricas para mostrar cada expresión y resolver.

Ej) Empiece en -4  
y agregue 81) Empiece en -3  
y agregue 102) Empiece en 2  
y agregue -123) Empiece en -5  
y agregue 34) Empiece en -7  
y agregue 55) Empiece en -3  
y agregue -36) Empiece en -1  
y agregue -97) Empiece en 1  
y agregue -108) Empiece en -6  
y agregue -29) Empiece en -8  
y agregue 1010) Empiece en 0  
y agregue -1011) Empiece en -8  
y agregue -212) Empiece en 5  
y agregue -13**Respuestas**

Ej.  $-4 + 8 = 4$

1.  $-3 + 10 = 7$

2.  $2 + -12 = -10$

3.  $-5 + 3 = -2$

4.  $-7 + 5 = -2$

5.  $-3 + -3 = -6$

6.  $-1 + -9 = -10$

7.  $1 + -10 = -9$

8.  $-6 + -2 = -8$

9.  $-8 + 10 = 2$

10.  $0 + -10 = -10$

11.  $-8 + -2 = -10$

12.  $5 + -13 = -8$