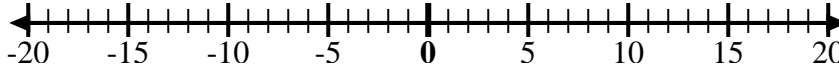


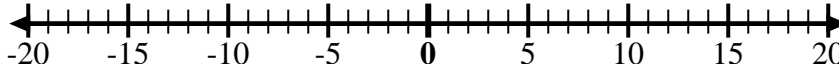


Utilice las rectas numéricas para mostrar cada expresión y resolver.

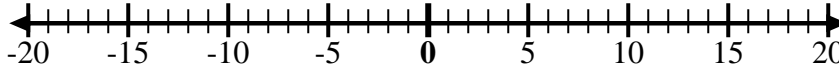
Ej) Empiece en -2
y agregue -8



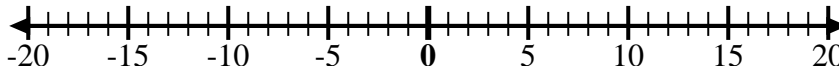
1) Empiece en 8
y agregue -18



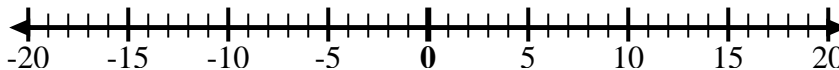
2) Empiece en 4
y agregue -11



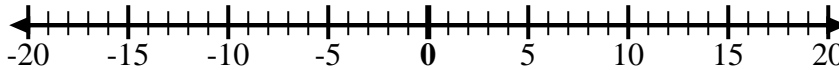
3) Empiece en -5
y agregue -5



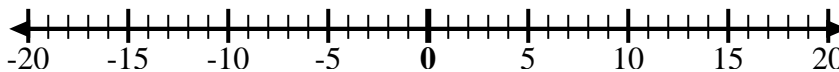
4) Empiece en -8
y agregue 5



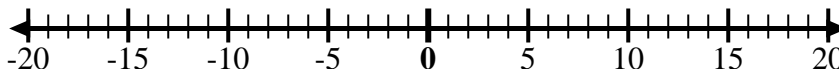
5) Empiece en -6
y agregue 3



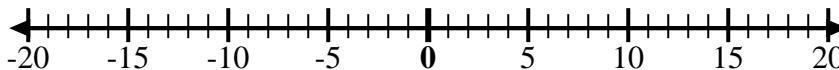
6) Empiece en -1
y agregue -7



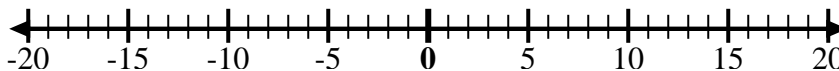
7) Empiece en -2
y agregue -6



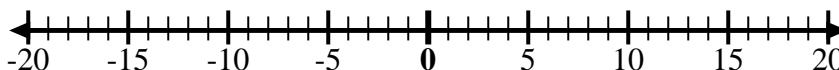
8) Empiece en -3
y agregue 12



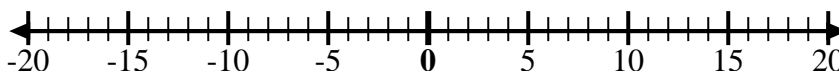
9) Empiece en -1
y agregue 11



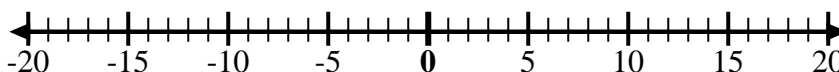
10) Empiece en 2
y agregue -9



11) Empiece en -3
y agregue 13



12) Empiece en
10 y agregue
-12



Respuestas

Ej. $-2 + -8 = -10$

1. _____

2. _____

3. _____

4. _____

5. _____

6. _____

7. _____

8. _____

9. _____

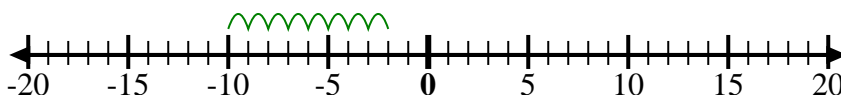
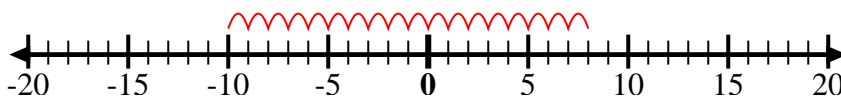
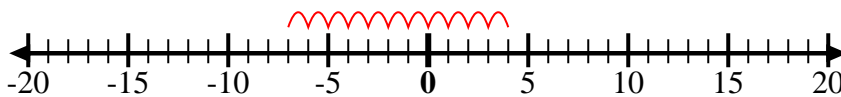
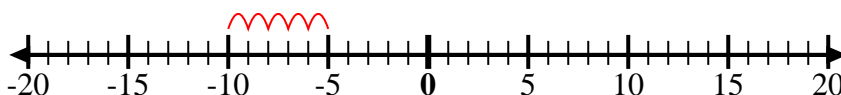
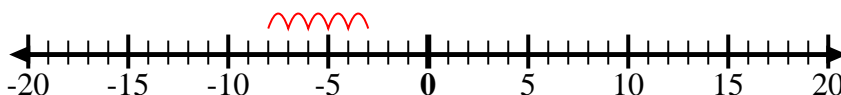
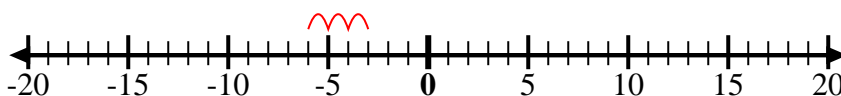
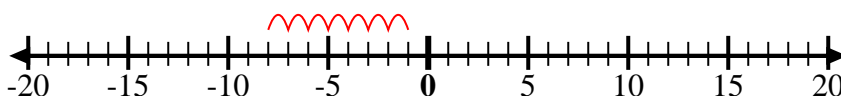
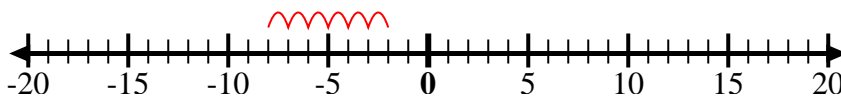
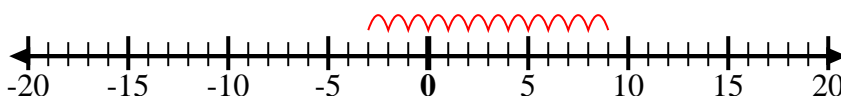
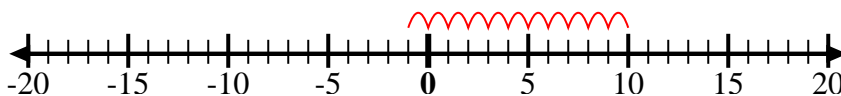
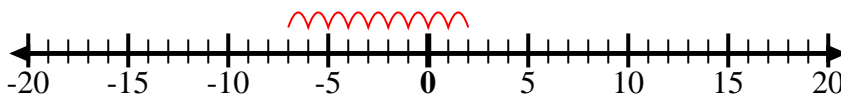
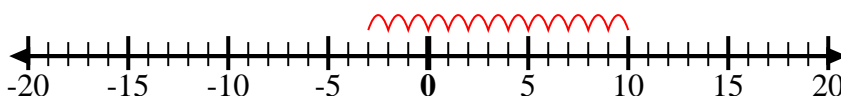
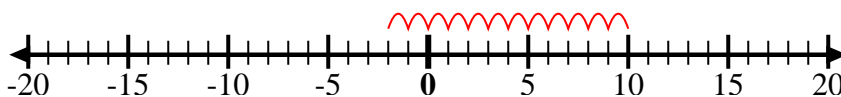
10. _____

11. _____

12. _____



Utilice las rectas numéricas para mostrar cada expresión y resolver.

Ej) Empiece en -2
y agregue -81) Empiece en 8
y agregue -182) Empiece en 4
y agregue -113) Empiece en -5
y agregue -54) Empiece en -8
y agregue 55) Empiece en -6
y agregue 36) Empiece en -1
y agregue -77) Empiece en -2
y agregue -68) Empiece en -3
y agregue 129) Empiece en -1
y agregue 1110) Empiece en 2
y agregue -911) Empiece en -3
y agregue 1312) Empiece en
10 y agregue
-12**Respuestas**

Ej. $-2 + -8 = -10$

1. $8 + -18 = -10$

2. $4 + -11 = -7$

3. $-5 + -5 = -10$

4. $-8 + 5 = -3$

5. $-6 + 3 = -3$

6. $-1 + -7 = -8$

7. $-2 + -6 = -8$

8. $-3 + 12 = 9$

9. $-1 + 11 = 10$

10. $2 + -9 = -7$

11. $-3 + 13 = 10$

12. $10 + -12 = -2$