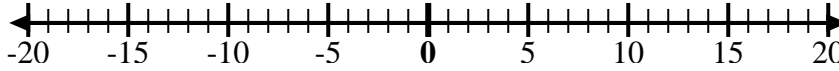


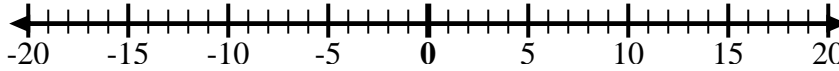


Utilice las rectas numéricas para mostrar cada expresión y resolver.

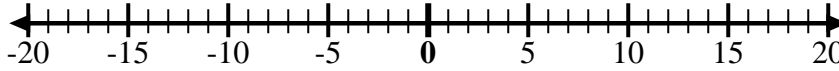
Ej) Empiece en 0  
y agregue -2



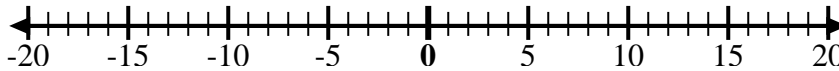
1) Empiece en 0  
y agregue -5



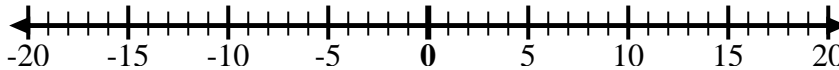
2) Empiece en 0  
y agregue 7



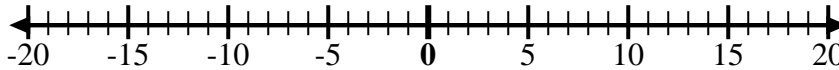
3) Empiece en -6  
y agregue 12



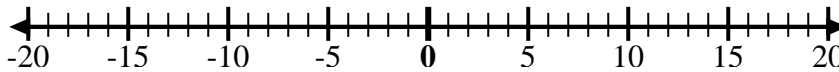
4) Empiece en -2  
y agregue -2



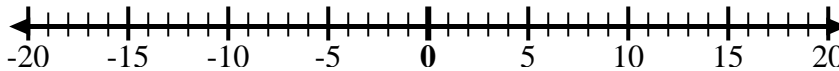
5) Empiece en 2  
y agregue -8



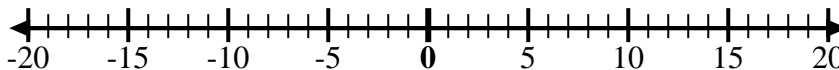
6) Empiece en 3  
y agregue -11



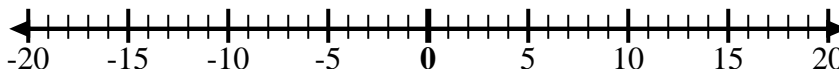
7) Empiece en -7  
y agregue 16



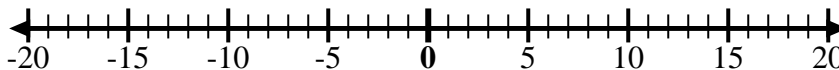
8) Empiece en -9  
y agregue 7



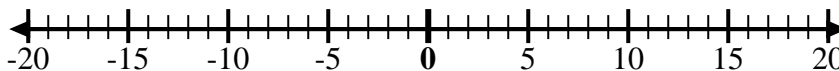
9) Empiece en -8  
y agregue 3



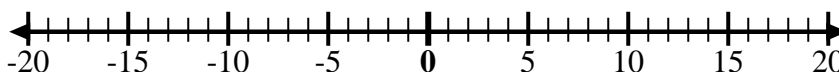
10) Empiece en 5  
y agregue -15



11) Empiece en -8  
y agregue 4



12) Empiece en 5  
y agregue -6



## Respuestas

Ej.  $0 + -2 = -2$

1. \_\_\_\_\_

2. \_\_\_\_\_

3. \_\_\_\_\_

4. \_\_\_\_\_

5. \_\_\_\_\_

6. \_\_\_\_\_

7. \_\_\_\_\_

8. \_\_\_\_\_

9. \_\_\_\_\_

10. \_\_\_\_\_

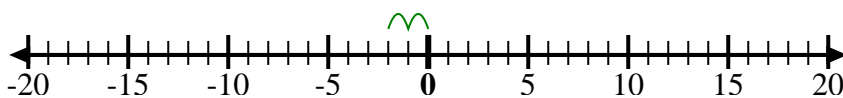
11. \_\_\_\_\_

12. \_\_\_\_\_

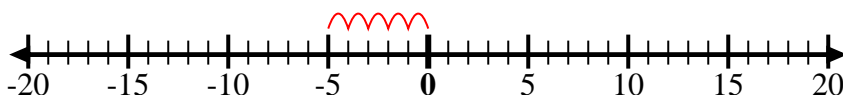


Utilice las rectas numéricas para mostrar cada expresión y resolver.

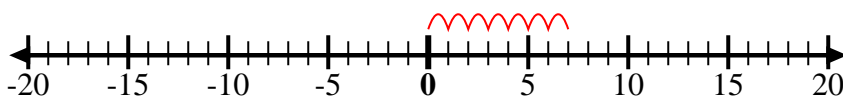
Ej) Empiece en 0  
y agregue -2



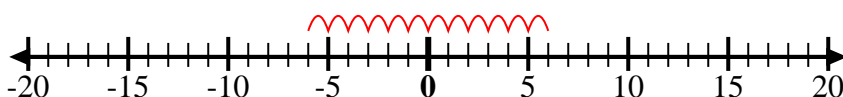
1) Empiece en 0  
y agregue -5



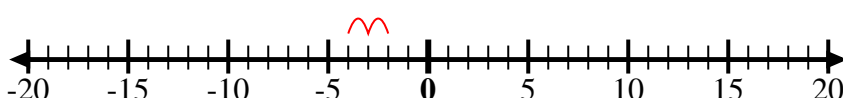
2) Empiece en 0  
y agregue 7



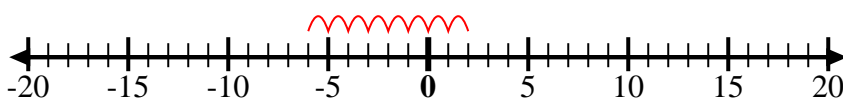
3) Empiece en -6  
y agregue 12



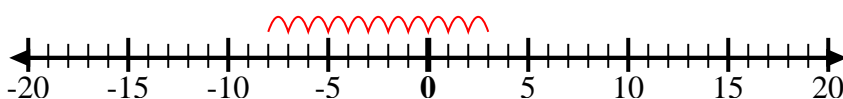
4) Empiece en -2  
y agregue -2



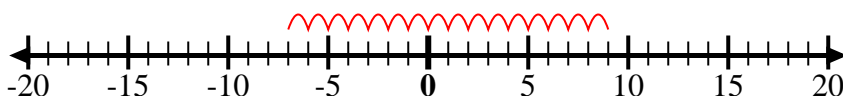
5) Empiece en 2  
y agregue -8



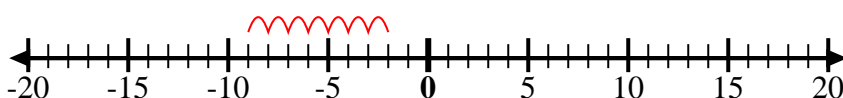
6) Empiece en 3  
y agregue -11



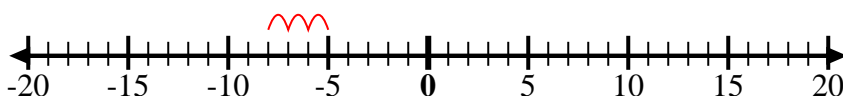
7) Empiece en -7  
y agregue 16



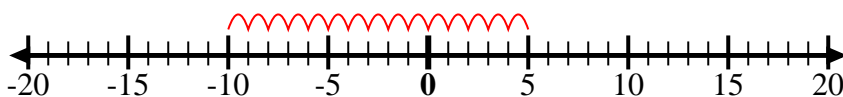
8) Empiece en -9  
y agregue 7



9) Empiece en -8  
y agregue 3



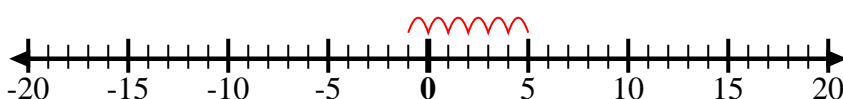
10) Empiece en 5  
y agregue -15



11) Empiece en -8  
y agregue 4



12) Empiece en 5  
y agregue -6



## Respuestas

Ej.  $0 + -2 = -2$

1.  $0 + -5 = -5$

2.  $0 + 7 = 7$

3.  $-6 + 12 = 6$

4.  $-2 + -2 = -4$

5.  $2 + -8 = -6$

6.  $3 + -11 = -8$

7.  $-7 + 16 = 9$

8.  $-9 + 7 = -2$

9.  $-8 + 3 = -5$

10.  $5 + -15 = -10$

11.  $-8 + 4 = -4$

12.  $5 + -6 = -1$