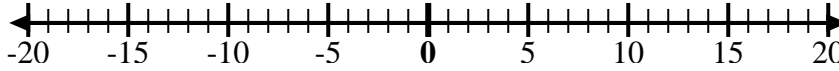


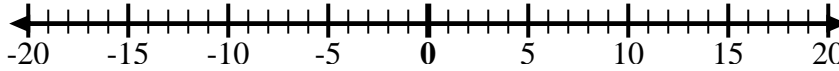


Utilice las rectas numéricas para mostrar cada expresión y resolver.

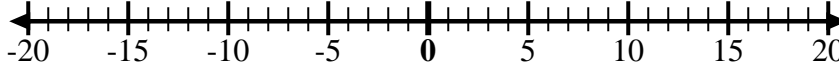
Ej) Empiece en -6  
y agregue 15



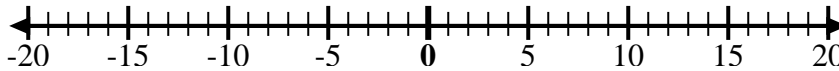
1) Empiece en -3  
y agregue -3



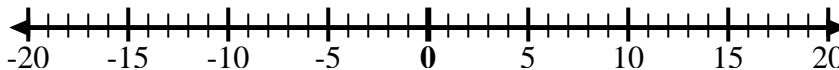
2) Empiece en 10  
y agregue 0



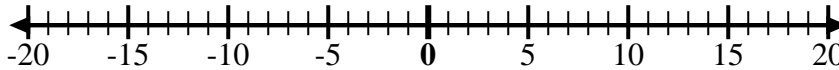
3) Empiece en -1  
y agregue 10



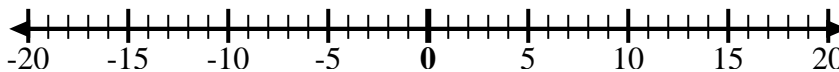
4) Empiece en 2  
y agregue -11



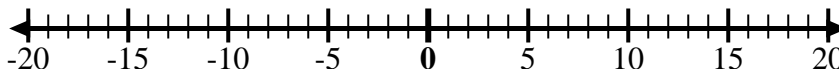
5) Empiece en 3  
y agregue -12



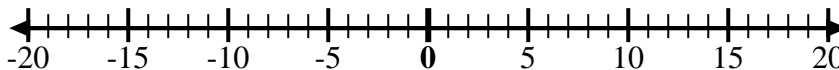
6) Empiece en -8  
y agregue 7



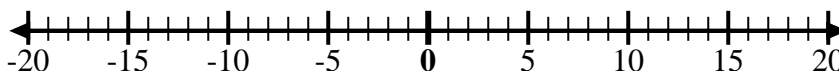
7) Empiece en 0  
y agregue -5



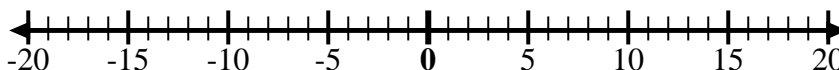
8) Empiece en -6  
y agregue -2



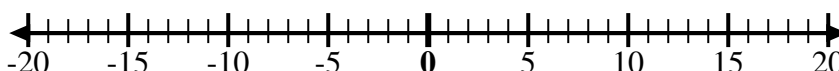
9) Empiece en 9  
y agregue -15



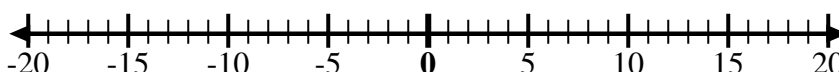
10) Empiece en 4  
y agregue -9



11) Empiece en 1  
y agregue -10



12) Empiece en -5  
y agregue -3



## Respuestas

Ej.  $-6 + 15 = 9$

1. \_\_\_\_\_

2. \_\_\_\_\_

3. \_\_\_\_\_

4. \_\_\_\_\_

5. \_\_\_\_\_

6. \_\_\_\_\_

7. \_\_\_\_\_

8. \_\_\_\_\_

9. \_\_\_\_\_

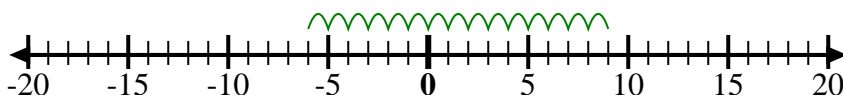
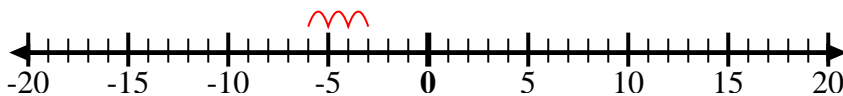
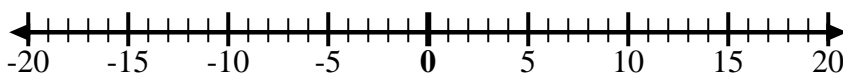
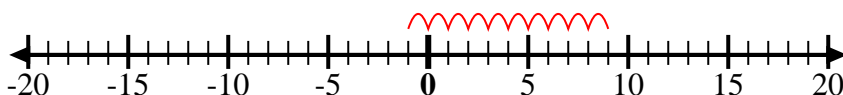
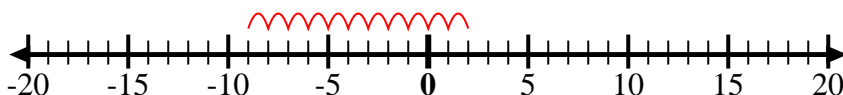
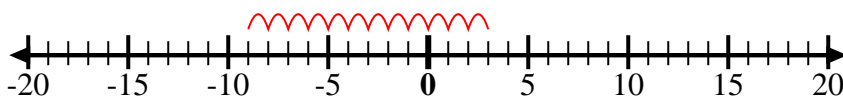
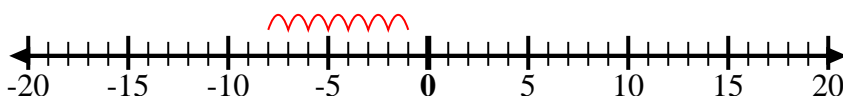
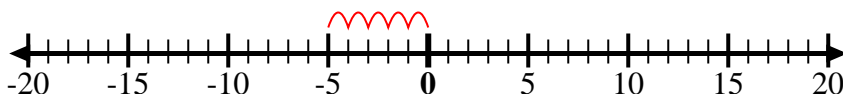
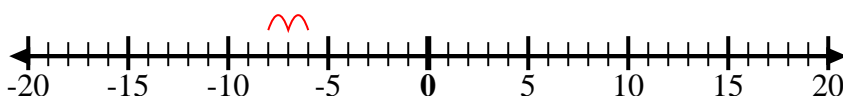
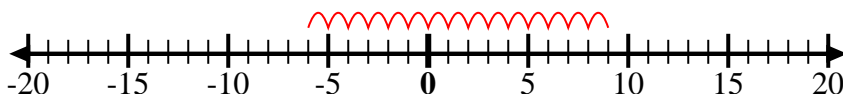
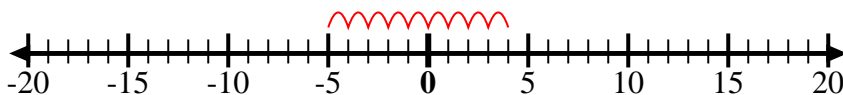
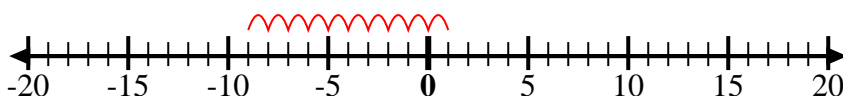
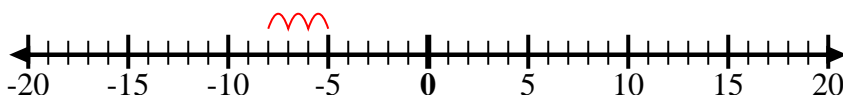
10. \_\_\_\_\_

11. \_\_\_\_\_

12. \_\_\_\_\_



Utilice las rectas numéricas para mostrar cada expresión y resolver.

Ej) Empiece en -6  
y agregue 151) Empiece en -3  
y agregue -32) Empiece en 10  
y agregue 03) Empiece en -1  
y agregue 104) Empiece en 2  
y agregue -115) Empiece en 3  
y agregue -126) Empiece en -8  
y agregue 77) Empiece en 0  
y agregue -58) Empiece en -6  
y agregue -29) Empiece en 9  
y agregue -1510) Empiece en 4  
y agregue -911) Empiece en 1  
y agregue -1012) Empiece en -5  
y agregue -3**Respuestas**

Ej.  $-6 + 15 = 9$

1.  $-3 + -3 = -6$

2.  $10 + 0 = 10$

3.  $-1 + 10 = 9$

4.  $2 + -11 = -9$

5.  $3 + -12 = -9$

6.  $-8 + 7 = -1$

7.  $0 + -5 = -5$

8.  $-6 + -2 = -8$

9.  $9 + -15 = -6$

10.  $4 + -9 = -5$

11.  $1 + -10 = -9$

12.  $-5 + -3 = -8$