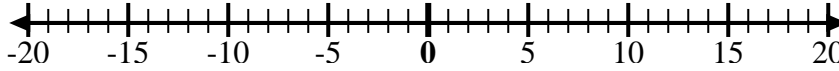


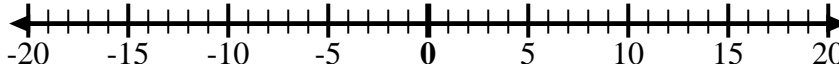


Utilice las rectas numéricas para mostrar cada expresión y resolver.

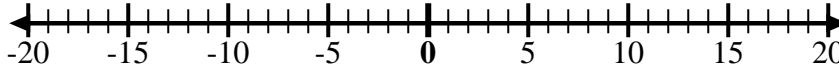
Ej) Empiece en 7
y agregue -12



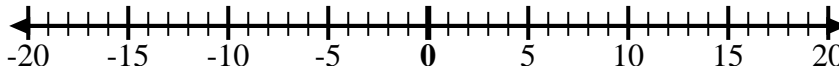
1) Empiece en -2
y agregue 5



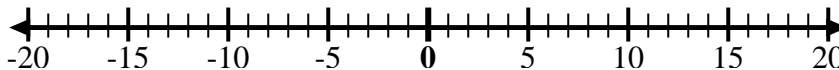
2) Empiece en 8
y agregue -13



3) Empiece en -7
y agregue -2



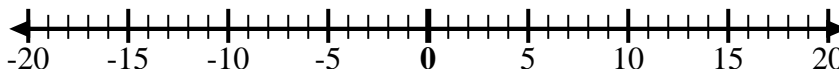
4) Empiece en -4
y agregue -3



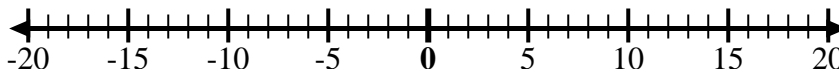
5) Empiece en -3
y agregue -2



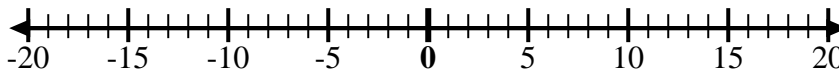
6) Empiece en -7
y agregue 5



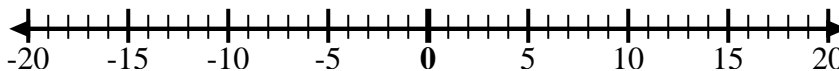
7) Empiece en -6
y agregue -2



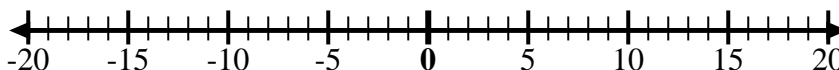
8) Empiece en 1
y agregue -11



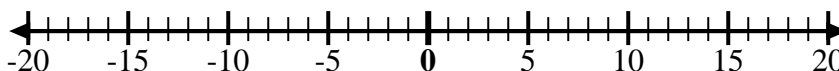
9) Empiece en -7
y agregue 8



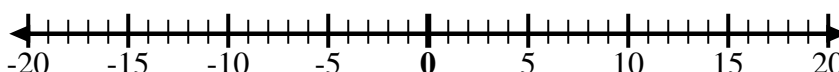
10) Empiece en 1
y agregue -9



11) Empiece en -3
y agregue -3



12) Empiece en 2
y agregue -11



Respuestas

Ej. $7 + -12 = -5$

1. _____

2. _____

3. _____

4. _____

5. _____

6. _____

7. _____

8. _____

9. _____

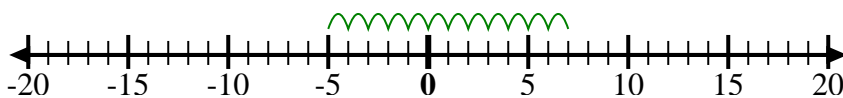
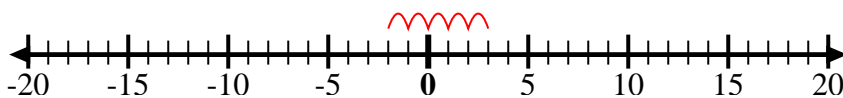
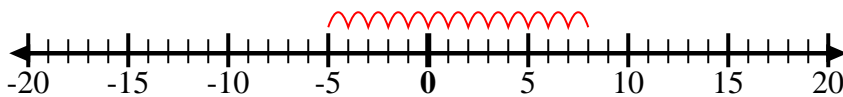
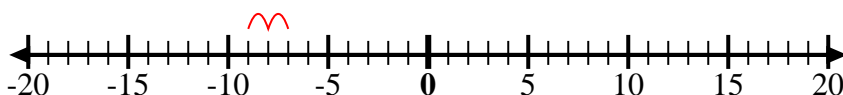
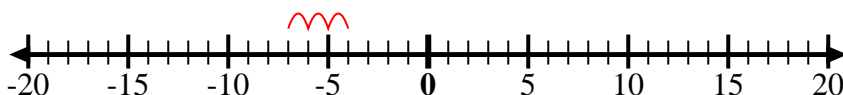
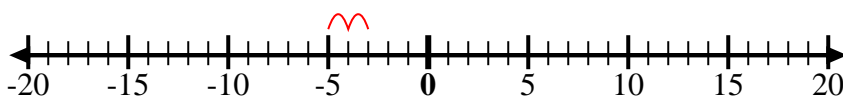
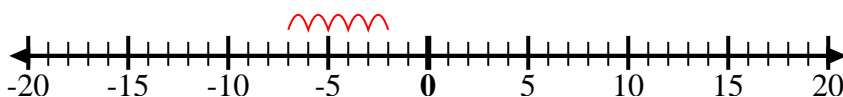
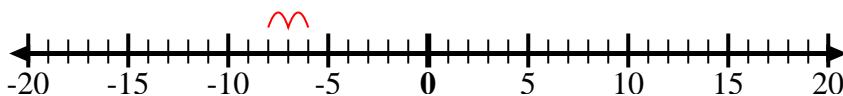
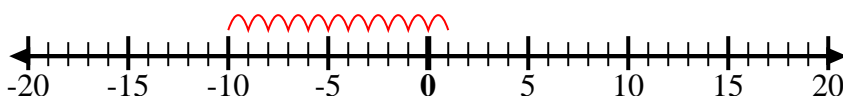
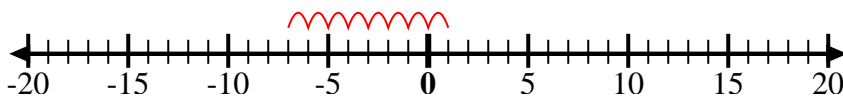
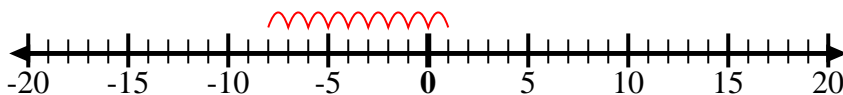
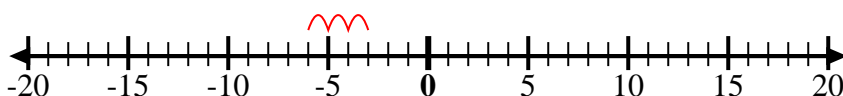
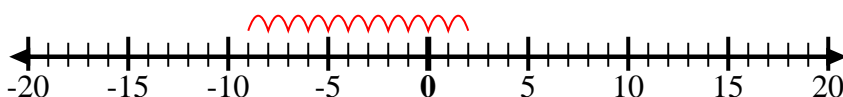
10. _____

11. _____

12. _____



Utilice las rectas numéricas para mostrar cada expresión y resolver.

Ej) Empiece en 7
y agregue -121) Empiece en -2
y agregue 52) Empiece en 8
y agregue -133) Empiece en -7
y agregue -24) Empiece en -4
y agregue -35) Empiece en -3
y agregue -26) Empiece en -7
y agregue 57) Empiece en -6
y agregue -28) Empiece en 1
y agregue -119) Empiece en -7
y agregue 810) Empiece en 1
y agregue -911) Empiece en -3
y agregue -312) Empiece en 2
y agregue -11**Respuestas**

Ej. $7 + -12 = -5$

1. $-2 + 5 = 3$

2. $8 + -13 = -5$

3. $-7 + -2 = -9$

4. $-4 + -3 = -7$

5. $-3 + -2 = -5$

6. $-7 + 5 = -2$

7. $-6 + -2 = -8$

8. $1 + -11 = -10$

9. $-7 + 8 = 1$

10. $1 + -9 = -8$

11. $-3 + -3 = -6$

12. $2 + -11 = -9$