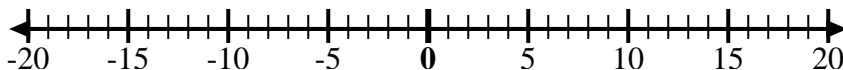


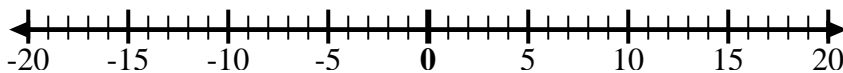


Utilice las rectas numéricas para mostrar cada expresión y resolver.

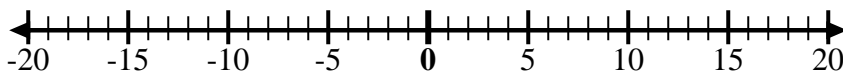
Ej) Empiece en -9  
y agregue 5



1) Empiece en  
-10 y agregue  
14



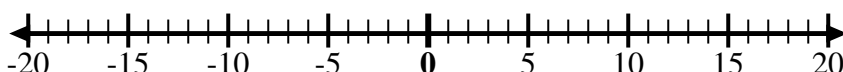
2) Empiece en 3  
y agregue -10



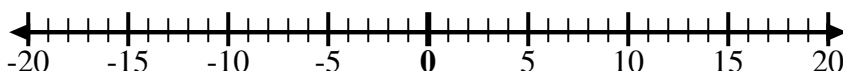
3) Empiece en 7  
y agregue -6



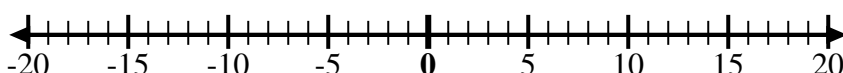
4) Empiece en -8  
y agregue -2



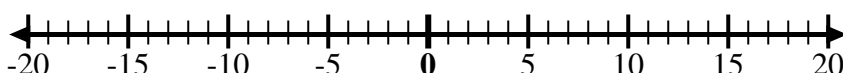
5) Empiece en 5  
y agregue -9



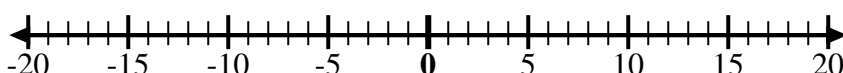
6) Empiece en -5  
y agregue 4



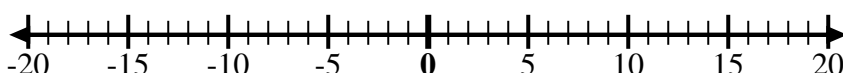
7) Empiece en -6  
y agregue 9



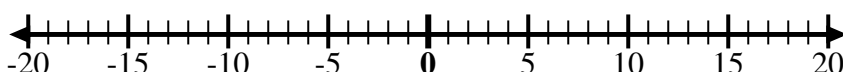
8) Empiece en -4  
y agregue 14



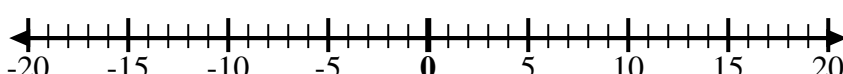
9) Empiece en -4  
y agregue -3



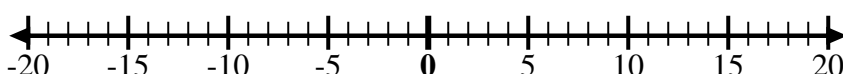
10) Empiece en -7  
y agregue -2



11) Empiece en 0  
y agregue -7



12) Empiece en -2  
y agregue -2



## Respuestas

Ej.  $-9 + 5 = -4$

1. \_\_\_\_\_

2. \_\_\_\_\_

3. \_\_\_\_\_

4. \_\_\_\_\_

5. \_\_\_\_\_

6. \_\_\_\_\_

7. \_\_\_\_\_

8. \_\_\_\_\_

9. \_\_\_\_\_

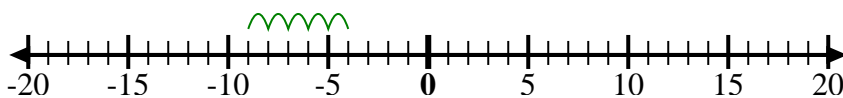
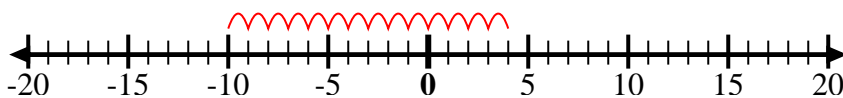
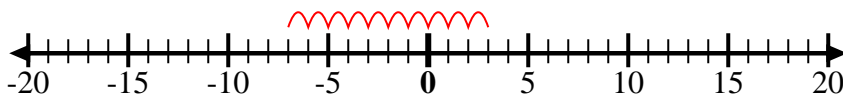
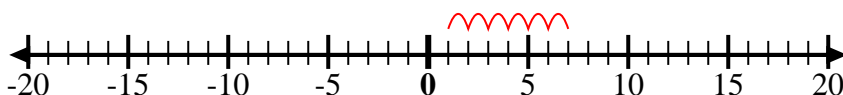
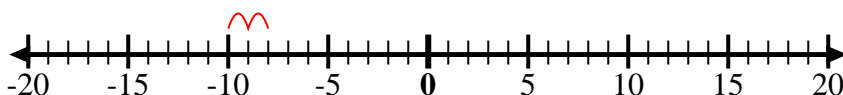
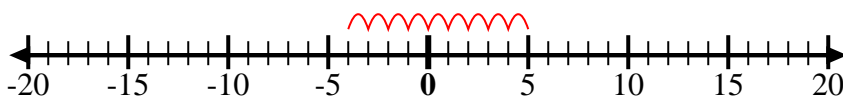
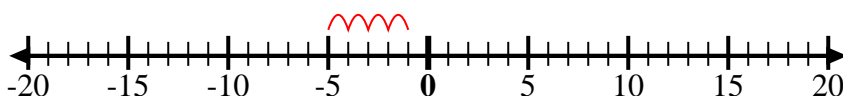
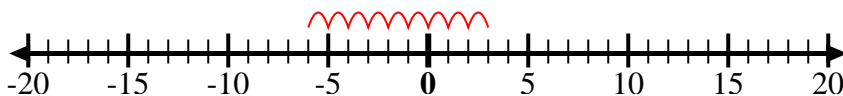
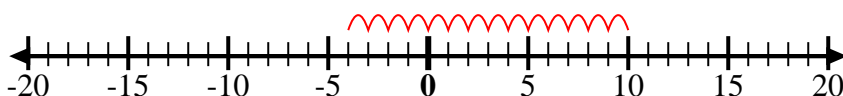
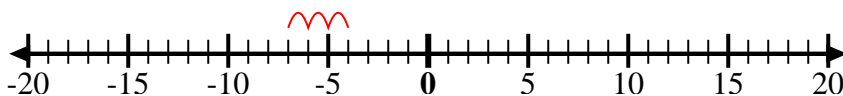
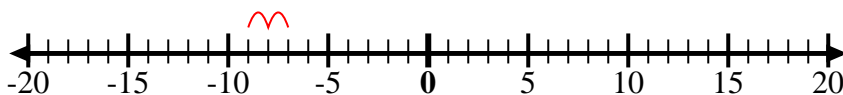
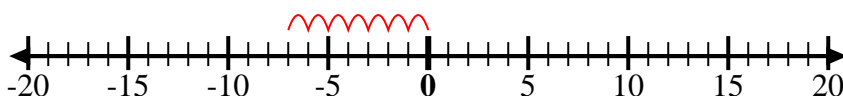
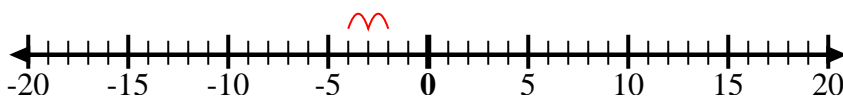
10. \_\_\_\_\_

11. \_\_\_\_\_

12. \_\_\_\_\_



Utilice las rectas numéricas para mostrar cada expresión y resolver.

Ej) Empiece en -9  
y agregue 51) Empiece en  
-10 y agregue  
142) Empiece en 3  
y agregue -103) Empiece en 7  
y agregue -64) Empiece en -8  
y agregue -25) Empiece en 5  
y agregue -96) Empiece en -5  
y agregue 47) Empiece en -6  
y agregue 98) Empiece en -4  
y agregue 149) Empiece en -4  
y agregue -310) Empiece en -7  
y agregue -211) Empiece en 0  
y agregue -712) Empiece en -2  
y agregue -2**Respuestas**

Ej.  $-9 + 5 = -4$

1.  $-10 + 14 = 4$

2.  $3 + -10 = -7$

3.  $7 + -6 = 1$

4.  $-8 + -2 = -10$

5.  $5 + -9 = -4$

6.  $-5 + 4 = -1$

7.  $-6 + 9 = 3$

8.  $-4 + 14 = 10$

9.  $-4 + -3 = -7$

10.  $-7 + -2 = -9$

11.  $0 + -7 = -7$

12.  $-2 + -2 = -4$