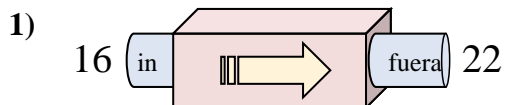
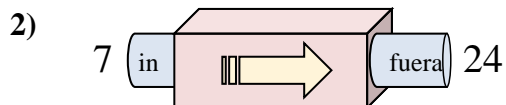




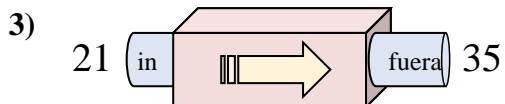
Determinar cuál regla está usando la máquina de funciones.

Respuestas

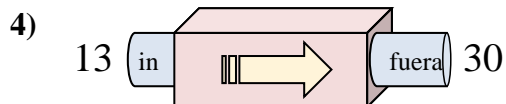
- A. Agregar 11
- B. Agregar 7
- C. Agregar 6
- D. Agregar 5



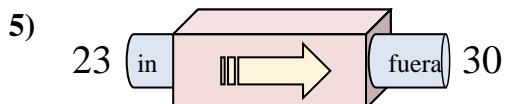
- A. Agregar 17
- B. Agregar 18
- C. Restar 14
- D. Restar 18



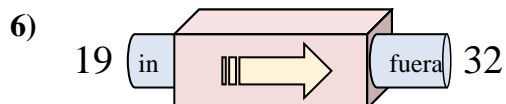
- A. Restar 11
- B. Agregar 18
- C. Agregar 14
- D. Restar 15



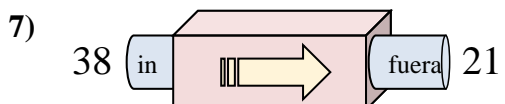
- A. Agregar 18
- B. Agregar 21
- C. Agregar 17
- D. Restar 19



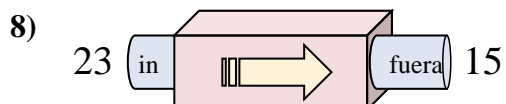
- A. Restar 11
- B. Agregar 7
- C. Restar 3
- D. Agregar 4



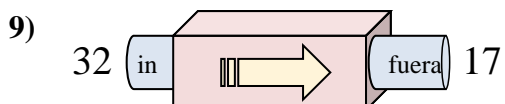
- A. Restar 13
- B. Agregar 13
- C. Agregar 17
- D. Restar 8



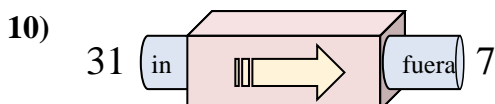
- A. Restar 18
- B. Restar 17
- C. Agregar 13
- D. Restar 14



- A. Restar 9
- B. Restar 11
- C. Restar 8
- D. Agregar 9



- A. Restar 11
- B. Restar 15
- C. Agregar 10
- D. Restar 20



- A. Restar 19
- B. Restar 25
- C. Restar 24
- D. Agregar 22

1. _____

2. _____

3. _____

4. _____

5. _____

6. _____

7. _____

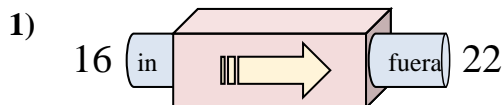
8. _____

9. _____

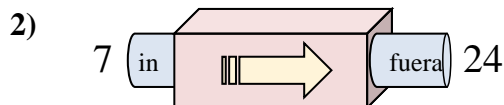
10. _____



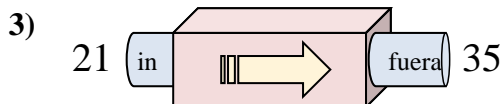
Determinar cuál regla está usando la máquina de funciones.

Respuestas

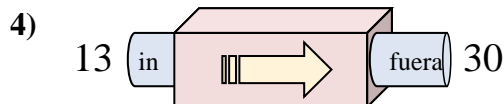
- A. Agregar 11
B. Agregar 7
C. Agregar 6
D. Agregar 5



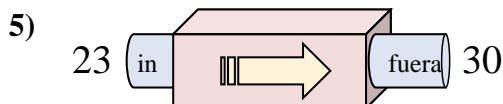
- A. Agregar 17
B. Agregar 18
C. Restar 14
D. Restar 18



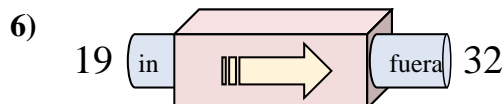
- A. Restar 11
B. Agregar 18
C. Agregar 14
D. Restar 15



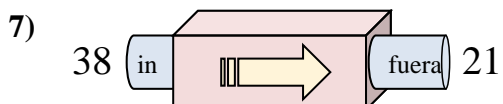
- A. Agregar 18
B. Agregar 21
C. Agregar 17
D. Restar 19



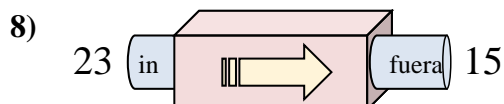
- A. Restar 11
B. Agregar 7
C. Restar 3
D. Agregar 4



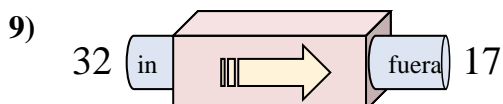
- A. Restar 13
B. Agregar 13
C. Agregar 17
D. Restar 8



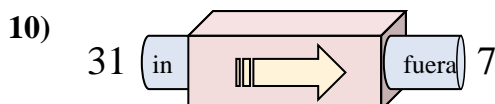
- A. Restar 18
B. Restar 17
C. Agregar 13
D. Restar 14



- A. Restar 9
B. Restar 11
C. Restar 8
D. Agregar 9



- A. Restar 11
B. Restar 15
C. Agregar 10
D. Restar 20



- A. Restar 19
B. Restar 25
C. Restar 24
D. Agregar 22

1. **C**
2. **A**
3. **C**
4. **C**
5. **B**
6. **B**
7. **B**
8. **C**
9. **B**
10. **C**