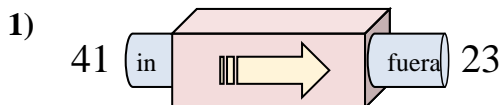
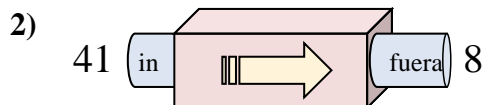




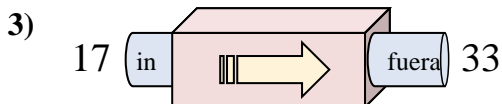
Determinar cuál regla está usando la máquina de funciones.

Respuestas

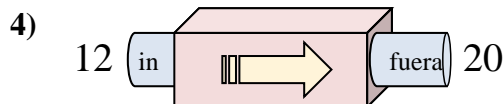
- A. Restar 18
- B. Agregar 21
- C. Agregar 16
- D. Restar 16



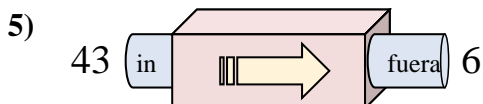
- A. Restar 33
- B. Restar 29
- C. Agregar 31
- D. Restar 31



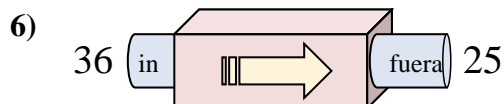
- A. Agregar 16
- B. Restar 18
- C. Agregar 20
- D. Agregar 18



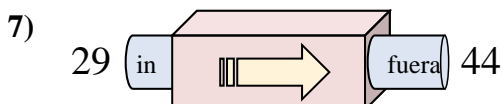
- A. Agregar 11
- B. Restar 7
- C. Agregar 7
- D. Agregar 8



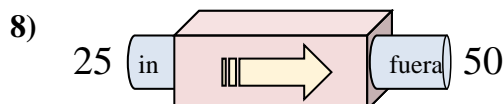
- A. Restar 37
- B. Restar 38
- C. Restar 34
- D. Agregar 42



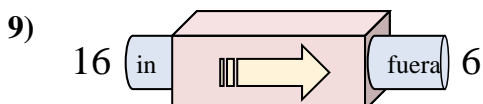
- A. Restar 14
- B. Restar 15
- C. Agregar 8
- D. Restar 11



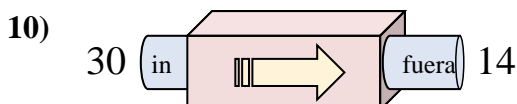
- A. Restar 12
- B. Agregar 16
- C. Agregar 17
- D. Agregar 15



- A. Agregar 30
- B. Restar 30
- C. Agregar 25
- D. Agregar 26



- A. Restar 6
- B. Restar 10
- C. Restar 15
- D. Restar 13

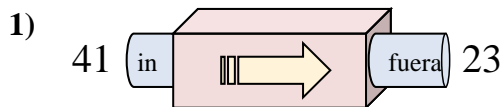


- A. Restar 19
- B. Restar 12
- C. Restar 16
- D. Agregar 12

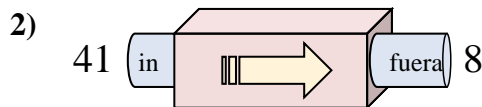
1. _____
2. _____
3. _____
4. _____
5. _____
6. _____
7. _____
8. _____
9. _____
10. _____



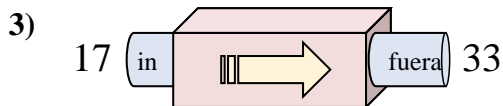
Determinar cuál regla está usando la máquina de funciones.

Respuestas

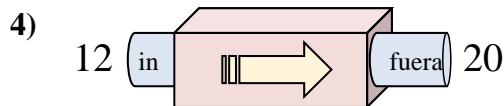
- A. Restar 18
- B. Agregar 21
- C. Agregar 16
- D. Restar 16



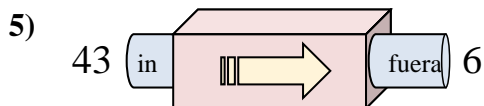
- A. Restar 33
- B. Restar 29
- C. Agregar 31
- D. Restar 31



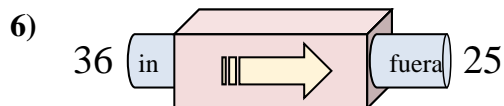
- A. Agregar 16
- B. Restar 18
- C. Agregar 20
- D. Agregar 18



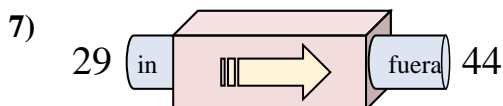
- A. Agregar 11
- B. Restar 7
- C. Agregar 7
- D. Agregar 8



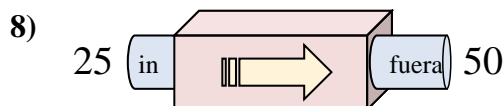
- A. Restar 37
- B. Restar 38
- C. Restar 34
- D. Agregar 42



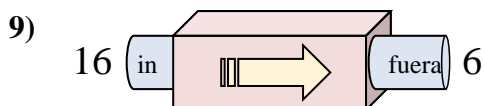
- A. Restar 14
- B. Restar 15
- C. Agregar 8
- D. Restar 11



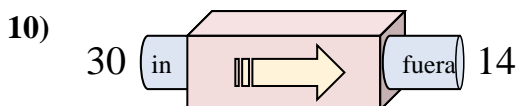
- A. Restar 12
- B. Agregar 16
- C. Agregar 17
- D. Agregar 15



- A. Agregar 30
- B. Restar 30
- C. Agregar 25
- D. Agregar 26



- A. Restar 6
- B. Restar 10
- C. Restar 15
- D. Restar 13



- A. Restar 19
- B. Restar 12
- C. Restar 16
- D. Agregar 12

1. **A**2. **A**3. **A**4. **D**5. **A**6. **D**7. **D**8. **C**9. **B**10. **C**