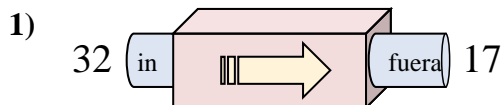
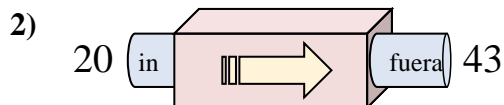




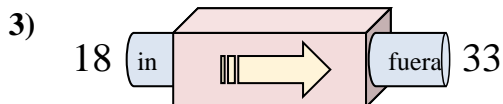
Determinar cuál regla está usando la máquina de funciones.

**Respuestas**

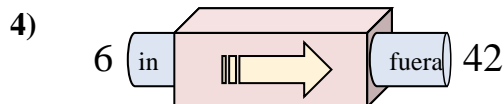
- A. Restar 20
- B. Restar 14
- C. Agregar 12
- D. Restar 15



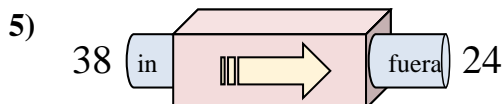
- A. Agregar 24
- B. Agregar 21
- C. Agregar 20
- D. Agregar 23



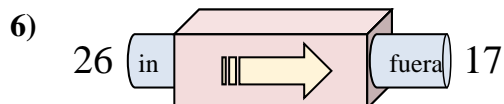
- A. Agregar 15
- B. Restar 19
- C. Agregar 17
- D. Agregar 10



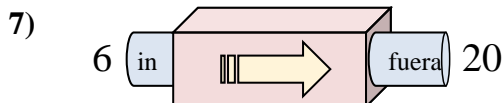
- A. Agregar 31
- B. Restar 31
- C. Agregar 36
- D. Restar 40



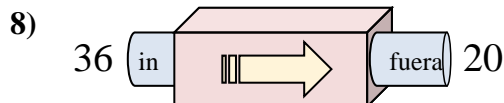
- A. Restar 12
- B. Restar 14
- C. Restar 13
- D. Agregar 11



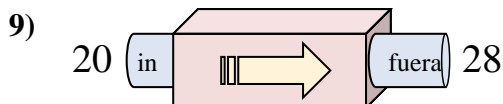
- A. Agregar 6
- B. Restar 8
- C. Restar 9
- D. Restar 4



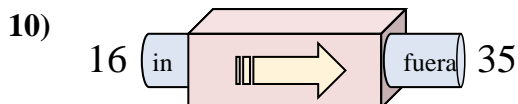
- A. Restar 13
- B. Restar 14
- C. Agregar 18
- D. Agregar 14



- A. Restar 16
- B. Restar 11
- C. Agregar 16
- D. Restar 13



- A. Agregar 5
- B. Agregar 8
- C. Restar 11
- D. Agregar 7



- A. Agregar 24
- B. Agregar 19
- C. Restar 16
- D. Restar 24

1. \_\_\_\_\_

2. \_\_\_\_\_

3. \_\_\_\_\_

4. \_\_\_\_\_

5. \_\_\_\_\_

6. \_\_\_\_\_

7. \_\_\_\_\_

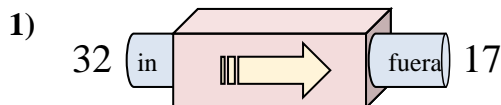
8. \_\_\_\_\_

9. \_\_\_\_\_

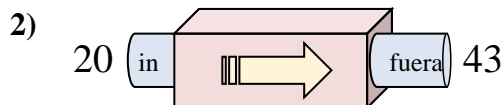
10. \_\_\_\_\_



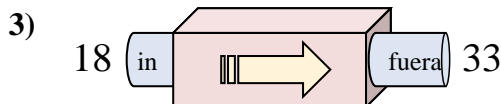
Determinar cuál regla está usando la máquina de funciones.

**Respuestas**

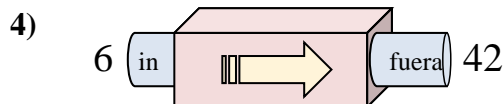
- A. Restar 20
- B. Restar 14
- C. Agregar 12
- D. Restar 15



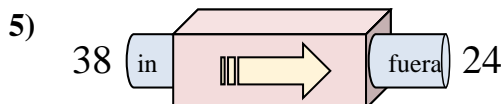
- A. Agregar 24
- B. Agregar 21
- C. Agregar 20
- D. Agregar 23



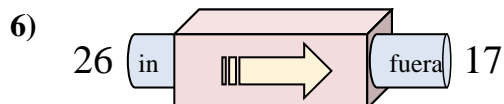
- A. Agregar 15
- B. Restar 19
- C. Agregar 17
- D. Agregar 10



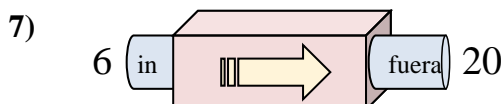
- A. Agregar 31
- B. Restar 31
- C. Agregar 36
- D. Restar 40



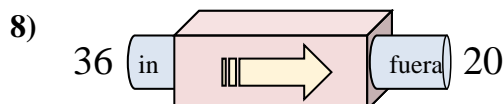
- A. Restar 12
- B. Restar 14
- C. Restar 13
- D. Agregar 11



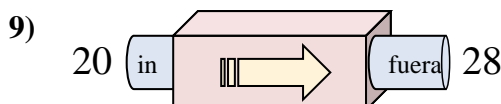
- A. Agregar 6
- B. Restar 8
- C. Restar 9
- D. Restar 4



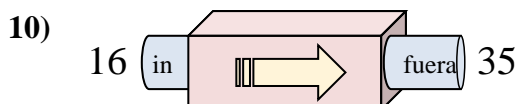
- A. Restar 13
- B. Restar 14
- C. Agregar 18
- D. Agregar 14



- A. Restar 16
- B. Restar 11
- C. Agregar 16
- D. Restar 13



- A. Agregar 5
- B. Agregar 8
- C. Restar 11
- D. Agregar 7



- A. Agregar 24
- B. Agregar 19
- C. Restar 16
- D. Restar 24

1. **D**2. **D**3. **A**4. **C**5. **B**6. **C**7. **D**8. **A**9. **B**10. **B**