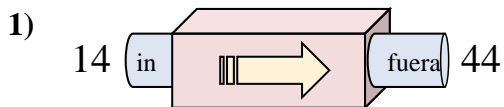


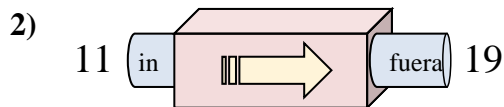


Determinar cuál regla está usando la máquina de funciones.

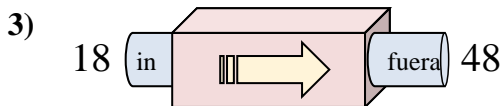
Respuestas



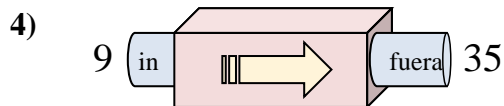
- A. Agregar 27
- B. Agregar 30
- C. Agregar 25
- D. Restar 32



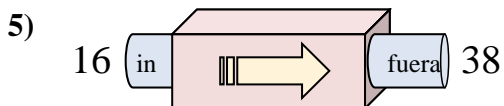
- A. Agregar 8
- B. Agregar 6
- C. Restar 3
- D. Agregar 4



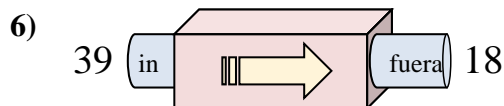
- A. Restar 25
- B. Agregar 30
- C. Agregar 29
- D. Agregar 34



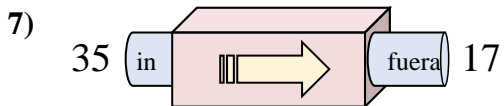
- A. Agregar 28
- B. Agregar 26
- C. Restar 30
- D. Restar 22



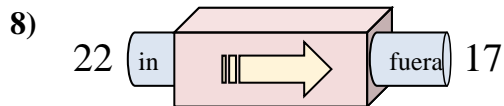
- A. Agregar 22
- B. Agregar 27
- C. Agregar 24
- D. Restar 17



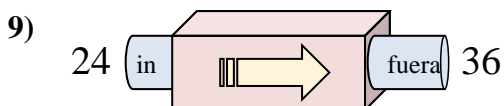
- A. Restar 20
- B. Restar 23
- C. Restar 16
- D. Restar 21



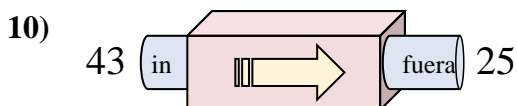
- A. Restar 17
- B. Agregar 21
- C. Restar 14
- D. Restar 18



- A. Restar 10
- B. Agregar 2
- C. Restar 6
- D. Restar 5



- A. Restar 17
- B. Restar 12
- C. Agregar 12
- D. Agregar 9



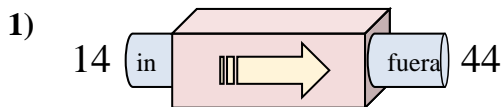
- A. Agregar 15
- B. Restar 16
- C. Agregar 13
- D. Restar 18

1. _____
2. _____
3. _____
4. _____
5. _____
6. _____
7. _____
8. _____
9. _____
10. _____

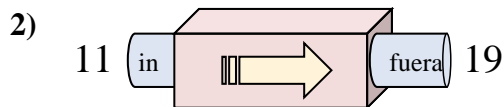


Determinar cuál regla está usando la máquina de funciones.

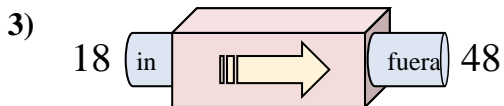
Respuestas



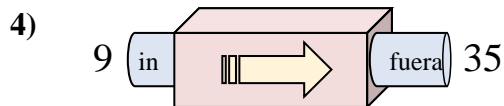
- A. Agregar 27
- B. Agregar 30
- C. Agregar 25
- D. Restar 32



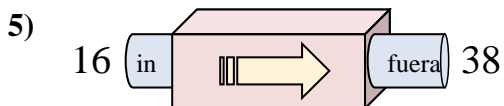
- A. Agregar 8
- B. Agregar 6
- C. Restar 3
- D. Agregar 4



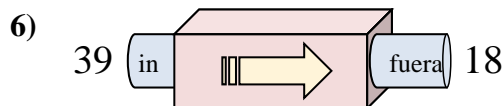
- A. Restar 25
- B. Agregar 30
- C. Agregar 29
- D. Agregar 34



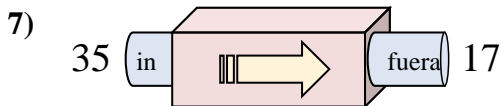
- A. Agregar 28
- B. Agregar 26
- C. Restar 30
- D. Restar 22



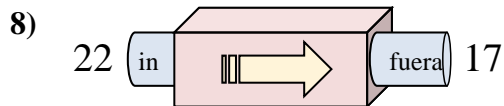
- A. Agregar 22
- B. Agregar 27
- C. Agregar 24
- D. Restar 17



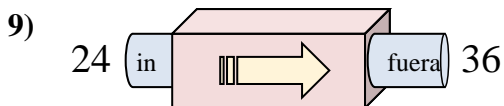
- A. Restar 20
- B. Restar 23
- C. Restar 16
- D. Restar 21



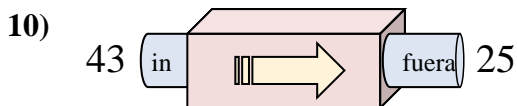
- A. Restar 17
- B. Agregar 21
- C. Restar 14
- D. Restar 18



- A. Restar 10
- B. Agregar 2
- C. Restar 6
- D. Restar 5



- A. Restar 17
- B. Restar 12
- C. Agregar 12
- D. Agregar 9



- A. Agregar 15
- B. Restar 16
- C. Agregar 13
- D. Restar 18

- 1. **B**
- 2. **A**
- 3. **B**
- 4. **B**
- 5. **A**
- 6. **D**
- 7. **D**
- 8. **D**
- 9. **C**
- 10. **D**