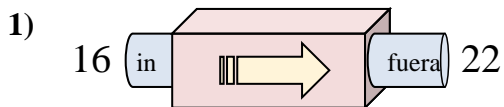


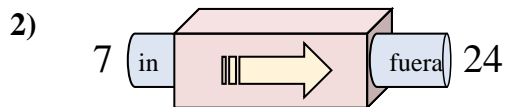


Determinar cuál regla está usando la máquina de funciones.

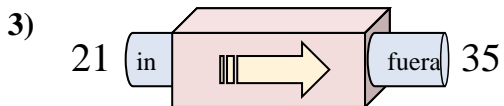
Respuestas



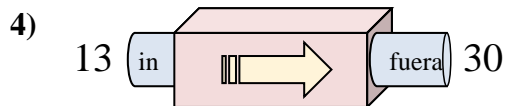
- A. Agregar 11
- B. Agregar 7
- C. Agregar 6
- D. Agregar 5



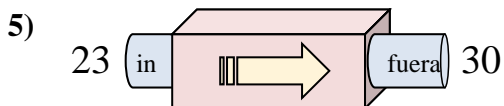
- A. Agregar 17
- B. Agregar 18
- C. Restar 14
- D. Restar 18



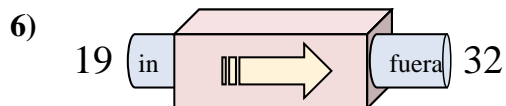
- A. Restar 11
- B. Agregar 18
- C. Agregar 14
- D. Restar 15



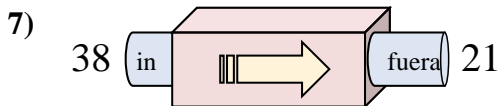
- A. Agregar 18
- B. Agregar 21
- C. Agregar 17
- D. Restar 19



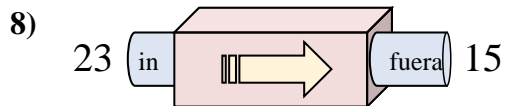
- A. Restar 11
- B. Agregar 7
- C. Restar 3
- D. Agregar 4



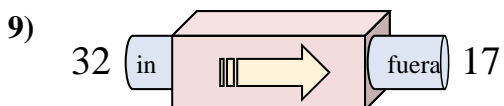
- A. Restar 13
- B. Agregar 13
- C. Agregar 17
- D. Restar 8



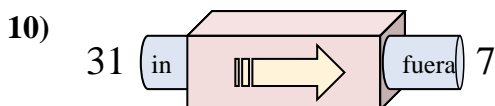
- A. Restar 18
- B. Restar 17
- C. Agregar 13
- D. Restar 14



- A. Restar 9
- B. Restar 11
- C. Restar 8
- D. Agregar 9



- A. Restar 11
- B. Restar 15
- C. Agregar 10
- D. Restar 20

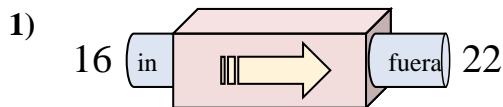


- A. Restar 19
- B. Restar 25
- C. Restar 24
- D. Agregar 22

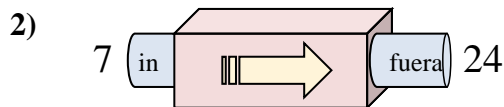
1. _____
2. _____
3. _____
4. _____
5. _____
6. _____
7. _____
8. _____
9. _____
10. _____



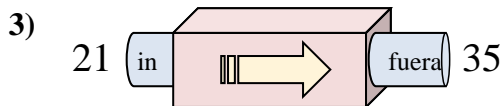
Determinar cuál regla está usando la máquina de funciones.

Respuestas

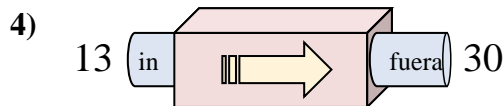
- A. Agregar 11
- B. Agregar 7
- C. Agregar 6
- D. Agregar 5



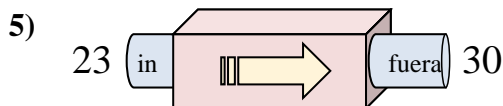
- A. Agregar 17
- B. Agregar 18
- C. Restar 14
- D. Restar 18



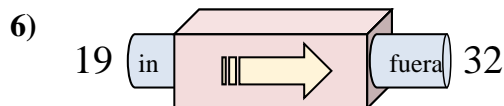
- A. Restar 11
- B. Agregar 18
- C. Agregar 14
- D. Restar 15



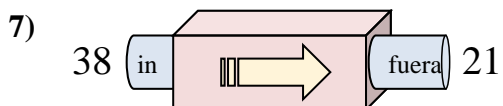
- A. Agregar 18
- B. Agregar 21
- C. Agregar 17
- D. Restar 19



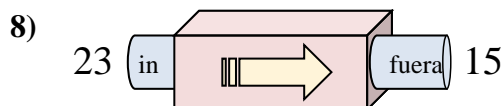
- A. Restar 11
- B. Agregar 7
- C. Restar 3
- D. Agregar 4



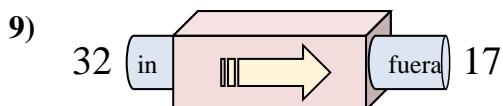
- A. Restar 13
- B. Agregar 13
- C. Agregar 17
- D. Restar 8



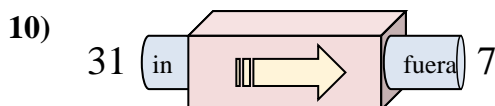
- A. Restar 18
- B. Restar 17
- C. Agregar 13
- D. Restar 14



- A. Restar 9
- B. Restar 11
- C. Restar 8
- D. Agregar 9



- A. Restar 11
- B. Restar 15
- C. Agregar 10
- D. Restar 20



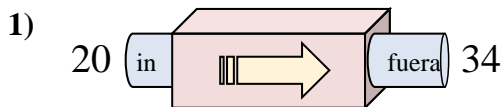
- A. Restar 19
- B. Restar 25
- C. Restar 24
- D. Agregar 22

1. **C**2. **A**3. **C**4. **C**5. **B**6. **B**7. **B**8. **C**9. **B**10. **C**

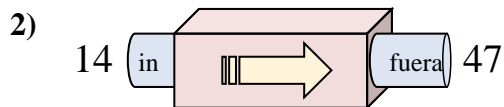


Determinar cuál regla está usando la máquina de funciones.

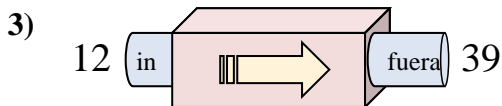
Respuestas



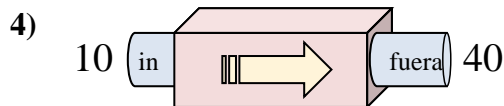
- A. Restar 13
- B. Agregar 14
- C. Agregar 12
- D. Agregar 9



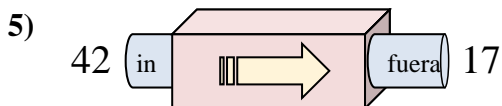
- A. Agregar 32
- B. Agregar 33
- C. Restar 35
- D. Agregar 37



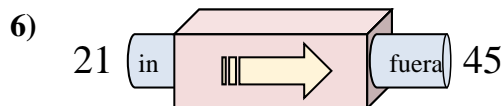
- A. Agregar 31
- B. Agregar 27
- C. Agregar 26
- D. Restar 24



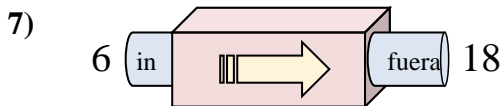
- A. Restar 28
- B. Restar 31
- C. Agregar 26
- D. Agregar 30



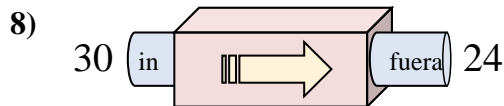
- A. Restar 29
- B. Agregar 24
- C. Restar 25
- D. Agregar 22



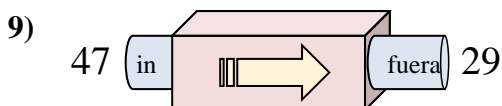
- A. Agregar 24
- B. Agregar 27
- C. Restar 29
- D. Agregar 25



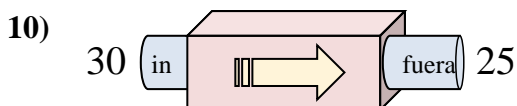
- A. Agregar 9
- B. Agregar 12
- C. Restar 9
- D. Agregar 14



- A. Restar 6
- B. Agregar 5
- C. Restar 11
- D. Restar 10



- A. Agregar 22
- B. Restar 18
- C. Restar 21
- D. Restar 19



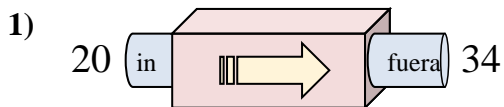
- A. Agregar 8
- B. Agregar 10
- C. Restar 7
- D. Restar 5

1. _____
2. _____
3. _____
4. _____
5. _____
6. _____
7. _____
8. _____
9. _____
10. _____

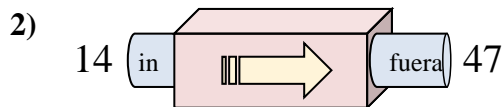


Determinar cuál regla está usando la máquina de funciones.

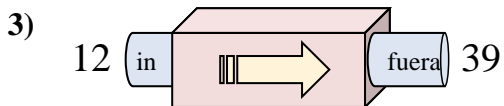
Respuestas



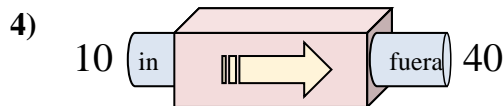
- A. Restar 13
- B. Agregar 14
- C. Agregar 12
- D. Agregar 9



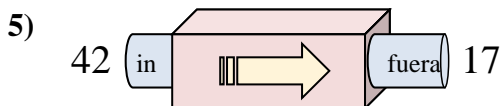
- A. Agregar 32
- B. Agregar 33
- C. Restar 35
- D. Agregar 37



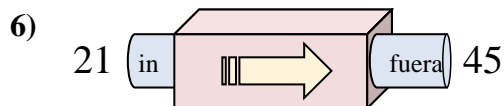
- A. Agregar 31
- B. Agregar 27
- C. Agregar 26
- D. Restar 24



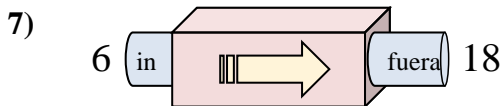
- A. Restar 28
- B. Restar 31
- C. Agregar 26
- D. Agregar 30



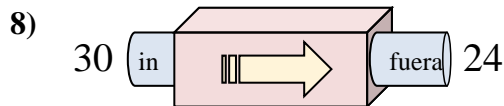
- A. Restar 29
- B. Agregar 24
- C. Restar 25
- D. Agregar 22



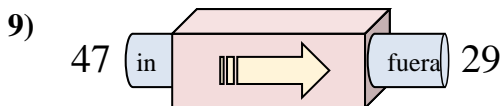
- A. Agregar 24
- B. Agregar 27
- C. Restar 29
- D. Agregar 25



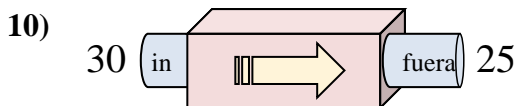
- A. Agregar 9
- B. Agregar 12
- C. Restar 9
- D. Agregar 14



- A. Restar 6
- B. Agregar 5
- C. Restar 11
- D. Restar 10



- A. Agregar 22
- B. Restar 18
- C. Restar 21
- D. Restar 19

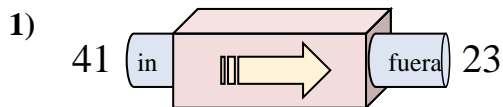


- A. Agregar 8
- B. Agregar 10
- C. Restar 7
- D. Restar 5

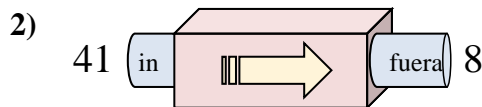
- 1. **B**
- 2. **B**
- 3. **B**
- 4. **D**
- 5. **C**
- 6. **A**
- 7. **B**
- 8. **A**
- 9. **B**
- 10. **D**



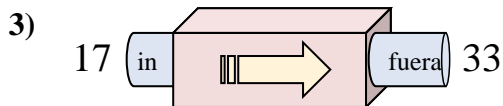
Determinar cuál regla está usando la máquina de funciones.

Respuestas

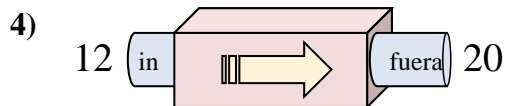
- A. Restar 18
- B. Agregar 21
- C. Agregar 16
- D. Restar 16



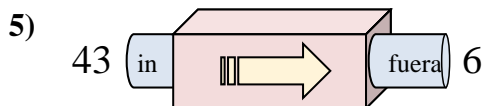
- A. Restar 33
- B. Restar 29
- C. Agregar 31
- D. Restar 31



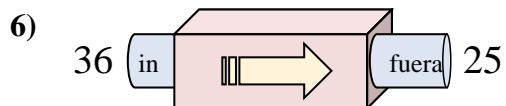
- A. Agregar 16
- B. Restar 18
- C. Agregar 20
- D. Agregar 18



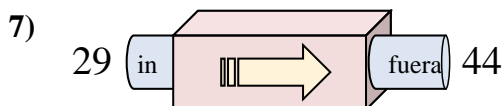
- A. Agregar 11
- B. Restar 7
- C. Agregar 7
- D. Agregar 8



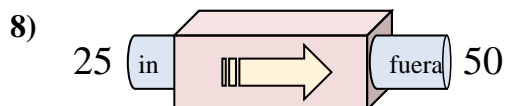
- A. Restar 37
- B. Restar 38
- C. Restar 34
- D. Agregar 42



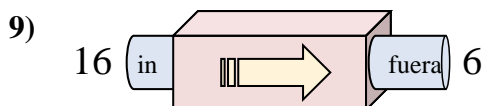
- A. Restar 14
- B. Restar 15
- C. Agregar 8
- D. Restar 11



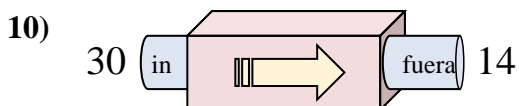
- A. Restar 12
- B. Agregar 16
- C. Agregar 17
- D. Agregar 15



- A. Agregar 30
- B. Restar 30
- C. Agregar 25
- D. Agregar 26



- A. Restar 6
- B. Restar 10
- C. Restar 15
- D. Restar 13

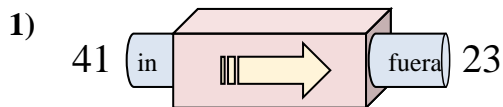


- A. Restar 19
- B. Restar 12
- C. Restar 16
- D. Agregar 12

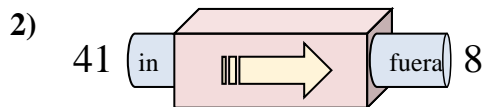
1. _____
2. _____
3. _____
4. _____
5. _____
6. _____
7. _____
8. _____
9. _____
10. _____



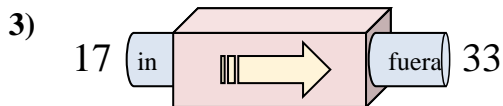
Determinar cuál regla está usando la máquina de funciones.

Respuestas

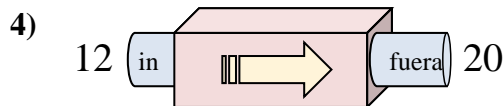
- A. Restar 18
- B. Agregar 21
- C. Agregar 16
- D. Restar 16



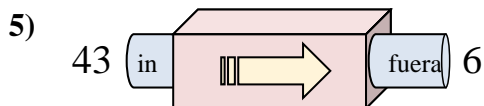
- A. Restar 33
- B. Restar 29
- C. Agregar 31
- D. Restar 31



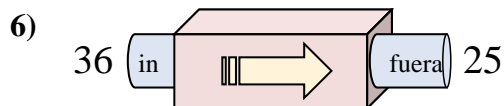
- A. Agregar 16
- B. Restar 18
- C. Agregar 20
- D. Agregar 18



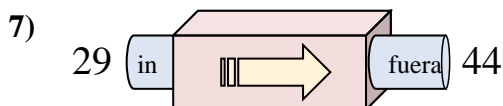
- A. Agregar 11
- B. Restar 7
- C. Agregar 7
- D. Agregar 8



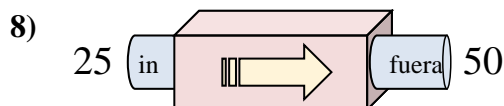
- A. Restar 37
- B. Restar 38
- C. Restar 34
- D. Agregar 42



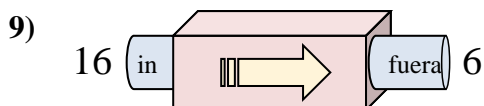
- A. Restar 14
- B. Restar 15
- C. Agregar 8
- D. Restar 11



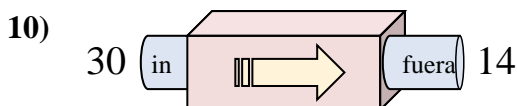
- A. Restar 12
- B. Agregar 16
- C. Agregar 17
- D. Agregar 15



- A. Agregar 30
- B. Restar 30
- C. Agregar 25
- D. Agregar 26



- A. Restar 6
- B. Restar 10
- C. Restar 15
- D. Restar 13

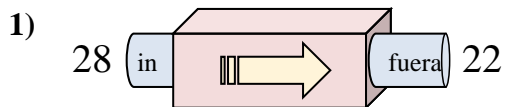


- A. Restar 19
- B. Restar 12
- C. Restar 16
- D. Agregar 12

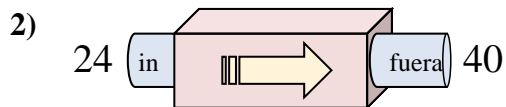
1. **A**2. **A**3. **A**4. **D**5. **A**6. **D**7. **D**8. **C**9. **B**10. **C**



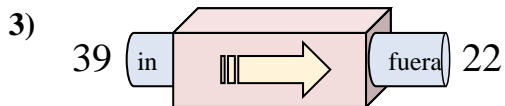
Determinar cuál regla está usando la máquina de funciones.

Respuestas

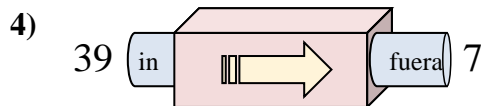
- A. Restar 5
- B. Restar 11
- C. Restar 6
- D. Agregar 5



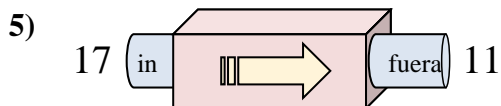
- A. Agregar 20
- B. Agregar 17
- C. Restar 19
- D. Agregar 16



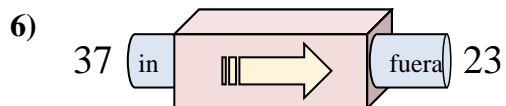
- A. Agregar 17
- B. Restar 17
- C. Restar 20
- D. Restar 19



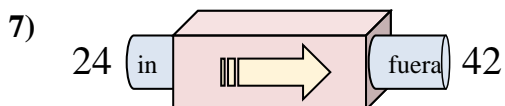
- A. Restar 30
- B. Restar 35
- C. Restar 32
- D. Restar 34



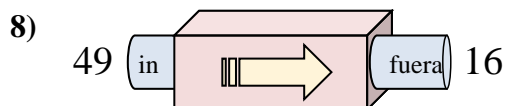
- A. Agregar 9
- B. Restar 8
- C. Restar 6
- D. Restar 2



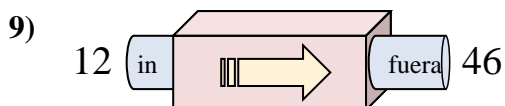
- A. Restar 12
- B. Agregar 10
- C. Restar 14
- D. Restar 15



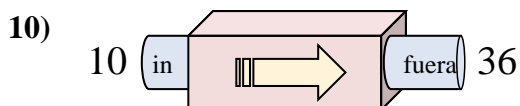
- A. Agregar 18
- B. Agregar 15
- C. Agregar 22
- D. Agregar 14



- A. Restar 33
- B. Restar 32
- C. Agregar 32
- D. Agregar 30



- A. Agregar 37
- B. Agregar 32
- C. Agregar 34
- D. Agregar 38

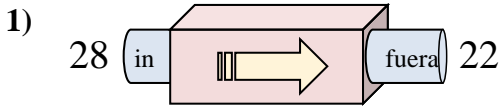


- A. Agregar 29
- B. Agregar 26
- C. Restar 29
- D. Agregar 30

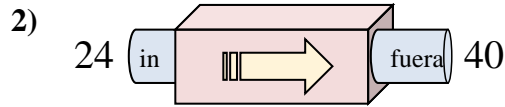
1. _____
2. _____
3. _____
4. _____
5. _____
6. _____
7. _____
8. _____
9. _____
10. _____



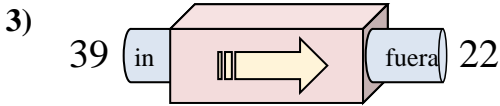
Determinar cuál regla está usando la máquina de funciones.

Respuestas

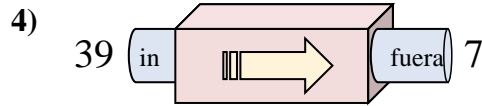
- A. Restar 5
- B. Restar 11
- C. Restar 6
- D. Agregar 5



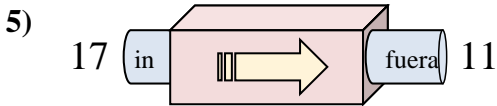
- A. Agregar 20
- B. Agregar 17
- C. Restar 19
- D. Agregar 16



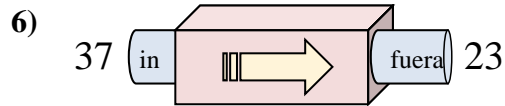
- A. Agregar 17
- B. Restar 17
- C. Restar 20
- D. Restar 19



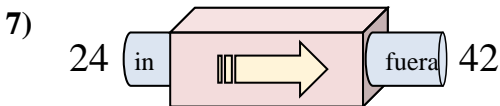
- A. Restar 30
- B. Restar 35
- C. Restar 32
- D. Restar 34



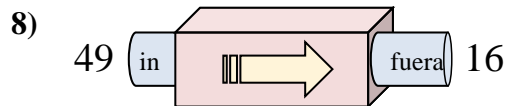
- A. Agregar 9
- B. Restar 8
- C. Restar 6
- D. Restar 2



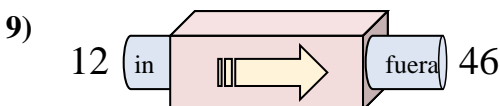
- A. Restar 12
- B. Agregar 10
- C. Restar 14
- D. Restar 15



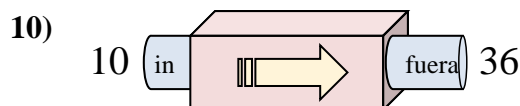
- A. Agregar 18
- B. Agregar 15
- C. Agregar 22
- D. Agregar 14



- A. Restar 33
- B. Restar 32
- C. Agregar 32
- D. Agregar 30



- A. Agregar 37
- B. Agregar 32
- C. Agregar 34
- D. Agregar 38



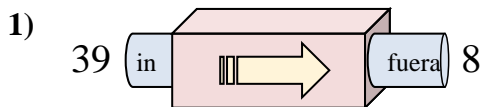
- A. Agregar 29
- B. Agregar 26
- C. Restar 29
- D. Agregar 30

1. **C**2. **D**3. **B**4. **C**5. **C**6. **C**7. **A**8. **A**9. **C**10. **B**

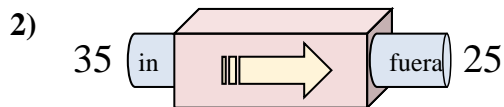


Determinar cuál regla está usando la máquina de funciones.

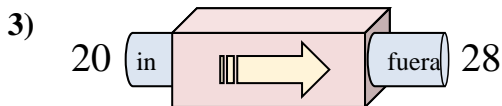
Respuestas



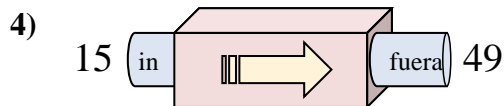
- A. Restar 34
- B. Agregar 28
- C. Agregar 26
- D. Restar 31



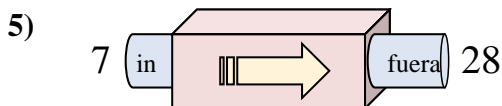
- A. Restar 6
- B. Restar 14
- C. Restar 10
- D. Agregar 9



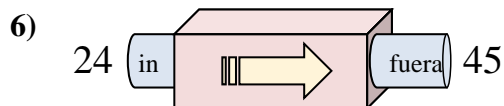
- A. Agregar 3
- B. Agregar 4
- C. Agregar 9
- D. Agregar 8



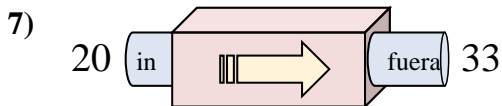
- A. Restar 36
- B. Agregar 29
- C. Agregar 34
- D. Agregar 31



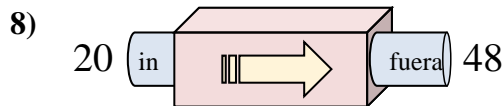
- A. Restar 20
- B. Agregar 23
- C. Agregar 20
- D. Agregar 21



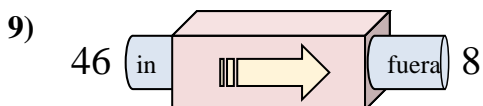
- A. Agregar 17
- B. Restar 22
- C. Agregar 18
- D. Agregar 21



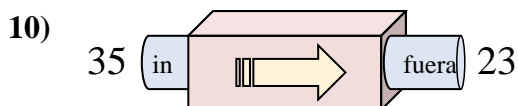
- A. Agregar 9
- B. Agregar 15
- C. Agregar 17
- D. Agregar 13



- A. Agregar 28
- B. Restar 27
- C. Agregar 25
- D. Agregar 29



- A. Restar 42
- B. Restar 40
- C. Agregar 34
- D. Restar 38

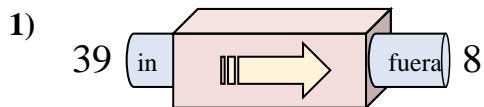


- A. Restar 10
- B. Restar 12
- C. Agregar 17
- D. Agregar 8

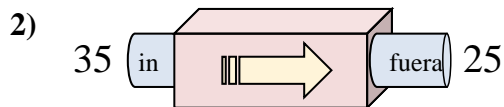
1. _____
2. _____
3. _____
4. _____
5. _____
6. _____
7. _____
8. _____
9. _____
10. _____



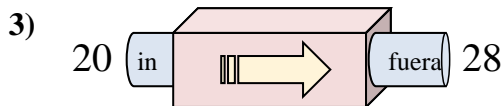
Determinar cuál regla está usando la máquina de funciones.

Respuestas

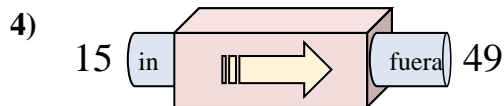
- A. Restar 34
- B. Agregar 28
- C. Agregar 26
- D. Restar 31



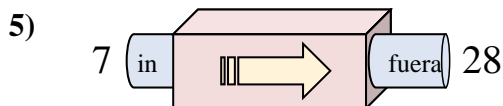
- A. Restar 6
- B. Restar 14
- C. Restar 10
- D. Agregar 9



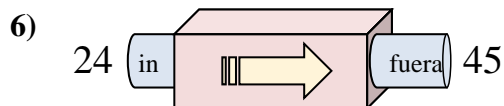
- A. Agregar 3
- B. Agregar 4
- C. Agregar 9
- D. Agregar 8



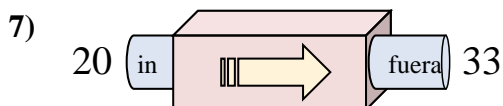
- A. Restar 36
- B. Agregar 29
- C. Agregar 34
- D. Agregar 31



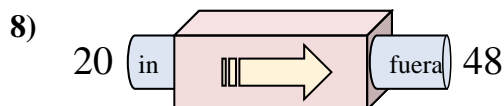
- A. Restar 20
- B. Agregar 23
- C. Agregar 20
- D. Agregar 21



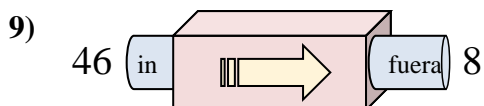
- A. Agregar 17
- B. Restar 22
- C. Agregar 18
- D. Agregar 21



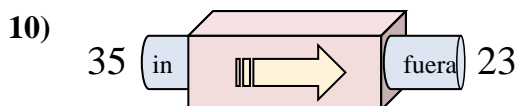
- A. Agregar 9
- B. Agregar 15
- C. Agregar 17
- D. Agregar 13



- A. Agregar 28
- B. Restar 27
- C. Agregar 25
- D. Agregar 29



- A. Restar 42
- B. Restar 40
- C. Agregar 34
- D. Restar 38



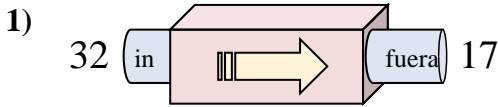
- A. Restar 10
- B. Restar 12
- C. Agregar 17
- D. Agregar 8

1. **D**
2. **C**
3. **D**
4. **C**
5. **D**
6. **D**
7. **D**
8. **A**
9. **D**
10. **B**

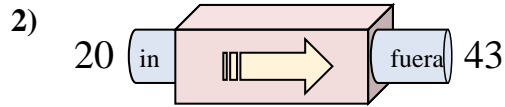


Determinar cuál regla está usando la máquina de funciones.

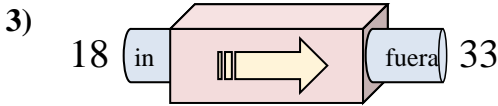
Respuestas



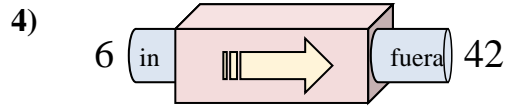
- A. Restar 20
- B. Restar 14
- C. Agregar 12
- D. Restar 15



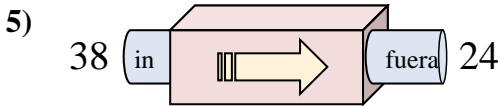
- A. Agregar 24
- B. Agregar 21
- C. Agregar 20
- D. Agregar 23



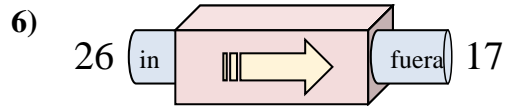
- A. Agregar 15
- B. Restar 19
- C. Agregar 17
- D. Agregar 10



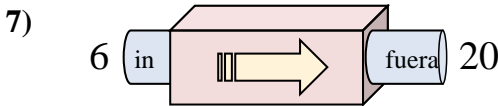
- A. Agregar 31
- B. Restar 31
- C. Agregar 36
- D. Restar 40



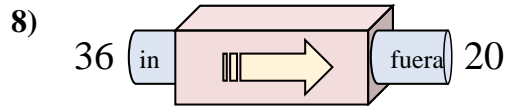
- A. Restar 12
- B. Restar 14
- C. Restar 13
- D. Agregar 11



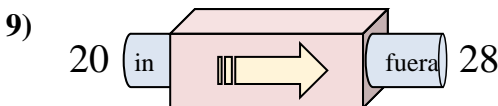
- A. Agregar 6
- B. Restar 8
- C. Restar 9
- D. Restar 4



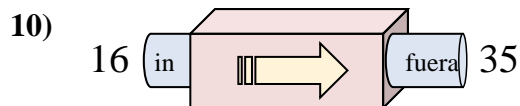
- A. Restar 13
- B. Restar 14
- C. Agregar 18
- D. Agregar 14



- A. Restar 16
- B. Restar 11
- C. Agregar 16
- D. Restar 13



- A. Agregar 5
- B. Agregar 8
- C. Restar 11
- D. Agregar 7

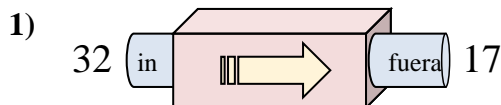


- A. Agregar 24
- B. Agregar 19
- C. Restar 16
- D. Restar 24

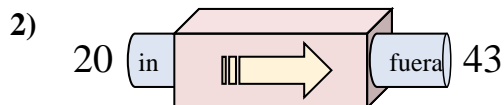
1. _____
2. _____
3. _____
4. _____
5. _____
6. _____
7. _____
8. _____
9. _____
10. _____



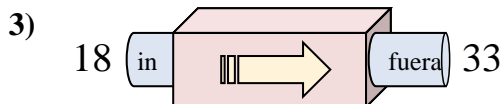
Determinar cuál regla está usando la máquina de funciones.

Respuestas

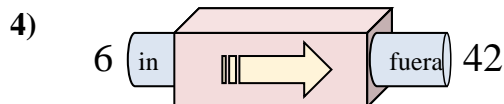
- A. Restar 20
B. Restar 14
C. Agregar 12
D. Restar 15



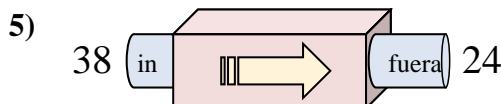
- A. Agregar 24
B. Agregar 21
C. Agregar 20
D. Agregar 23



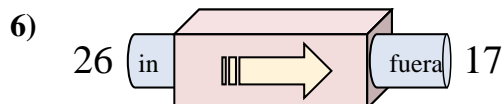
- A. Agregar 15
B. Restar 19
C. Agregar 17
D. Agregar 10



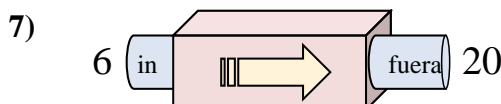
- A. Agregar 31
B. Restar 31
C. Agregar 36
D. Restar 40



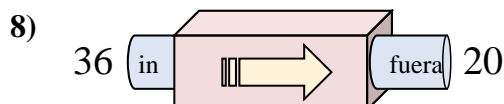
- A. Restar 12
B. Restar 14
C. Restar 13
D. Agregar 11



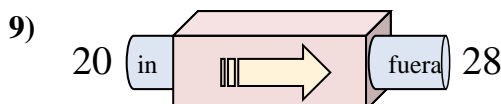
- A. Agregar 6
B. Restar 8
C. Restar 9
D. Restar 4



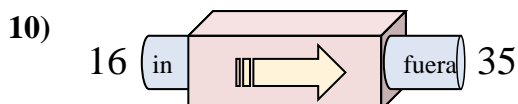
- A. Restar 13
B. Restar 14
C. Agregar 18
D. Agregar 14



- A. Restar 16
B. Restar 11
C. Agregar 16
D. Restar 13



- A. Agregar 5
B. Agregar 8
C. Restar 11
D. Agregar 7

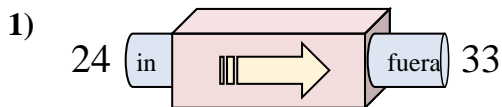


- A. Agregar 24
B. Agregar 19
C. Restar 16
D. Restar 24

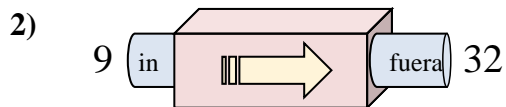
1. **D**2. **D**3. **A**4. **C**5. **B**6. **C**7. **D**8. **A**9. **B**10. **B**



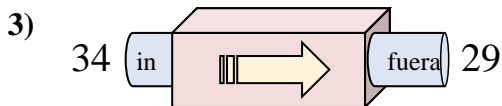
Determinar cuál regla está usando la máquina de funciones.

Respuestas

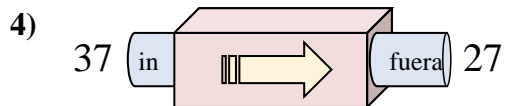
- A. Agregar 12
- B. Restar 8
- C. Agregar 13
- D. Agregar 9



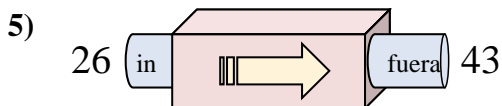
- A. Agregar 25
- B. Agregar 23
- C. Agregar 26
- D. Restar 19



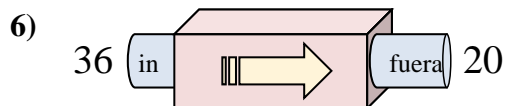
- A. Agregar 7
- B. Restar 5
- C. Restar 6
- D. Agregar 3



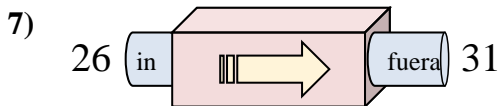
- A. Agregar 13
- B. Restar 10
- C. Restar 15
- D. Restar 13



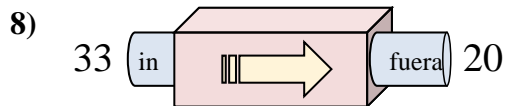
- A. Agregar 14
- B. Restar 22
- C. Agregar 15
- D. Agregar 17



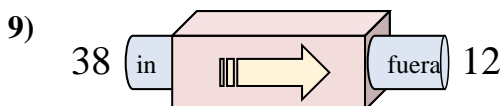
- A. Restar 16
- B. Agregar 19
- C. Agregar 21
- D. Restar 17



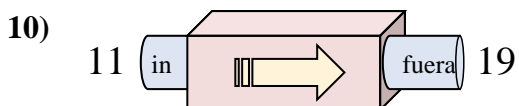
- A. Agregar 5
- B. Restar 7
- C. Agregar 7
- D. Restar 4



- A. Restar 16
- B. Agregar 16
- C. Restar 8
- D. Restar 13



- A. Restar 29
- B. Restar 30
- C. Restar 26
- D. Agregar 21



- A. Agregar 8
- B. Agregar 9
- C. Restar 13
- D. Agregar 5

1. _____

2. _____

3. _____

4. _____

5. _____

6. _____

7. _____

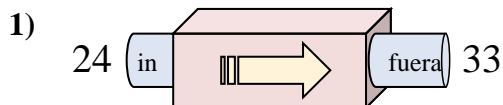
8. _____

9. _____

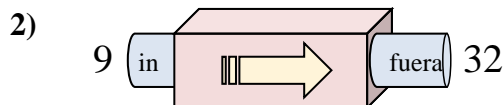
10. _____



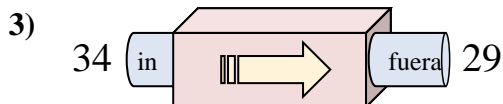
Determinar cuál regla está usando la máquina de funciones.

Respuestas

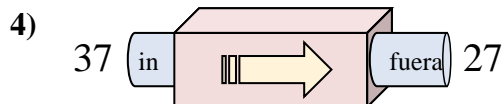
- A. Agregar 12
- B. Restar 8
- C. Agregar 13
- D. Agregar 9



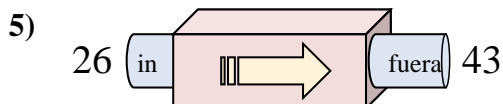
- A. Agregar 25
- B. Agregar 23
- C. Agregar 26
- D. Restar 19



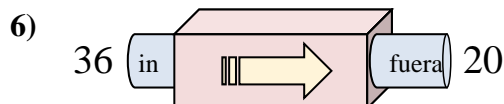
- A. Agregar 7
- B. Restar 5
- C. Restar 6
- D. Agregar 3



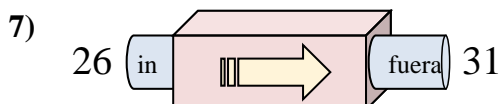
- A. Agregar 13
- B. Restar 10
- C. Restar 15
- D. Restar 13



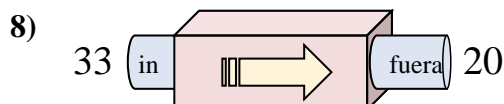
- A. Agregar 14
- B. Restar 22
- C. Agregar 15
- D. Agregar 17



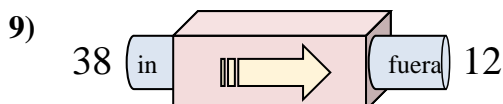
- A. Restar 16
- B. Agregar 19
- C. Agregar 21
- D. Restar 17



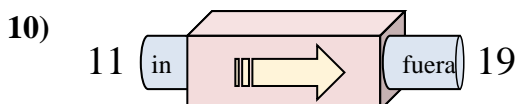
- A. Agregar 5
- B. Restar 7
- C. Agregar 7
- D. Restar 4



- A. Restar 16
- B. Agregar 16
- C. Restar 8
- D. Restar 13



- A. Restar 29
- B. Restar 30
- C. Restar 26
- D. Agregar 21

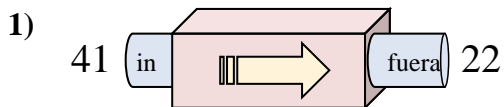


- A. Agregar 8
- B. Agregar 9
- C. Restar 13
- D. Agregar 5

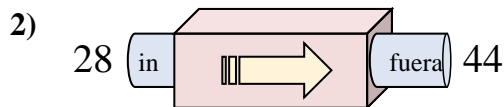
1. **D**2. **B**3. **B**4. **B**5. **D**6. **A**7. **A**8. **D**9. **C**10. **A**



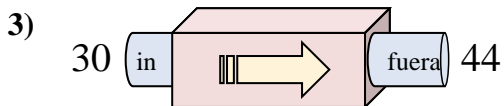
Determinar cuál regla está usando la máquina de funciones.

Respuestas

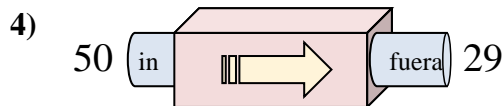
- A. Restar 19
- B. Agregar 16
- C. Restar 24
- D. Agregar 24



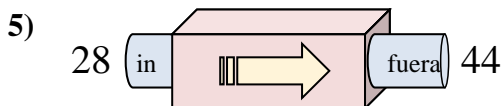
- A. Agregar 16
- B. Agregar 18
- C. Restar 16
- D. Agregar 21



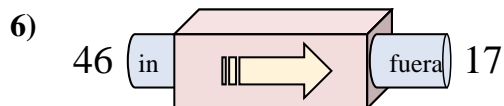
- A. Agregar 12
- B. Agregar 17
- C. Restar 18
- D. Agregar 14



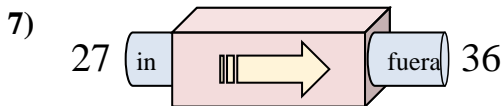
- A. Agregar 23
- B. Restar 21
- C. Agregar 24
- D. Restar 23



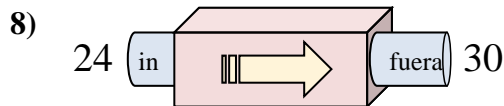
- A. Agregar 12
- B. Agregar 19
- C. Agregar 16
- D. Agregar 21



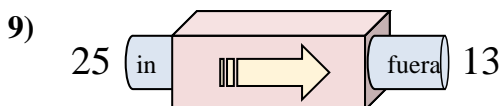
- A. Restar 25
- B. Restar 29
- C. Agregar 31
- D. Agregar 34



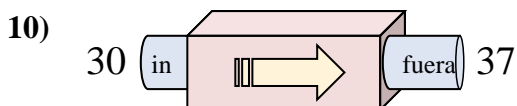
- A. Agregar 7
- B. Agregar 6
- C. Agregar 9
- D. Restar 13



- A. Restar 7
- B. Agregar 2
- C. Agregar 6
- D. Agregar 10



- A. Agregar 12
- B. Restar 8
- C. Agregar 11
- D. Restar 12



- A. Agregar 7
- B. Agregar 9
- C. Agregar 3
- D. Restar 3

1. _____

2. _____

3. _____

4. _____

5. _____

6. _____

7. _____

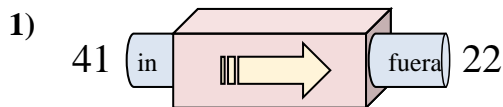
8. _____

9. _____

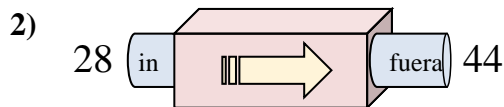
10. _____



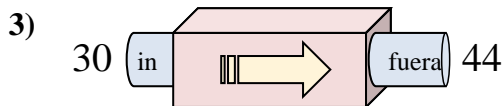
Determinar cuál regla está usando la máquina de funciones.

Respuestas

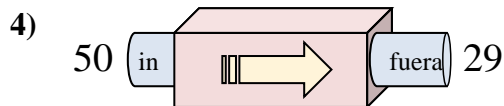
- A. Restar 19
- B. Agregar 16
- C. Restar 24
- D. Agregar 24



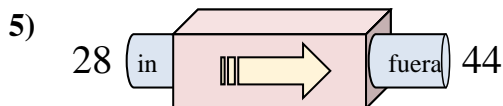
- A. Agregar 16
- B. Agregar 18
- C. Restar 16
- D. Agregar 21



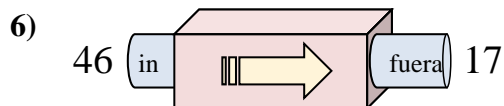
- A. Agregar 12
- B. Agregar 17
- C. Restar 18
- D. Agregar 14



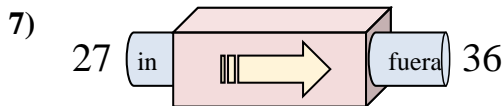
- A. Agregar 23
- B. Restar 21
- C. Agregar 24
- D. Restar 23



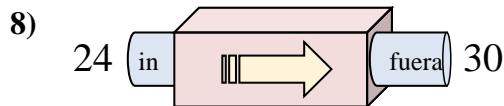
- A. Agregar 12
- B. Agregar 19
- C. Agregar 16
- D. Agregar 21



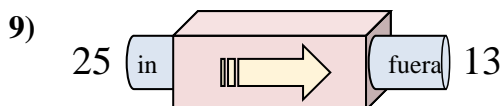
- A. Restar 25
- B. Restar 29
- C. Agregar 31
- D. Agregar 34



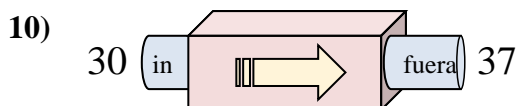
- A. Agregar 7
- B. Agregar 6
- C. Agregar 9
- D. Restar 13



- A. Restar 7
- B. Agregar 2
- C. Agregar 6
- D. Agregar 10



- A. Agregar 12
- B. Restar 8
- C. Agregar 11
- D. Restar 12



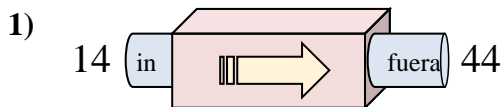
- A. Agregar 7
- B. Agregar 9
- C. Agregar 3
- D. Restar 3

1. **A**2. **A**3. **D**4. **B**5. **C**6. **B**7. **C**8. **C**9. **D**10. **A**

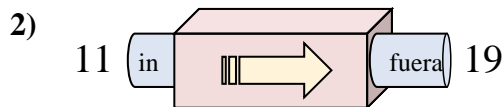


Determinar cuál regla está usando la máquina de funciones.

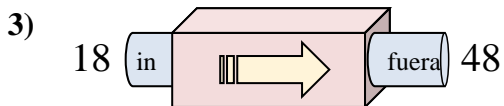
Respuestas



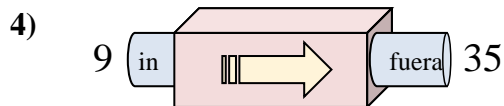
- A. Agregar 27
- B. Agregar 30
- C. Agregar 25
- D. Restar 32



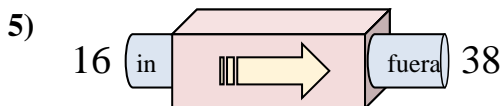
- A. Agregar 8
- B. Agregar 6
- C. Restar 3
- D. Agregar 4



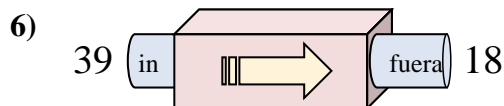
- A. Restar 25
- B. Agregar 30
- C. Agregar 29
- D. Agregar 34



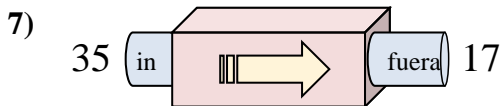
- A. Agregar 28
- B. Agregar 26
- C. Restar 30
- D. Restar 22



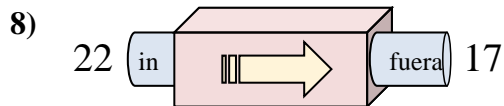
- A. Agregar 22
- B. Agregar 27
- C. Agregar 24
- D. Restar 17



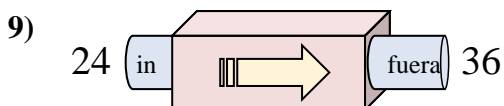
- A. Restar 20
- B. Restar 23
- C. Restar 16
- D. Restar 21



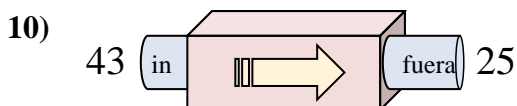
- A. Restar 17
- B. Agregar 21
- C. Restar 14
- D. Restar 18



- A. Restar 10
- B. Agregar 2
- C. Restar 6
- D. Restar 5



- A. Restar 17
- B. Restar 12
- C. Agregar 12
- D. Agregar 9



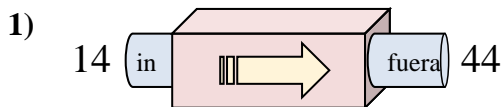
- A. Agregar 15
- B. Restar 16
- C. Agregar 13
- D. Restar 18

1. _____
2. _____
3. _____
4. _____
5. _____
6. _____
7. _____
8. _____
9. _____
10. _____

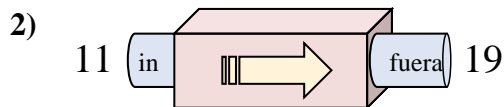


Determinar cuál regla está usando la máquina de funciones.

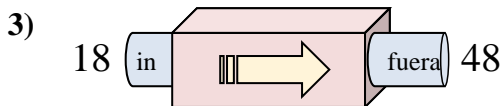
Respuestas



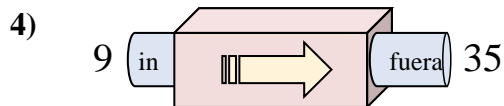
- A. Agregar 27
- B. Agregar 30
- C. Agregar 25
- D. Restar 32



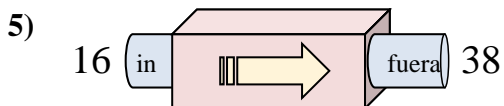
- A. Agregar 8
- B. Agregar 6
- C. Restar 3
- D. Agregar 4



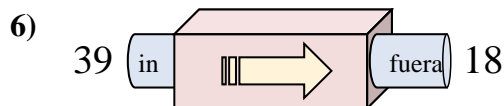
- A. Restar 25
- B. Agregar 30
- C. Agregar 29
- D. Agregar 34



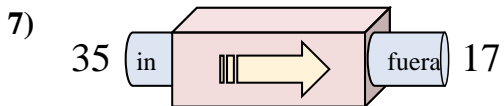
- A. Agregar 28
- B. Agregar 26
- C. Restar 30
- D. Restar 22



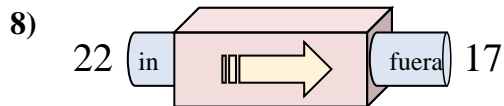
- A. Agregar 22
- B. Agregar 27
- C. Agregar 24
- D. Restar 17



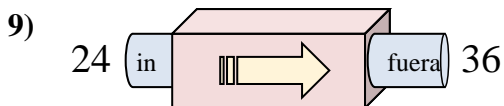
- A. Restar 20
- B. Restar 23
- C. Restar 16
- D. Restar 21



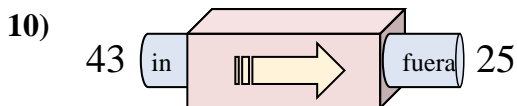
- A. Restar 17
- B. Agregar 21
- C. Restar 14
- D. Restar 18



- A. Restar 10
- B. Agregar 2
- C. Restar 6
- D. Restar 5



- A. Restar 17
- B. Restar 12
- C. Agregar 12
- D. Agregar 9



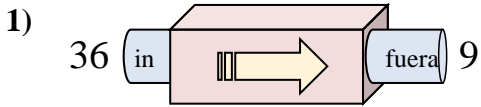
- A. Agregar 15
- B. Restar 16
- C. Agregar 13
- D. Restar 18

- 1. **B**
- 2. **A**
- 3. **B**
- 4. **B**
- 5. **A**
- 6. **D**
- 7. **D**
- 8. **D**
- 9. **C**
- 10. **D**

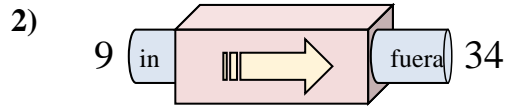


Determinar cuál regla está usando la máquina de funciones.

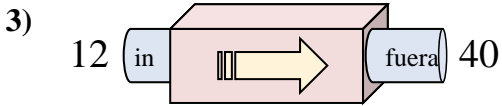
Respuestas



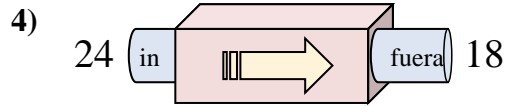
- A. Agregar 30
- B. Restar 32
- C. Restar 31
- D. Restar 27



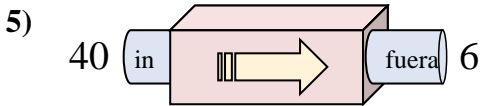
- A. Agregar 23
- B. Restar 29
- C. Restar 21
- D. Agregar 25



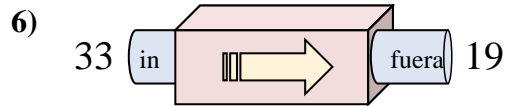
- A. Restar 30
- B. Agregar 33
- C. Agregar 29
- D. Agregar 28



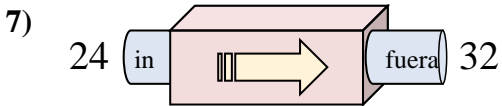
- A. Agregar 4
- B. Restar 2
- C. Restar 6
- D. Restar 5



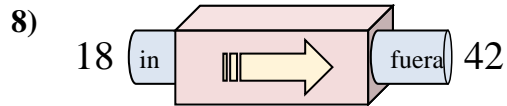
- A. Agregar 29
- B. Restar 39
- C. Restar 34
- D. Agregar 30



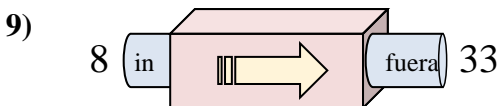
- A. Agregar 16
- B. Restar 17
- C. Restar 14
- D. Restar 9



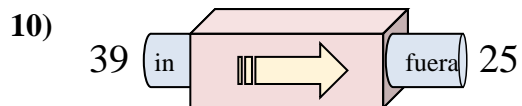
- A. Agregar 11
- B. Agregar 8
- C. Restar 12
- D. Agregar 12



- A. Agregar 24
- B. Agregar 23
- C. Restar 23
- D. Agregar 21



- A. Agregar 25
- B. Restar 24
- C. Restar 26
- D. Agregar 27

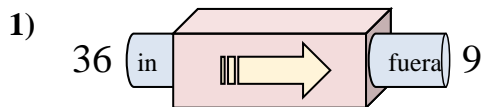


- A. Agregar 9
- B. Agregar 14
- C. Restar 10
- D. Restar 14

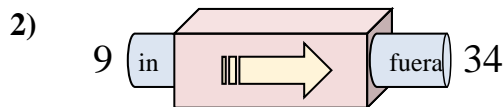
1. _____
2. _____
3. _____
4. _____
5. _____
6. _____
7. _____
8. _____
9. _____
10. _____



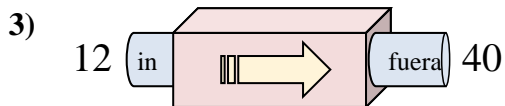
Determinar cuál regla está usando la máquina de funciones.

Respuestas

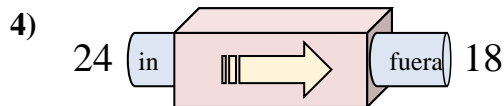
- A. Agregar 30
B. Restar 32
C. Restar 31
D. Restar 27



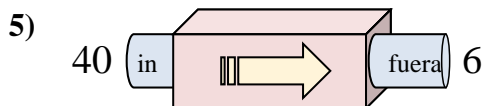
- A. Agregar 23
B. Restar 29
C. Restar 21
D. Agregar 25



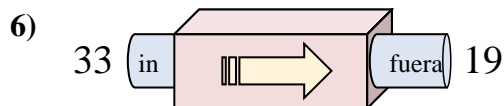
- A. Restar 30
B. Agregar 33
C. Agregar 29
D. Agregar 28



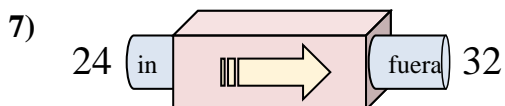
- A. Agregar 4
B. Restar 2
C. Restar 6
D. Restar 5



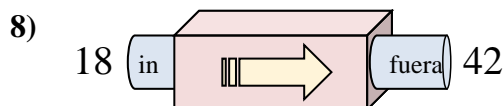
- A. Agregar 29
B. Restar 39
C. Restar 34
D. Agregar 30



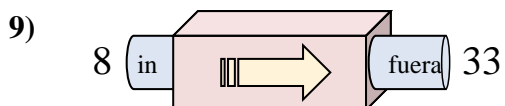
- A. Agregar 16
B. Restar 17
C. Restar 14
D. Restar 9



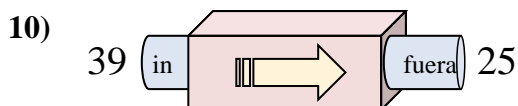
- A. Agregar 11
B. Agregar 8
C. Restar 12
D. Agregar 12



- A. Agregar 24
B. Agregar 23
C. Restar 23
D. Agregar 21



- A. Agregar 25
B. Restar 24
C. Restar 26
D. Agregar 27



- A. Agregar 9
B. Agregar 14
C. Restar 10
D. Restar 14

1. **D**2. **D**3. **D**4. **C**5. **C**6. **C**7. **B**8. **A**9. **A**10. **D**