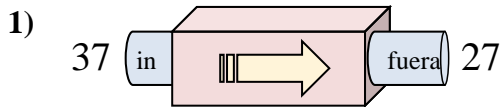
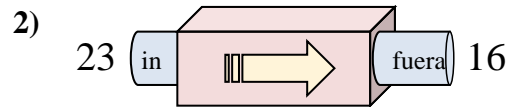




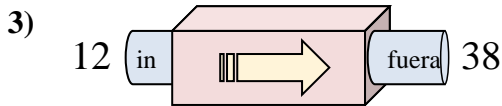
Determinar cuál regla está usando la máquina de funciones.

Respuestas

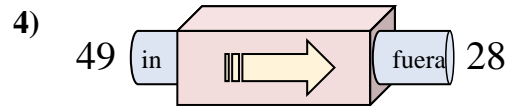
- A. Agregar 14
- B. Restar 7
- C. Restar 10
- D. Restar 5



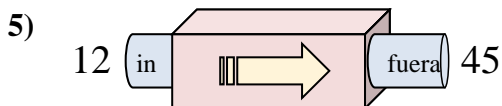
- A. Agregar 5
- B. Restar 5
- C. Agregar 9
- D. Restar 7



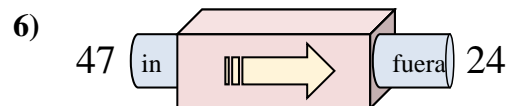
- A. Restar 29
- B. Agregar 26
- C. Restar 30
- D. Agregar 25



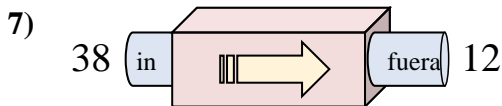
- A. Restar 16
- B. Restar 20
- C. Restar 21
- D. Restar 24



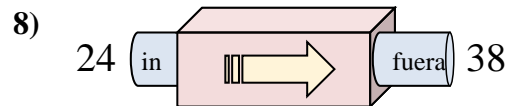
- A. Agregar 32
- B. Restar 38
- C. Agregar 33
- D. Agregar 35



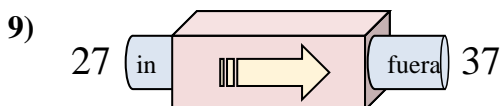
- A. Restar 27
- B. Restar 28
- C. Agregar 24
- D. Restar 23



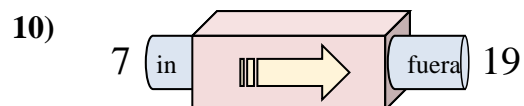
- A. Restar 25
- B. Restar 26
- C. Restar 30
- D. Agregar 27



- A. Agregar 12
- B. Restar 17
- C. Restar 13
- D. Agregar 14



- A. Agregar 13
- B. Restar 11
- C. Agregar 9
- D. Agregar 10



- A. Agregar 12
- B. Agregar 15
- C. Agregar 7
- D. Restar 8

1. _____

2. _____

3. _____

4. _____

5. _____

6. _____

7. _____

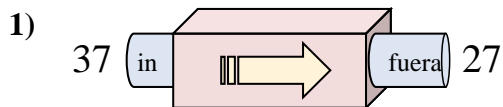
8. _____

9. _____

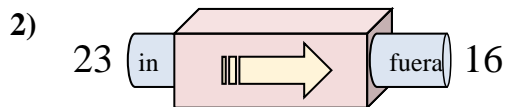
10. _____



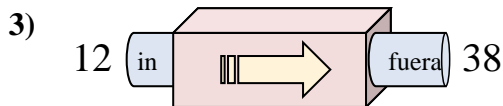
Determinar cuál regla está usando la máquina de funciones.

Respuestas

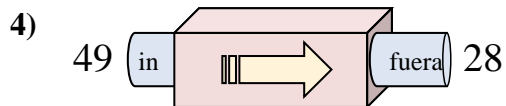
- A. Agregar 14
- B. Restar 7
- C. Restar 10
- D. Restar 5



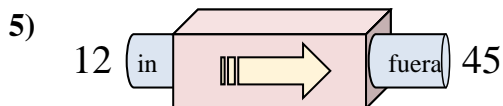
- A. Agregar 5
- B. Restar 5
- C. Agregar 9
- D. Restar 7



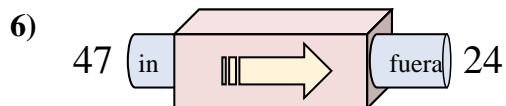
- A. Restar 29
- B. Agregar 26
- C. Restar 30
- D. Agregar 25



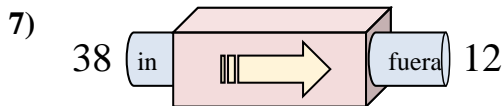
- A. Restar 16
- B. Restar 20
- C. Restar 21
- D. Restar 24



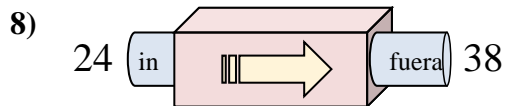
- A. Agregar 32
- B. Restar 38
- C. Agregar 33
- D. Agregar 35



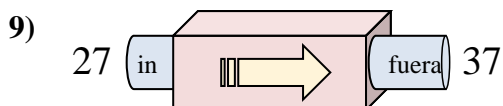
- A. Restar 27
- B. Restar 28
- C. Agregar 24
- D. Restar 23



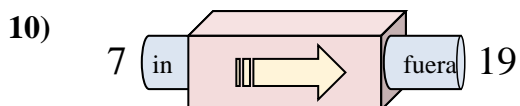
- A. Restar 25
- B. Restar 26
- C. Restar 30
- D. Agregar 27



- A. Agregar 12
- B. Restar 17
- C. Restar 13
- D. Agregar 14



- A. Agregar 13
- B. Restar 11
- C. Agregar 9
- D. Agregar 10



- A. Agregar 12
- B. Agregar 15
- C. Agregar 7
- D. Restar 8

1. **C**2. **D**3. **B**4. **C**5. **C**6. **D**7. **B**8. **D**9. **D**10. **A**