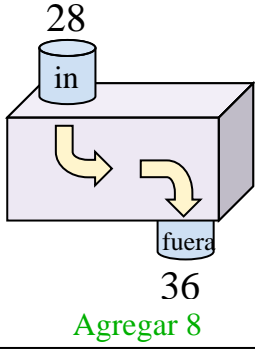




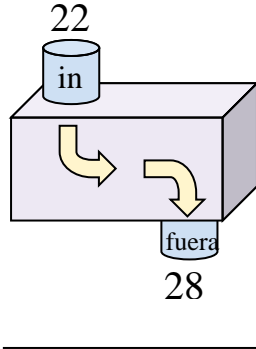
Determina la regla que cada máquina de función está usando.

**Respuestas**

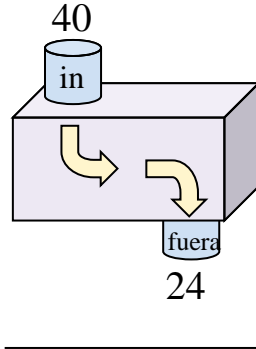
Ej)



1)



2)



Ej. **Agregar 8**

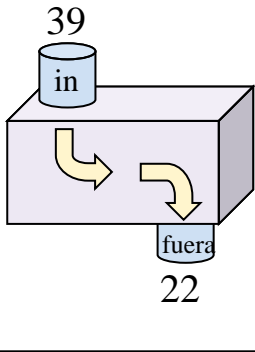
1. \_\_\_\_\_

2. \_\_\_\_\_

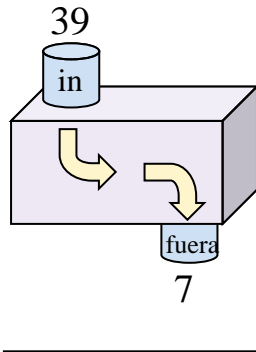
3. \_\_\_\_\_

4. \_\_\_\_\_

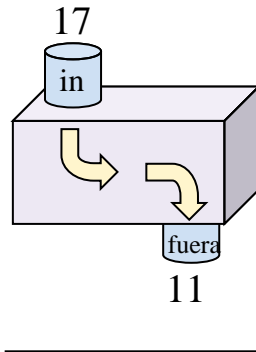
3)



4)



5)



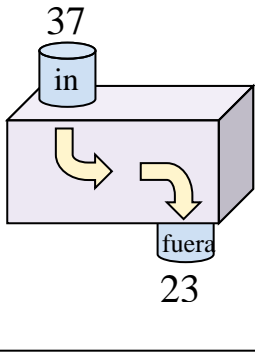
5. \_\_\_\_\_

6. \_\_\_\_\_

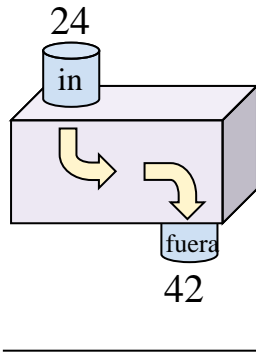
7. \_\_\_\_\_

8. \_\_\_\_\_

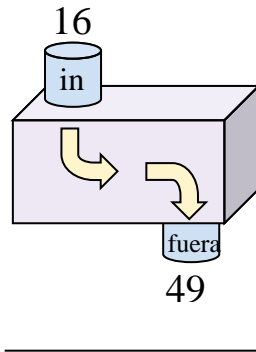
6)



7)



8)

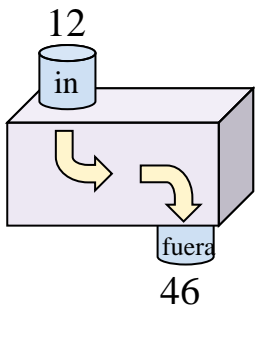


9. \_\_\_\_\_

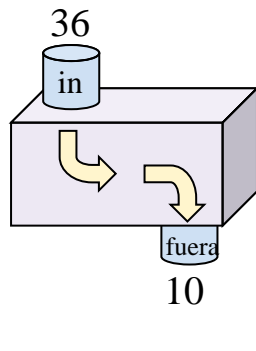
10. \_\_\_\_\_

11. \_\_\_\_\_

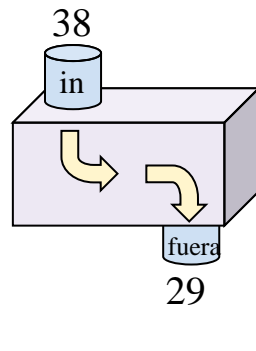
9)



10)



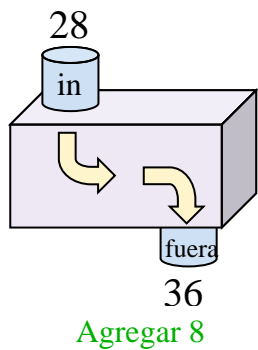
11)



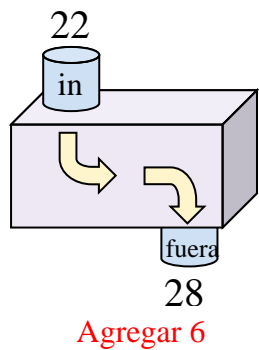


Determina la regla que cada máquina de función está usando.

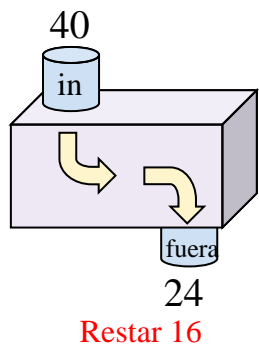
Ej)



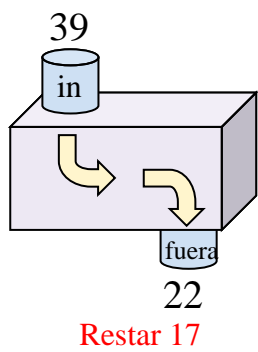
1)



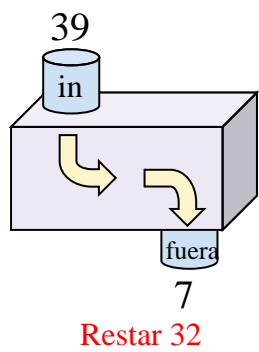
2)



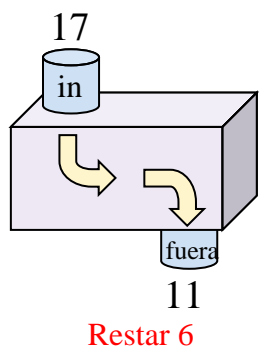
3)



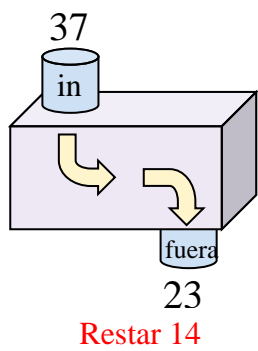
4)



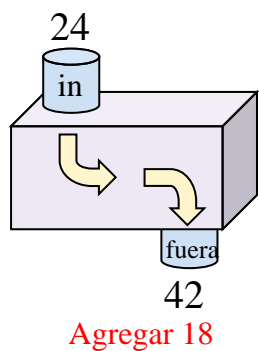
5)



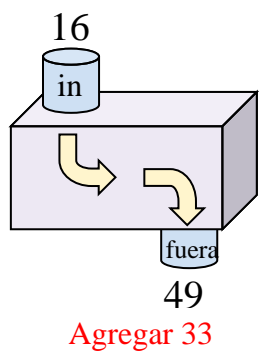
6)



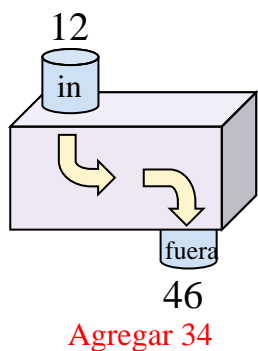
7)



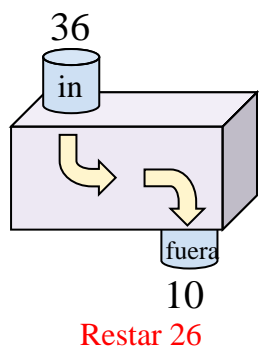
8)



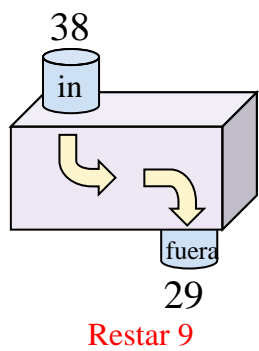
9)



10)



11)



**Respuestas**

Ej. **Agregar 8**

1. **Agregar 6**

2. **Restar 16**

3. **Restar 17**

4. **Restar 32**

5. **Restar 6**

6. **Restar 14**

7. **Agregar 18**

8. **Agregar 33**

9. **Agregar 34**

10. **Restar 26**

11. **Restar 9**