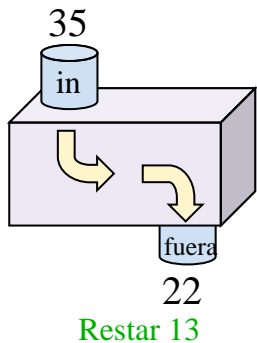


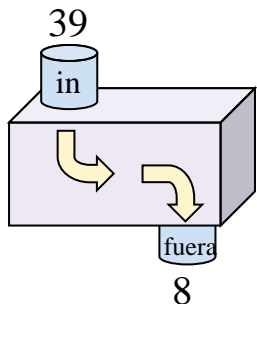


Determina la regla que cada máquina de función está usando.

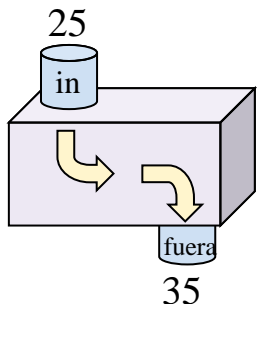
Ej)



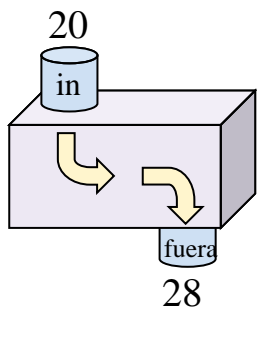
1)



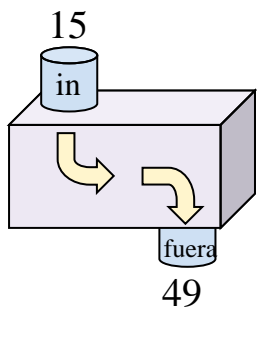
2)



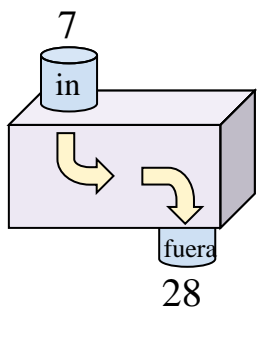
3)



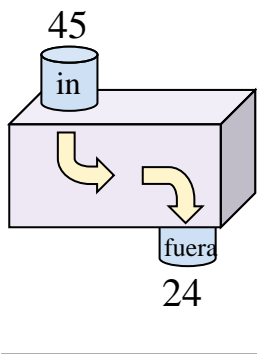
4)



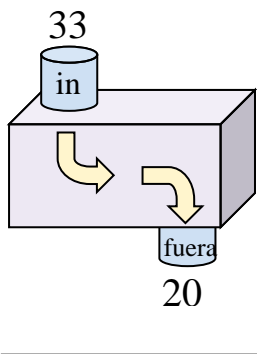
5)



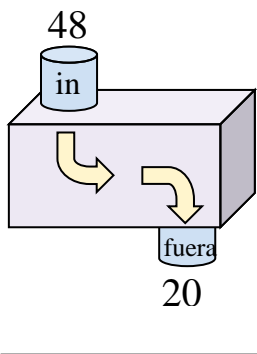
6)



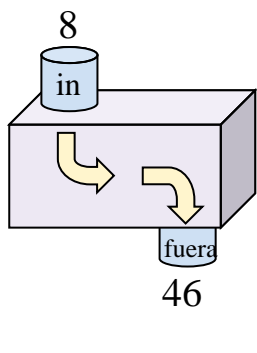
7)



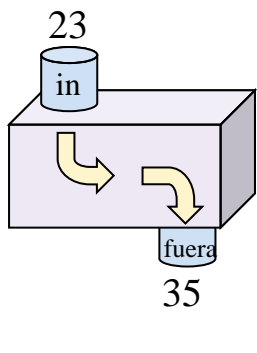
8)



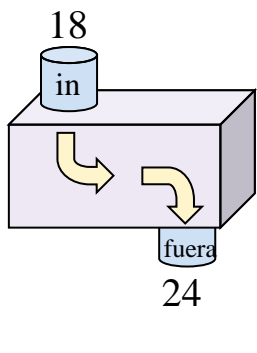
9)



10)



11)



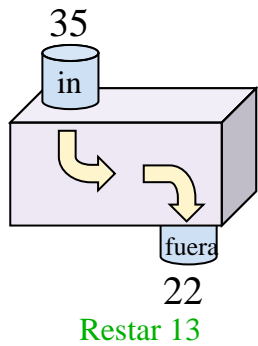
Respuestas

- Ej. **Restar 13**
1. _____
2. _____
3. _____
4. _____
5. _____
6. _____
7. _____
8. _____
9. _____
10. _____
11. _____

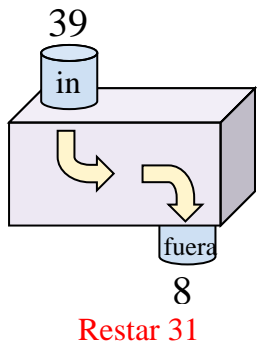


Determina la regla que cada máquina de función está usando.

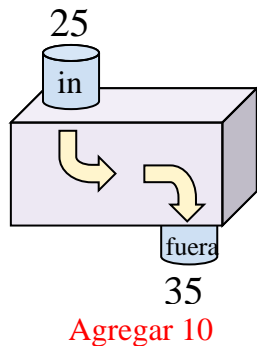
Ej)



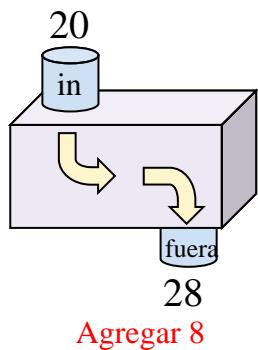
1)



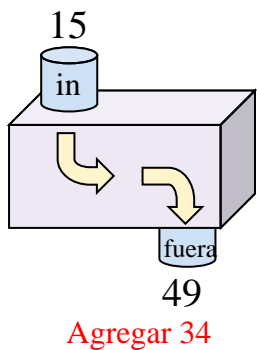
2)



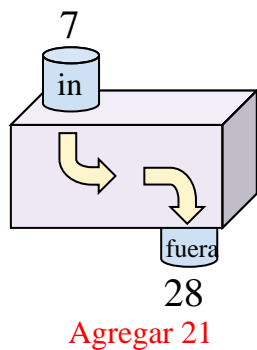
3)



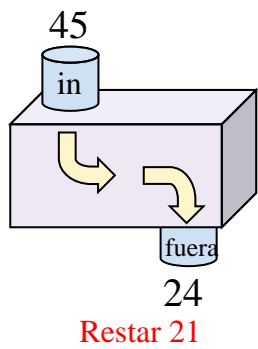
4)



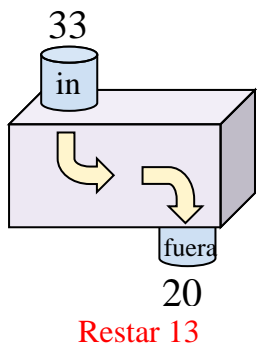
5)



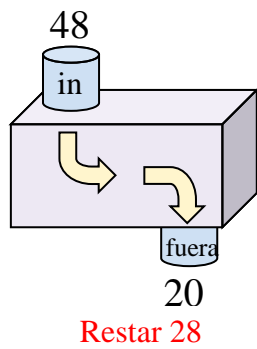
6)



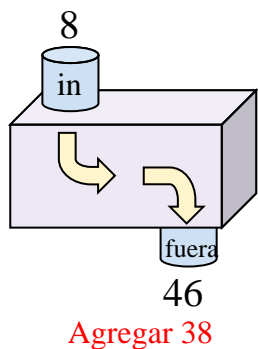
7)



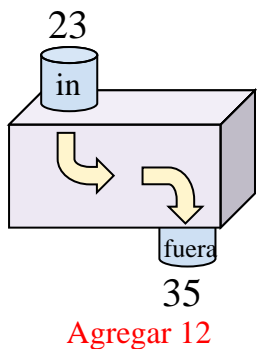
8)



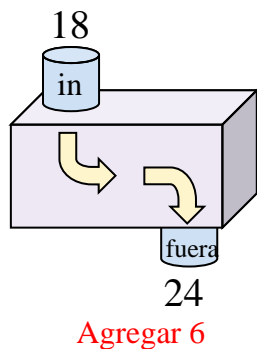
9)



10)



11)



Respuestas

- Ej. **Restar 13**
- 1. **Restar 31**
- 2. **Agregar 10**
- 3. **Agregar 8**
- 4. **Agregar 34**
- 5. **Agregar 21**
- 6. **Restar 21**
- 7. **Restar 13**
- 8. **Restar 28**
- 9. **Agregar 38**
- 10. **Agregar 12**
- 11. **Agregar 6**