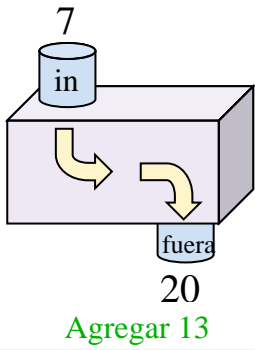


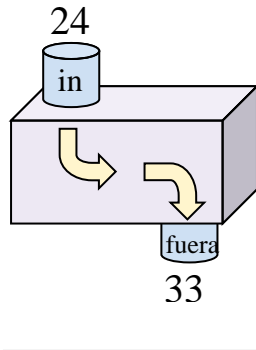


Determina la regla que cada máquina de función está usando.

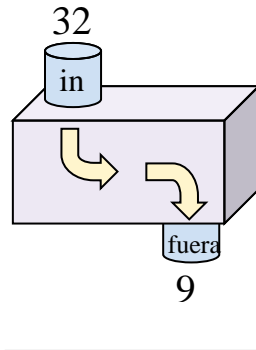
Ej)



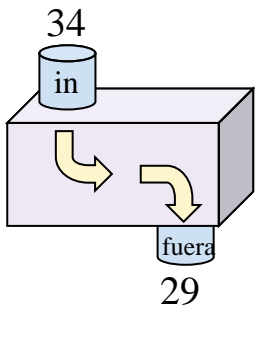
1)



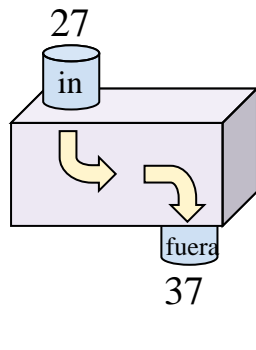
2)



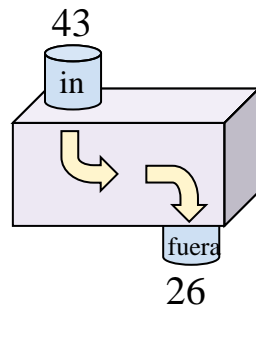
3)



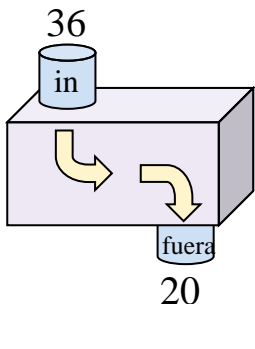
4)



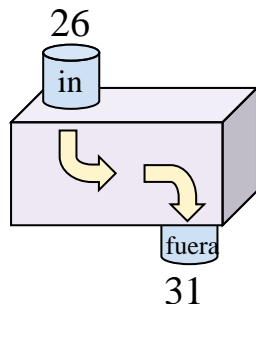
5)



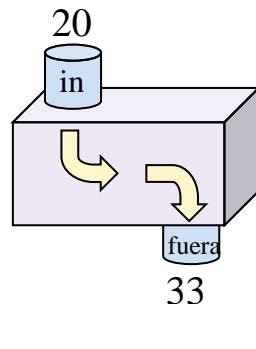
6)



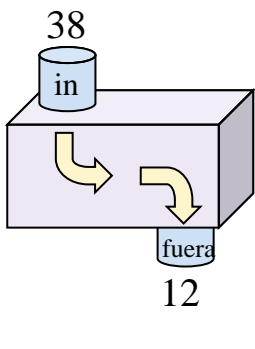
7)



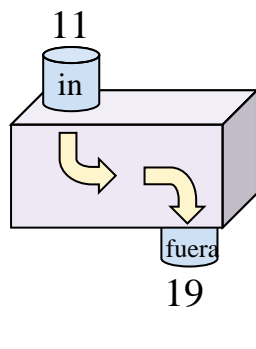
8)



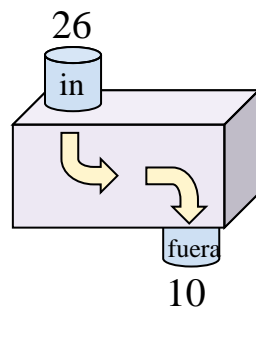
9)



10)



11)



Respuestas

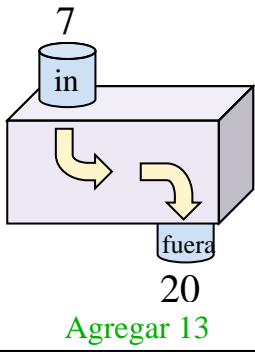
Ej. **Agregar 13**

- 1. _____
- 2. _____
- 3. _____
- 4. _____
- 5. _____
- 6. _____
- 7. _____
- 8. _____
- 9. _____
- 10. _____
- 11. _____

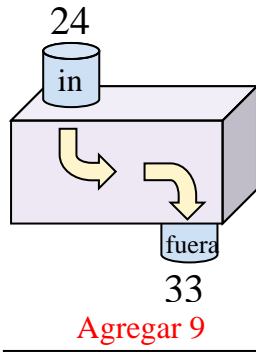


Determina la regla que cada máquina de función está usando.

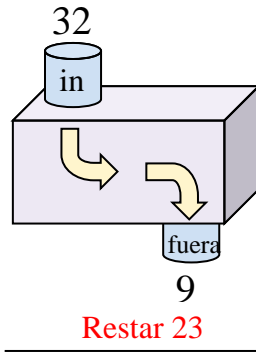
Ej)



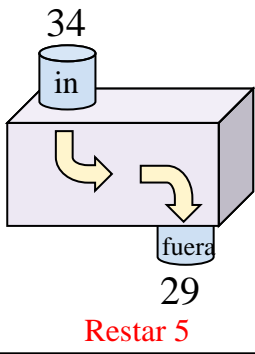
1)



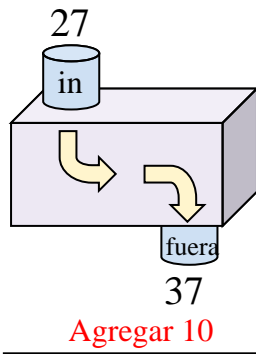
2)



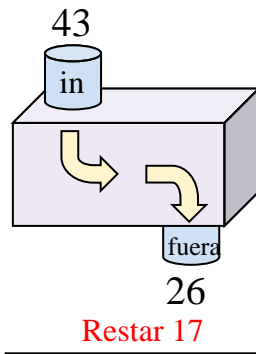
3)



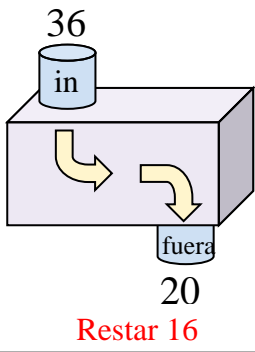
4)



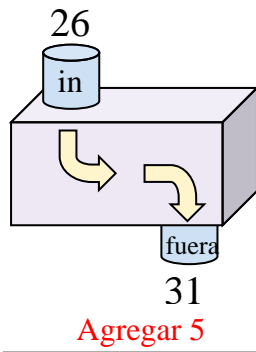
5)



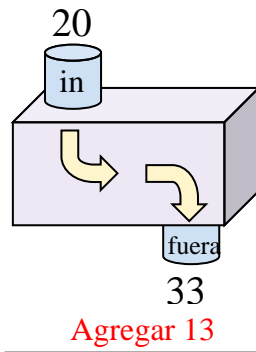
6)



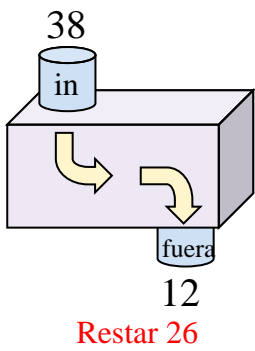
7)



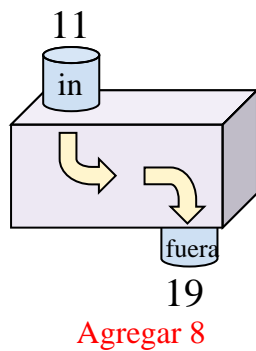
8)



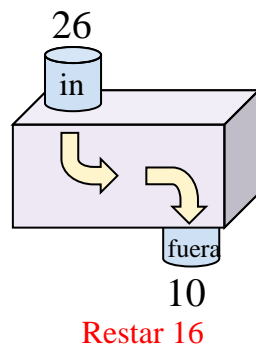
9)



10)



11)



Respuestas

Ej. **Agregar 13**

1. **Agregar 9**

2. **Restar 23**

3. **Restar 5**

4. **Agregar 10**

5. **Restar 17**

6. **Restar 16**

7. **Agregar 5**

8. **Agregar 13**

9. **Restar 26**

10. **Agregar 8**

11. **Restar 16**