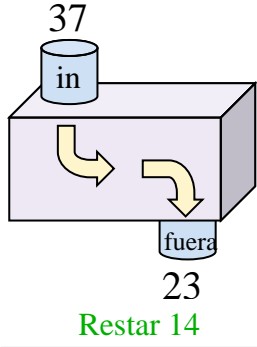




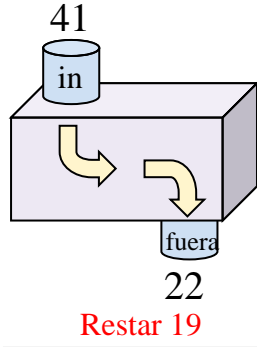


Determina la regla que cada máquina de función está usando.

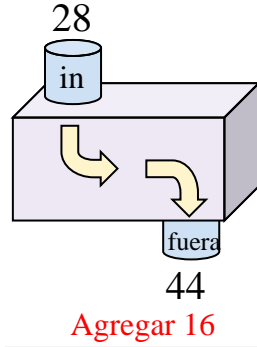
Ej)



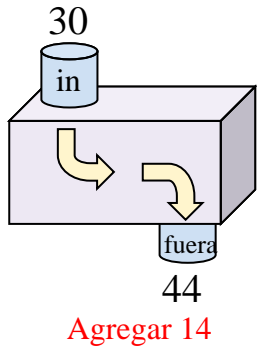
1)



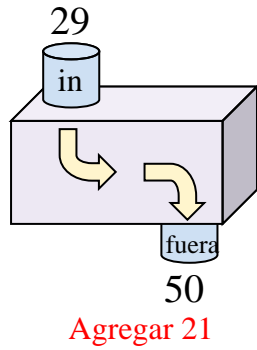
2)



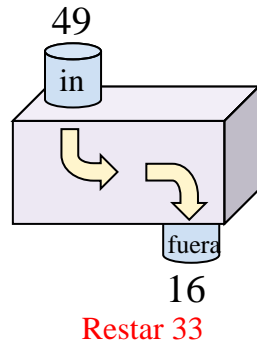
3)



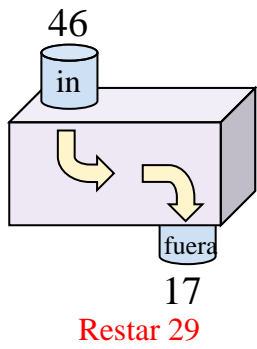
4)



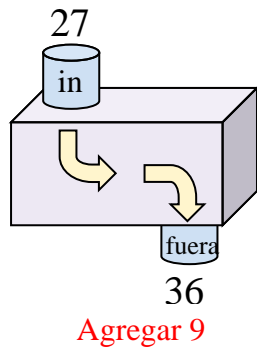
5)



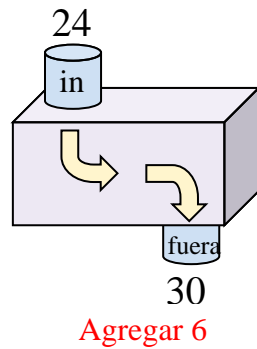
6)



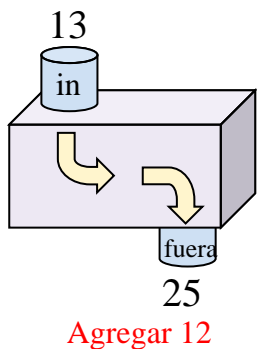
7)



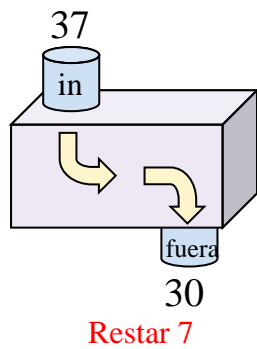
8)



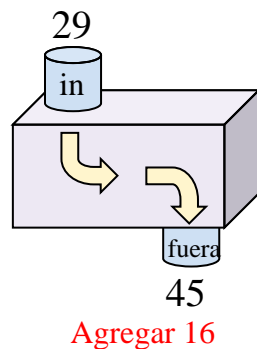
9)



10)



11)



**Respuestas**

- Ej. **Restar 14**
1. **Restar 19**
2. **Agregar 16**
3. **Agregar 14**
4. **Agregar 21**
5. **Restar 33**
6. **Restar 29**
7. **Agregar 9**
8. **Agregar 6**
9. **Agregar 12**
10. **Restar 7**
11. **Agregar 16**