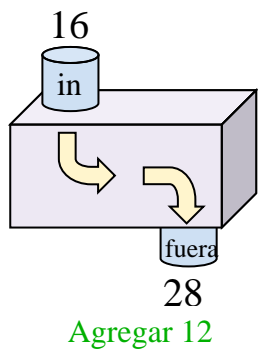




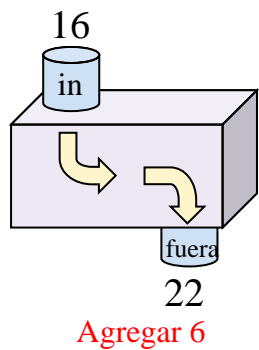


Determina la regla que cada máquina de función está usando.

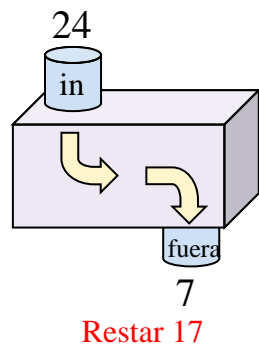
Ej)



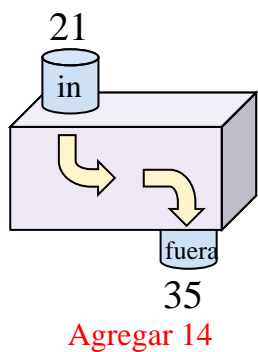
1)



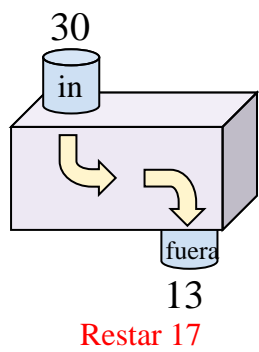
2)



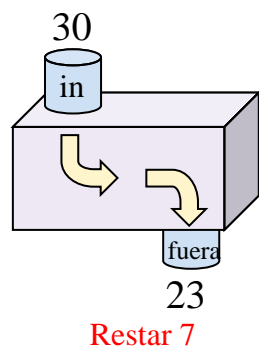
3)



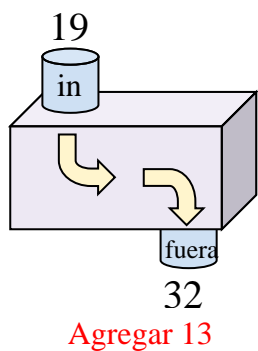
4)



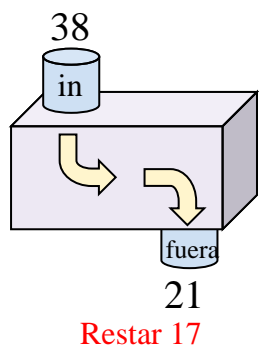
5)



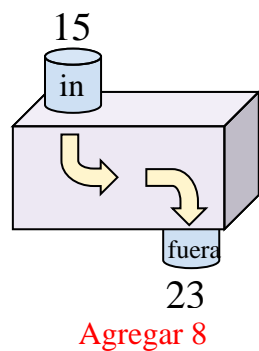
6)



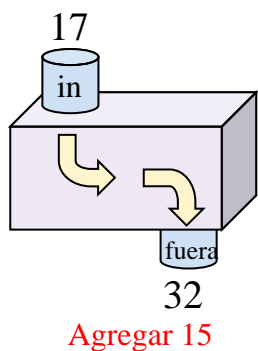
7)



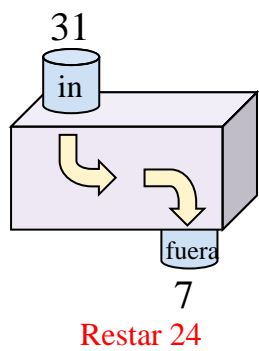
8)



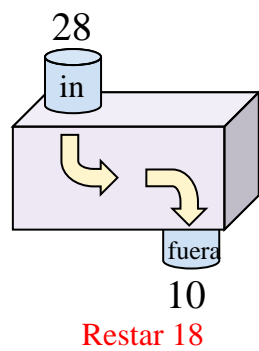
9)



10)



11)



**Respuestas**

Ej. **Agregar 12**

1. **Agregar 6**

2. **Restar 17**

3. **Agregar 14**

4. **Restar 17**

5. **Restar 7**

6. **Agregar 13**

7. **Restar 17**

8. **Agregar 8**

9. **Agregar 15**

10. **Restar 24**

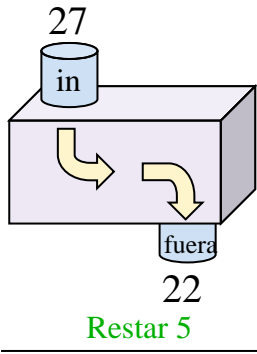
11. **Restar 18**



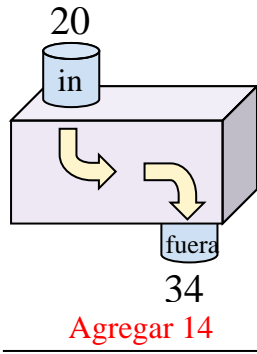


Determina la regla que cada máquina de función está usando.

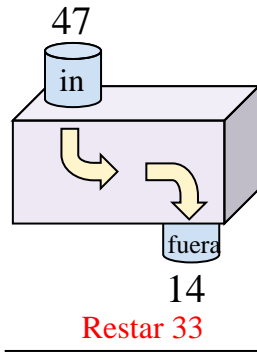
Ej)



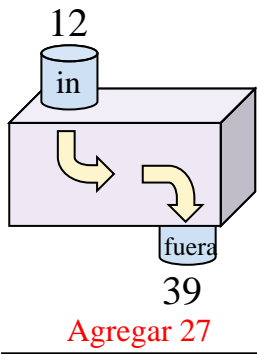
1)



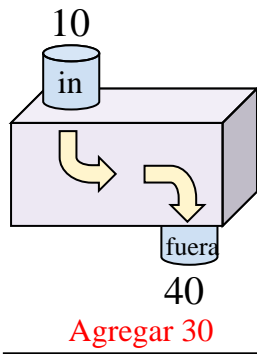
2)



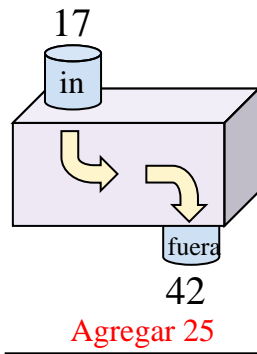
3)



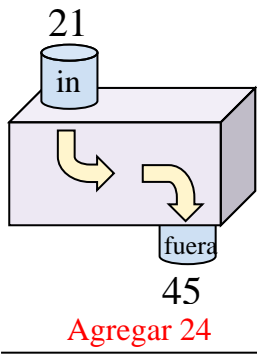
4)



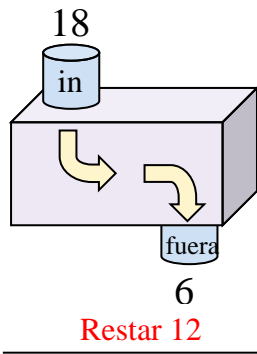
5)



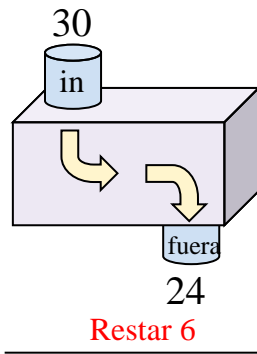
6)



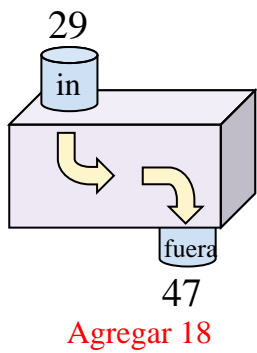
7)



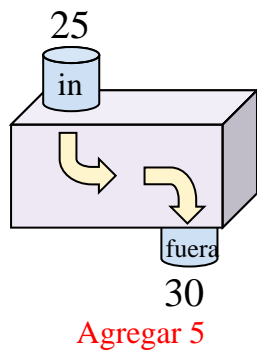
8)



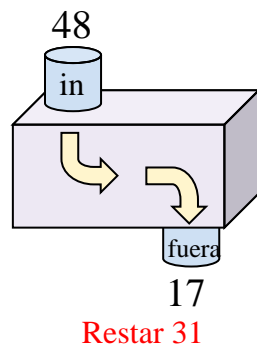
9)



10)



11)



**Respuestas**

- Ej. **Restar 5**
- 1. **Agregar 14**
- 2. **Restar 33**
- 3. **Agregar 27**
- 4. **Agregar 30**
- 5. **Agregar 25**
- 6. **Agregar 24**
- 7. **Restar 12**
- 8. **Restar 6**
- 9. **Agregar 18**
- 10. **Agregar 5**
- 11. **Restar 31**



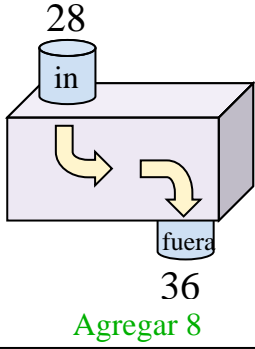




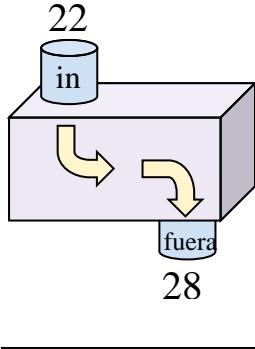
Determina la regla que cada máquina de función está usando.

**Respuestas**

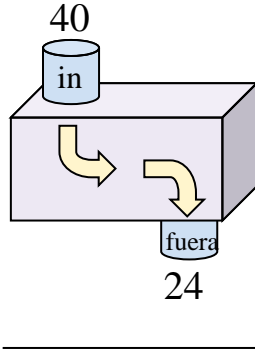
Ej)



1)



2)



Ej. **Agregar 8**

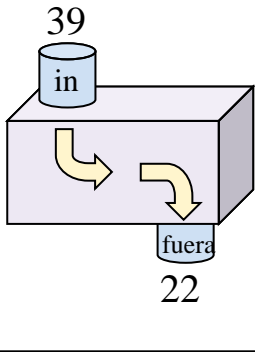
1. \_\_\_\_\_

2. \_\_\_\_\_

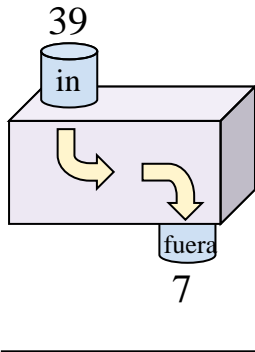
3. \_\_\_\_\_

4. \_\_\_\_\_

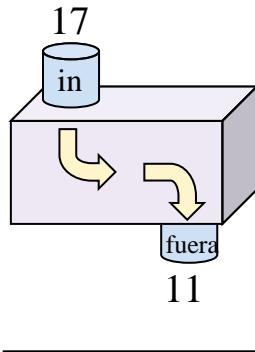
3)



4)



5)



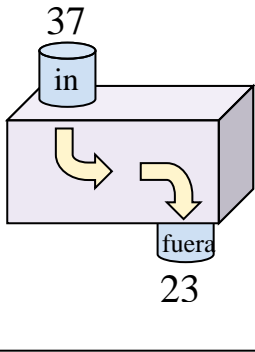
5. \_\_\_\_\_

6. \_\_\_\_\_

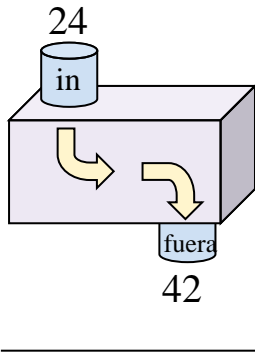
7. \_\_\_\_\_

8. \_\_\_\_\_

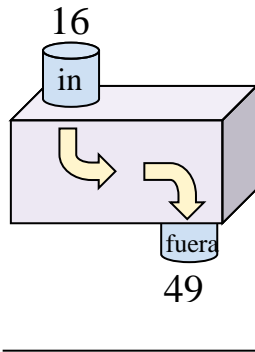
6)



7)



8)

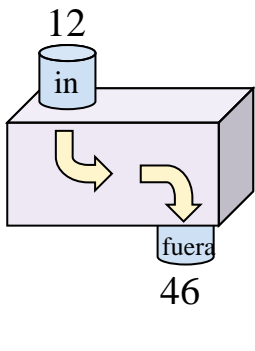


9. \_\_\_\_\_

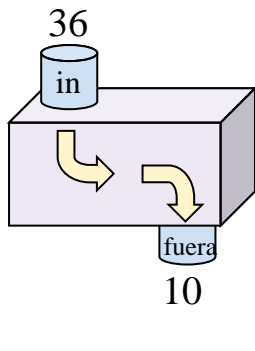
10. \_\_\_\_\_

11. \_\_\_\_\_

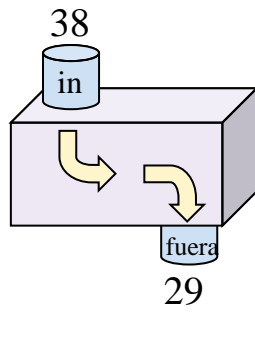
9)



10)



11)





Determina la regla que cada máquina de función está usando.

Ej) **Agregar 8**

1) **Agregar 6**

2) **Restar 16**

3) **Restar 17**

4) **Restar 32**

5) **Restar 6**

6) **Restar 14**

7) **Agregar 18**

8) **Agregar 33**

9) **Agregar 34**

10) **Restar 26**

11) **Restar 9**

**Respuestas**

- Ej. **Agregar 8**
- 1. **Agregar 6**
- 2. **Restar 16**
- 3. **Restar 17**
- 4. **Restar 32**
- 5. **Restar 6**
- 6. **Restar 14**
- 7. **Agregar 18**
- 8. **Agregar 33**
- 9. **Agregar 34**
- 10. **Restar 26**
- 11. **Restar 9**

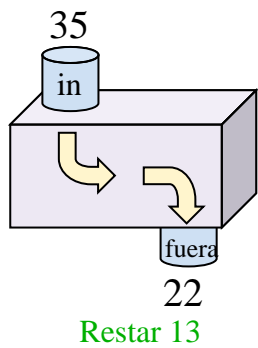




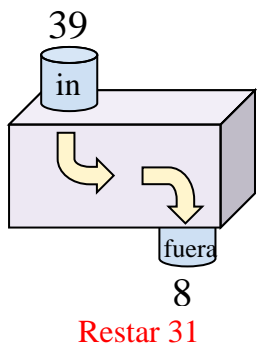


Determina la regla que cada máquina de función está usando.

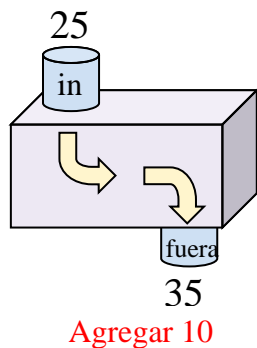
Ej)



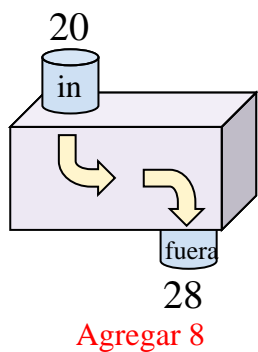
1)



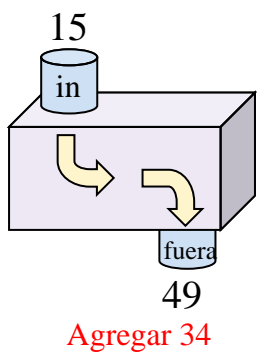
2)



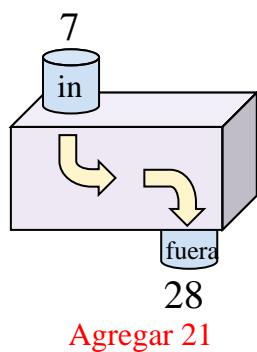
3)



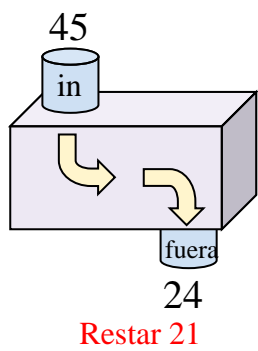
4)



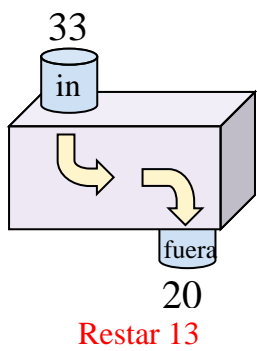
5)



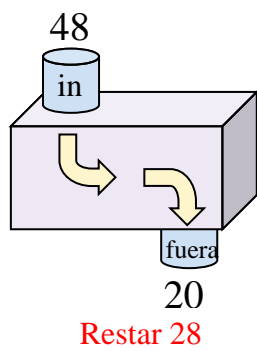
6)



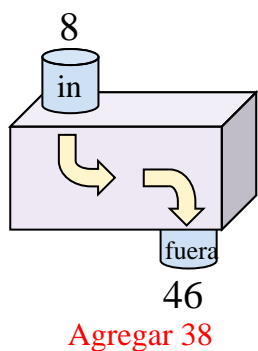
7)



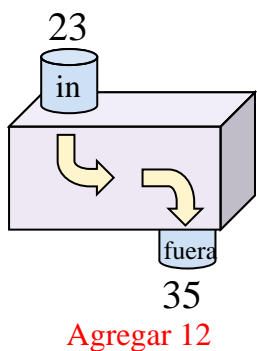
8)



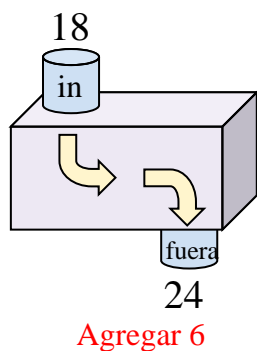
9)



10)



11)



**Respuestas**

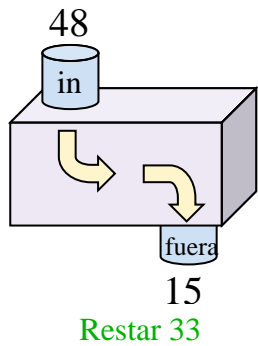
- Ej. **Restar 13**
- 1. **Restar 31**
- 2. **Agregar 10**
- 3. **Agregar 8**
- 4. **Agregar 34**
- 5. **Agregar 21**
- 6. **Restar 21**
- 7. **Restar 13**
- 8. **Restar 28**
- 9. **Agregar 38**
- 10. **Agregar 12**
- 11. **Agregar 6**



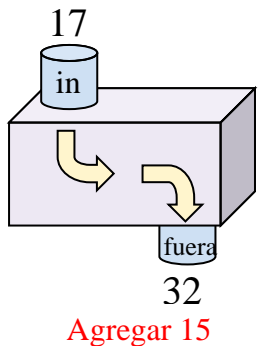


Determina la regla que cada máquina de función está usando.

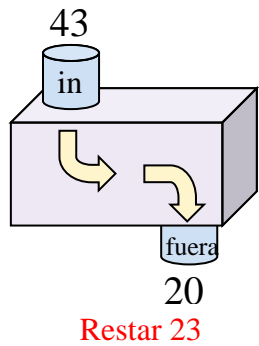
Ej)



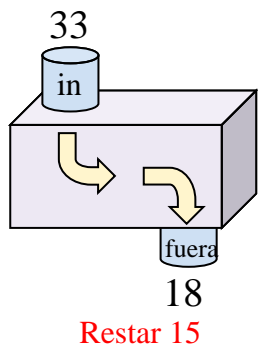
1)



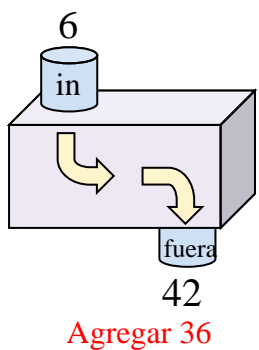
2)



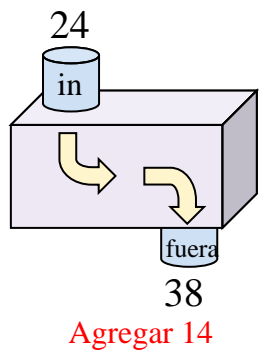
3)



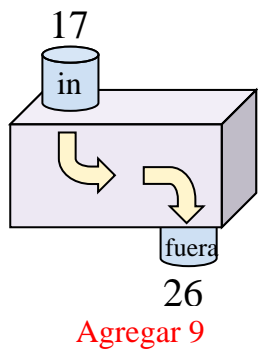
4)



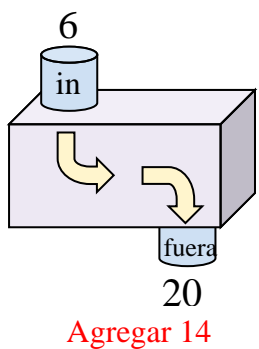
5)



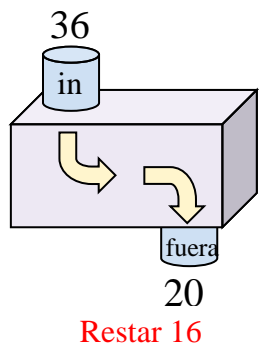
6)



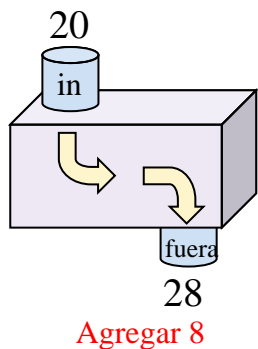
7)



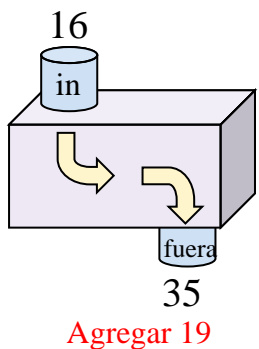
8)



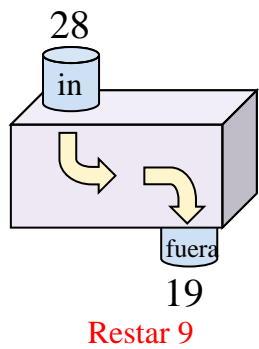
9)



10)



11)



**Respuestas**

- Ej. **Restar 33**
- 1. **Agregar 15**
- 2. **Restar 23**
- 3. **Restar 15**
- 4. **Agregar 36**
- 5. **Agregar 14**
- 6. **Agregar 9**
- 7. **Agregar 14**
- 8. **Restar 16**
- 9. **Agregar 8**
- 10. **Agregar 19**
- 11. **Restar 9**



Determina la regla que cada máquina de función está usando.

**Respuestas**

Ej)   
 7  
 in  
 fuera  
 20  
 Agregar 13

1)   
 24  
 in  
 fuera  
 33

2)   
 32  
 in  
 fuera  
 9

Ej. **Agregar 13**

1. \_\_\_\_\_

2. \_\_\_\_\_

3. \_\_\_\_\_

4. \_\_\_\_\_

3)   
 34  
 in  
 fuera  
 29

4)   
 27  
 in  
 fuera  
 37

5)   
 43  
 in  
 fuera  
 26

5. \_\_\_\_\_

6. \_\_\_\_\_

7. \_\_\_\_\_

8. \_\_\_\_\_

6)   
 36  
 in  
 fuera  
 20

7)   
 26  
 in  
 fuera  
 31

8)   
 20  
 in  
 fuera  
 33

9. \_\_\_\_\_

10. \_\_\_\_\_

11. \_\_\_\_\_

9)   
 38  
 in  
 fuera  
 12

10)   
 11  
 in  
 fuera  
 19

11)   
 26  
 in  
 fuera  
 10



Determina la regla que cada máquina de función está usando.

Ej) **Agregar 13**

1) **Agregar 9**

2) **Restar 23**

3) **Restar 5**

4) **Agregar 10**

5) **Restar 17**

6) **Restar 16**

7) **Agregar 5**

8) **Agregar 13**

9) **Restar 26**

10) **Agregar 8**

11) **Restar 16**

**Respuestas**

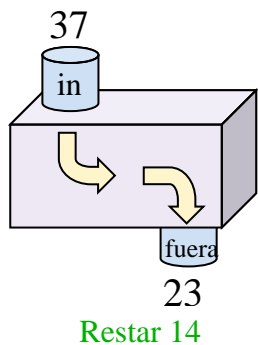
- Ej. **Agregar 13**
- 1. **Agregar 9**
- 2. **Restar 23**
- 3. **Restar 5**
- 4. **Agregar 10**
- 5. **Restar 17**
- 6. **Restar 16**
- 7. **Agregar 5**
- 8. **Agregar 13**
- 9. **Restar 26**
- 10. **Agregar 8**
- 11. **Restar 16**



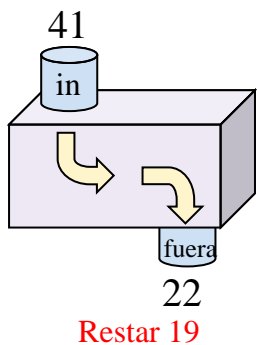


Determina la regla que cada máquina de función está usando.

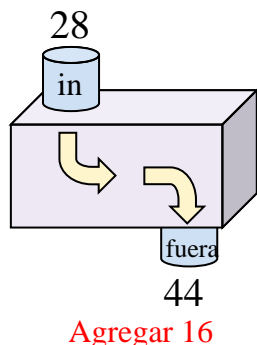
Ej)



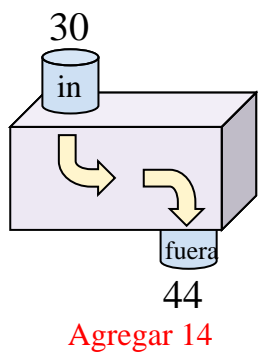
1)



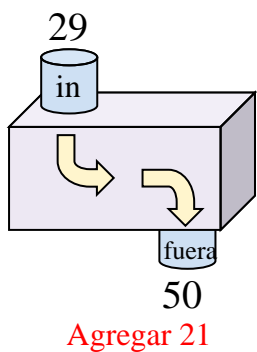
2)



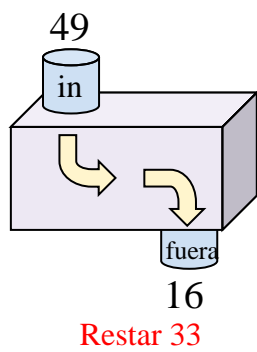
3)



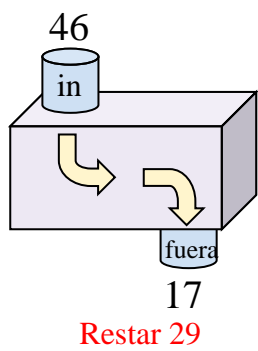
4)



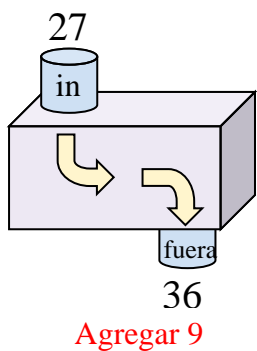
5)



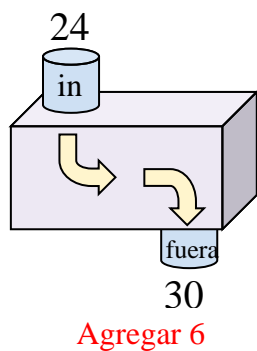
6)



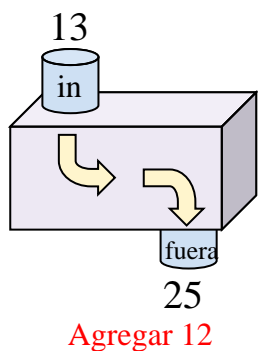
7)



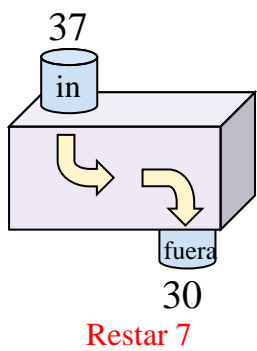
8)



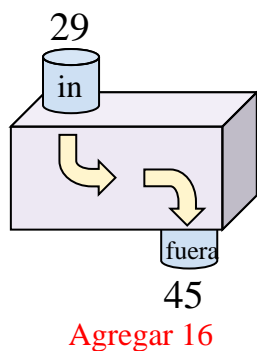
9)



10)



11)



**Respuestas**

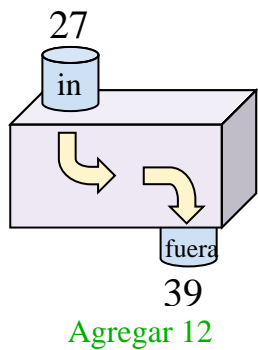
- Ej. **Restar 14**
- 1. **Restar 19**
- 2. **Agregar 16**
- 3. **Agregar 14**
- 4. **Agregar 21**
- 5. **Restar 33**
- 6. **Restar 29**
- 7. **Agregar 9**
- 8. **Agregar 6**
- 9. **Agregar 12**
- 10. **Restar 7**
- 11. **Agregar 16**



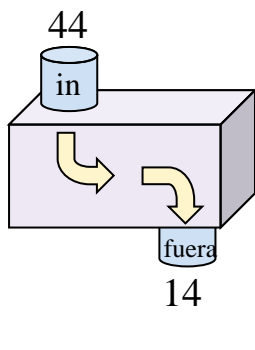


Determina la regla que cada máquina de función está usando.

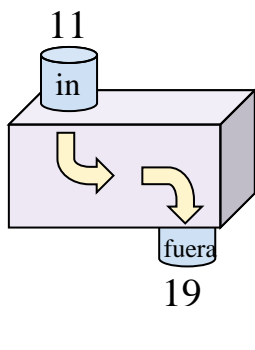
Ej)



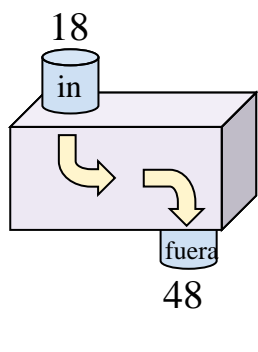
1)



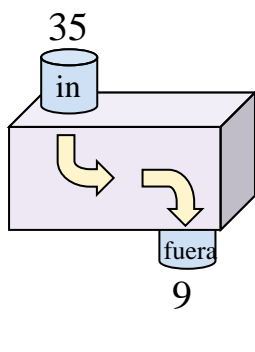
2)



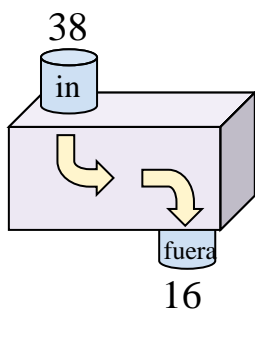
3)



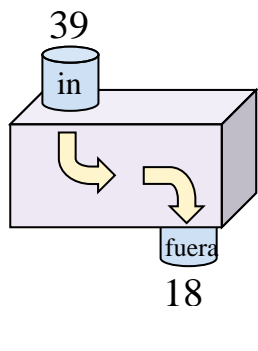
4)



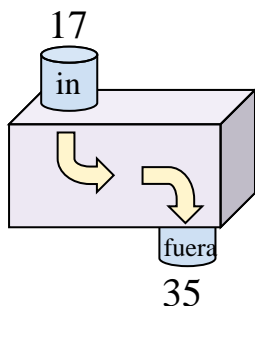
5)



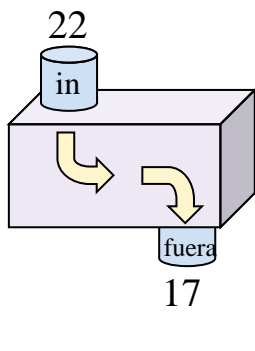
6)



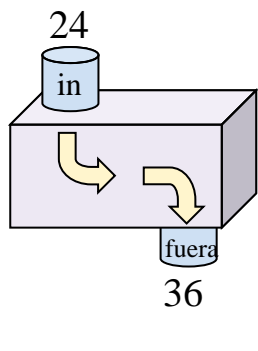
7)



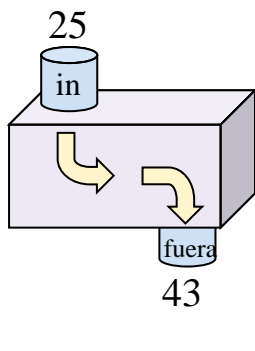
8)



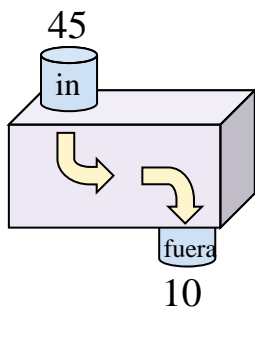
9)



10)



11)



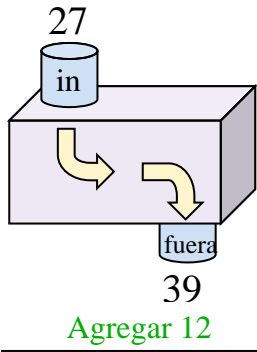
**Respuestas**

- Ej. **Agregar 12**
1. \_\_\_\_\_
  2. \_\_\_\_\_
  3. \_\_\_\_\_
  4. \_\_\_\_\_
  5. \_\_\_\_\_
  6. \_\_\_\_\_
  7. \_\_\_\_\_
  8. \_\_\_\_\_
  9. \_\_\_\_\_
  10. \_\_\_\_\_
  11. \_\_\_\_\_

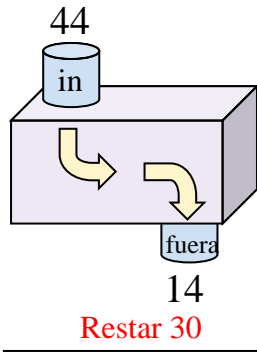


Determina la regla que cada máquina de función está usando.

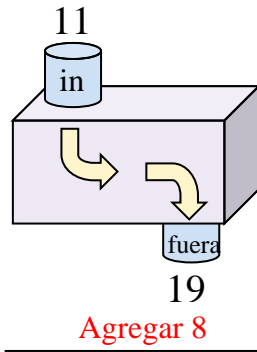
Ej)



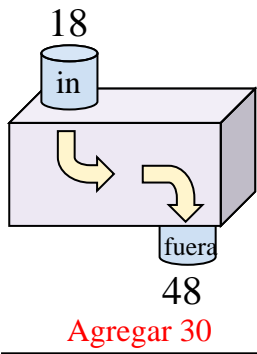
1)



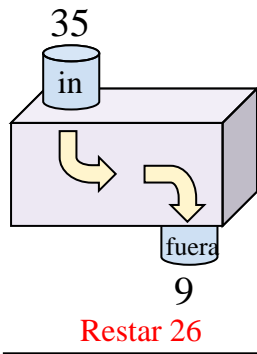
2)



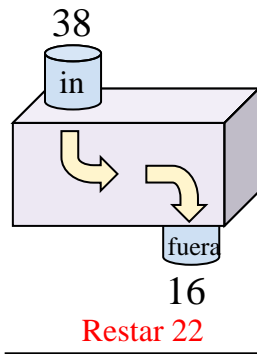
3)



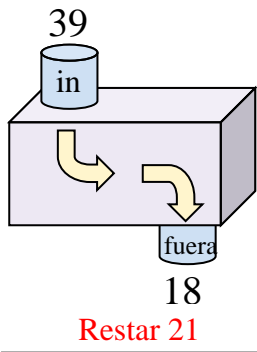
4)



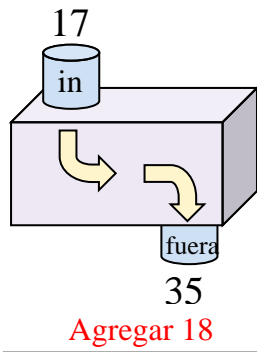
5)



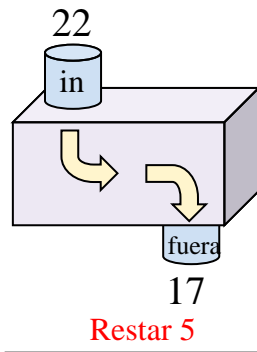
6)



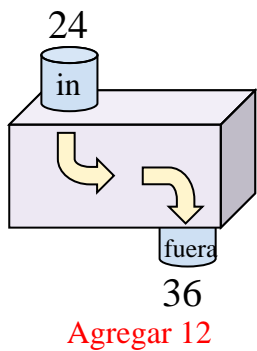
7)



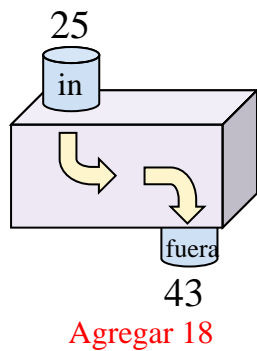
8)



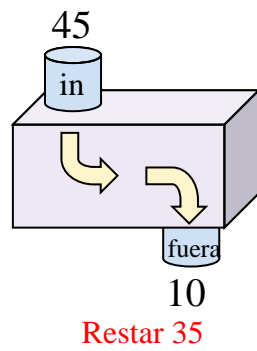
9)



10)



11)



**Respuestas**

Ej. **Agregar 12**

1. **Restar 30**

2. **Agregar 8**

3. **Agregar 30**

4. **Restar 26**

5. **Restar 22**

6. **Restar 21**

7. **Agregar 18**

8. **Restar 5**

9. **Agregar 12**

10. **Agregar 18**

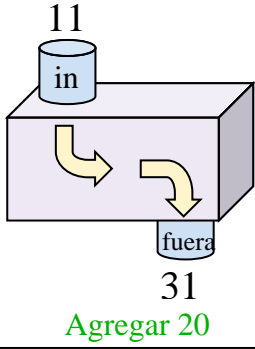
11. **Restar 35**



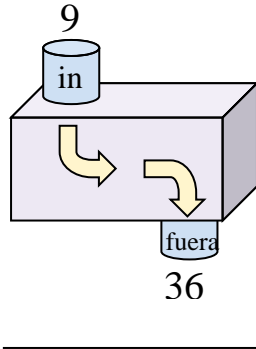
Determina la regla que cada máquina de función está usando.

**Respuestas**

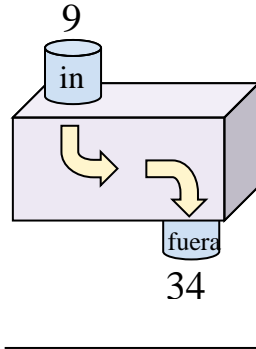
Ej)



1)



2)



Ej. **Agregar 20**

1. \_\_\_\_\_

2. \_\_\_\_\_

3. \_\_\_\_\_

4. \_\_\_\_\_

5. \_\_\_\_\_

6. \_\_\_\_\_

7. \_\_\_\_\_

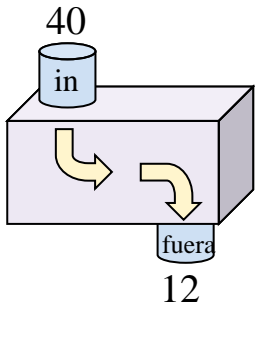
8. \_\_\_\_\_

9. \_\_\_\_\_

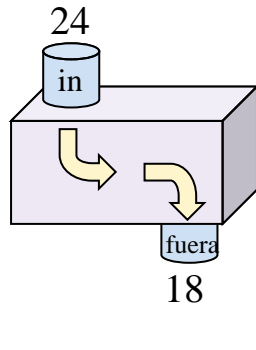
10. \_\_\_\_\_

11. \_\_\_\_\_

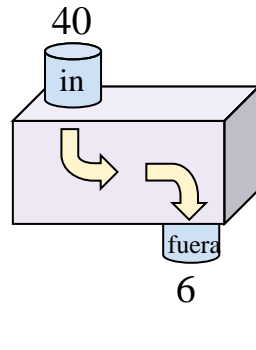
3)



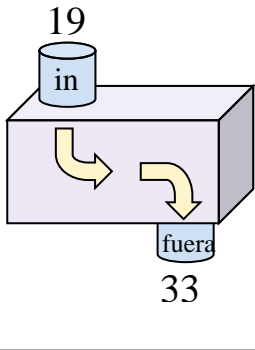
4)



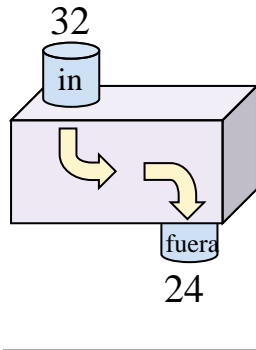
5)



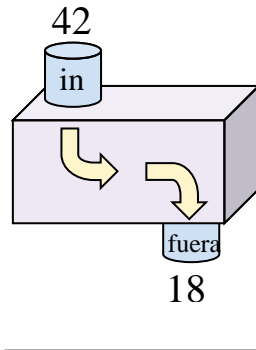
6)



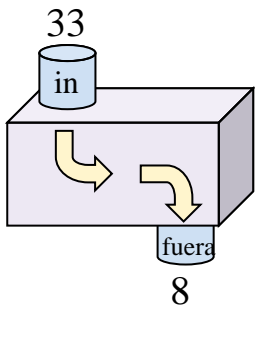
7)



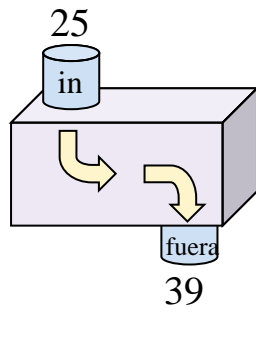
8)



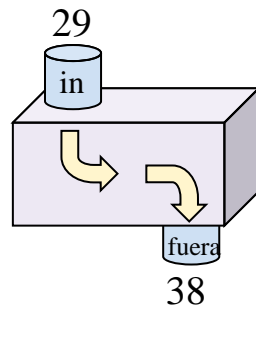
9)



10)



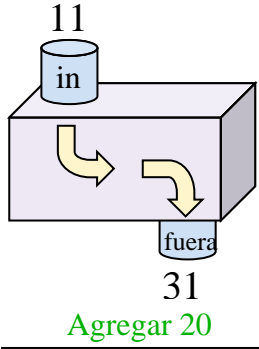
11)



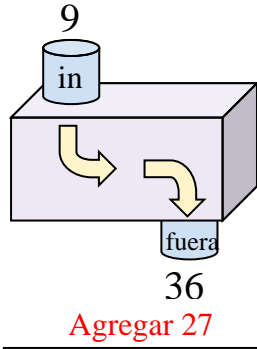


Determina la regla que cada máquina de función está usando.

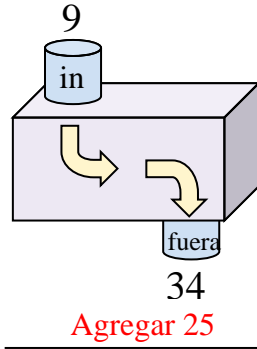
Ej)



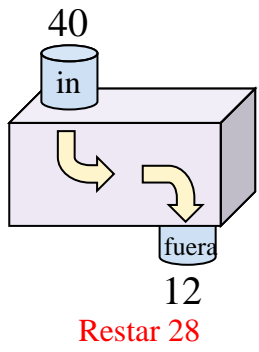
1)



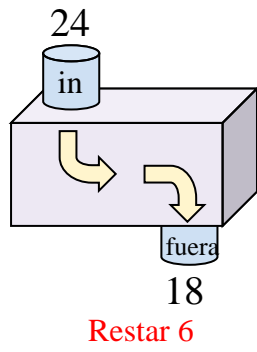
2)



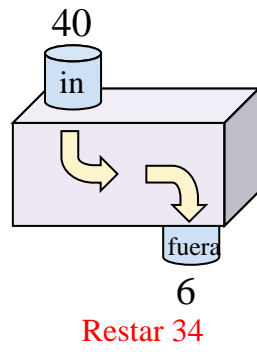
3)



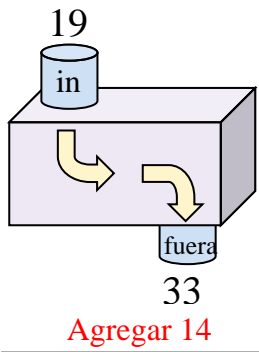
4)



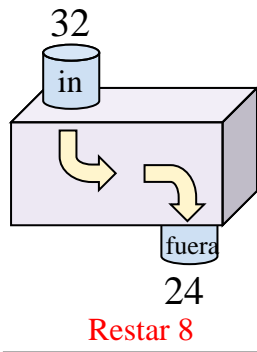
5)



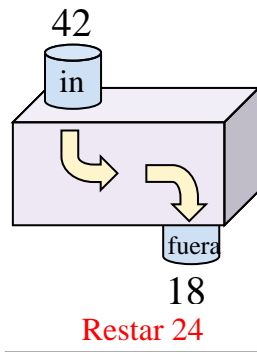
6)



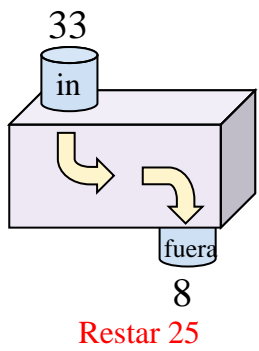
7)



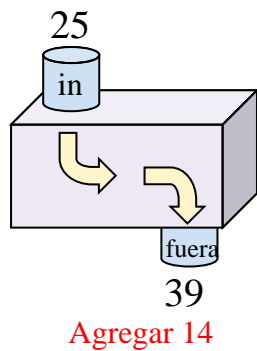
8)



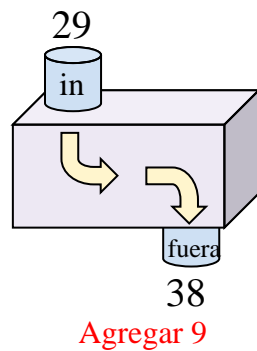
9)



10)



11)



**Respuestas**

Ej. **Agregar 20**

1. **Agregar 27**

2. **Agregar 25**

3. **Restar 28**

4. **Restar 6**

5. **Restar 34**

6. **Agregar 14**

7. **Restar 8**

8. **Restar 24**

9. **Restar 25**

10. **Agregar 14**

11. **Agregar 9**