



Resuelve cada problema usando la propiedad distributiva de la división.

Respuestas

1) $160 \div 4 =$

2) $190 \div 5 =$

3) $592 \div 8 =$

4) $511 \div 7 =$

5) $420 \div 5 =$

6) $360 \div 8 =$

7) $765 \div 9 =$

8) $675 \div 9 =$

9) $224 \div 4 =$

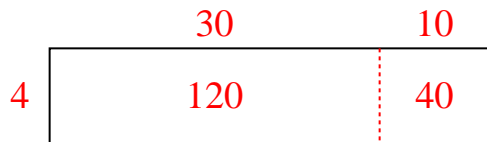
10) $230 \div 5 =$

- 1. _____
- 2. _____
- 3. _____
- 4. _____
- 5. _____
- 6. _____
- 7. _____
- 8. _____
- 9. _____
- 10. _____

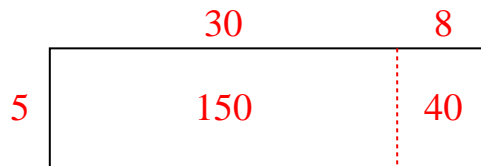


Resuelve cada problema usando la propiedad distributiva de la división.

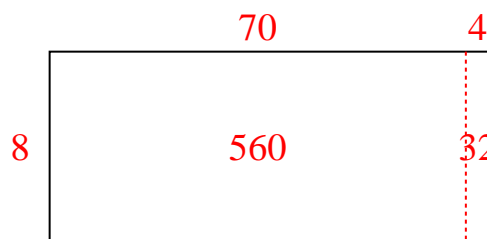
1) $160 \div 4 =$



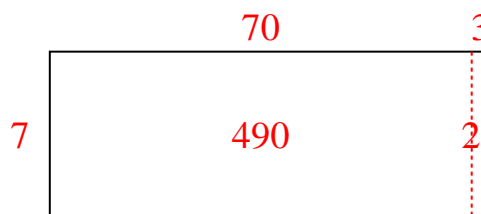
2) $190 \div 5 =$




3) $592 \div 8 =$



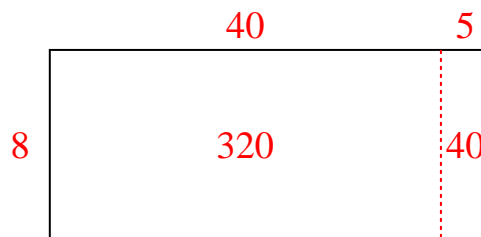
4) $511 \div 7 =$



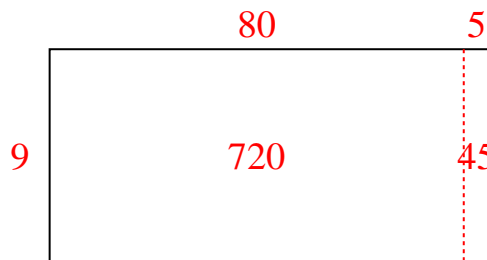
5) $420 \div 5 =$



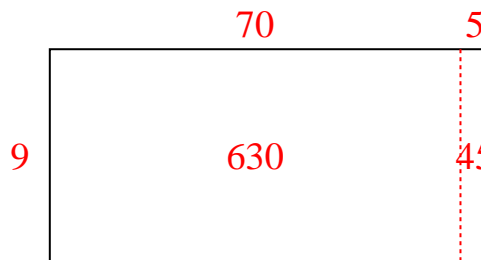
6) $360 \div 8 =$



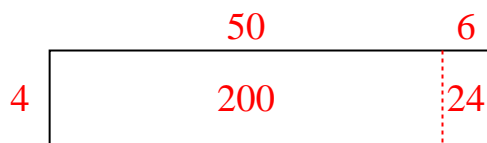
7) $765 \div 9 =$



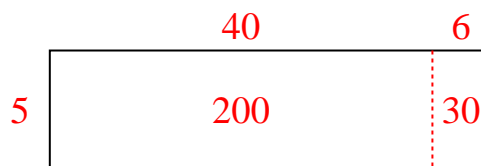
8) $675 \div 9 =$



9) $224 \div 4 =$



10) $230 \div 5 =$

**Respuestas**1. **40**2. **38**3. **74**4. **73**5. **84**6. **45**7. **85**8. **75**9. **56**10. **46**