



Resuelve cada problema usando la propiedad distributiva de la división.

Respuestas

1) $370 \div 5 =$

2) $296 \div 8 =$

3) $504 \div 8 =$

4) $420 \div 5 =$

5) $498 \div 6 =$

6) $315 \div 7 =$

7) $560 \div 7 =$

8) $280 \div 7 =$

9) $87 \div 3 =$

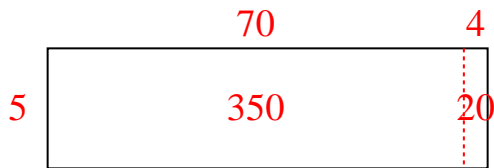
10) $343 \div 7 =$

- 1. _____
- 2. _____
- 3. _____
- 4. _____
- 5. _____
- 6. _____
- 7. _____
- 8. _____
- 9. _____
- 10. _____

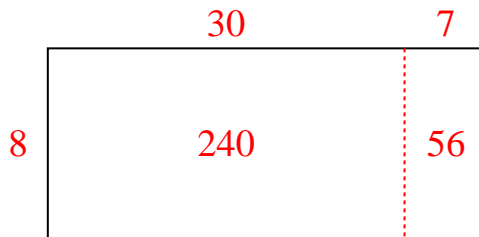


Resuelve cada problema usando la propiedad distributiva de la división.

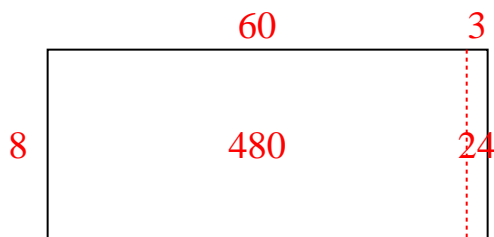
1) $370 \div 5 =$



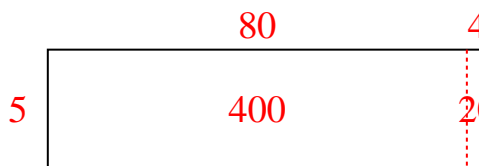
2) $296 \div 8 =$



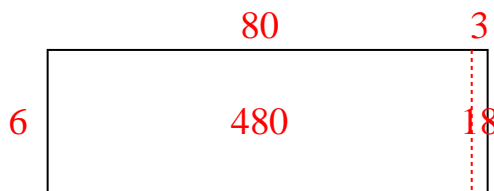
3) $504 \div 8 =$



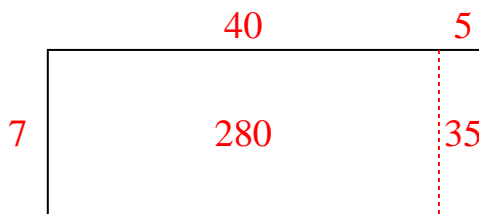
4) $420 \div 5 =$



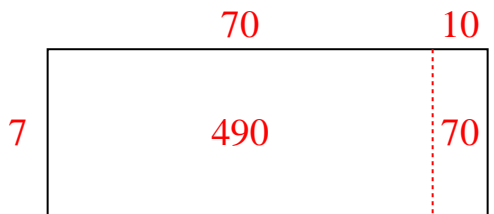
5) $498 \div 6 =$



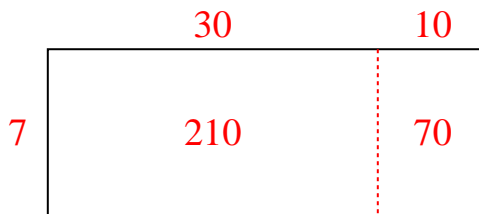
6) $315 \div 7 =$



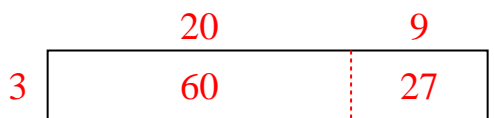
7) $560 \div 7 =$



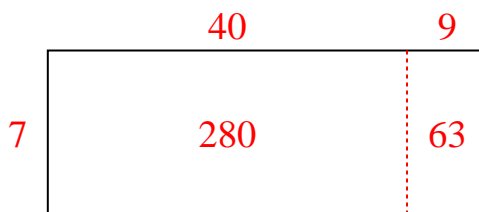
8) $280 \div 7 =$



9) $87 \div 3 =$



10) $343 \div 7 =$

**Respuestas**1. **74**2. **37**3. **63**4. **84**5. **83**6. **45**7. **80**8. **40**9. **29**10. **49**