



Resuelve cada problema usando la propiedad distributiva de la división.

1) $87 \div 3 =$

2) $485 \div 5 =$

3) $195 \div 5 =$

4) $640 \div 8 =$

5) $72 \div 3 =$

6) $540 \div 6 =$

7) $470 \div 5 =$

8) $230 \div 5 =$

9) $480 \div 6 =$

10) $228 \div 4 =$

Respuestas

1. _____

2. _____

3. _____

4. _____

5. _____

6. _____

7. _____

8. _____

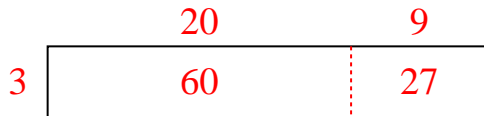
9. _____

10. _____




Resuelve cada problema usando la propiedad distributiva de la división.

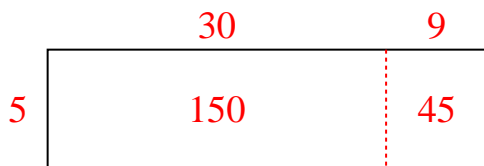
1) $87 \div 3 =$



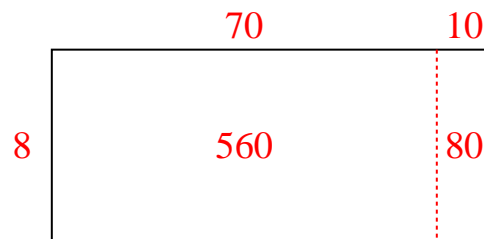
2) $485 \div 5 =$



3) $195 \div 5 =$



4) $640 \div 8 =$



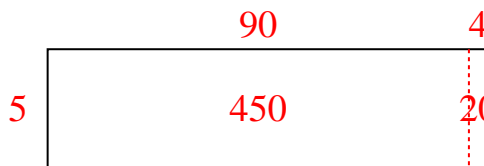
5) $72 \div 3 =$



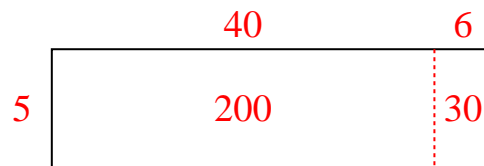
6) $540 \div 6 =$



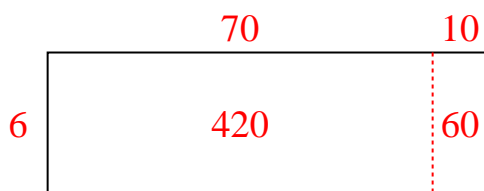
7) $470 \div 5 =$



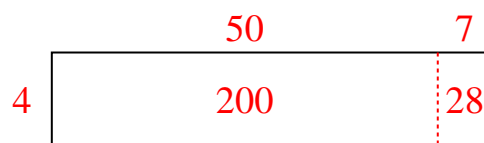
8) $230 \div 5 =$



9) $480 \div 6 =$



10) $228 \div 4 =$

**Respuestas**1. **29**2. **97**3. **39**4. **80**5. **24**6. **90**7. **94**8. **46**9. **80**10. **57**