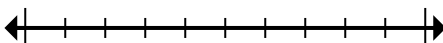




Marque la ubicación (aproximada) en la recta numérica y luego resuelva.

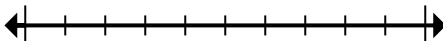
Respuestas

1) Round 60,393,636 to the nearest hundred thousand.



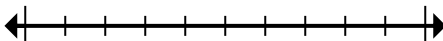
1. _____

2) Round 94,001 to the nearest ten thousand.



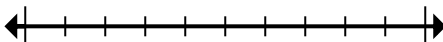
2. _____

3) Round 665 to the nearest hundred.



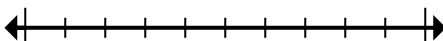
3. _____

4) Round 257 to the nearest hundred.



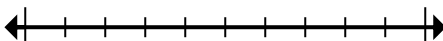
4. _____

5) Round 888,081 to the nearest ten thousand.



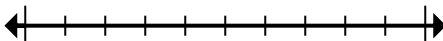
5. _____

6) Round 2,138 to the nearest thousand.



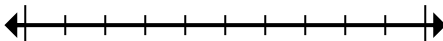
6. _____

7) Round 3,390 to the nearest thousand.



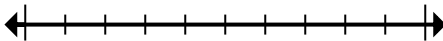
7. _____

8) Round 8,542,890 to the nearest ten thousand.



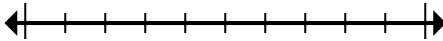
8. _____

9) Round 515,011 to the nearest hundred thousand.



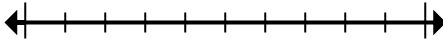
9. _____

10) Round 962,363 to the nearest hundred.



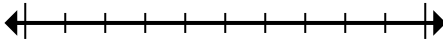
10. _____

11) Round 656,429 to the nearest hundred thousand.



11. _____

12) Round 87,606 to the nearest ten thousand.



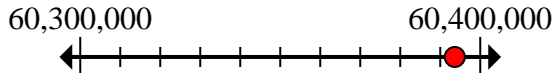
12. _____



Marque la ubicación (aproximada) en la recta numérica y luego resuelva.

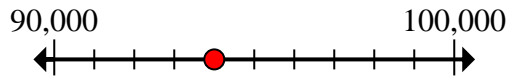
Respuestas

1) Round 60,393,636 to the nearest hundred thousand.



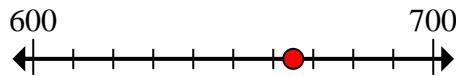
1. 60,400,000

2) Round 94,001 to the nearest ten thousand.



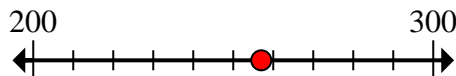
2. 90,000

3) Round 665 to the nearest hundred.



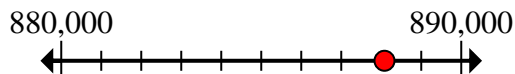
3. 700

4) Round 257 to the nearest hundred.



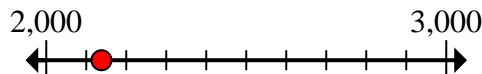
4. 300

5) Round 888,081 to the nearest ten thousand.



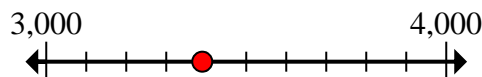
5. 890,000

6) Round 2,138 to the nearest thousand.



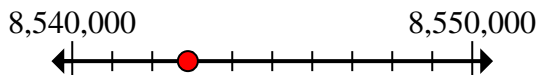
6. 2,000

7) Round 3,390 to the nearest thousand.



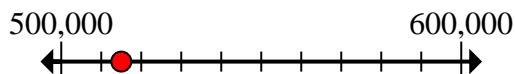
7. 3,000

8) Round 8,542,890 to the nearest ten thousand.



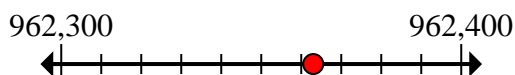
8. 8,540,000

9) Round 515,011 to the nearest hundred thousand.



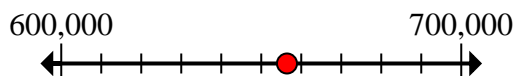
9. 500,000

10) Round 962,363 to the nearest hundred.



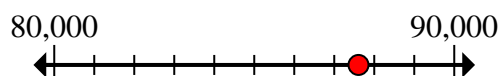
10. 962,400

11) Round 656,429 to the nearest hundred thousand.



11. 700,000

12) Round 87,606 to the nearest ten thousand.



12. 90,000

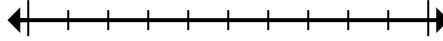


Marque la ubicación (aproximada) en la recta numérica y luego resuelva.

Respuestas

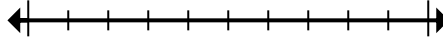
2,000	60,400,000	700	90,000
90,000	700,000	3,000	8,540,000
962,400	300	500,000	890,000

1) Round 60,393,636 to the nearest hundred thousand.



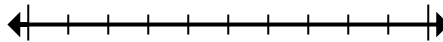
1. _____

2) Round 94,001 to the nearest ten thousand.



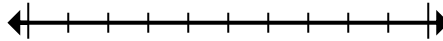
2. _____

3) Round 665 to the nearest hundred.



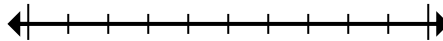
3. _____

4) Round 257 to the nearest hundred.



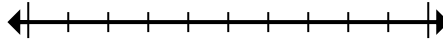
4. _____

5) Round 888,081 to the nearest ten thousand.



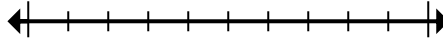
5. _____

6) Round 2,138 to the nearest thousand.



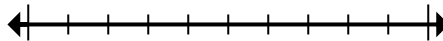
6. _____

7) Round 3,390 to the nearest thousand.



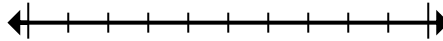
7. _____

8) Round 8,542,890 to the nearest ten thousand.



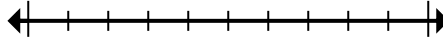
8. _____

9) Round 515,011 to the nearest hundred thousand.



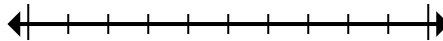
9. _____

10) Round 962,363 to the nearest hundred.



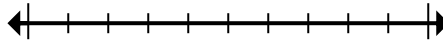
10. _____

11) Round 656,429 to the nearest hundred thousand.



11. _____

12) Round 87,606 to the nearest ten thousand.



12. _____