



Marque la ubicación (aproximada) en la recta numérica y luego resuelva.

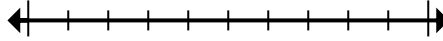
**Respuestas**

1) Round 52,817 to the nearest ten thousand.



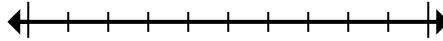
1. \_\_\_\_\_

2) Round 820,860 to the nearest hundred.



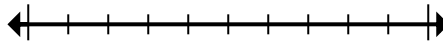
2. \_\_\_\_\_

3) Round 666,641 to the nearest ten thousand.



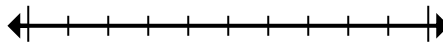
3. \_\_\_\_\_

4) Round 9,506 to the nearest thousand.



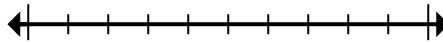
4. \_\_\_\_\_

5) Round 453,975 to the nearest hundred thousand.



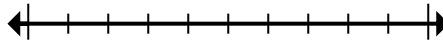
5. \_\_\_\_\_

6) Round 534,644 to the nearest hundred thousand.



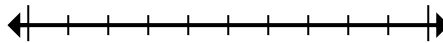
6. \_\_\_\_\_

7) Round 40,673,282 to the nearest hundred thousand.



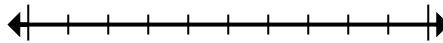
7. \_\_\_\_\_

8) Round 126,324 to the nearest ten thousand.



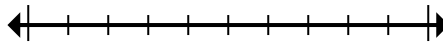
8. \_\_\_\_\_

9) Round 950 to the nearest hundred.



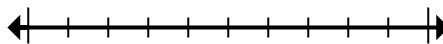
9. \_\_\_\_\_

10) Round 728,779 to the nearest thousand.



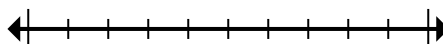
10. \_\_\_\_\_

11) Round 82,189 to the nearest ten thousand.



11. \_\_\_\_\_

12) Round 681,152 to the nearest thousand.



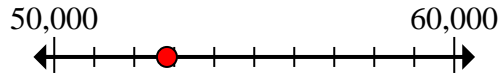
12. \_\_\_\_\_



Marque la ubicación (aproximada) en la recta numérica y luego resuelva.

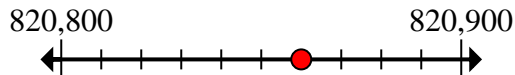
**Respuestas**

1) Round 52,817 to the nearest ten thousand.



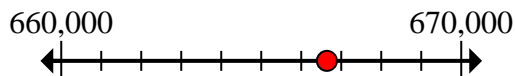
1. 50,000

2) Round 820,860 to the nearest hundred.



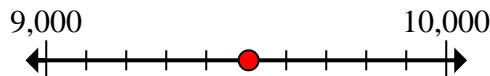
2. 820,900

3) Round 666,641 to the nearest ten thousand.



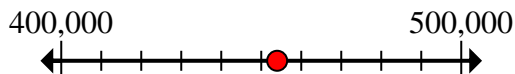
3. 670,000

4) Round 9,506 to the nearest thousand.



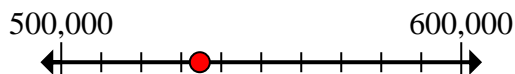
4. 10,000

5) Round 453,975 to the nearest hundred thousand.



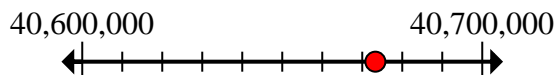
5. 500,000

6) Round 534,644 to the nearest hundred thousand.



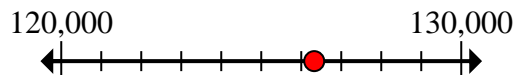
6. 500,000

7) Round 40,673,282 to the nearest hundred thousand.



7. 40,700,000

8) Round 126,324 to the nearest ten thousand.



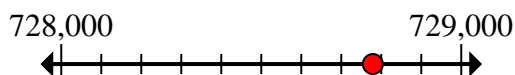
8. 130,000

9) Round 950 to the nearest hundred.



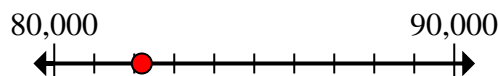
9. 1,000

10) Round 728,779 to the nearest thousand.



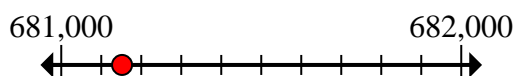
10. 729,000

11) Round 82,189 to the nearest ten thousand.



11. 80,000

12) Round 681,152 to the nearest thousand.



12. 681,000

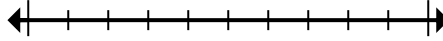


Marque la ubicación (aproximada) en la recta numérica y luego resuelva.

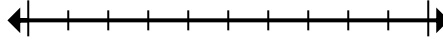
**Respuestas**

670,000	80,000	681,000	729,000
500,000	130,000	50,000	10,000
40,700,000	500,000	1,000	820,900

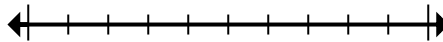
1) Round 52,817 to the nearest ten thousand.



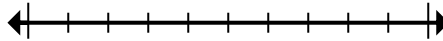
2) Round 820,860 to the nearest hundred.



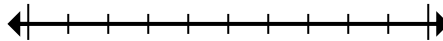
3) Round 666,641 to the nearest ten thousand.



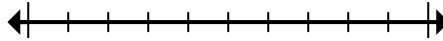
4) Round 9,506 to the nearest thousand.



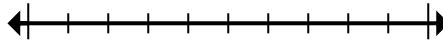
5) Round 453,975 to the nearest hundred thousand.



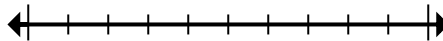
6) Round 534,644 to the nearest hundred thousand.



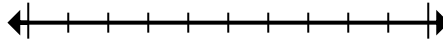
7) Round 40,673,282 to the nearest hundred thousand.



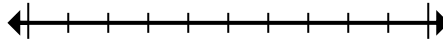
8) Round 126,324 to the nearest ten thousand.



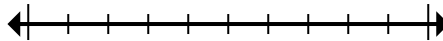
9) Round 950 to the nearest hundred.



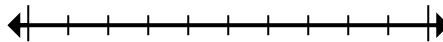
10) Round 728,779 to the nearest thousand.



11) Round 82,189 to the nearest ten thousand.



12) Round 681,152 to the nearest thousand.



- 1. \_\_\_\_\_
- 2. \_\_\_\_\_
- 3. \_\_\_\_\_
- 4. \_\_\_\_\_
- 5. \_\_\_\_\_
- 6. \_\_\_\_\_
- 7. \_\_\_\_\_
- 8. \_\_\_\_\_
- 9. \_\_\_\_\_
- 10. \_\_\_\_\_
- 11. \_\_\_\_\_
- 12. \_\_\_\_\_