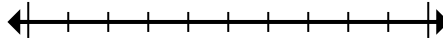




Marque la ubicación (aproximada) en la recta numérica y luego resuelva.

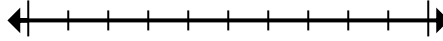
**Respuestas**

1) Round 45,381,768 to the nearest hundred thousand.



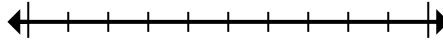
1. \_\_\_\_\_

2) Round 79,869 to the nearest ten thousand.



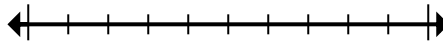
2. \_\_\_\_\_

3) Round 101,525 to the nearest ten thousand.



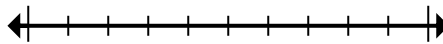
3. \_\_\_\_\_

4) Round 37,018 to the nearest thousand.



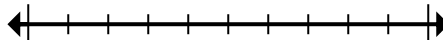
4. \_\_\_\_\_

5) Round 4,376 to the nearest thousand.



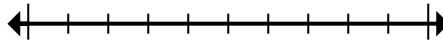
5. \_\_\_\_\_

6) Round 360,946 to the nearest thousand.



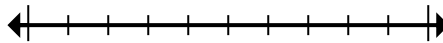
6. \_\_\_\_\_

7) Round 9,545,950 to the nearest hundred.



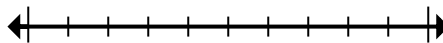
7. \_\_\_\_\_

8) Round 49,898,085 to the nearest hundred thousand.



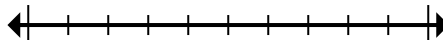
8. \_\_\_\_\_

9) Round 1,552 to the nearest thousand.



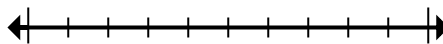
9. \_\_\_\_\_

10) Round 57,392 to the nearest ten thousand.



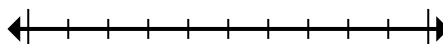
10. \_\_\_\_\_

11) Round 544,862 to the nearest hundred thousand.



11. \_\_\_\_\_

12) Round 3,268,593 to the nearest hundred.



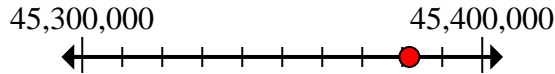
12. \_\_\_\_\_



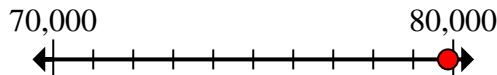
Marque la ubicación (aproximada) en la recta numérica y luego resuelva.

**Respuestas**

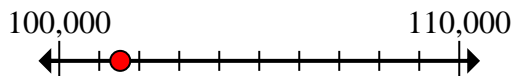
- 1) Round 45,381,768 to the nearest hundred thousand.

1. 45,400,000

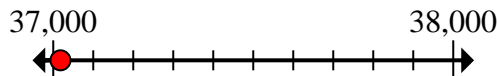
- 2) Round 79,869 to the nearest ten thousand.

2. 80,000

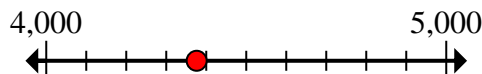
- 3) Round 101,525 to the nearest ten thousand.

3. 100,000

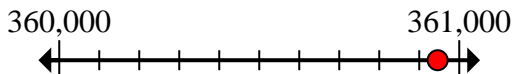
- 4) Round 37,018 to the nearest thousand.

4. 37,000

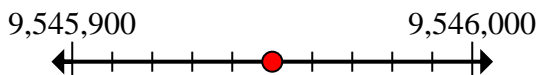
- 5) Round 4,376 to the nearest thousand.

5. 4,000

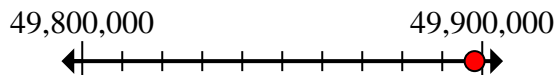
- 6) Round 360,946 to the nearest thousand.

6. 361,000

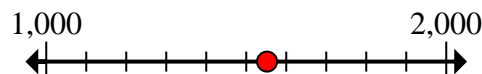
- 7) Round 9,545,950 to the nearest hundred.

7. 9,546,000

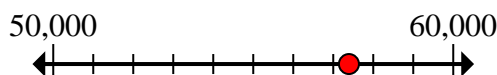
- 8) Round 49,898,085 to the nearest hundred thousand.

8. 49,900,000

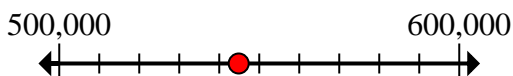
- 9) Round 1,552 to the nearest thousand.

9. 2,000

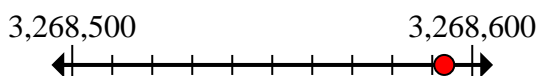
- 10) Round 57,392 to the nearest ten thousand.

10. 60,000

- 11) Round 544,862 to the nearest hundred thousand.

11. 500,000

- 12) Round 3,268,593 to the nearest hundred.

12. 3,268,600

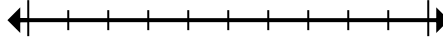


Marque la ubicación (aproximada) en la recta numérica y luego resuelva.

**Respuestas**

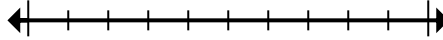
60,000	4,000	3,268,600	2,000
49,900,000	9,546,000	361,000	45,400,000
37,000	500,000	100,000	80,000

1) Round 45,381,768 to the nearest hundred thousand.



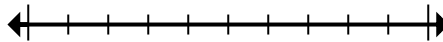
1. \_\_\_\_\_

2) Round 79,869 to the nearest ten thousand.



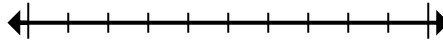
2. \_\_\_\_\_

3) Round 101,525 to the nearest ten thousand.



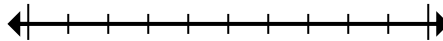
3. \_\_\_\_\_

4) Round 37,018 to the nearest thousand.



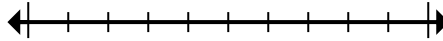
4. \_\_\_\_\_

5) Round 4,376 to the nearest thousand.



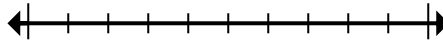
5. \_\_\_\_\_

6) Round 360,946 to the nearest thousand.



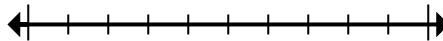
6. \_\_\_\_\_

7) Round 9,545,950 to the nearest hundred.



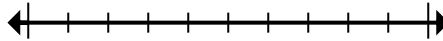
7. \_\_\_\_\_

8) Round 49,898,085 to the nearest hundred thousand.



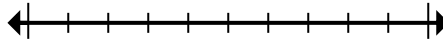
8. \_\_\_\_\_

9) Round 1,552 to the nearest thousand.



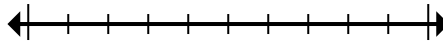
9. \_\_\_\_\_

10) Round 57,392 to the nearest ten thousand.



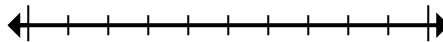
10. \_\_\_\_\_

11) Round 544,862 to the nearest hundred thousand.



11. \_\_\_\_\_

12) Round 3,268,593 to the nearest hundred.



12. \_\_\_\_\_