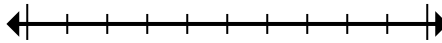




Marque la ubicación (aproximada) en la recta numérica y luego resuelva.

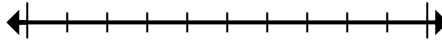
Respuestas

1) Round 808,484 to the nearest ten thousand.



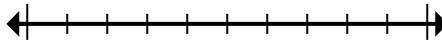
1. _____

2) Round 832,264 to the nearest thousand.



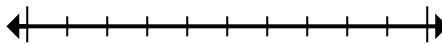
2. _____

3) Round 10,622,917 to the nearest hundred thousand.



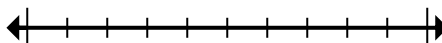
3. _____

4) Round 7,142,074 to the nearest ten thousand.



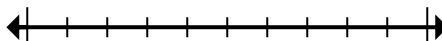
4. _____

5) Round 72,745 to the nearest ten thousand.



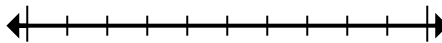
5. _____

6) Round 314 to the nearest hundred.



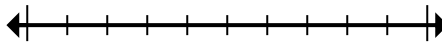
6. _____

7) Round 2,720 to the nearest thousand.



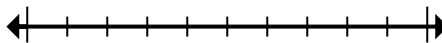
7. _____

8) Round 80,764 to the nearest ten thousand.



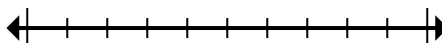
8. _____

9) Round 633,653 to the nearest thousand.



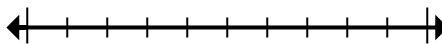
9. _____

10) Round 151,433 to the nearest hundred.



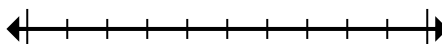
10. _____

11) Round 2,415 to the nearest hundred.



11. _____

12) Round 42,974,961 to the nearest hundred thousand.



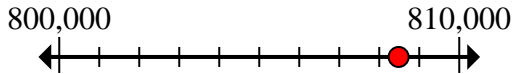
12. _____



Marque la ubicación (aproximada) en la recta numérica y luego resuelva.

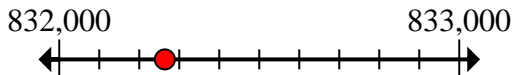
Respuestas

1) Round 808,484 to the nearest ten thousand.



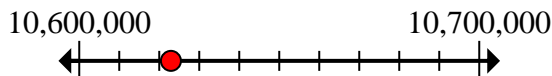
1. 810,000

2) Round 832,264 to the nearest thousand.



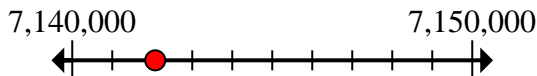
2. 832,000

3) Round 10,622,917 to the nearest hundred thousand.



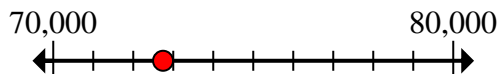
3. 10,600,000

4) Round 7,142,074 to the nearest ten thousand.



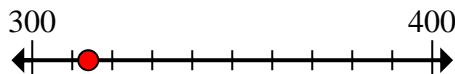
4. 7,140,000

5) Round 72,745 to the nearest ten thousand.



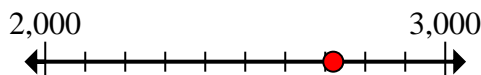
5. 70,000

6) Round 314 to the nearest hundred.



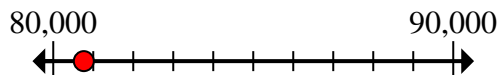
6. 300

7) Round 2,720 to the nearest thousand.



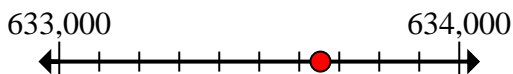
7. 3,000

8) Round 80,764 to the nearest ten thousand.



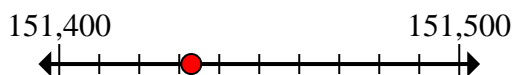
8. 80,000

9) Round 633,653 to the nearest thousand.




9. 634,000

10) Round 151,433 to the nearest hundred.



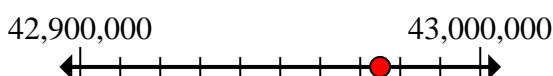
10. 151,400

11) Round 2,415 to the nearest hundred.



11. 2,400

12) Round 42,974,961 to the nearest hundred thousand.



12. 43,000,000

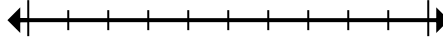


Marque la ubicación (aproximada) en la recta numérica y luego resuelva.

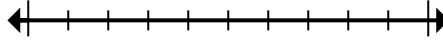
Respuestas

3,000	151,400	832,000	10,600,000
70,000	80,000	7,140,000	300
634,000	810,000	2,400	43,000,000

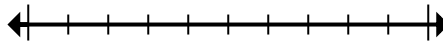
1) Round 808,484 to the nearest ten thousand.



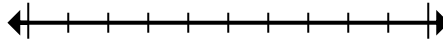
2) Round 832,264 to the nearest thousand.



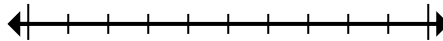
3) Round 10,622,917 to the nearest hundred thousand.



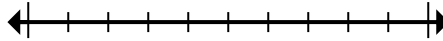
4) Round 7,142,074 to the nearest ten thousand.



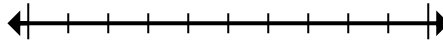
5) Round 72,745 to the nearest ten thousand.



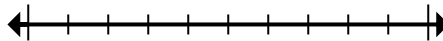
6) Round 314 to the nearest hundred.



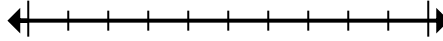
7) Round 2,720 to the nearest thousand.



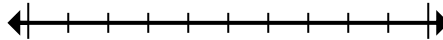
8) Round 80,764 to the nearest ten thousand.



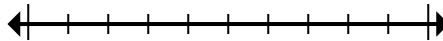
9) Round 633,653 to the nearest thousand.



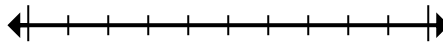
10) Round 151,433 to the nearest hundred.



11) Round 2,415 to the nearest hundred.



12) Round 42,974,961 to the nearest hundred thousand.



1. _____
2. _____
3. _____
4. _____
5. _____
6. _____
7. _____
8. _____
9. _____
10. _____
11. _____
12. _____