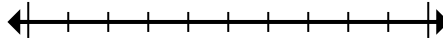




Marque la ubicación (aproximada) en la recta numérica y luego resuelva.

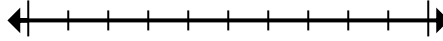
**Respuestas**

1) Round 40,437 to the nearest ten thousand.



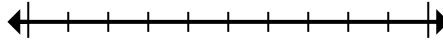
1. \_\_\_\_\_

2) Round 770,735 to the nearest ten thousand.



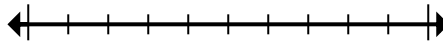
2. \_\_\_\_\_

3) Round 2,631,910 to the nearest hundred.



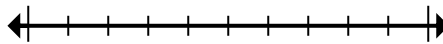
3. \_\_\_\_\_

4) Round 76,892 to the nearest thousand.



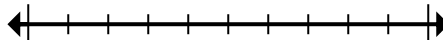
4. \_\_\_\_\_

5) Round 978,086 to the nearest ten thousand.



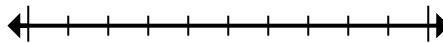
5. \_\_\_\_\_

6) Round 846 to the nearest hundred.



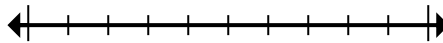
6. \_\_\_\_\_

7) Round 65,398 to the nearest ten thousand.



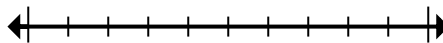
7. \_\_\_\_\_

8) Round 43,892 to the nearest hundred.



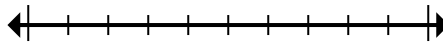
8. \_\_\_\_\_

9) Round 58,843,639 to the nearest hundred thousand.



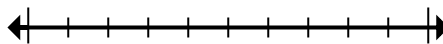
9. \_\_\_\_\_

10) Round 665,033 to the nearest hundred thousand.



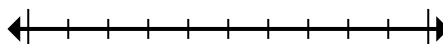
10. \_\_\_\_\_

11) Round 8,936 to the nearest thousand.



11. \_\_\_\_\_

12) Round 311,500 to the nearest thousand.



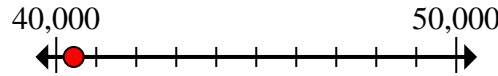
12. \_\_\_\_\_



Marque la ubicación (aproximada) en la recta numérica y luego resuelva.

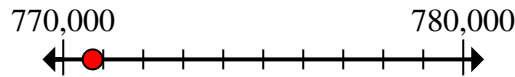
**Respuestas**

1) Round 40,437 to the nearest ten thousand.



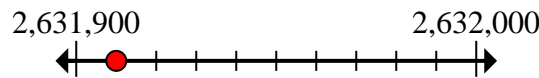
1. 40,000

2) Round 770,735 to the nearest ten thousand.



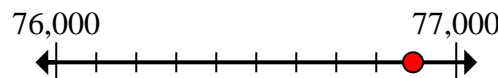
2. 770,000

3) Round 2,631,910 to the nearest hundred.



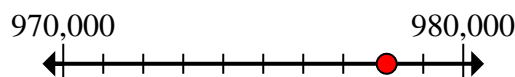
3. 2,631,900

4) Round 76,892 to the nearest thousand.



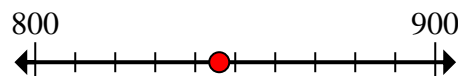
4. 77,000

5) Round 978,086 to the nearest ten thousand.



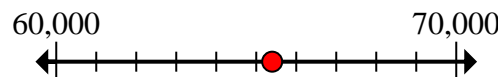
5. 980,000

6) Round 846 to the nearest hundred.



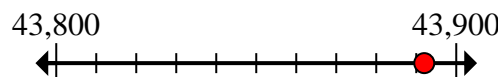
6. 800

7) Round 65,398 to the nearest ten thousand.



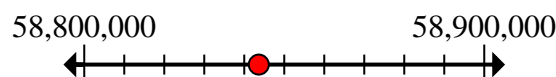
7. 70,000

8) Round 43,892 to the nearest hundred.



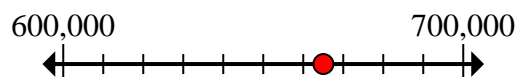
8. 43,900

9) Round 58,843,639 to the nearest hundred thousand.



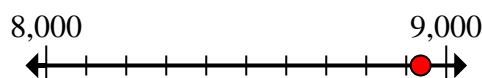
9. 58,800,000

10) Round 665,033 to the nearest hundred thousand.



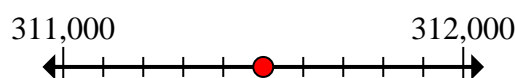
10. 700,000

11) Round 8,936 to the nearest thousand.



11. 9,000

12) Round 311,500 to the nearest thousand.



12. 312,000

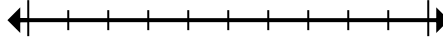


Marque la ubicación (aproximada) en la recta numérica y luego resuelva.

**Respuestas**

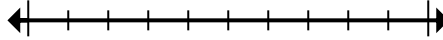
800	980,000	70,000	2,631,900
9,000	312,000	700,000	77,000
40,000	43,900	770,000	58,800,000

1) Round 40,437 to the nearest ten thousand.



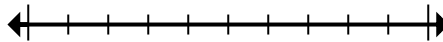
1. \_\_\_\_\_

2) Round 770,735 to the nearest ten thousand.



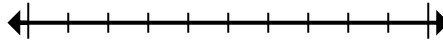
2. \_\_\_\_\_

3) Round 2,631,910 to the nearest hundred.



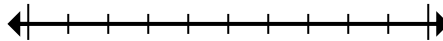
3. \_\_\_\_\_

4) Round 76,892 to the nearest thousand.



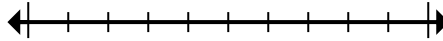
4. \_\_\_\_\_

5) Round 978,086 to the nearest ten thousand.



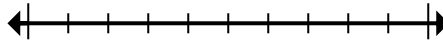
5. \_\_\_\_\_

6) Round 846 to the nearest hundred.



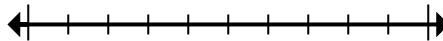
6. \_\_\_\_\_

7) Round 65,398 to the nearest ten thousand.



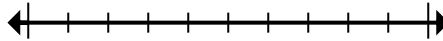
7. \_\_\_\_\_

8) Round 43,892 to the nearest hundred.



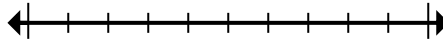
8. \_\_\_\_\_

9) Round 58,843,639 to the nearest hundred thousand.



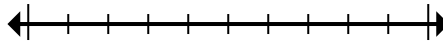
9. \_\_\_\_\_

10) Round 665,033 to the nearest hundred thousand.



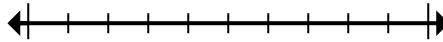
10. \_\_\_\_\_

11) Round 8,936 to the nearest thousand.



11. \_\_\_\_\_

12) Round 311,500 to the nearest thousand.



12. \_\_\_\_\_