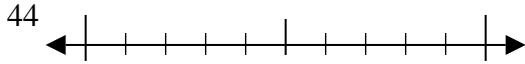




Usar las rectas numéricas para encontrar el número más cercano a 10.

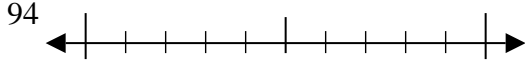
Respuestas

Ej)



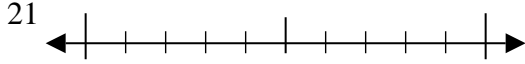
Ej. 40

1)



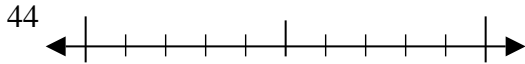
1. _____

2)



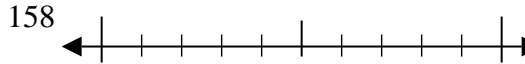
2. _____

3)



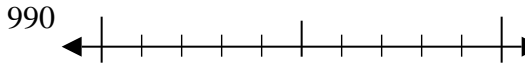
3. _____

4)



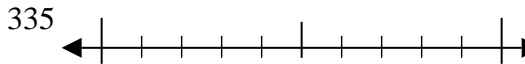
4. _____

5)



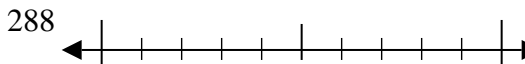
5. _____

6)



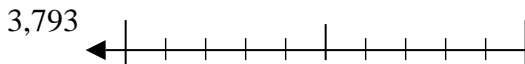
6. _____

7)



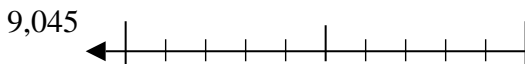
7. _____

8)



8. _____

9)

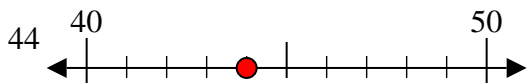


9. _____

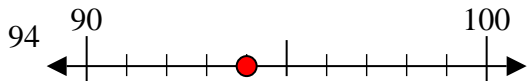


Usar las rectas numéricas para encontrar el número más cercano a 10.

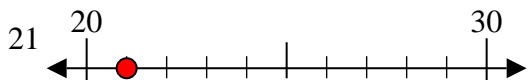
Ej)



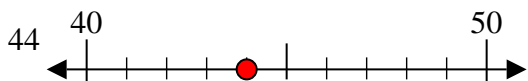
1)



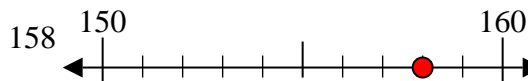
2)



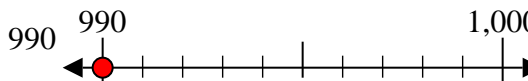
3)



4)



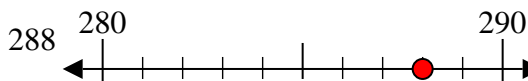
5)



6)



7)



8)



9)



Respuestas

- Ej. 40
- 1. 90
- 2. 20
- 3. 40
- 4. 160
- 5. 990
- 6. 340
- 7. 290
- 8. 3790
- 9. 9050