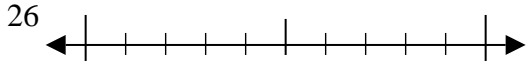




Usar las rectas numéricas para encontrar el número más cercano a 10.

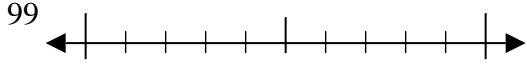
**Respuestas**

Ej)



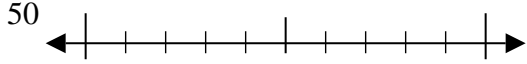
Ej. 30

1)



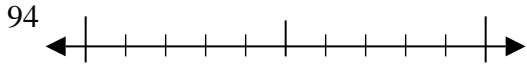
1. \_\_\_\_\_

2)



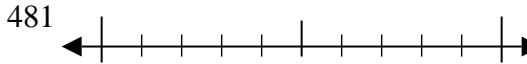
2. \_\_\_\_\_

3)



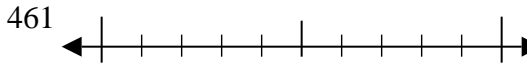
3. \_\_\_\_\_

4)



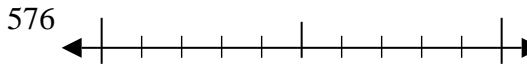
4. \_\_\_\_\_

5)



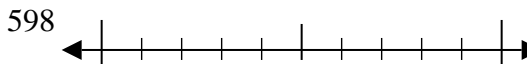
5. \_\_\_\_\_

6)



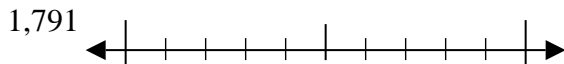
6. \_\_\_\_\_

7)



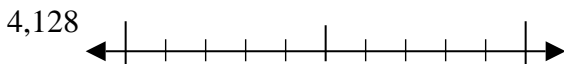
7. \_\_\_\_\_

8)



8. \_\_\_\_\_

9)

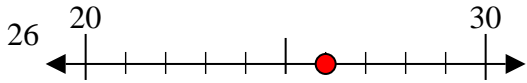


9. \_\_\_\_\_

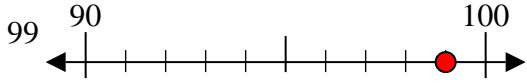


Usar las rectas numéricas para encontrar el número más cercano a 10.

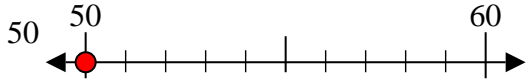
Ej)



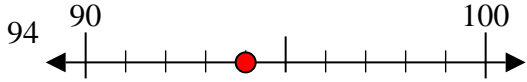
1)



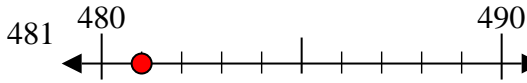
2)



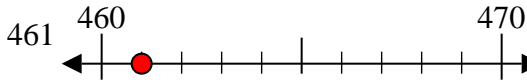
3)



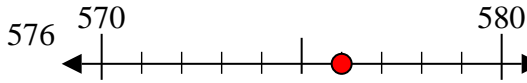
4)



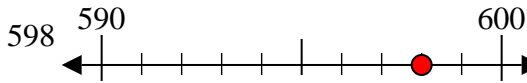
5)



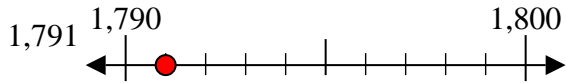
6)



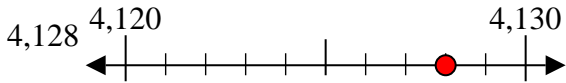
7)



8)



9)



**Respuestas**

Ej. 30

1. 100

2. 50

3. 90

4. 480

5. 460

6. 580

7. 600

8. 1790

9. 4130