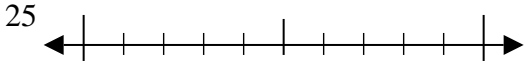


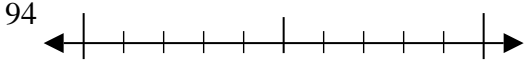


Usar las rectas numéricas para encontrar el número más cercano a 10.

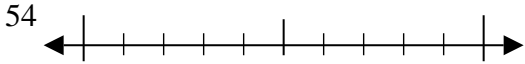
Ej)



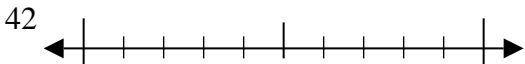
1)



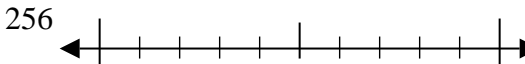
2)



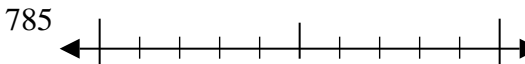
3)



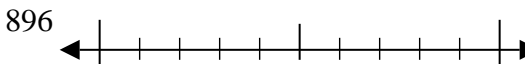
4)



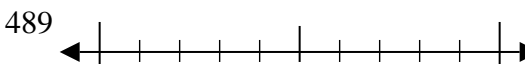
5)



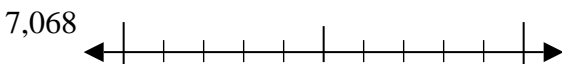
6)



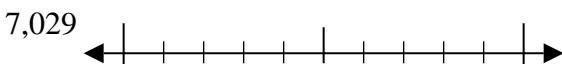
7)



8)



9)



Respuestas

Ej. 30

1. _____

2. _____

3. _____

4. _____

5. _____

6. _____

7. _____

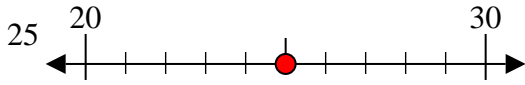
8. _____

9. _____

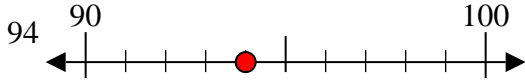


Usar las rectas numéricas para encontrar el número más cercano a 10.

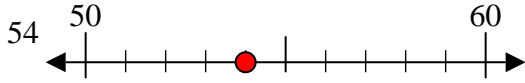
Ej)



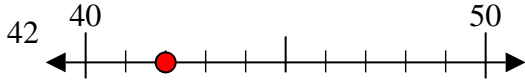
1)



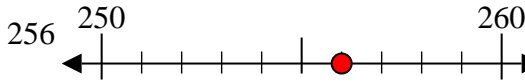
2)



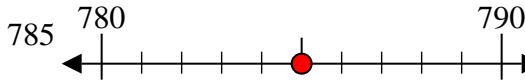
3)



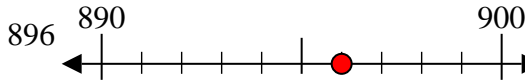
4)



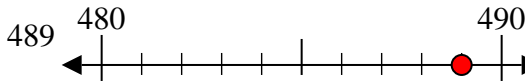
5)



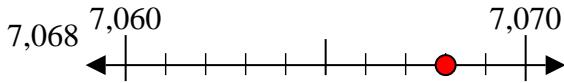
6)



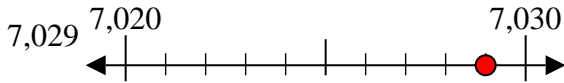
7)



8)



9)



Respuestas

Ej. 30

1. 90

2. 50

3. 40

4. 260

5. 790

6. 900

7. 490

8. 7070

9. 7030