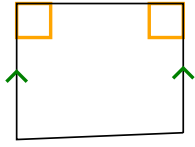




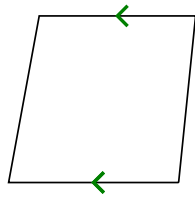
Determina si la figura mostrada es un Cuadrilátero, Cometa, Trapezoide, Paralelogramo, Romboide, Rectángulo o Cuadrado (Puede ser más que una)

Respuestas


1)



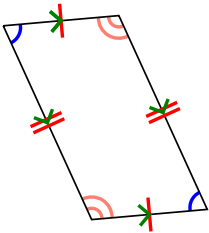
2)



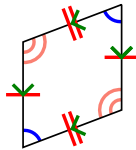
3)



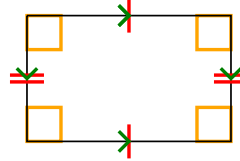
4)



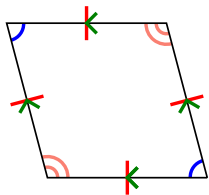
5)



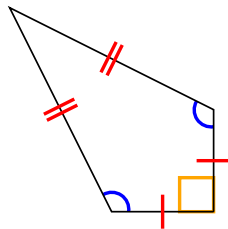
6)



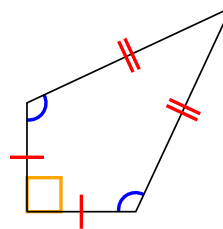
7)



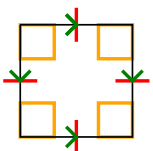
8)



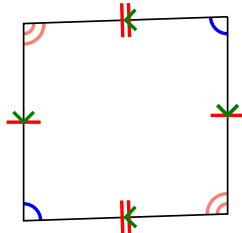
9)




10)



11)



12)

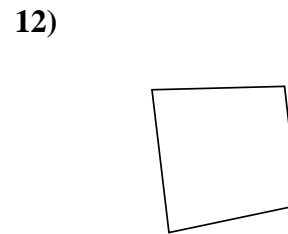
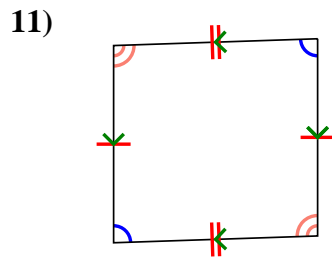
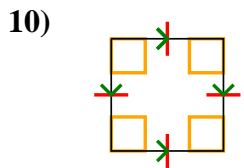
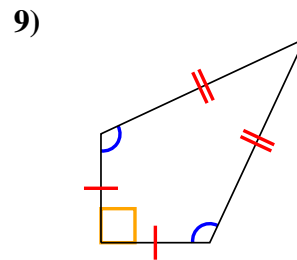
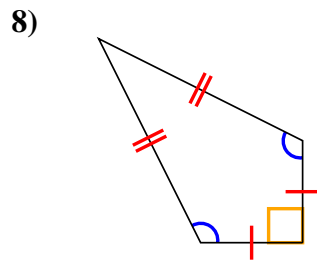
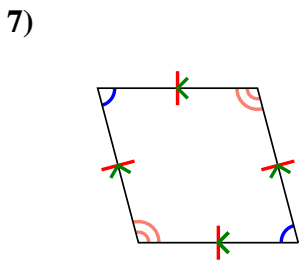
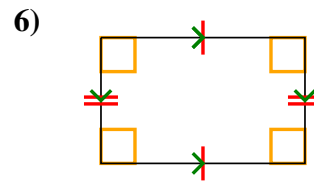
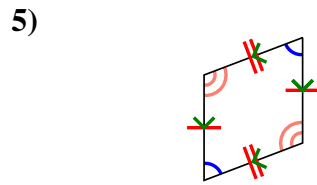
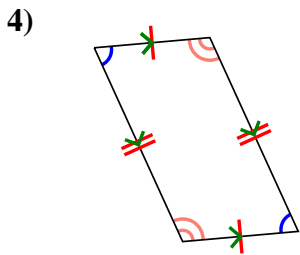
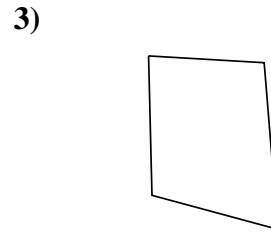
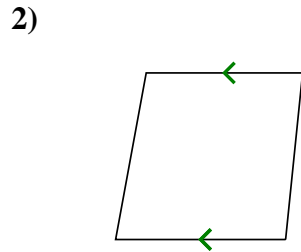
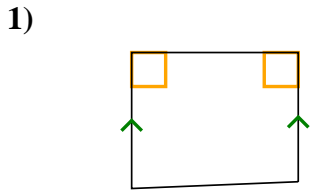


1. _____
2. _____
3. _____
4. _____
5. _____
6. _____
7. _____
8. _____
9. _____
10. _____
11. _____
12. _____



Determina si la figura mostrada es un Cuadrilátero, Cometa, Trapezoide, Paralelogramo, Romboide, Rectángulo o Cuadrado (Puede ser más que una)

Respuestas



1. Q,T

2. Q,T

3. Q

4. Q,P

5. Q,P

6. Q,P,R

7. Q,P,H

8. Q,K

9. Q,K

10. Q,P,H,R,S

11. Q,P

12. Q