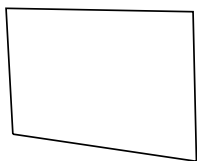




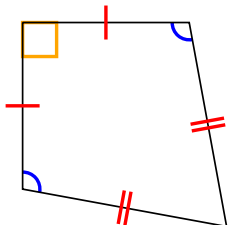
Determina si la figura mostrada es un Cuadrilátero, Cometa, Trapezoide, Paralelogramo, Romboide, Rectángulo o Cuadrado (Puede ser más que una)

Respuestas

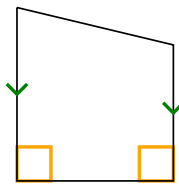
1)



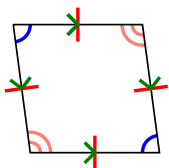
2)



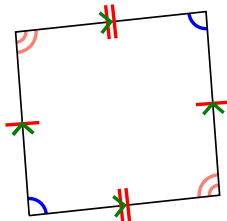
3)



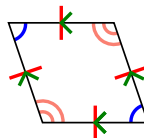
4)



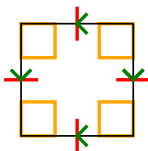
5)



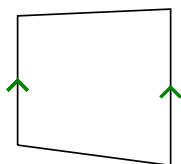
6)



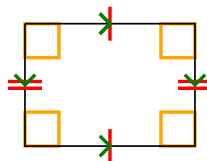
7)



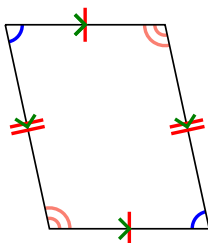
8)



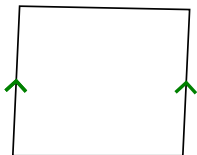
9)



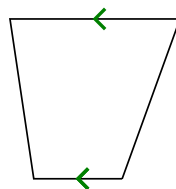
10)



11)



12)



1. _____

2. _____

3. _____

4. _____

5. _____

6. _____

7. _____

8. _____

9. _____

10. _____

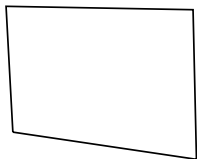
11. _____

12. _____

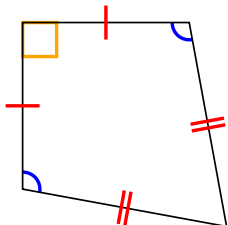


Determina si la figura mostrada es un Cuadrilátero, Cometa, Trapezoide, Paralelogramo, Romboide, Rectángulo o Cuadrado (Puede ser más que una)

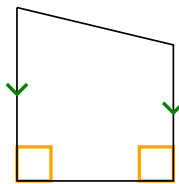
1)



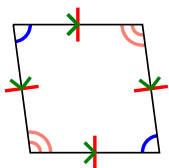
2)



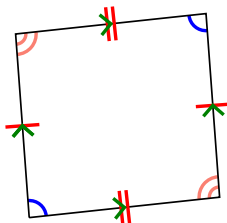
3)



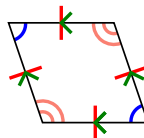
4)



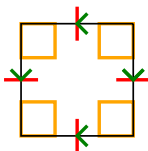
5)



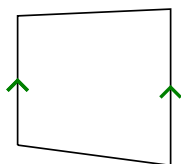
6)



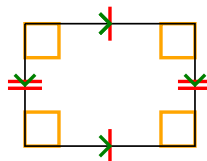
7)



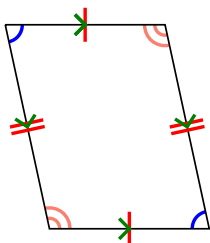
8)



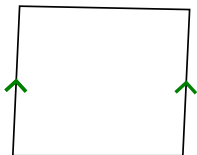
9)



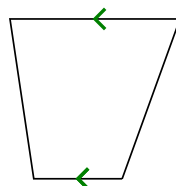
10)



11)



12)

**Respuestas**1. Q2. Q,K3. Q,T4. Q,P,H5. Q,P6. Q,P,H7. Q,P,H,R,S8. Q,T9. Q,P,R10. Q,P11. Q,T12. Q,T