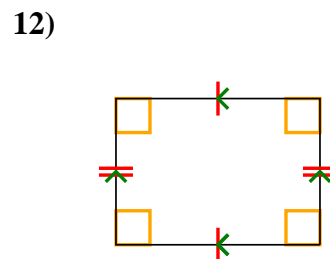
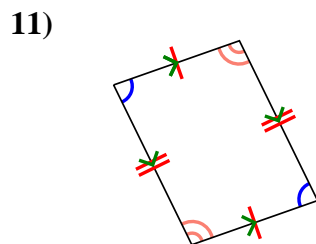
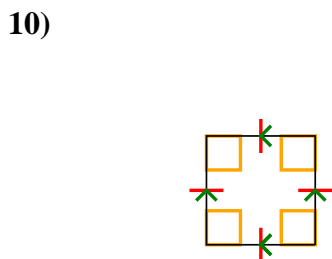
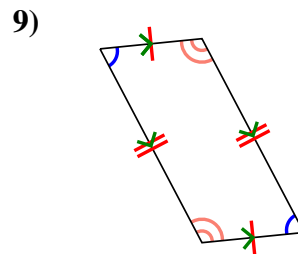
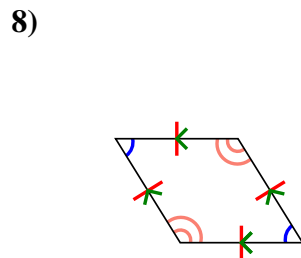
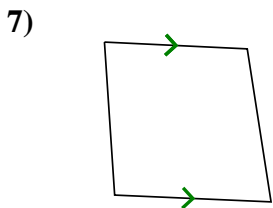
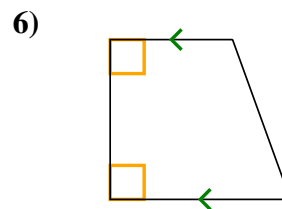
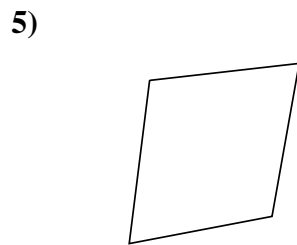
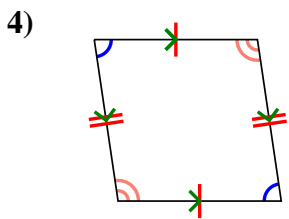
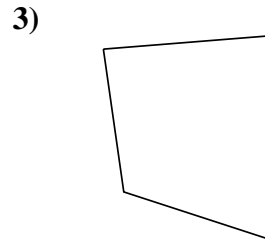
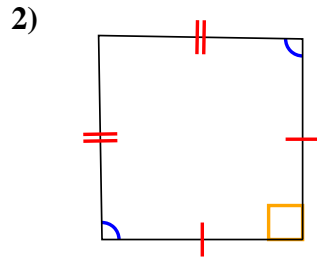
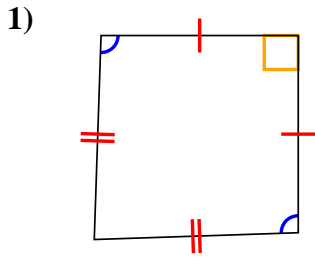




Determina si la figura mostrada es un Cuadrilátero, Cometa, Trapezoide, Paralelogramo, Romboide, Rectángulo o Cuadrado (Puede ser más que una)

Respuestas

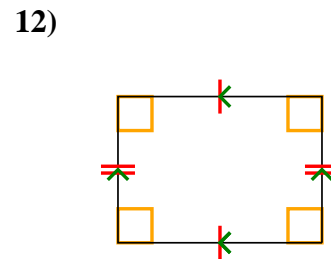
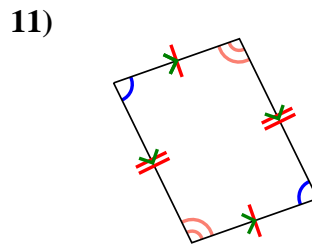
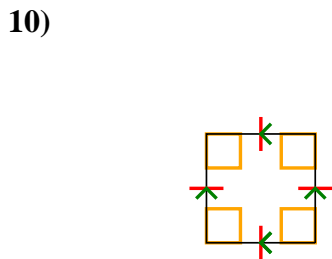
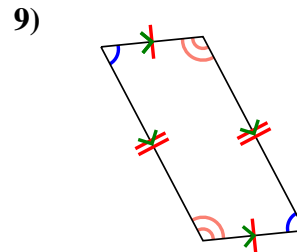
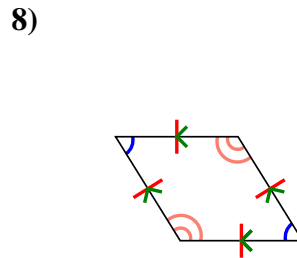
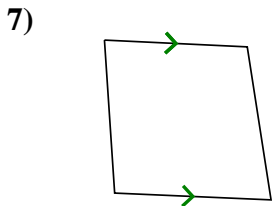
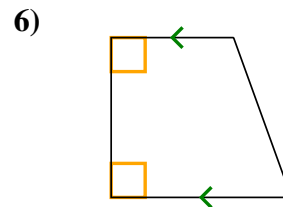
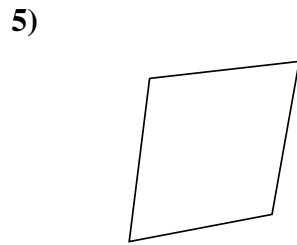
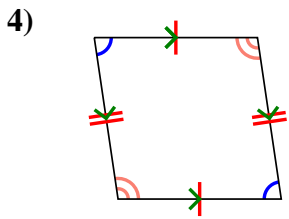
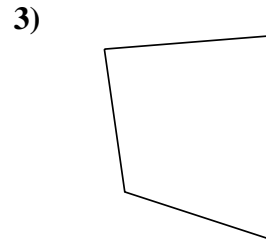
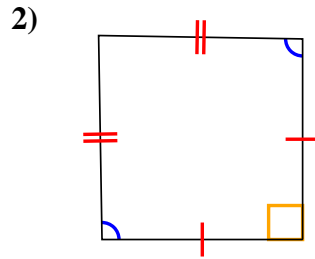
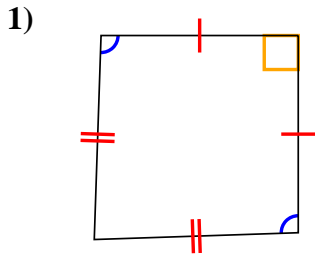


1. _____
2. _____
3. _____
4. _____
5. _____
6. _____
7. _____
8. _____
9. _____
10. _____
11. _____
12. _____



Determina si la figura mostrada es un Cuadrilátero, Cometa, Trapezoide, Paralelogramo, Romboide, Rectángulo o Cuadrado (Puede ser más que una)

Respuestas



1. Q,K

2. Q,K

3. Q

4. Q,P

5. Q

6. Q,T

7. Q,T

8. Q,P,H

9. Q,P

10. Q,P,H,R,S

11. Q,P

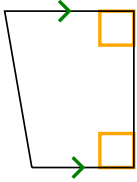
12. Q,P,R



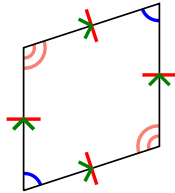
Determina si la figura mostrada es un Cuadrilátero, Cometa, Trapezoide, Paralelogramo, Romboide, Rectángulo o Cuadrado (Puede ser más que una)

Respuestas


1)



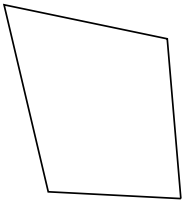
2)



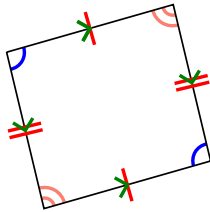
3)



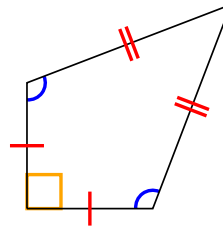
4)



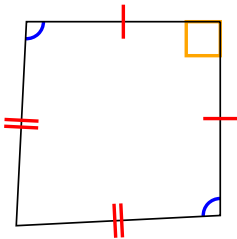
5)



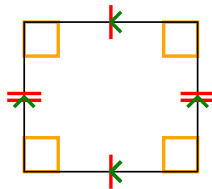
6)



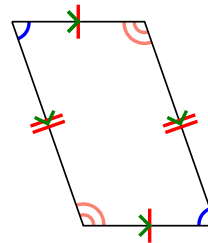
7)



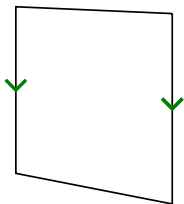
8)



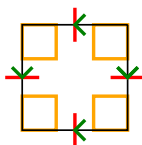
9)




10)



11)



12)

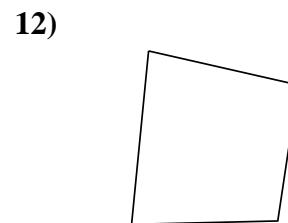
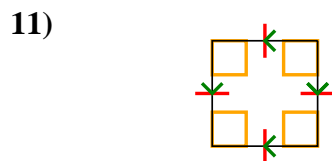
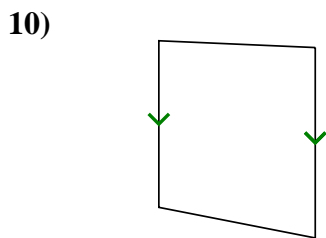
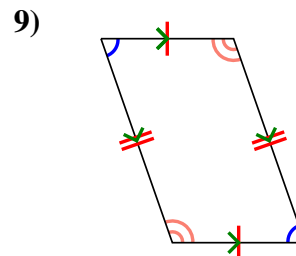
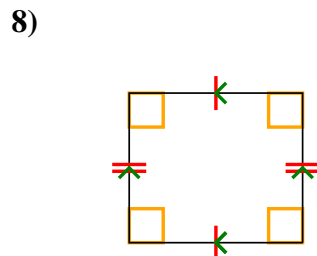
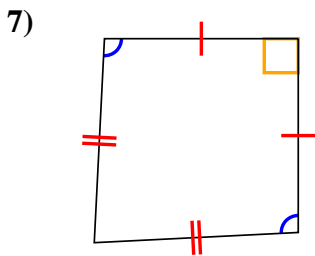
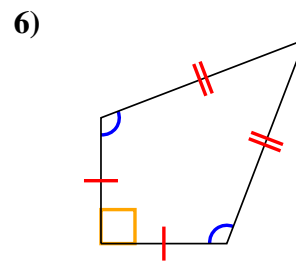
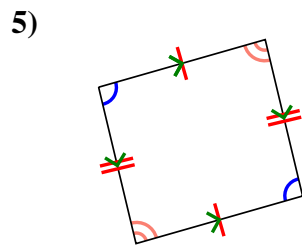
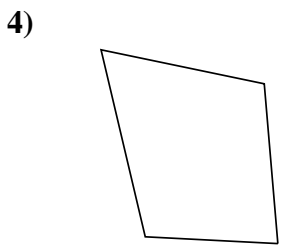
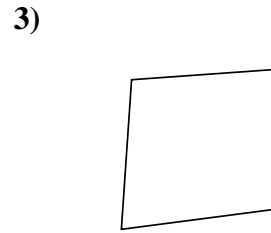
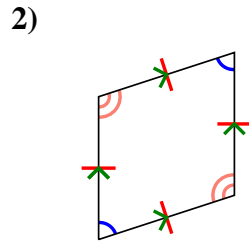
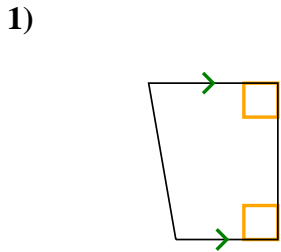


- 1. _____
- 2. _____
- 3. _____
- 4. _____
- 5. _____
- 6. _____
- 7. _____
- 8. _____
- 9. _____
- 10. _____
- 11. _____
- 12. _____



Determina si la figura mostrada es un Cuadrilátero, Cometa, Trapezoide, Paralelogramo, Romboide, Rectángulo o Cuadrado (Puede ser más que una)

Respuestas



1. Q,T

2. Q,P,H

3. Q

4. Q

5. Q,P

6. Q,K

7. Q,K

8. Q,P,R

9. Q,P

10. Q,T

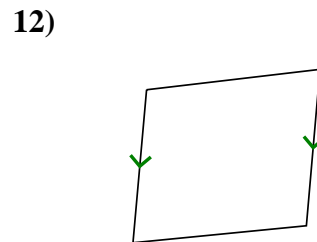
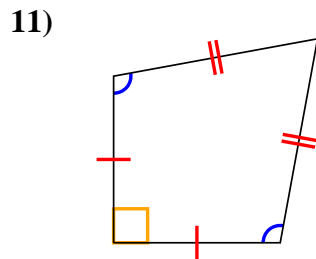
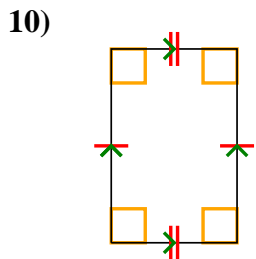
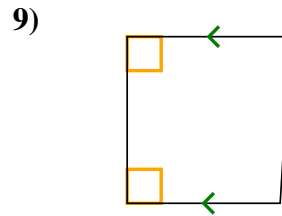
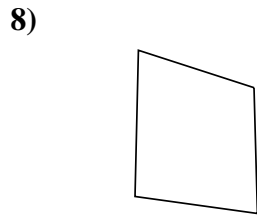
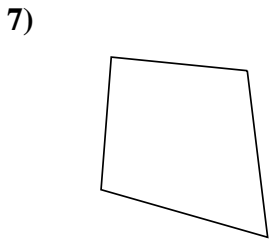
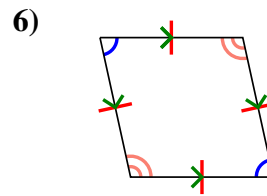
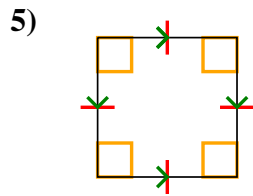
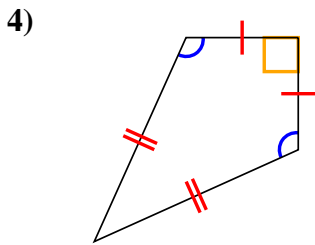
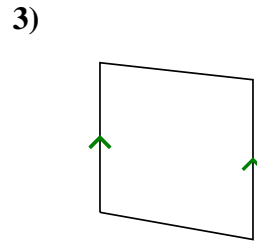
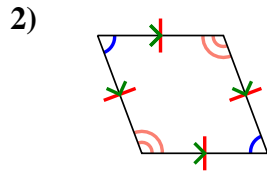
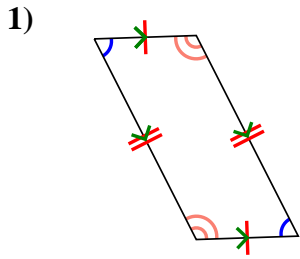
11. Q,P,H,R,S

12. Q



Determina si la figura mostrada es un Cuadrilátero, Cometa, Trapezoide, Paralelogramo, Romboide, Rectángulo o Cuadrado (Puede ser más que una)

Respuestas

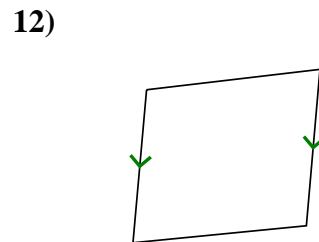
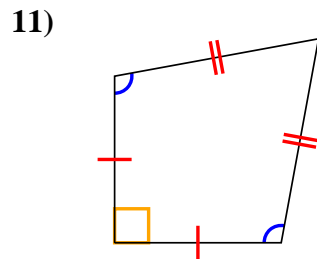
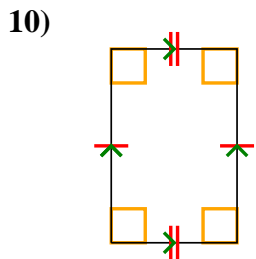
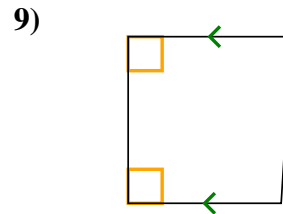
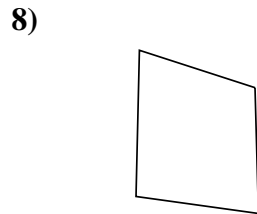
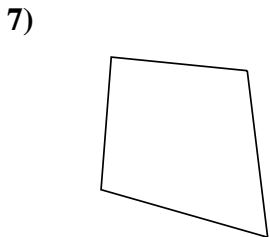
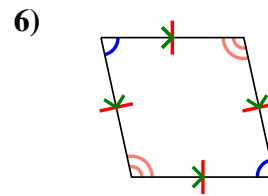
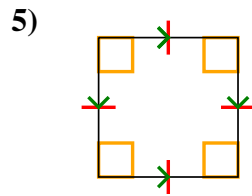
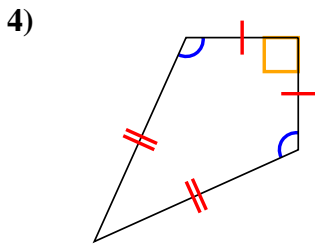
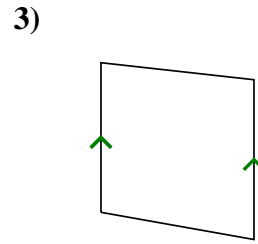
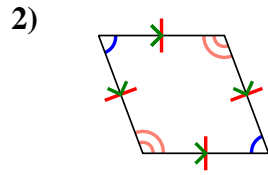
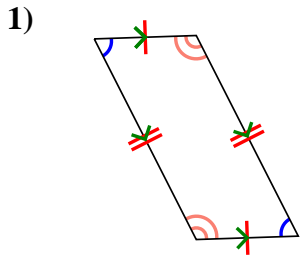


1. _____
2. _____
3. _____
4. _____
5. _____
6. _____
7. _____
8. _____
9. _____
10. _____
11. _____
12. _____



Determina si la figura mostrada es un Cuadrilátero, Cometa, Trapezoide, Paralelogramo, Romboide, Rectángulo o Cuadrado (Puede ser más que una)

Respuestas



1. Q,P

2. Q,P,H

3. Q,T

4. Q,K

5. Q,P,H,R,S

6. Q,P,H

7. Q

8. Q

9. Q,T

10. Q,P,R

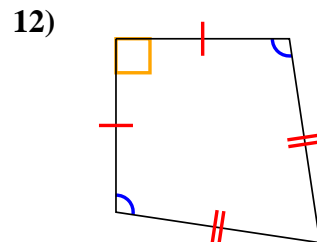
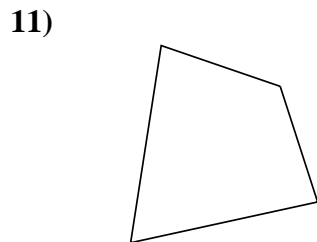
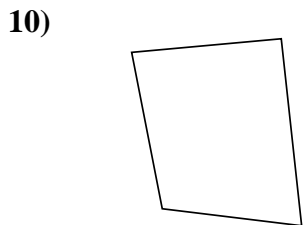
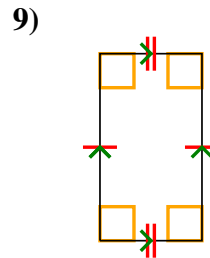
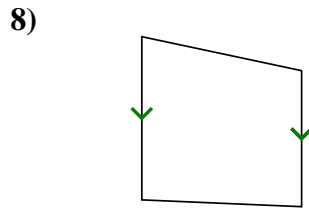
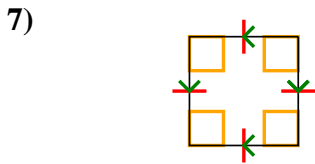
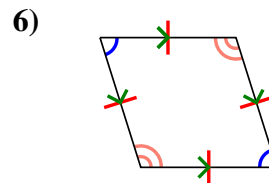
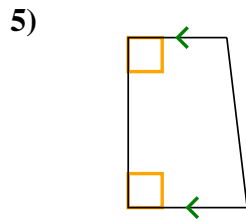
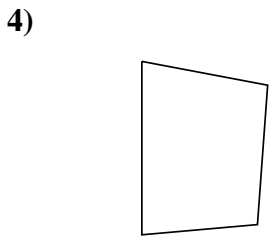
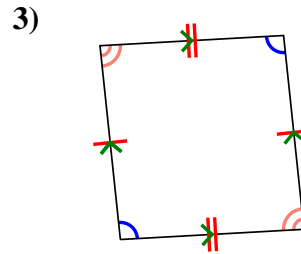
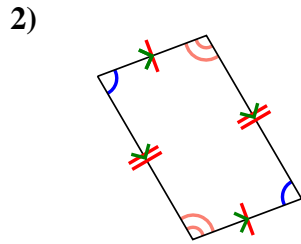
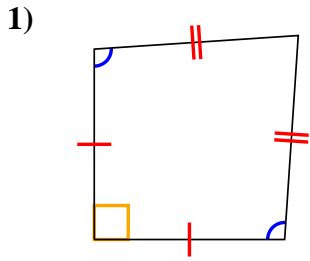
11. Q,K

12. Q,T



Determina si la figura mostrada es un Cuadrilátero, Cometa, Trapezoide, Paralelogramo, Romboide, Rectángulo o Cuadrado (Puede ser más que una)

Respuestas

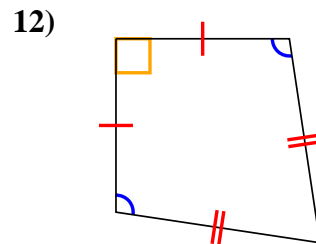
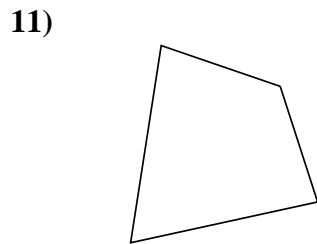
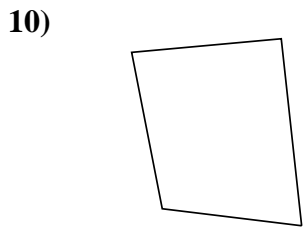
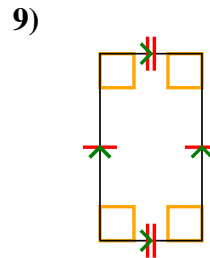
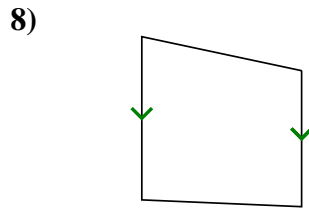
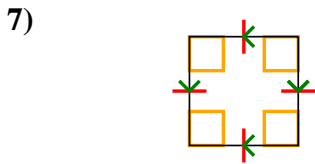
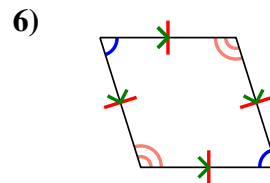
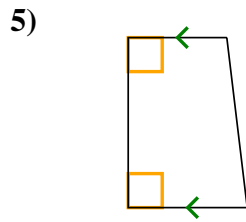
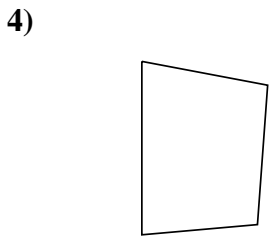
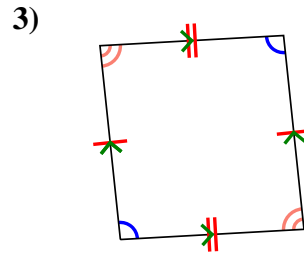
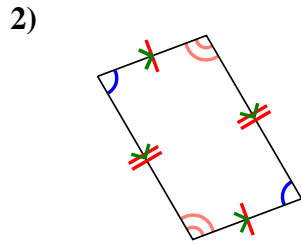
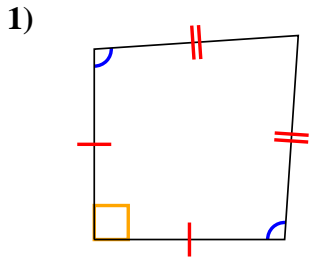


1. _____
2. _____
3. _____
4. _____
5. _____
6. _____
7. _____
8. _____
9. _____
10. _____
11. _____
12. _____



Determina si la figura mostrada es un Cuadrilátero, Cometa, Trapezoide, Paralelogramo, Romboide, Rectángulo o Cuadrado (Puede ser más que una)

Respuestas



1. Q,K

2. Q,P

3. Q,P

4. Q

5. Q,T

6. Q,P,H

7. Q,P,H,R,S

8. Q,T

9. Q,P,R

10. Q

11. Q

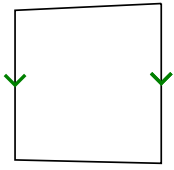
12. Q,K



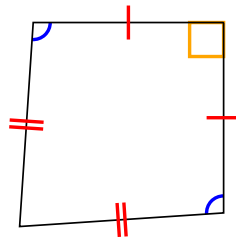
Determina si la figura mostrada es un Cuadrilátero, Cometa, Trapezoide, Paralelogramo, Romboide, Rectángulo o Cuadrado (Puede ser más que una)

Respuestas

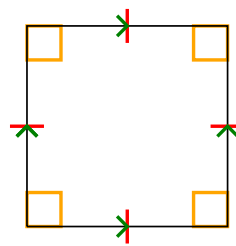
1)



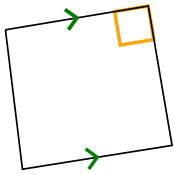
2)



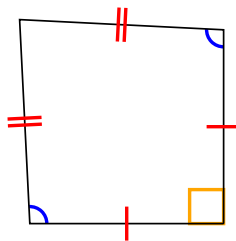
3)



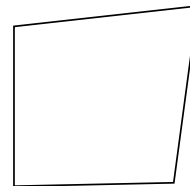
4)



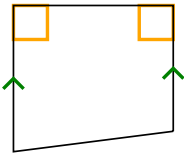
5)



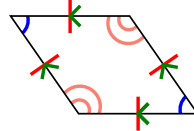
6)



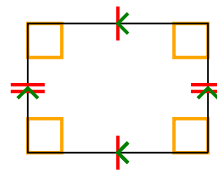
7)



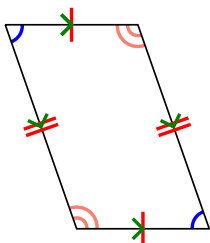
8)



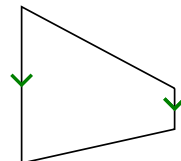
9)



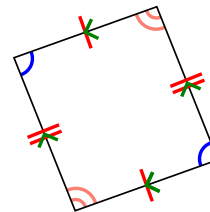
10)



11)



12)

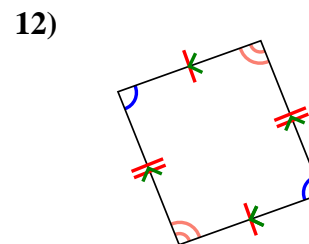
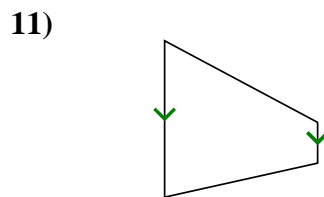
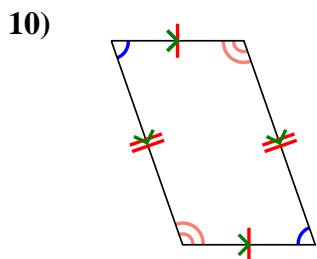
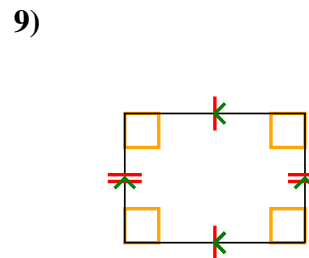
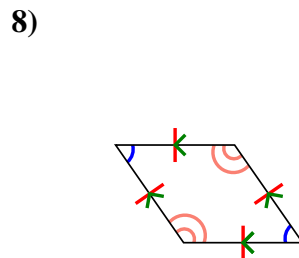
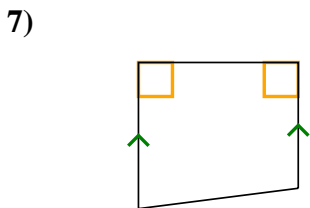
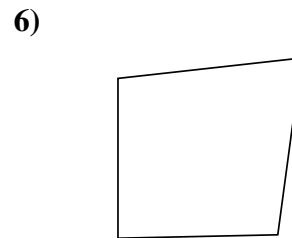
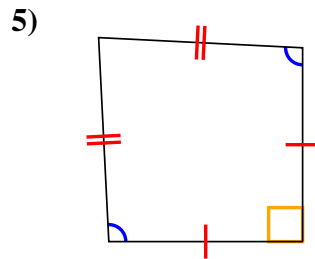
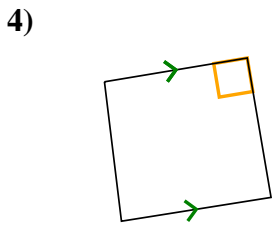
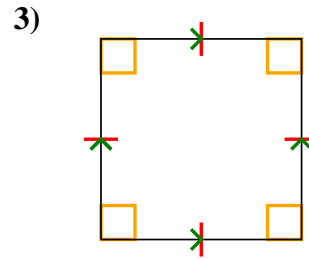
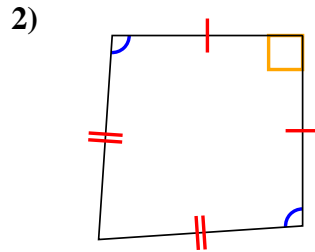
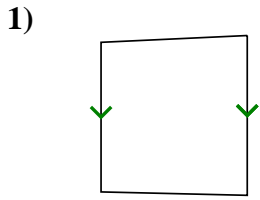


- 1. _____
- 2. _____
- 3. _____
- 4. _____
- 5. _____
- 6. _____
- 7. _____
- 8. _____
- 9. _____
- 10. _____
- 11. _____
- 12. _____



Determina si la figura mostrada es un Cuadrilátero, Cometa, Trapezoide, Paralelogramo, Romboide, Rectángulo o Cuadrado (Puede ser más que una)

Respuestas



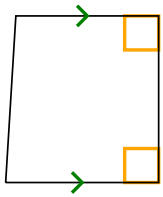
- 1. Q,T
- 2. Q,K
- 3. Q,P,H,R,S
- 4. Q,T
- 5. Q,K
- 6. Q
- 7. Q,T
- 8. Q,P,H
- 9. Q,P,R
- 10. Q,P
- 11. Q,T
- 12. Q,P



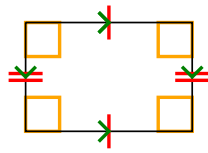
Determina si la figura mostrada es un Cuadrilátero, Cometa, Trapezoide, Paralelogramo, Romboide, Rectángulo o Cuadrado (Puede ser más que una)

Respuestas


1)



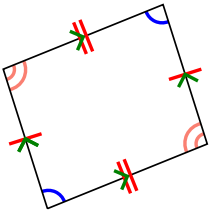
2)



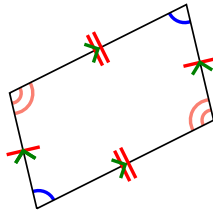
3)



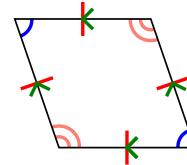
4)



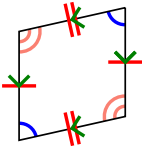
5)



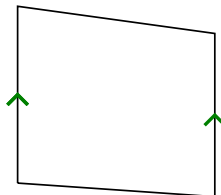
6)



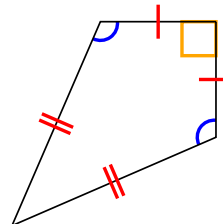
7)



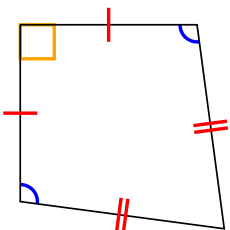
8)



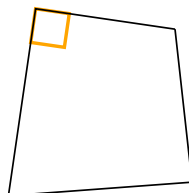
9)




10)



11)



12)

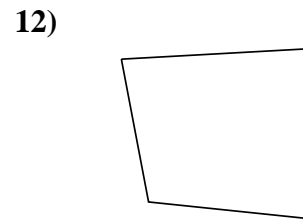
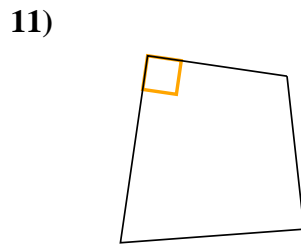
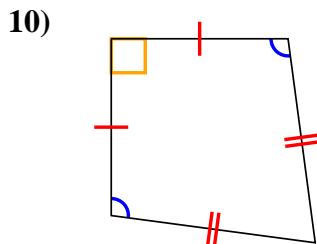
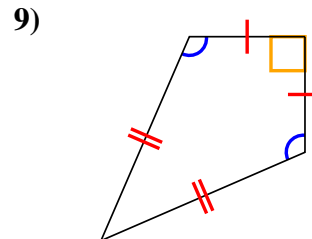
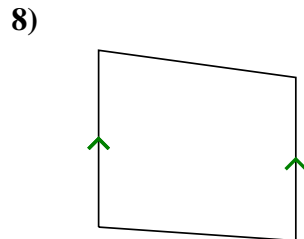
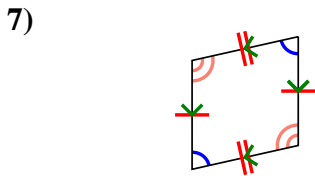
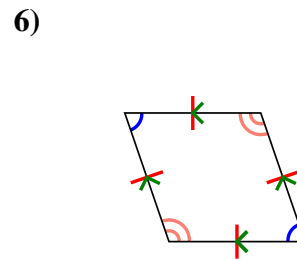
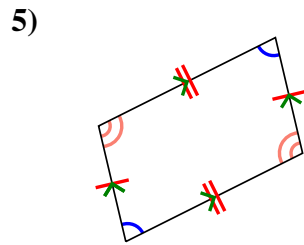
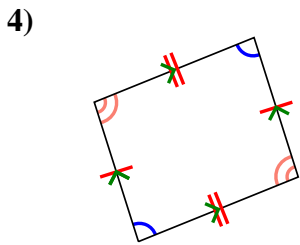
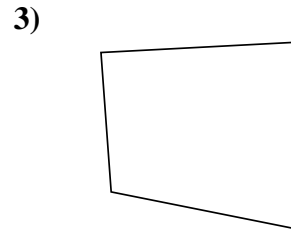
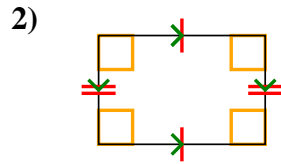
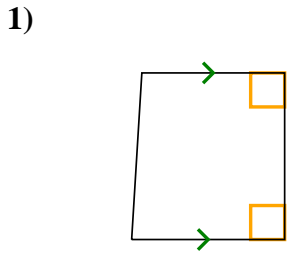


1. _____
2. _____
3. _____
4. _____
5. _____
6. _____
7. _____
8. _____
9. _____
10. _____
11. _____
12. _____



Determina si la figura mostrada es un Cuadrilátero, Cometa, Trapezoide, Paralelogramo, Romboide, Rectángulo o Cuadrado (Puede ser más que una)

Respuestas



1. Q,T

2. Q,P,R

3. Q

4. Q,P

5. Q,P

6. Q,P,H

7. Q,P

8. Q,T

9. Q,K

10. Q,K

11. Q

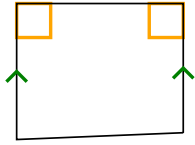
12. Q



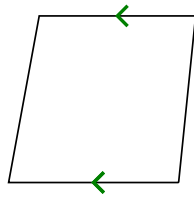
Determina si la figura mostrada es un Cuadrilátero, Cometa, Trapezoide, Paralelogramo, Romboide, Rectángulo o Cuadrado (Puede ser más que una)

Respuestas


1)



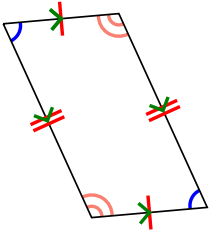
2)



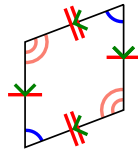
3)



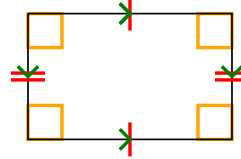
4)



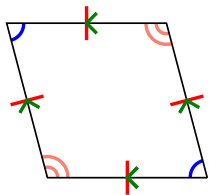
5)



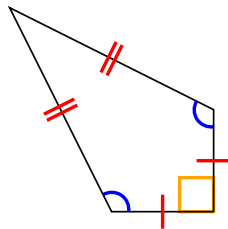
6)



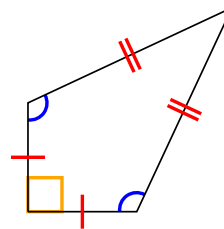
7)



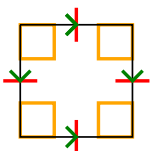
8)



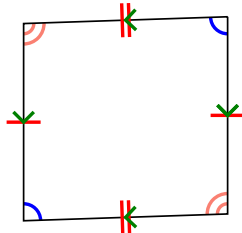
9)




10)



11)



12)

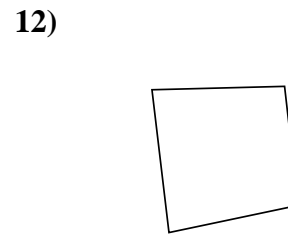
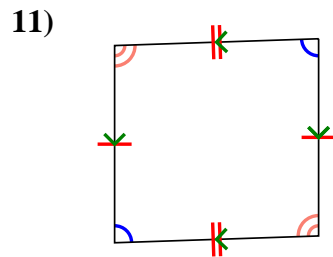
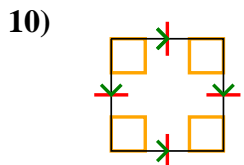
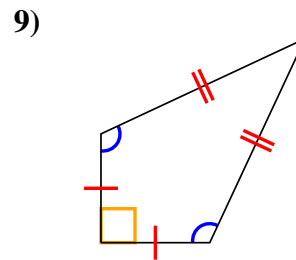
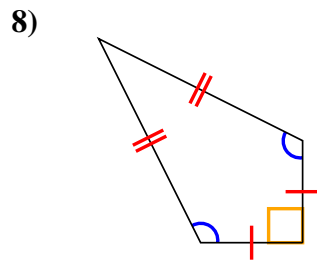
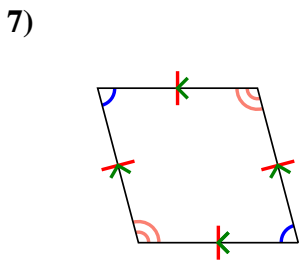
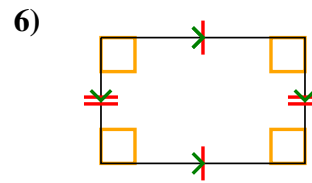
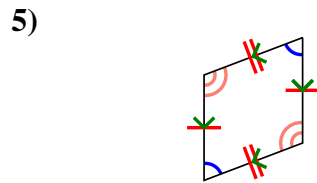
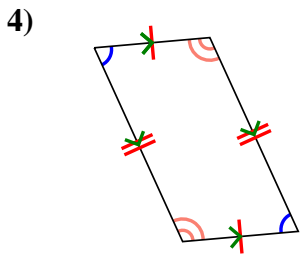
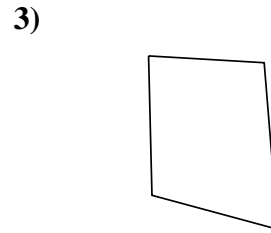
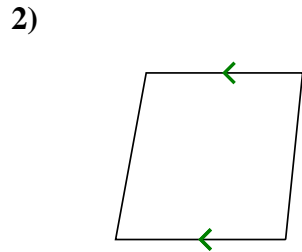
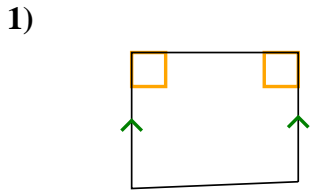


1. _____
2. _____
3. _____
4. _____
5. _____
6. _____
7. _____
8. _____
9. _____
10. _____
11. _____
12. _____



Determina si la figura mostrada es un Cuadrilátero, Cometa, Trapezoide, Paralelogramo, Romboide, Rectángulo o Cuadrado (Puede ser más que una)

Respuestas



1. Q,T

2. Q,T

3. Q

4. Q,P

5. Q,P

6. Q,P,R

7. Q,P,H

8. Q,K

9. Q,K

10. Q,P,H,R,S

11. Q,P

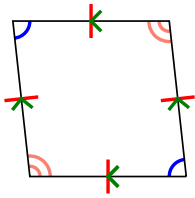
12. Q



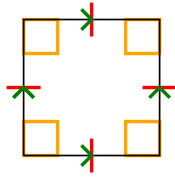
Determina si la figura mostrada es un Cuadrilátero, Cometa, Trapezoide, Paralelogramo, Romboide, Rectángulo o Cuadrado (Puede ser más que una)

Respuestas

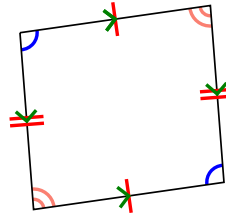
1)



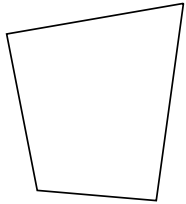
2)



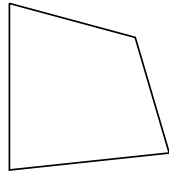
3)



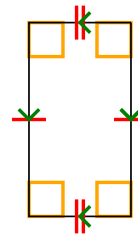
4)



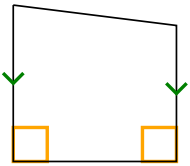
5)



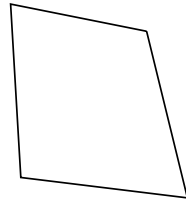
6)



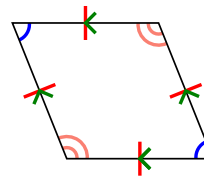
7)



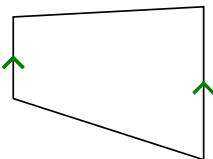
8)



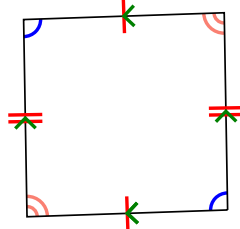
9)



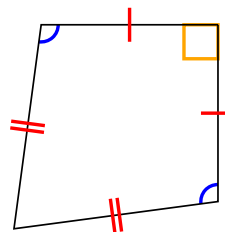
10)



11)



12)

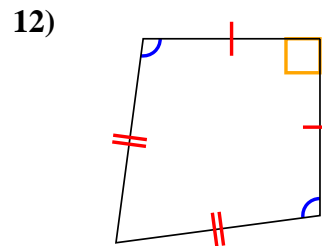
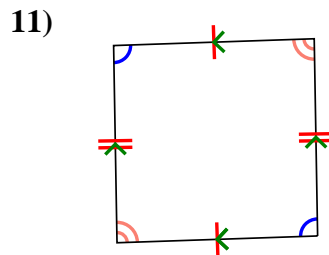
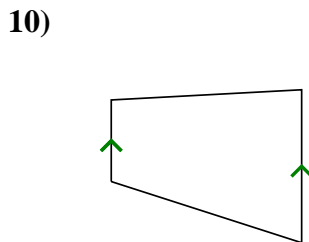
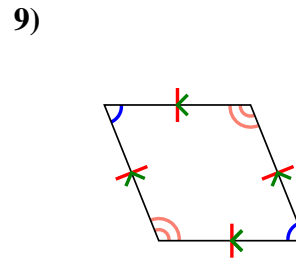
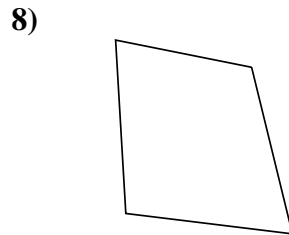
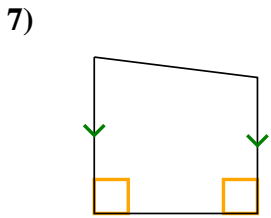
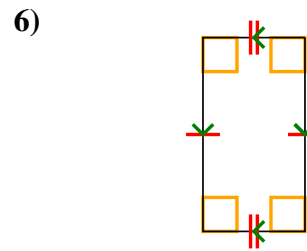
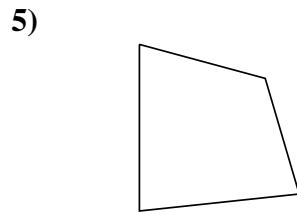
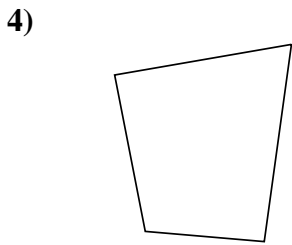
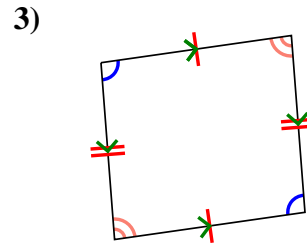
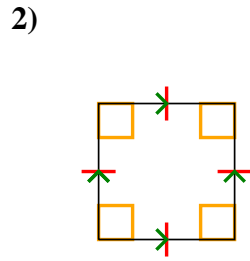
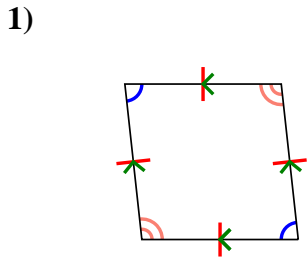


1. _____
2. _____
3. _____
4. _____
5. _____
6. _____
7. _____
8. _____
9. _____
10. _____
11. _____
12. _____



Determina si la figura mostrada es un Cuadrilátero, Cometa, Trapezoide, Paralelogramo, Romboide, Rectángulo o Cuadrado (Puede ser más que una)

Respuestas



1. Q,P,H

2. Q,P,H,R,S

3. Q,P

4. Q

5. Q

6. Q,P,R

7. Q,T

8. Q

9. Q,P,H

10. Q,T

11. Q,P

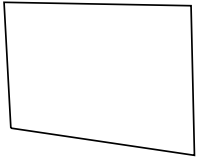
12. Q,K



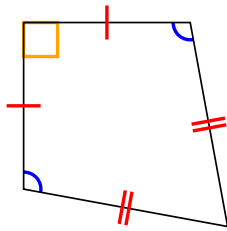
Determina si la figura mostrada es un Cuadrilátero, Cometa, Trapezoide, Paralelogramo, Romboide, Rectángulo o Cuadrado (Puede ser más que una)

Respuestas

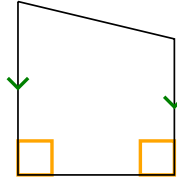
1)



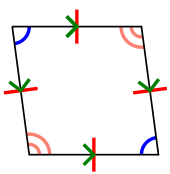
2)



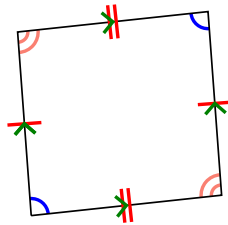
3)



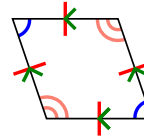
4)



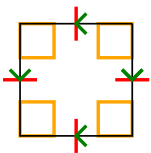
5)



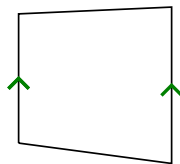
6)



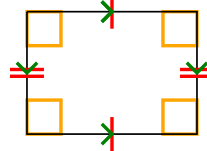
7)



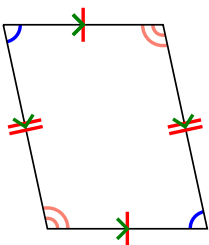
8)



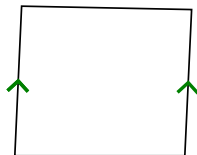
9)



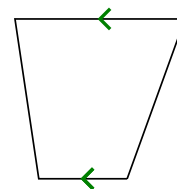
10)



11)



12)

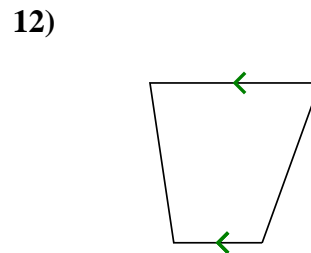
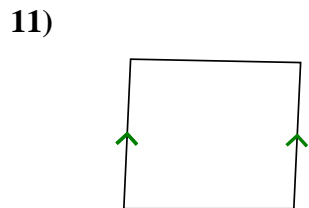
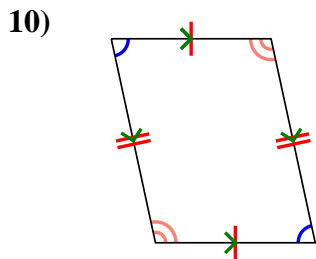
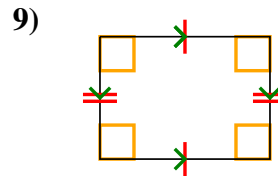
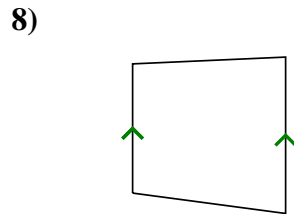
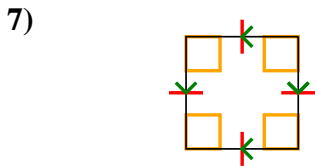
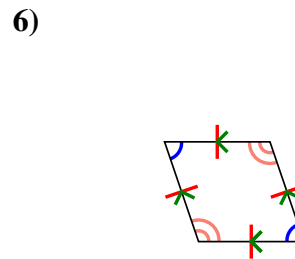
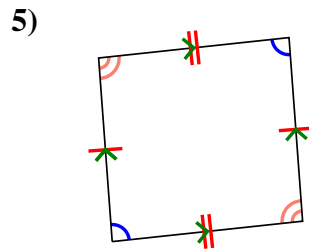
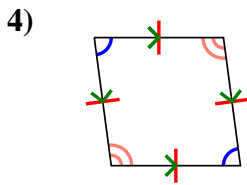
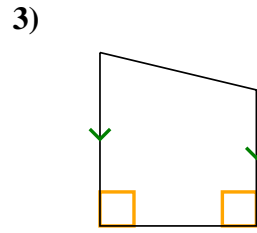
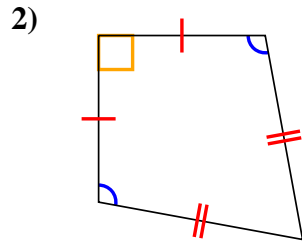



- 1. _____
- 2. _____
- 3. _____
- 4. _____
- 5. _____
- 6. _____
- 7. _____
- 8. _____
- 9. _____
- 10. _____
- 11. _____
- 12. _____



Determina si la figura mostrada es un Cuadrilátero, Cometa, Trapezoide, Paralelogramo, Romboide, Rectángulo o Cuadrado (Puede ser más que una)

Respuestas



1. Q

2. Q,K

3. Q,T

4. Q,P,H

5. Q,P

6. Q,P,H

7. Q,P,H,R,S

8. Q,T

9. Q,P,R

10. Q,P

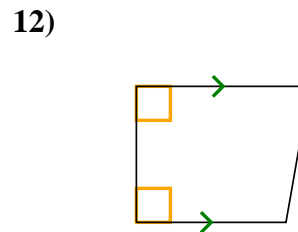
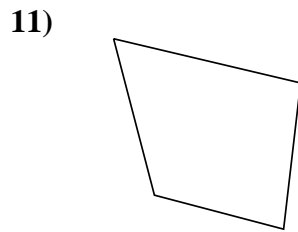
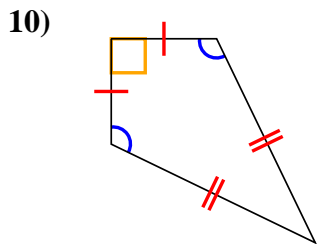
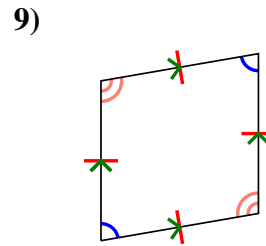
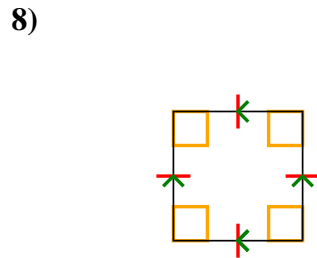
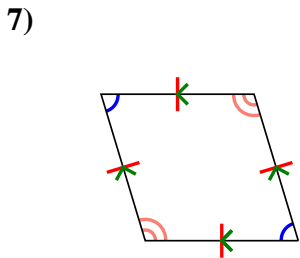
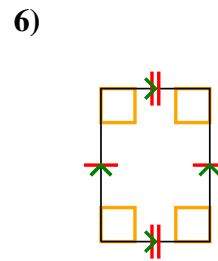
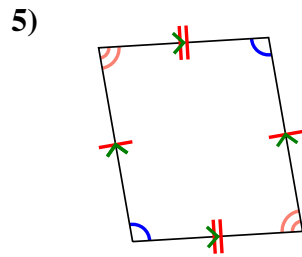
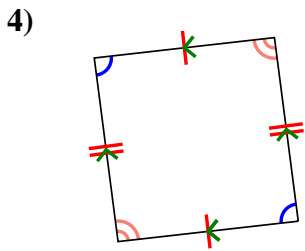
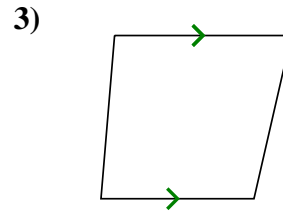
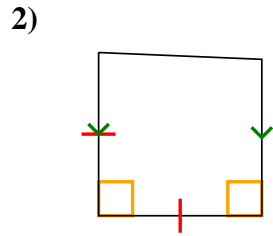
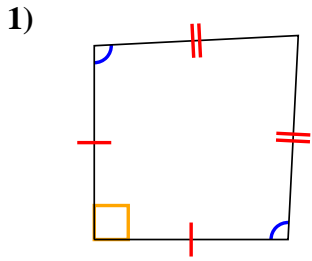
11. Q,T

12. Q,T



Determina si la figura mostrada es un Cuadrilátero, Cometa, Trapezoide, Paralelogramo, Romboide, Rectángulo o Cuadrado (Puede ser más que una)

Respuestas

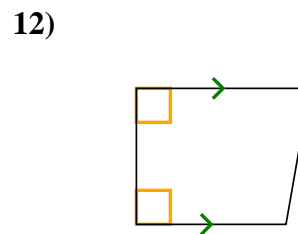
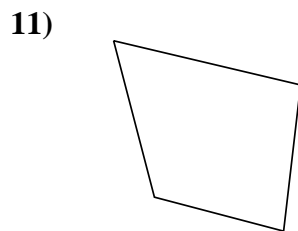
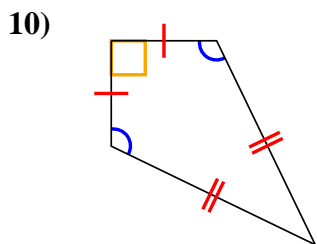
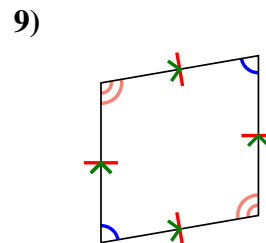
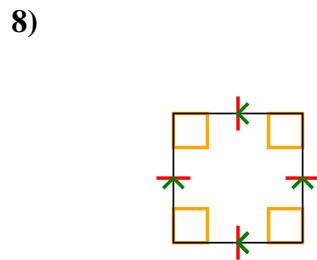
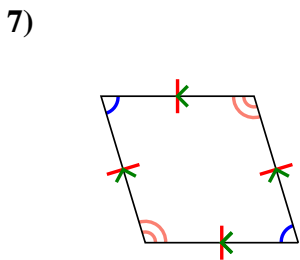
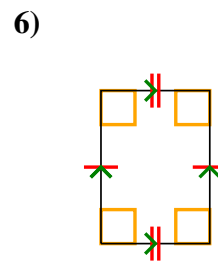
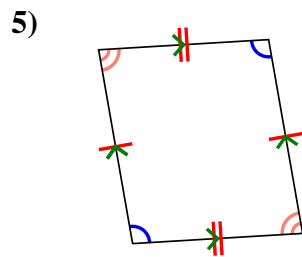
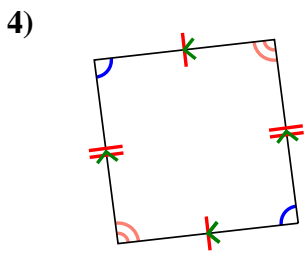
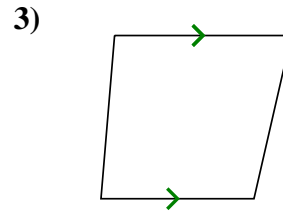
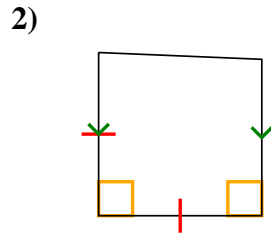
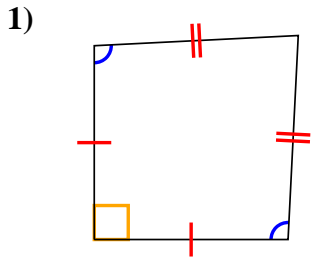


1. _____
2. _____
3. _____
4. _____
5. _____
6. _____
7. _____
8. _____
9. _____
10. _____
11. _____
12. _____



Determina si la figura mostrada es un Cuadrilátero, Cometa, Trapezoide, Paralelogramo, Romboide, Rectángulo o Cuadrado (Puede ser más que una)

Respuestas



1. Q,K

2. Q,T

3. Q,T

4. Q,P

5. Q,P

6. Q,P,R

7. Q,P,H

8. Q,P,H,R,S

9. Q,P,H

10. Q,K

11. Q

12. Q,T