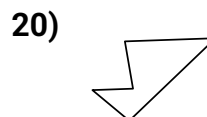
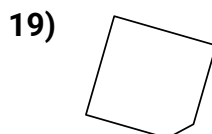
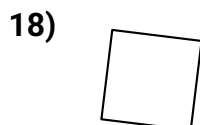
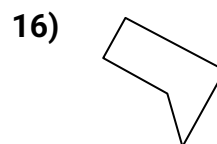
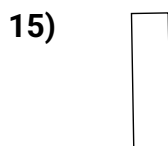
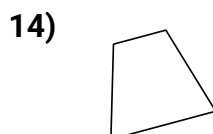
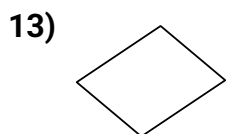
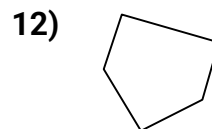
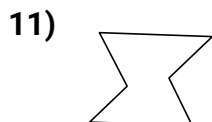
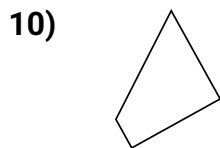
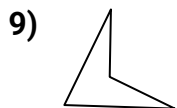
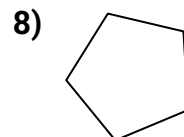
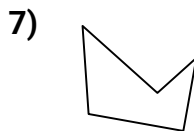
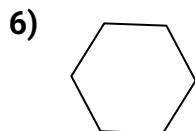
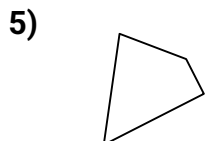
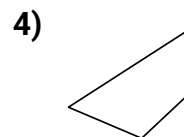
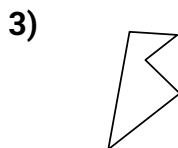
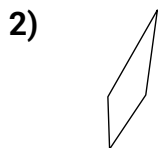
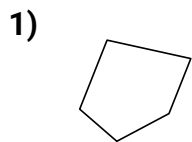




Determinar si la forma mostrada es un cuadrilátero (sí) o no (no).

Respuestas

1. _____

2. _____

3. _____

4. _____

5. _____

6. _____

7. _____

8. _____

9. _____

10. _____

11. _____

12. _____

13. _____

14. _____

15. _____

16. _____

17. _____

18. _____

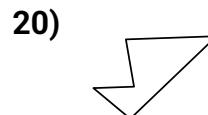
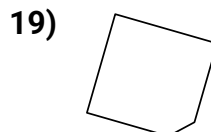
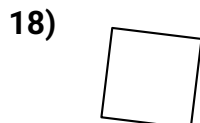

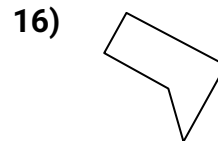
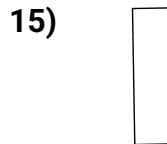
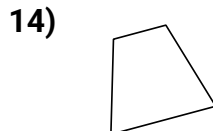
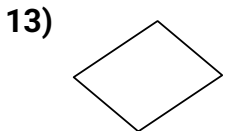
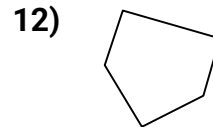
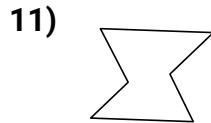
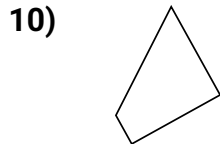
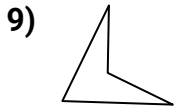
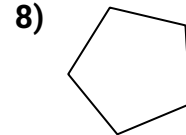
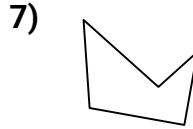
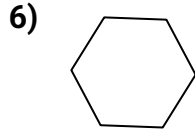
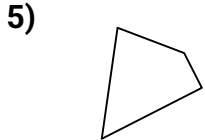
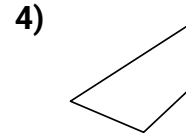
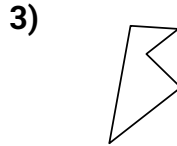
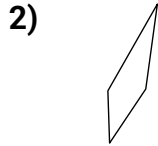
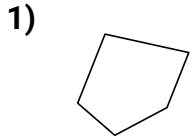
19. _____

20. _____



Determinar si la forma mostrada es un cuadrilátero (si) o no (no).

Respuestas



1. **no**
2. **si**
3. **no**
4. **si**
5. **si**
6. **no**
7. **no**
8. **no**
9. **si**
10. **si**
11. **no**
12. **no**
13. **si**
14. **si**
15. **si**
16. **no**
17. **no**
18. **si**
19. **no**
20. **no**