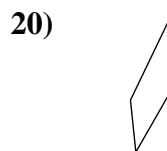
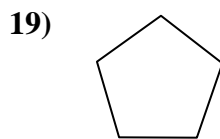
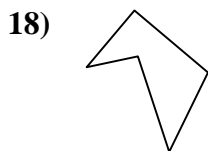
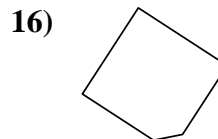
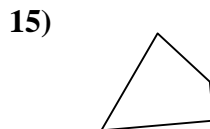
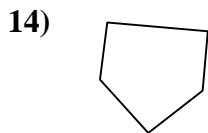
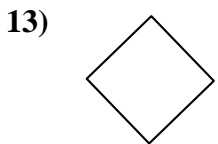
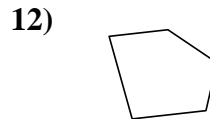
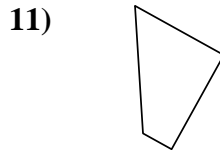
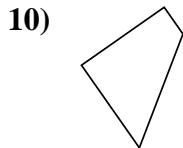
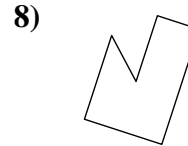
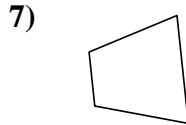
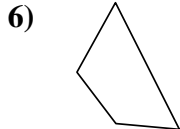
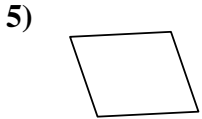
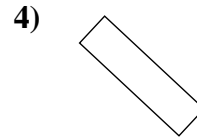
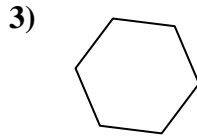
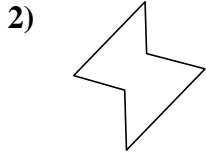
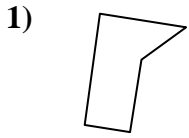




Determinar si la forma mostrada es un cuadrilátero (sí) o no (no).

Respuestas



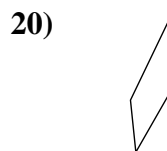
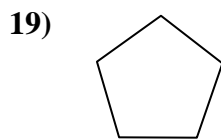
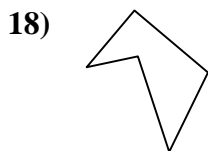
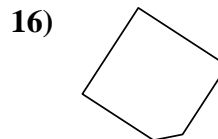
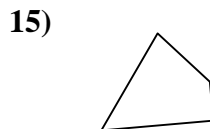
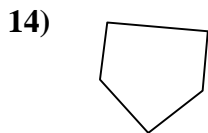
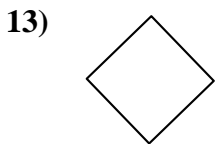
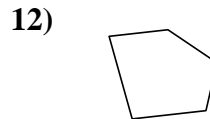
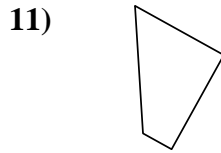
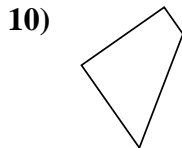
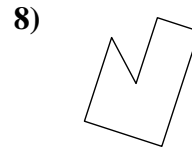
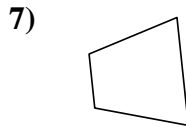
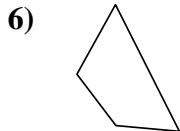
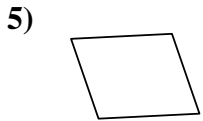
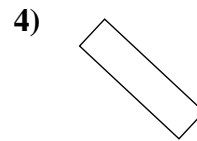
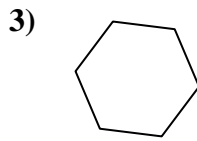
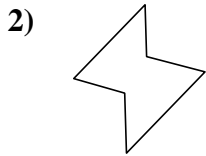
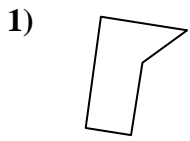
- 1. _____
- 2. _____
- 3. _____
- 4. _____
- 5. _____
- 6. _____
- 7. _____
- 8. _____
- 9. _____
- 10. _____
- 11. _____
- 12. _____
- 13. _____
- 14. _____
- 15. _____
- 16. _____
- 17. _____
- 18. _____
- 19. _____
- 20. _____

1-10	95	90	85	80	75	70	65	60	55	50
11-20	45	40	35	30	25	20	15	10	5	0



Determinar si la forma mostrada es un cuadrilátero (si) o no (no).

Respuestas



1. no

2. no

3. no

4. si

5. si

6. si

7. si

8. no

9. si

10. si

11. si

12. no

13. si

14. no

15. si

16. no

17. no

18. no

19. no

20. si