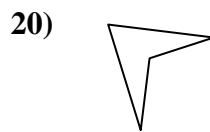
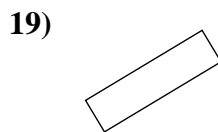
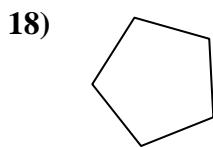

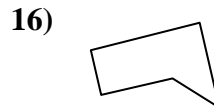
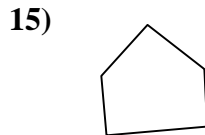
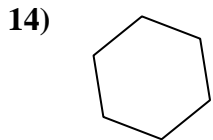
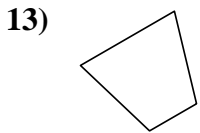
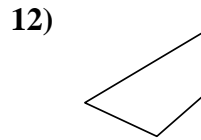
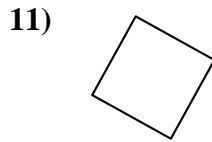
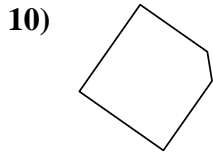
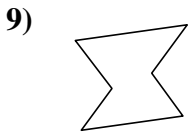
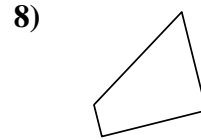
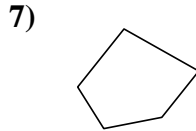
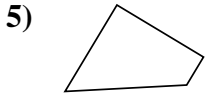
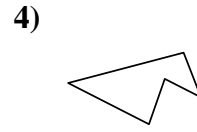
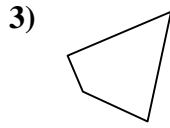
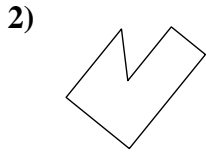
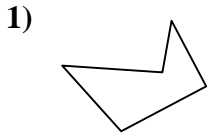




Determinar si la forma mostrada es un cuadrilátero (sí) o no (no).

**Respuestas**



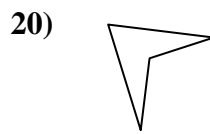
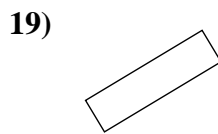
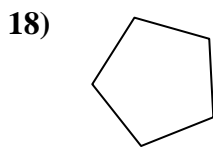

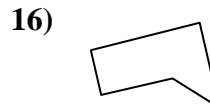
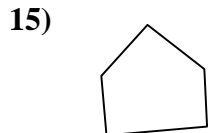
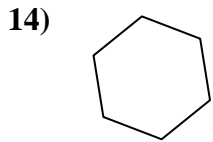
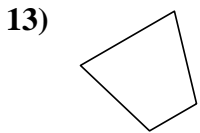
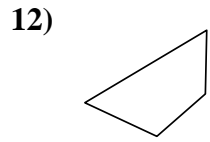
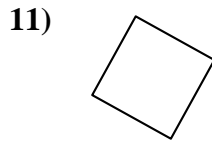
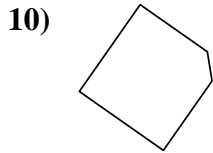
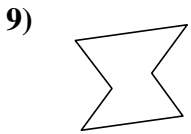
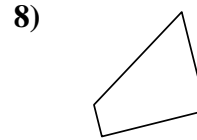
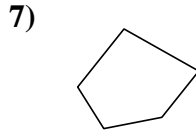
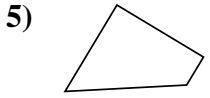
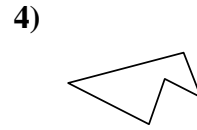
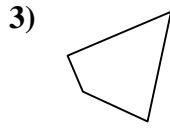
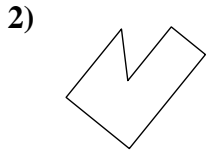
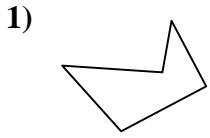
1. \_\_\_\_\_
2. \_\_\_\_\_
3. \_\_\_\_\_
4. \_\_\_\_\_
5. \_\_\_\_\_
6. \_\_\_\_\_
7. \_\_\_\_\_
8. \_\_\_\_\_
9. \_\_\_\_\_
10. \_\_\_\_\_
11. \_\_\_\_\_
12. \_\_\_\_\_
13. \_\_\_\_\_
14. \_\_\_\_\_
15. \_\_\_\_\_
16. \_\_\_\_\_
17. \_\_\_\_\_
18. \_\_\_\_\_
19. \_\_\_\_\_
20. \_\_\_\_\_

1-10	95	90	85	80	75	70	65	60	55	50
11-20	45	40	35	30	25	20	15	10	5	0



Determinar si la forma mostrada es un cuadrilátero (si) o no (no).

**Respuestas**



1. no

2. no

3. si

4. no

5. si

6. si

7. no

8. si

9. no

10. no

11. si

12. si

13. si

14. no

15. no

16. no

17. si

18. no

19. si

20. si